

**A new treatise on the use of the globes, or a philosophical view of the earth and heavens / [Thomas Keith].**

**Contributors**

Keith, Thomas, 1759-1824.

**Publication/Creation**

London : The author, Longman, etc., 1808.

**Persistent URL**

<https://wellcomecollection.org/works/synmz3a2>


**License and attribution**

This work has been identified as being free of known restrictions under copyright law, including all related and neighbouring rights and is being made available under the Creative Commons, Public Domain Mark.

You can copy, modify, distribute and perform the work, even for commercial purposes, without asking permission.



Wellcome Collection  
183 Euston Road  
London NW1 2BE UK  
T +44 (0)20 7611 8722  
E [library@wellcomecollection.org](mailto:library@wellcomecollection.org)  
<https://wellcomecollection.org>



30926/A

33461

A  
NEW TREATISE  
ON THE  
USE OF THE GLOBES,  
OR  
A PHILOSOPHICAL VIEW  
OF THE  
EARTH AND HEAVENS:

COMPREHENDING,  
AN ACCOUNT OF THE FIGURE, MAGNITUDE, AND MOTION OF  
THE EARTH; WITH THE NATURAL CHANGES OF ITS SURFACE,  
CAUSED BY FLOODS, EARTHQUAKES, &c. TOGETHER WITH THE  
ELEMENTARY PRINCIPLES OF METEOROLOGY, AND ASTRONOMY;  
THE THEORY OF THE TIDES, &c.

PRECEDED BY  
An extensive Selection of astronomical, and other Definitions; and il-  
lustrated by a great Variety of Problems, Questions for the Examina-  
tion of the Student, &c.

*DESIGNED FOR THE INSTRUCTION OF YOUTH.*

---

---

BY THOMAS KEITH,

PRIVATE TEACHER OF MATHEMATICS, GEOGRAPHY, &c.

---

---

The SECOND EDITION, corrected and improved.

LONDON.

PRINTED FOR THE AUTHOR; LONGMAN, HURST, REES, AND ORME,  
PATERNOSTER-RROW; AND C. LAW, AVE-MARIA LANE.

1808.



Strahan and Preston,  
Printers-Street, London.

## PREFACE.

---

**A**MONGST the various branches of science studied in our academies, and places of public education, there are few of greater importance than that of the Use of the Globes. The earth is our destined habitation, and the heavenly bodies measure our days and years by their various revolutions. Without some acquaintance with the different tracts of land, the oceans, seas, &c. on the surface of the terrestrial globe, no intercourse could be carried on with the inhabitants of distant regions, and consequently their manners, customs, &c. would be totally unknown to us. Though the different tracts of land, &c. cannot be so minutely described on the surface of a terrestrial globe as on different maps; yet the globe shews the figure of the earth, and the relative situations of the principal places on its surface, more correctly than a map. Had the ancients paid no attention to the motions of the heavenly bodies, historical facts would have been given without dates,

and we should have had neither dials, clocks, nor watches. To the celestial observations of Eudoxus, Hipparchus, &c. we are indebted for the knowledge of the precession of the equinoxes. Without some acquaintance with the celestial bodies our ideas of the power and wisdom of the Creator would be greatly circumscribed and confined. The learned and pious Dr. Watts observes, “What wonders of wisdom are  
 “ seen in the exact regularity of the revolutions of  
 “ the heavenly bodies ! Nor was there ever any thing  
 “ that has contributed to enlarge my apprehensions of  
 “ the immense power of God, the magnificence of  
 “ his creation, and his own transcendent grandeur,  
 “ so much as the little portion of astronomy which I  
 “ have been able to attain. And I would not only  
 “ recommend it to young students, for the same pur-  
 “ poses, but I would persuade all mankind, if it were  
 “ possible, to gain some degree of acquaintance with  
 “ the vastness, the distances, and the motions of the  
 “ planetary worlds, on the same account ”

Dr. Young in his Night Thoughts says,

“ An undevout astronomer is mad.”

There is scarcely a writer on the different branches of education who has not expressly recommended the study of the globes. Milton observes that “ Ere half  
 “ the

“ the school-authors be read, it will be reasonable  
 “ for youth to learn the use of the globes.” Yet  
 notwithstanding the importance of the subject, it is  
 entirely neglected in our public schools : and in many  
 of our private academies it has been frequently im-  
 perfectly taught ; probably for want of a treatise  
 sufficiently comprehensive in its object, and illustrated  
 by a suitable number of examples.

There are several treatises on the globes extant, but  
 they have been chiefly written by mathematical in-  
 strument makers \*, or by teachers unacquainted with  
 mathematics. The works of the former must be de-  
 fective for want of practice in the art of teaching ;  
 and many of the productions of the latter are too  
 puerile and trifling to be introduced into a respectable  
 academy. Youth learn nothing effectually but by  
 frequent repetition ; a multiplicity of examples there-  
 fore becomes absolutely necessary : but these examples  
 should be so varied, and the mode of proposing the  
 questions, so diversified as to give the scholar room  
 for the exertion of his faculties, or otherwise no im-  
 pression will remain on his mind. Treatises on the

---

\* The addition of a few wires, a semicircle of brass, a particular kind  
 of hour circle, &c. which are of no other use on the globe than to enhance  
 the price thereof, has generally been a sufficient inducement for the  
 instrument maker to publish a treatise explanatory of the use of such  
 addition.

globes are generally either without any practical exercises, or the exercises so similar, that when the pupil has finished one of them, the rest may be performed without the trouble of thinking. Examples of this kind may serve to pass away the time, but they will never instruct the scholar.

Had any mathematical writer of note furnished the student with a treatise on the globes, the following work would probably have never appeared; but it rarely happens that the man of science, whose whole time is employed in abstruse researches, will stoop to the humble task of accommodating himself to the capacity of a learner. To a man in the habit of contemplating the writings of a Newton, or travelling in the dry and difficult paths of abstract knowledge, a treatise on the globes is a mere play-thing, a trifle not worth notice; as at one glance he sees and comprehends every problem that can be performed by them. Such a man would acquire no credit by writing a Treatise on the Globes; for, notwithstanding the utility of the subject, its simplicity would leave no room for him to display his abilities; the task therefore, necessarily, devolves on writers of a more humble rank.

The

The ensuing treatise has been formed entirely from the practice of Instruction, and is arranged in the following order.

PART I. The contents of this part are enumerated in the first page of the work. The definitions are very extensive, and, it is hoped, sufficiently plain and clear. Where the name of any ancient author occurs, the time in which he flourished, and his country, are generally mentioned in a note; this practice is followed throughout the book. The table of climates has been newly calculated, and the principle of calculation is given at full length. The first chapter likewise contains a table of the constellations, with the fabulous history of several of them; the Greek alphabet, &c. If the definitions, geographical theorems, &c. in this chapter be well explained by the tutor, it is presumed that the scholar will derive considerable advantage. The *second chapter* contains the general properties of matter, and the laws of motion, as preparatory to the reading of the third and fourth chapters; which would otherwise be less intelligible. To the *third and fourth chapters* are added some useful notes, which ought to be attended to by those students who are acquainted with arithmetic. The *fifth chapter* treats of springs, rivers, and the saltness of the sea; the *sixth* of the tides; and the *seventh* of earthquakes,

quakes, &c. with their effects and causes. The *eighth chapter* contains, in a small compass, the principal theories of the earth. The subject of the *ninth chapter* is the atmosphere, and of the *tenth*, meteorology. From each of these chapters, it is hoped, the student will derive some useful information.

It has not been usual to introduce several of the aforesaid subjects into a Treatise on the Globes. An intelligent reader will, however, readily admit them to be less extraneous, equally entertaining, and more instructive than scraps of poetry, historical anecdotes, &c. with which some of our Treatises on the Globes abound. Poetical scraps seldom elucidate either mathematical or philosophical subjects, and generally divert the attention of the student from the main object of his pursuit.

PART II. This part comprehends the solar system, and such other parts of astronomy as are absolutely necessary to be clearly understood by the young student before he attempts to solve many of the problems in the succeeding parts of the subject in learning the Use of the Globe. It illustrates some of the most important branches of geography and astronomy; and this object cannot be attained by merely twirling the globe round and working a few problems, without understanding the prin-

principles on which their solutions are founded. Lessons thoroughly explained and clearly understood, make a lasting impression on the student's memory, and will enable him, not only to solve such problems as he may meet with in books on the Globes, but to frame several new problems himself, and to solve others which he never heard of before.

In the notes attached to this part of the following work, the distances, magnitudes, &c. of the planets are all accurately calculated. This laborious task the author would gladly have avoided, but he found the accounts of the distances, magnitudes, &c. of the planets so variable and contradictory, even in astronomical works of repute, and frequently in the same author, that he conceived such notes as he has introduced would be very useful to a learner.

PART III. Contains an extensive collection of Problems; illustrated by a great number of useful examples, many of which are elucidated with notes of considerable importance.

PART IV. Comprehends a miscellaneous selection of Problems, Questions for the examination of the student, &c. together with an extensive table of the latitudes and longitudes of places. This table will be found to be more correct than the generality of tables of a similar nature.

**To CONCLUDE.** The author apprehends that he has omitted nothing of importance that particularly relates to the subject, and he hopes, at the same time, that this work will be found to contain little or no extraneous matter. He has endeavoured to supply the young student with a Treatise on the Globes, which may not be unworthy of attention, as a work of science, yet sufficiently plain and intelligible. He is aware that the work would have been preferred by many teachers (on account of its cheapness) had all the matter from page 39 to 165 been left out, as it would then have contained the mere definitions and problems; yet in this state (though it would have been more comprehensive than almost any other Treatise) it would certainly have been very defective. To those who may object to the smallness of the type, the author has to observe, that had the work been printed on the same sized type as Adams', &c. it would have made a very large volume in octavo, consisting of at least six hundred pages; and the purposes for which it is designed would have been completely defeated; the price doubled, and the book, from its size rendered less convenient and useful.

1805.

From

---

From the favourable reception which the first edition of this work has met with, the author has been induced to revise the whole with the greatest care. A new plate has been delineated, shewing the path of the planet Jupiter in the zodiac, for the year 1811, together with the constellations and principal stars through which he passes, agreeably to their appearance in the Heavens. Delineations of this kind will not only prove amusing, but instructive to the scholar; they give a more correct idea of the relative situations of the stars than a globe, which is a convex surface, whereas the apparent surface of the heavens is concave; hence, those stars which appear towards the right-hand on the surface of the celestial globe, will be seen on the left-hand in the heavens, and the contrary.

By laying down on paper all the principal constellations from the celestial globe, as directed in problem CII; rejecting such stars as are smaller than those of the fourth magnitude, and those constellations which do not come above the horizon, the young student will soon render the appearance of the heavens familiar to him.





	Page.		Page.
Disc	37	Lynx	32
Diurnal Arch	38	Lyra	29
Draco	31	Mariner's Compass	9
Eccentricity	38	Meridians	3
Eclipse	38	Meridian, Brazen	2
Ecliptic	3	Meridian, First	3
Elongation	38	Microscopium	33
Equator	3	Milky Way	34
Equation of Time	13	Mons Mænalus	28
Equinoctial Points	8	Monoceros	33
Equulus	28	Nadir	8
Eridanus	32	Nebulous Stars	34
Eudoxus (note)	15	Nocturnal Arch	38
Fixed Stars	23	Nodes of a Planet	36
Force, Centrifugal	39	Noon, Apparent	12
Force, Centripetal	39	Noon, True or Mean	13
Galaxy	34	Oblique Ascension	21
Geocentric	37	Oblique Descension	21
Globe, Celestial	2	Occultation	38
Globe, Terrestrial	1	Orbit of a Planet	36
Great Circles	3	Orion	32
Greek Alphabet	35	Parallels of Celestial Latitude	10
Heliacal	23	Parallels of Declination	11
Heliocentric	37	Parallels of Latitude	6
Hemisphere	9	Pegasus	30
Hercules	29	Perigee	37
Hesiod (note)	15	Perihelion	38
Heteroscii	20	Periscii	20
Hipparchus (note)	11	Pæriæci	20
Historical Account of the Zo-		Perseus	31
diacal Signs	5	Piscis Australis	33
Horizon	6 and 7	Planets	36
Hour Circle and Circles	6 and 12	Pliny (note)	15
Hydra	33	Poetical rising and setting of the Stars	23
Lacerta	31	Points, Cardinal	8
Latitude of a Place	9	Polar Circles	6
Latitude of a Planet or Star	10	Polar Distance	11
Leo Minor	28	Polar Star (note)	2
Lepus	33	Poles of the Earth	2
Line of the Apfides	38	Pole of any Circle	8
Lines of Longitude	3	Positions of the Sphere	16
Longitude of a Place	10	Precession of the Equinoxes	15
Longitude of a Planet or Star	10	Prime Vertical	11
		Quadrant	

# CONTENTS.

xv

	Page.		Page.
Quadrant of Altitude	10	Transit	38
Refraction	21	Tropics	6
Retrograde	37	Twilight	25
Rhumbs	22	Variation of the Compass	9
Right Ascension	20	Vertical Circles	11
Robur Caroli	34	Via Lactea	34
Sagitta	30	Vulpecula et Anser	29
Scutum Sobieski	28	Urfa Major	30
Serpens	28	Year, Siderial	15
Serpentarius	28	Year, Solar	15
Sextans	33	Zenith	8
Six o'clock Hour Line	12	Zenith Distance	11
Small Circles	3	Zodiac	3
Solstitial Points	8	Zodiacal Signs, and an Historical Account thereof	4 and 5
Stationary	37	Zones	19
Taurus Poniatowski	28		
Triangulum	30		
Geographical Theorems	-		39
Of the General Properties of Matter and the Laws of Motion	-		43
Of the Figure of the Earth and its Magnitude	-		52
Of the Diurnal and Annual Motion of the Earth	-		58
Of the Origin of Springs and Rivers, and of the Saltnefs of the Sea	-		62
Of the Flux and Reflux of the Tides	-		72
Of the natural Changes of the Earth, caused by Mountains, Floods, Volcanoes, and Earthquakes	-		83
Hypotheses of the Antediluvian World, and the Cause of Noah's Flood	-		93
Dr. Burnet's Theory	-		93
Dr. Woodward's Theory	-		95
Mr. Whiston's Theory	-		96
Buffon's Theory	-		98
Dr. Hutton's Theory	-		101
Mr. Whitehurst's Theory	-		104
Of the Atmosphere, Air, Winds, and Hurricanes	-		107
Of Vapours	-		115
Fogs and Mists	-		116
Clouds	-		116
Dew	-		116
Rain	-		117
Snow and Hail	-		118
Thunder and Lightning	-		118
The Falling Stars	-		119
Of the Ignis Fatuus	-		120

Of

	Page
Of the Aurora Borealis	121
Of the Rainbow	122

---

## P A R T II.

Of the Solar System	126
Of the Sun	126
Of Mercury	128
Of Venus	131
Of the Earth and the Moon	134
Of Mars	142
Of the new Planets, Ceres, Pallas, Juno, and Vesta	144
Of Jupiter and his Satellites	145
Of Saturn, his Satellites and Ring	150
Of the Georgium Sidus and its Satellites	153
On Comets	155
Of the Elongations, &c. of the Interior Planets	156
Of the Stationary and Retrograde Appearances of the Exterior Planets	157
Of the Fixed Stars	158
Of Solar and Lunar Eclipses	161
General Observations on Eclipses	162
Number of Eclipses in a Year	163

---

## P A R T III.

## . PROBLEMS PERFORMED BY THE TERRESTRIAL GLOBE.

PROBLEM I. To find the Latitude of any given place	165
PROBLEM II. To find all those places which have the same Latitude as any given place	166
PROBLEM III. To find the Longitude of any place	166
PROBLEM IV. To find all those places that have the same Longitude as a given place	167
PROBLEM V. To find the Latitude and Longitude of any place	168
PROBLEM VI. To find any place, on the globe, having the Latitude and Longitude of that place given	168
PROBLEM VII. To find the difference of Latitude between any two places	169
PROBLEM VIII. To find the difference of Longitude between any two places	170

CONTENTS.

	xvii
	Page
PROBLEM IX. To find the Distance between any two places	171
PROBLEM X. A place being given on the Globe, to find all places which are situated at the same Distance from it as any other given place	175
PROBLEM XI. Given the Latitude of a place and its distance from a given place, to find that place whereof the Latitude is given	176
PROBLEM XII. Given the Longitude of a place and its distance from a given place, to find that place whereof the Longitude is given	177
PROBLEM XIII. To find how many Miles make a Degree of Longitude in any given parallel of Latitude	178
PROBLEM XIV. To find the bearing of one place from another	179
PROBLEM XV. To find the Angle of position between two places	180
PROBLEM XVI. To find the Antœci, Periœci, and Antipodes of any place	182
PROBLEM XVII. To find at what rate per hour the inhabitants of any given place are carried from West to East, by the Revolution of the Earth on its Axis	183
PROBLEM XVIII. A particular place and the hour of the day at that place being given, to find what hour it is at any other place	184
PROBLEM XIX. A particular place and the hour of the day being given, to find all places on the Globe where it is then noon, or any other given hour	186
PROBLEM XX. To find the Sun's longitude (commonly called the Sun's place in the ecliptic) and his declination	188
PROBLEM XXI. To place the Globe in the same situation with respect to the Sun, as the Earth is at the Equinoxes, at the Summer Solstice, and at the Winter Solstice, and thereby to shew the comparative lengths of the longest and shortest days	189
PROBLEM XXII. To place the Globe in the same situation eclipse will happen, to any Star in the Heavens, as the earth is	
PROBLEM XXIII. To place the Equator, &c. viz. to illustrate the eclipse will happen the Sphere, Right, Parallel, and Oblique,	
PROBLEM XXIV. To shew the comparative length of the longest and shortest days	195
PROBLEM XXV. The month and day of the month being given, to find all places of the Earth where the Sun is vertical on that day; those places where the sun does not set, and those places where he does not rise on the given day	200
PROBLEM XXVI. A place being given in the Torrid Zone, to find those two days of the year on which the Sun will be vertical at that place	202

	Page
PROBLEM XXV. The month and day of the month being given (at any place not in the frigid Zones) to find what other day of the year is of the same length	203
PROBLEM XXVI. The month, day, and hour of the day being given, to find where the Sun is vertical at that instant	204
PROBLEM XXVII. The month, day, and hour of the day at any place being given, to find all those places of the Earth where the Sun is rising, those places where the Sun is setting, those places that have noon, that particular place where the Sun is vertical, those places that have morning twilight, those places that have evening twilight, and those places that have midnight	205
PROBLEM XXVIII. To find the time of the Sun's rising and setting, and the length of the day and night at any place	207
PROBLEM XXIX. The length of the day at any place being given, to find the Sun's declination, and the day of the month	210
PROBLEM XXX. To find the length of the longest day at any place in the north frigid Zone	211
PROBLEM XXXI. To find the length of the longest night at any place in the north frigid Zone	213
PROBLEM XXXII. To find the number of days which the Sun rises and sets at any place in the north frigid Zone	214
PROBLEM XXXIII. To find in what degree of north Latitude, on any day between the 21st of March and the 21st of June, or in what degree of south Latitude, on any day between the 23d of September and the 21st of December, the Sun begins to shine constantly without setting; and also in what Latitude in the opposite hemisphere he begins to be totally absent	216
PROBLEM XXXIV. Any number of days not exceeding 182, being given, to find the parallel of north Latitude in which the Sun does not set for that time	217
PROBLEM XXXV. To find the beginning, end, and duration of twilight at any place, on any given day	166
PROBLEM XXXVI. To find the beginning, end, and duration of constant day or twilight at any place	166
PROBLEM XXXVII. To find the duration of twilight at the north pole	167
PROBLEM XXXVIII. To find in what climate any given place on the Globe is situated	221
PROBLEM XXXIX. To find the breadths of the several climates between the Equator and the Polar Circles	223
PROBLEM XL. To find that part of the equation of Time which depends on the obliquity of the Ecliptic	224

CONTENTS.

	xix Page
PROBLEM XLI. To find the Sun's meridian altitude at any time of the year at any given place - - -	226
PROBLEM XLII. When it is midnight at any place in the temperate or torrid Zones, to find the Sun's altitude at any place (on the same meridian) in the north frigid Zone, where the Sun does not descend below the horizon - -	227
PROBLEM XLIII. To find the Sun's amplitude at any place	228
PROBLEM XLIV. To find the Sun's azimuth and his altitude at any place, the day and hour being given - -	229
PROBLEM XLV. The latitude of the place, day of the month, and the Sun's altitude being given, to find the Sun's azimuth and the hour of the day - - -	231
PROBLEM XLVI. Given the latitude of the place, and the day of the month, to find at what hour the Sun is due east or west - - -	232
PROBLEM XLVII. Given the Sun's meridian altitude and the day of the month, to find the latitude of the place - -	233
PROBLEM XLVIII. The length of the longest day at any place, not within the Polar Circles, being given, to find the Latitude of that place - - -	235
PROBLEM XLIX. The latitude of a place, and the day of the month being given, to find how much the Sun's declination must increase or decrease towards the elevated Pole, to make the day an hour longer or shorter than the given day	236
PROBLEM L. To find the Sun's right ascension, oblique ascension, oblique descension, ascensional difference and time of rising and setting at any place - - -	238
PROBLEM LI. Given the day of the month, and the Sun's amplitude, to find the latitude of the place of observation	240
PROBLEM LII. Given two observed altitudes of the Sun, the time elapsed between them, and the sun's declination, to find the latitude - - -	241
PROBLEM LIII. The day and hour being given when a solar eclipse will happen, to find where it will be visible -	243
PROBLEM LIV. The day and hour being given when a lunar eclipse will happen, to find where it will be visible -	243
PROBLEM LV. To find the time of the year when the Sun or Moon will be liable to be eclipsed - -	251
PROBLEM LVI. To explain the phenomenon of the harvest Moon - - -	252
PROBLEM LVII. The day and hour of an eclipse of any one of the satellites of Jupiter being given, to find upon the Globe all those places where it will be visible - -	254
PROBLEM LVIII. To place the Terrestrial Globe in the sun-	shine,

	Page
shine, so that it may represent the natural position of the Earth	257
PROBLEM LIX. The latitude of a place being given, to find the hour of the day at any time when the Sun shines	258
PROBLEM LX. To find the Sun's altitude, by placing the Globe in the sun-shine	260
PROBLEM LXI. To find the Sun's declination, his place in the Ecliptic, and his Azimuth, by placing the Globe in the sun-shine	260
PROBLEM LXII. To draw a meridian line upon a horizontal plane, and to determine the four cardinal points of the horizon	261
PROBLEM LXIII. To make a horizontal dial for any latitude	262
PROBLEM LXIV. To make a vertical dial, facing the south, in north latitude	266

## II. PROBLEMS PERFORMED BY THE CELESTIAL GLOBE.

PROBLEM LXV. To find the right ascension and declination of the Sun, or a Star	270
PROBLEM LXVI. To find the latitude and longitude of a Star	271
PROBLEM LXVII. The right ascension and declination of a Star, the Moon, a Planet, or of a Comet, being given, to find its place on the Globe	272
PROBLEM LXVIII. The latitude and longitude of the Moon, a Star, or a Planet given, to find its place on the Globe	273
PROBLEM LXIX. The day and hour, and the latitude of a place being given, to find what Stars are rising, setting, culminating, &c.	274
PROBLEM LXX. The latitude of a place, day of the month, and hour being given, to place the Globe in such a manner as to represent the Heavens at that time, in order to find out the relative situations and names of the Constellations and remarkable Stars	276
PROBLEM LXXI. To find when any Star, or Planet, will rise come to the meridian, and set at any given place	276
PROBLEM LXXII. To find the amplitude of any Star, its oblique ascension and descension, and its diurnal arch, for any given day	278
PROBLEM LXXIII. The latitude of a place given, to find the time of the year at which any known star rises or sets achronically, that is, when it rises or sets at sun-setting.	279
PROBLEM LXXIV. The latitude of a place given, to find the time of the year at which any known Star rises or sets cosmically, that is, when it rises or sets at sun-rising	280

CONTENTS.

	Page
PROBLEM LXXV. To find the time of the year when any given Star rises or sets heliacally - - -	281
PROBLEM LXXVI. The latitude of a place and day of the month being given, to find all those Stars that rise and set achronically, cosmically, and heliacally - - -	283
PROBLEM LXXVII. To illustrate the precession of the Equinoxes - - -	285
PROBLEM LXXVIII. To find the distances of the Stars from each other in degrees - - -	287
PROBLEM LXXIX. To find what Stars lie in or near the Moon's path, or what Stars the Moon can eclipse, or make a near approach to - - -	287
PROBLEM LXXX. Given the latitude of the place and the day of the month, to find what Planets will be above the horizon after sun-setting - - -	288
PROBLEM LXXXI. Given the latitude of the place, day of the month, and hour of the night or morning, to find what Planets will be visible at that hour - - -	289
PROBLEM LXXXII. The latitude of the place and day of the month given, to find how long Venus rises before the Sun when she is a morning Star, and how long she sets after the Sun when she is an evening Star - - -	290
PROBLEM LXXXIII. The latitude of a place and day of the month being given, to find the meridian altitude of any Star or Planet - - -	292
PROBLEM LXXXIV. To find all those places on the Earth to which the Moon will be nearly vertical on any given day	293
PROBLEM LXXXV. Given the latitude of a place, day of the month, and the altitude of a Star, to find the hour of the night, and the Star's azimuth - - -	294
PROBLEM LXXXVI. Given the latitude of a place, day of the month, and hour of the day, to find the altitude of any Star, and its azimuth - - -	296
PROBLEM LXXXVII. Given the latitude of a place, day of the month, and azimuth of a Star, to find the hour of the night and the Star's altitude - - -	297
PROBLEM LXXXVIII. Two Stars being given, the one on the meridian, and the other on the east or west part of the horizon, to find the latitude of the place - - -	298
PROBLEM LXXXIX. The latitude of the place, the day of the month, and two Stars that have the same azimuth, being given, to find the hour of the night - - -	298
PROBLEM XC. The latitude of the place, the day of the month, and two Stars that have the same altitude, being given, to find the hour of the night - - -	300

	Page
PROBLEM XCI. The altitudes of two Stars having the same azimuth, and that azimuth being given, to find the latitude of the place	300
PROBLEM XCII. The day of the month being given, and the hour when any known Star rises or sets, to find the latitude of the place	301
PROBLEM XCIII. To find on what day of the year any given Star passes the meridian at any given hour	302
PROBLEM XCIV. The day of the month being given, to find at what hour any given Star comes to the meridian	303
PROBLEM XCV. Given the azimuth of a known star, the latitude, and the hour, to find the Star's altitude and the day of the month	304
PROBLEM XCVI. The altitudes of two Stars being given, to find the latitude of the place	305
PROBLEM XCVII. The meridian altitude of a known Star being given at any place, to find the latitude	306
PROBLEM XCVIII. The latitude of a place, day of the month, and hour of the day being given, to find the nonagesimal degree of the ecliptic, its altitude and azimuth, and the medium cœli	307
PROBLEM XCIX. The latitude of a place, day of the month, and the hour, together with the altitude and azimuth of a Star, being given, to find the Star	308
PROBLEM C. To find the time of the moon's Southing, or coming to the meridian of any place, on any given day of the month	309
PROBLEM CI. The day of the month, latitude of the place, and the time of high water at the full and change of the moon, being given, to find the time of high water on the given day	311
PROBLEM CII. To describe the apparent path of any Planet or of a Comet, amongst the fixed Stars, &c.	316

PROBLEMS WHICH MAY BE PERFORMED BY EITHER GLOBE.

	Page		Page
PROBLEM XX.	188	PROBLEM XXXIII.	216
———— XXV.	203	———— XXXIV.	217
———— XXVIII.	207	———— XXXV.	218
———— XXIX.	210	———— XXXVI.	220
———— XXX.	211	———— XXVII.	221
———— XXXI.	213	———— XXXVIII.	221
———— XXXII.	214	———— XXXIX.	223

PRO-

CONTENTS.

	Page		xxiii Page
PROBLEM XL.	224	PROBLEM XLIX.	236
———— XLI.	226	———— L.	238
———— XLII.	228	———— LI.	240
———— XLIII.	229	———— LII.	241
———— XLIV.	231	———— LV.	251
———— XLV.	232	———— LVI.	252
———— XLVI.	233	———— LIX.	258
———— XLVII.	235	———— LX.	260
———— XLVIII.		———— LXI.	260

PART IV.

A promiscuous collection of examples exercising the problems on the globes	-	-	318 to 329
A collection of questions, with references to the pages where the answers will be found; designed as an assistant to the tutor in the examination of the student	-	-	329 to 342
A table of the latitudes and longitudes of some of the principal places in the world	-	-	343 to 357
An alphabetical list of the Constellations with the right ascension and declination of the middle of each, for the ready finding of them on the Globe	-	-	358 to 360

INDEX TO THE TABLES.

I. A table of the climates	-	-	17
II. Tables of the constellations, with the number of stars in each constellation, and the names of the principal stars		24, 25, 26, 27,	
III. A table of the velocity and pressure of the winds	-	-	115
IV. A table of the satellites of Jupiter	-	-	147
V. A table of the configuration of the satellites of Jupiter	-	-	149
VI. A table of the satellites of Saturn	-	-	152
VII. A table of the number of geographical and English miles which make a degree in any given parallel of latitude	-	-	173
VIII. A table of the equation of time, dependent on the obliquity of the ecliptic, for every degree of the sun's longitude			225
IX. A table of all the visible eclipses which will happen in the present century	-	-	245
X. A table for finding the moon's age, the time of new and full moon, &c.	-	-	249
XI. A table of the hour arches and angles for a horizontal dial, for the latitude of London	-	-	265
XII. A table of the hour arches and angles for a vertical dial, for the latitude of London	-	-	268
			XIII.

	Page
XIII. A table of the equation of time, to be placed on a fundial	269
XIV. A table of the right ascensions, declinations, latitudes, and longitudes of some of the principal fixed stars, for the year 1800	272
XV. A table of the time of high water at new and full moon, at the principal places in the British Islands,	315
XVI. A table of the latitudes and longitudes of some of the principal places in the world	343 to 357
XVII. A table of the Constellations, alphabetically arranged, with the right ascension and declination of the middle of each	358 to 360

FIVE COPPER-PLATES *to be placed at the End of the Book.*

## ERRATA.

- Page 3, *line 1st*, for divided *read* divide.
- 35, in the Greek Alphabet for  $\lambda$  *read*  $\gamma$ .
- 149, in the table, 5th space for 4. *read* 4
- 188, *line 14th*, for declinations *read* declination.
- 195, *line 25th*, in the note, for *placc* *read* *place*.
- 274, *line 14th*, in the right hand column, the planet  $\text{J}_2$  is omitted.
- 275, *line 9th*, for Proctyon *read* Procyon.

A NEW  
TREATISE  
ON THE  
*USE OF THE GLOBES,*  
&c. &c. &c.

---

PART I. CONTAINING,

1. *Explanation of the Lines on the artificial Globes, including Geographical and Astronomical Definitions, &c.—2. The Properties of Matter and the Laws of Motion.—3. The Figure and Magnitude of the Earth.—4. The Diurnal and Annual Motion of the Earth.—5. The Origin of Springs and Rivers, and of the Saltness of the Sea.—6. The Flux and Reflux of the Tides.—7. The natural Changes of the Earth, caused by Mountains, Floods, Volcanoes, and Earthquakes.—8. Hypotheses of the Antediluvian World, and the Cause of Noah's Flood.—9. The Atmosphere, Air, Winds, and Hurricanes.—10. Vapours, Fogs and Mists, Clouds, Dew and Hoar Frost, Snow and Hail, Thunder and Lightning, Falling Stars, Ignis Fatuus, Aurora Borealis, and the Rainbow.*
- 

CHAPTER I.

*Explanation of the Lines on the Artificial Globes, including Geographical and Astronomical Definitions; with a few Geographical Theorems.*

1. **T**HE TERRESTRIAL GLOBE is an artificial representation of the earth. On this globe the four quarters of the world, the different empires, kingdoms, and countries; the chief cities, seas, rivers, &c. are truly represented, according to their relative situation on the real globe of the earth. The diurnal motion of this globe is from west to east.

2. THE CELESTIAL GLOBE is an artificial representation of the heavens, on which the stars are laid down in their natural situations. The diurnal motion of this globe is from east to west, and represents the apparent diurnal motion of the sun, moon, and stars. In using this globe the student is supposed to be situated in the center of it, and viewing the stars in the concave surface.

3. THE AXIS OF THE EARTH [See Plate I. \* Figure I. and II.] is an imaginary line passing through the centre of it upon which it is supposed to turn, and about which all the heavenly bodies appear to have a diurnal revolution. This line is represented by the wire which passes from north to south, through the middle of the artificial globe.

4. THE POLES OF THE EARTH are the two extremities of the axis, where it is supposed to cut the surface of the earth; one of which is called the north, or arctic pole; the other the south, or antarctic pole. The celestial poles are two imaginary points † in the heavens, exactly above the terrestrial poles.

5. THE BRAZEN MERIDIAN is the circle in which the artificial globe turns, and is divided into 360 equal parts, called degrees ‡. In the upper semicircle of the brass meridian these degrees are numbered from 0 to 90, from the equator towards the poles, and are used for finding the latitudes of places. On the lower semicircle of the brass meridian they are numbered from 0 to 90 from the poles towards the equator, and are used in the elevation of the poles.

\* Figure I. represents the frame of the globe, with the horizon, brass meridian, and axis; Figure II. the globe itself, with the lines on its surface.

† The pole-star is a star of the second magnitude, near the north pole, in the end of the tail of the Little Bear. Its mean right ascension, for the beginning of the year 1804, was  $13^{\circ} 14' 43''$ , and its declination  $88^{\circ} 15' 44''$  north.

‡ Every circle is supposed to be divided into 360 equal parts, called degrees, each degree into 60 equal parts called minutes, each minute into 60 equal parts called seconds, &c.: a degree is therefore only a relative idea, and not an absolute quantity, except when applied to a great circle of the earth, as to the equator or to a meridian, in which cases it is 60 geographical miles, or  $69\frac{1}{2}$  English miles. A degree of a great circle in the heavens is a space nearly equal to twice the apparent diameter of the sun; or to twice that of the moon when considerably elevated above the horizon.

6. GREAT CIRCLES divided the globe into two equal parts, as the equator, ecliptic, &c.

7. SMALL CIRCLES divide the globe into two unequal parts, as the tropics, polar circles, parallels of latitude, &c.

8. MERIDIANS, or Lines of Longitude, are *semicircles*, extending from the north to the south pole, and cutting the equator at right angles. Every place upon the globe is supposed to have a meridian passing through it, though there be only 24 drawn upon the terrestrial globe; the deficiency is supplied by the brass meridian. When the sun comes to the meridian of any place (not within the polar circles), it is noon or mid-day at that place.

9. THE EQUATOR is a great circle of the earth, equidistant from the poles, and divides the globe into two hemispheres, northern and southern. The latitudes of places are counted from the equator, northward and southward; and the longitudes of places are reckoned upon it eastward and westward. The equator, when referred to the heavens, is called the *equinoctial*, because when the sun appears in it, the days and nights are equal all over the world, viz. 12 hours each.

10. THE FIRST MERIDIAN is that from which geographers begin to count the longitudes of places. In English maps and globes the first meridian is a semicircle supposed to pass through London, or the royal observatory at Greenwich.

11. THE ECLIPTIC is a great circle in which the sun makes his apparent annual progress among the fixed stars\*; or it is the real path of the earth round the sun, and cuts the equinoctial in an angle of  $23^{\circ} 28'$ ; the points of intersection are called the equinoctial points. The ecliptic is situated in the middle of the zodiac.

12. THE ZODIAC, on the celestial globe, is a space which extends about eight degrees on each side of the

---

\* The sun's apparent *diurnal path*, is either in the equinoctial, or in lines nearly parallel to it; and his apparent *annual path* may be traced in the heavens, by observing what particular constellation in the zodiac, is on the meridian at midnight, the opposite constellation will shew, very nearly, the sun's place at noon on the same day.

ecliptic, like a belt or girdle, within which the motions of all the planets \* are performed.

13. SIGNS OF THE ZODIAC. The ecliptic and zodiac are divided into 12 equal parts, called signs, each containing 30 degrees. The sun makes his apparent annual progress through the ecliptic at the rate of nearly a degree in a day. The names of the signs, and the days on which the sun enters them, are as follow :

SPRING SIGNS.

♈ *Aries*, the Ram, 21st of  
of March.  
♉ *Taurus*, the Bull, 19th  
of April.  
♊ *Gemini*, the Twins, 20th  
of May.

SUMMER SIGNS.

♋ *Cancer*, the Crab, 21st  
of June.  
♌ *Leo*, the Lion, 22d of  
July.  
♍ *Virgo*, the Virgin, 22d  
of August.

The six signs above are called northern signs, being north of the equinoctial ; when the sun is in any of these signs his declination is north.

AUTUMNAL SIGNS.

♎ *Libra*, the Balance, 23d  
of September.  
♏ *Scorpio*, the Scorpion, 23d  
of October.  
♐ *Sagittarius*, the Archer,  
22d of November.

WINTER SIGNS.

♑ *Capricornus*, the Goat,  
21st December.  
♒ *Aquarius*, the Water-  
bearer, 20th January.  
♓ *Pisces*, the Fishes, 19th  
February.

The six signs above are called southern signs ; when the sun is in any of these signs his declination is south.

The spring and autumnal signs are called *ascending* signs ; because when the sun is in any of these signs, his declination is increasing. The summer and winter signs are called *descending* signs, because when the sun is in any of these signs, his declination is decreasing.

It is conjectured that the figures in the signs of the zodiac are descriptive of the seasons of the year, and that they are Chaldean or Egyptian hieroglyphics, intended to represent some remarkable oc-

\* Except the new discovered planets, or Asteroids, *Ceres* and *Pallas*.

currence in each month. Thus the spring signs were distinguished for the production of those animals which were held in the greatest esteem, viz. the sheep, the black-cattle, and the goats; the latter being the most prolific, was represented by the figure of Gemini.—When the sun enters Cancer, he discontinues his progress towards the north pole, and begins to return back towards the south pole. This retrograde motion was represented by a *Crab*, which is said to go backwards. The heat that usually follows in the next month is represented by the *Lion*, an animal remarkable for its fierceness, and which, at this season, was frequently impelled, through thirst, to leave the sandy desert, and make its appearance on the banks of the Nile. The sun entered the 6th sign about the time of harvest, which season was therefore represented by a virgin, or female reaper, with an ear of corn in her hand. When the sun enters *Libra*, the days and nights are equal all over the world, and seem to observe an equilibrium, like a balance.

Autumn, which produces fruits in great abundance, brings with it a variety of diseases: this season is represented by that venomous animal the *Scorpion*, who wounds with a sting in his tail as he recedes. The fall of the leaf was the season for hunting, and the stars which marked the sun's path at this time were represented by a huntsman, or *archer*, with his arrows and weapons of destruction.

The *Goat*, which delights in climbing and ascending some mountain or precipice, is the emblem of the winter solstice, when the sun begins to ascend from the southern tropic, and gradually to increase in height for the ensuing half year.

*Aquarius*, or the Water-bearer, is represented by the figure of a man pouring out water from an urn, an emblem of the dreary and uncomfortable season of winter.

The last of the zodiacal constellations was *Pisces*, or a couple of fishes, tied back to back, representing the fishing season. The severity of the winter is over, the flocks do not afford sustenance, but the seas and rivers are open, and abound with fish.

The Chaldeans and Egyptians were the original inventors of astronomy; they registered the events in their history, and the mysteries of their religion among the stars by emblematical figures. The Greeks displaced many of the Chaldean constellations, and placed such images as had reference to their own history in their room. The same method was followed by the Romans: hence the accounts given of the signs of the zodiac, and of the constellations, are contradictory and involved in fable.

14. **DECLINATION** of the sun, a star, or planet, is their distance from the equinoctial, northward or southward. When the sun is in the equinoctial he has no declination, and enlightens half the globe from pole to pole. As he increases in north declination he gradually shines farther over the north pole, and leaves the south pole in darkness: in a similar manner, when he has south declination, he shines over the south pole, and leaves the north pole in darkness. The

greatest declination the sun can have is  $23^{\circ} 28'$ ; the greatest declination a star can have is  $90^{\circ}$ , and that of a planet  $30^{\circ} 28'$ \* north or south.

15. THE TROPICS are two small circles, parallel to the equator, at the distance of  $23^{\circ} 28'$  from it; the northern is called the Tropic of Cancer, the southern is the Tropic of Capricorn. The tropics are the limits of the torrid zone, northward and southward.

16. THE POLAR CIRCLES are two small circles, parallel to the equator, at the distance of  $66^{\circ} 32'$  from it, or  $23^{\circ} 28'$  from each pole. The northern is called the *arctic*, the southern the *antarctic* circle.

17. PARALLELS OF LATITUDE are small circles drawn through every ten degrees of latitude, on the terrestrial globe, parallel to the equator. Every place on the globe is supposed to have a parallel of latitude drawn through it, though there be, generally, only *sixteen* parallels of latitude drawn on the terrestrial globe.

18. THE HOUR CIRCLE on the artificial globes is a small circle of brass, with an index or pointer fixed to the north pole. The hour circle is divided into 24 † equal parts, correspondent to the hours of the day; and these are again subdivided into halves and quarters.

19. THE HORIZON is a great circle which separates the visible half of the heavens from the invisible. This horizon, when applied to the earth, is distinguished by the *sensible* and *rational* horizon.

\* Except the planets, or Asteroids, *Ceres* and *Pallas*, which are nearly at the same distance from the sun; the former, at the time this was written, was out of the zodiac.

† Some globes have two rows of figures on the index, others but one. On *Bardin's New British Globes* there is an hour circle at each pole, numbered with two rows of figures. On Adams' common globes there is but one index; and on his improved globes the hours are counted by a brass wire with two indexes standing over the equator. Mr. William Jones has made an hour circle to slide on the brass meridian of many of the globes fitted up by him; it is likewise meant to shew the bearings of places. The form of the hour circle is, however, a matter of little consequence, (provided it be placed *under* the brass meridian), as the equator will answer every purpose to which a circle of this kind can be applied.

20. THE SENSIBLE, or visible horizon, is that which terminates our view, and is represented by that circle which we see in a clear day where the earth, or sea, and the sky seem to meet\*.

21. THE RATIONAL, or true horizon, is an imaginary plane, passing through the centre of the earth, parallel to the sensible horizon. It determines the rising and setting of the sun, stars, and planets.

22. THE WOODEN HORIZON circumscribing the artificial globe, represents the rational horizon on the real globe. This horizon is divided into several concentric circles. On *Bardin's New British Globes* they are arranged in the following order:

*The First Circle* is marked amplitude, and is numbered from the east towards the north and south, from 0 to 90 degrees, and from the west towards the north and south in the same manner.

*The Second Circle* is marked azimuth, and is numbered from the north point of the horizon towards the east and west, from 0 to 90 degrees; and from the south point of the horizon, towards the east and west in the same manner.

*The Third Circle* contains the thirty-two points of the compass, divided into half and quarter points. The degrees in each point are to be found in the azimuth circle.

*The Fourth Circle* contains the twelve signs of the zodiac, with the figure and character of each sign.

*The Fifth Circle* contains the degrees of the signs, each sign comprehending 30 degrees.

*The Sixth Circle* contains the days of the month answering to each degree of the sun's place in the ecliptic.

*The Seventh Circle* contains the equation of time, or difference of time, shewn by a well regulated clock and a cor-

\* The sensible horizon extends only a few miles; for example, if a man of 6 feet high were to stand on a large plane, or on the surface of the sea; the utmost extent of his view, upon the earth or the sea, would be about three miles. Thus, if  $b$  be the height of the eye above the surface of the sea, and  $d$  the diameter of the earth in feet, then  $\sqrt{d+b \times b}$ , will shew the distance which a person will be able to see, straight forward. *Keil's Trigonometry, Example XXI, page 82.*

rect sun dial. When the clock ought to be faster than the dial, the number of minutes, expressing the difference, has the sign + before it; when the clock or watch ought to be slower, the number of minutes in the difference has the sign — before it. This Circle is peculiar to the *New British Globes*.

The *Eighth Circle* contains the twelve calendar months of the year, &c.

23. THE CARDINAL POINTS of the horizon are east, west, north, and south.

24. THE CARDINAL POINTS in the heavens are the zenith, the nadir, and the points where the sun rises and sets.

25. THE CARDINAL POINTS of the ecliptic are the equinoctial and solstitial points, which mark out the four seasons of the year; and the *Cardinal Signs* are ♈ Aries, ♋ Cancer, ♌ Libra, and ♍ Capricorn.

26. THE ZENITH is a point in the heavens exactly over our heads, and is the elevated pole of our horizon.

27. THE NADIR is a point in the heavens exactly under our feet, being the depressed pole of our horizon, and the zenith, or elevated pole, of the horizon of our antipodes.

28. THE POLE of any circle is a point on the surface of the globe, 90 degrees distant from every part of that circle of which it is the pole. Thus the poles of the world are 90 degrees from every part of the equator; the poles of the ecliptic (on the celestial globe) are 90 degrees from every part of the ecliptic.—Every circle on the globe, whether real or imaginary, has two poles diametrically opposite to each other.

29. THE EQUINOCTIAL POINTS are Aries and Libra, where the ecliptic cuts the equinoctial. The point Aries is called the *vernal* equinox, and the point Libra the *autumnal* equinox. When the sun is in either of these points, the days and nights on every part of the globe are equal to each other.

30. THE SOLSTITIAL POINTS are Cancer and Capricorn. When the sun is in, or near, these points, the variation in his greatest altitude is scarcely perceptible for several days; because the ecliptic near these points is almost parallel to the equinoctial, and therefore the sun has nearly the same declination for several days.—When the sun enters Cancer

it is the longest day to all the inhabitants on the north side of the equator, and the shortest day to those on the south side. When the sun enters Capricorn it is the shortest day to those who live in north latitude, and the longest day to those who live in south latitude.

31. AN HEMISPHERE is half the surface of the globe; every *great circle* divides the globe into two hemispheres. The horizon divides the upper from the lower hemisphere in the heavens; the equator separates the northern from the southern on the earth; and the brass meridian, standing over any place on the terrestrial globe, divides the eastern from the western hemisphere.

32. THE MARINER'S COMPASS is a representation of the horizon, and is used by seamen to direct and ascertain the course of their ships. It consists of a circular brass box, which contains a paper card, divided into 32 equal parts, and fixed on a magnetical needle that always turns *towards* the north. Each point of the compass contains  $11^{\circ} 15'$  minutes, or  $11\frac{1}{4}$  degrees, being the 32d part of 360 degrees.

33. THE VARIATION OF THE COMPASS is the deviation of its points from the correspondent points in the heavens. When the north point of the compass is to the east of the true north point of the horizon, the variation is east; if it be to the west the variation is west.

The learner is to understand, that the compass does not always point *directly north*, but is subject to a small annual variation. At present, in England, the needle points about 24 degrees to the westward of the north.

At LONDON in

1576, the variation was, $11^{\circ} 15'$ E.	1666, the variation was, $1^{\circ} 35'$ W.
1612, — 6 10 E.	1683, — 4 30 W.
1622, — 6 0 E.	1700, — 8 0 W.
1634, — 4 5 E.	1722, — 14 22 W.
1657, — 0 0	1747, — 17 40 W.
	1780, — 22 41 W.

The compass is used for setting the artificial globe north and south; but care must be taken to make a proper allowance for the variation.

34. LATITUDE OF A PLACE, on the terrestrial globe, is its distance from the equator in degrees, minutes or

geographical miles, &c. and is reckoned on the brass meridian, from the equator towards the north or south pole.

35. **LATITUDE OF A STAR OR PLANET**, on the celestial globe, is its distance from the ecliptic, northward or southward, counted towards the pole of the ecliptic, on the quadrant of altitude. The greatest latitude a star can have is 90 degrees, and the greatest latitude of a planet is nearly 8 degrees\*. The sun being always in the ecliptic, has no latitude.

36. **THE QUADRANT OF ALTITUDE** is a thin slip of brass divided upwards from 0 to 90 degrees, and downwards from 0 to 18 degrees, and when used, is generally screwed to the brass meridian. The upper divisions are used to determine the distances of places on the earth, the distances of the celestial bodies, their altitudes, &c.; and the lower divisions are applied to finding the beginning, end, and duration of twilight.

37. **LONGITUDE OF A PLACE** on the terrestrial globe, is the distance of the meridian of that place from the first meridian, reckoned in degrees and parts of a degree on the equator. Longitude is either eastward or westward, according as the place is eastward or westward of the first meridian. The greatest longitude that a place can have is 180 degrees, or half the circumference of the globe.

38. **LONGITUDE OF A STAR, OR PLANET**, is reckoned on the ecliptic from the point Aries, eastward, round the celestial globe. The longitude of the sun is what is called the sun's place on the terrestrial globe.

39. **ALMACANTARS**, or parallels of altitude, are *imaginary* circles parallel to the horizon, and serve to shew the height of the sun, moon, or stars. These circles are not drawn on the globe, but they may be described for any latitude by the quadrant of altitude.

40. **PARALLELS OF CELESTIAL LATITUDE** are small circles drawn on the celestial globe, parallel to the ecliptic.

---

\* The newly-discovered planets, or Asteroids, *Ceres* and *Pallas*, do not appear to be confined within this limit.

41. PARALLELS OF DECLINATION are small circles parallel to the equinoctial on the celestial globe, and are similar to the parallels of latitude, on the terrestrial globe.

42. THE COLURES are two great circles passing through the poles of the world; one of them passes through the equinoctial points, Aries\* and Libra; the other through the solstitial points, Cancer and Capricorn: hence they are called the equinoctial and solstitial colures. They divide the ecliptic into four equal parts, and mark the four seasons of the year.

43. AZIMUTH, or VERTICAL CIRCLES, are imaginary great circles passing through the zenith and the nadir, cutting the horizon at right angles. The altitudes of the heavenly bodies are measured on these circles, which circles may be represented by screwing the quadrant of altitude on the zenith of any place, and making the other end move along the wooden horizon of the globe.

44. THE PRIME VERTICAL is that azimuth circle which passes through the east and west points of the horizon, and is always at right angles with the brass meridian, which may be considered as another vertical circle passing through the north and south points of the horizon.

45. THE ALTITUDE of any object in the heavens, is an arch of a vertical circle, contained between the centre of the object and the horizon. When the object is upon the meridian, this arch is called the meridian altitude.

46. THE ZENITH DISTANCE of any celestial object, is the arch of a vertical circle contained between the centre of that object and the zenith; or it is what the altitude of the object wants of 90 degrees. When the object is on the meridian, this arch is called the meridian zenith distance.

47. THE POLAR DISTANCE of any celestial object, is an arch of a meridian, contained between the centre of that object and the pole of the equinoctial.

---

\* In the time of *Hipparchus* the equinoctial colure is supposed to have passed through the middle of the constellation Aries. Hipparchus was a native of Nicæa, a town of Bythiniâ in Asia Minor, about 75 miles S. E. of Constantinople, now called Iſnic; he made his observations between 160 and 135 years before Christ.

48. **THE AMPLITUDE** of any object in the heavens is an arch of the horizon, contained between the centre of the object when rising, or setting, and the east or west points of the horizon. OR, it is the distance which the sun or a star rises from the east, and sets from the west, and is used to find the variation of the compass at sea. In our summer the sun rises to the north of the east, and sets to the north of the west: and in the winter it rises to the south of the east, and sets to the south of the west. The sun never rises exactly in the east nor sets exactly in the west, except at the time of the equinoxes.

49. **THE AZIMUTH** of any object in the heavens, is an arch of the horizon, contained between a vertical circle passing through the object, and the north or south points of the horizon. The azimuth of the sun, at any particular hour, is used at sea for finding the variation of the compass.

50. **HOUR CIRCLES, OR HORARY CIRCLES,** are the same as the meridians. They are drawn through every 15 degrees\* of the equator, each answering to an hour—consequently, every degree of longitude answers to four minutes of time, every half degree to two minutes, and every quarter of a degree to *one* minute.

On the globes these circles are supplied by the brass meridian, the hour circle and its index.

51. **THE SIX O'CLOCK HOUR LINE.** As the meridian of any place, with respect to the sun, is called the 12 o'clock hour circle; so that great circle passing through the poles, which is 90 degrees distant from it on the equator, is called by astronomers the six o'clock hour circle, or the six o'clock hour line. The sun and stars are on the eastern half of this circle, 6 hours before they come to the meridian; and on the western half, six hours after they have passed the meridian.

52. **CULMINATING POINT** of a star or planet, is that point of its orbit which, on any given day, is the most elevated. Hence a star or planet is said to culminate when it comes to the meridian of any place; for then its altitude at that place is the greatest.

53. **APPARENT NOON,** is the time when the sun comes to the meridian; viz. 12 o'clock, as shewn by a correct sun-dial.

---

\* On Cary's Globes the meridians are drawn through every 10 degrees, as on a Map.

54. TRUE, OR MEAN NOON, 12 o'clock, as shewn by a well regulated clock, adjusted to go 24 hours in a *mean solar day*.

55. THE EQUATION OF TIME at noon, is the interval between the true and apparent noon, viz. it is the difference of time shewn by a well regulated clock and a correct sun dial.

56. A TRUE SOLAR DAY is the time from the sun's leaving the meridian of any place, on any day, till it returns to the same meridian on the next day; viz. it is the time elapsed from 12 o'clock at noon, on any day, to 12 o'clock at noon on the next day, as shewn by a correct sun-dial. A true solar day is subject to a continual variation, arising from the obliquity of the ecliptic, and the unequal motion of the earth in its orbit; the duration thereof sometimes exceeds, at others fall short, of 24 hours, and the variation is the greatest about the first of November, when the solar day is 16' 15" less than 24 hours, as shewn by a well regulated clock.

57. A MEAN SOLAR DAY is measured by equal motion, as by a clock or time-piece, and consists of 24 hours. There are in the course of a year as many mean solar days as there are true solar days, the clock being as much faster than the sun-dial on some days of the year, as the sun-dial is faster than the clock on others. Thus the clock is faster than the sun-dial from the 24th of December to the 15th of April, and from the 16th of June to the 31st of August: but from the 15th of April to the 16th of June, and from the 31st of August to the 24th of December, the sun-dial is faster than the clock. When the clock is faster than the sun-dial, the true solar day exceeds 24 hours; and when the sun-dial is faster than the clock, the true solar day is less than 24 hours; but when the clock and the sun-dial agree, viz. about the 15th of April, 16th of June, 31st of August, and 24th of December, the true solar day is exactly 24 hours.

58. THE ASTRONOMICAL DAY is reckoned from noon to noon, and consists of 24 hours. This is called a *natural day*, being of the same length in all latitudes.

59. THE

59. THE ARTIFICIAL DAY is the time elapsed between the sun's rising and setting, and is variable according to the different latitudes of places.

60. THE CIVIL DAY, like the astronomical or natural day, consists of 24 hours, but begins differently in different nations. The ancient Babylonians, Persians, Syrians, and most of the eastern nations, began their day at sun-rising. The ancient Athenians, the Jews, &c. began their day at sun-setting, which custom is followed by the modern Austrians, Bohemians, Silesians, Italians, Chinese, &c. The Arabians begin their day at noon, like the modern astronomers. The ancient Egyptians, Romans, &c. began their day at midnight, and this method is followed by the English, French, Germans, Dutch, Spanish, and Portuguese.

61. A SIDERIAL DAY is the interval of time from the passage of any fixed star over the meridian, till it returns to it again: or, it is the time which the earth takes to revolve once round its axis, and consists of 23 hours, 56 minutes, 4 seconds.

In elementary books of astronomy and the globes, the learner is generally told that the earth turns on its axis from west to east in 24 hours; but the truth is, that it turns on its axis in 23 hours, 56 minutes, 4 seconds, making about 366 revolutions in 365 days, or a year. The natural day would always consist of 23 hours, 56 minutes, 4 seconds, instead of 24 hours, if the earth had no other motion than that on its axis; but while the earth has revolved eastward once round its axis, it has advanced nearly one degree\* eastward in its orbit. To illustrate this, suppose the sun to be upon any particular meridian at 12 o'clock, on any day; in the space of 23 hours, 56 minutes, 4 seconds afterwards, the earth will have performed one entire revolution; but it will at the same time have advanced nearly one degree eastward in its orbit, and consequently that meridian which was opposite to the sun the day before, will be now one degree eastward of it; therefore the earth must perform something more than one revolution before the sun appears again on the same meridian; so that the time from the sun's being on the meridian on any day, to its appearance on the same meridian the next day, is 24 hours.

---

\* The earth goes round the sun in  $365\frac{1}{4}$  days nearly; and the ecliptic, which is the earth's path round the sun, consists of 360 degrees; hence by the rule of three,  $365\frac{1}{4} \text{ D} : 360 \text{ deg.} :: 1 \text{ D} : 59' 8''$ . 2, the daily mean motion of the earth in its orbit, or the *apparent* mean motion of the sun in a day.

62. A SOLAR YEAR, or tropical year, is the time the sun takes in passing through the ecliptic, from one tropic, or equinox, till it returns to it again; and consists of 365 days, 5 hours, 48 minutes, 48 seconds.

63. A SIDERIAL YEAR is the space of time which the sun takes in passing from any fixed star, till he returns to it again, and consists of 365 days, 6 hours, 9 minutes, 12 seconds; the sidereal year is therefore 20 minutes, 24 seconds longer than the tropical year, and the sun returns to the equinox every year before he returns to the same point of the heavens; consequently the equinoctial points have a retrograde motion.

64. THE PRECESSION OF THE EQUINOXES (or more properly the recession of the equinoxes) is a slow motion which the equinoctial points have from east to west, contrary to the order of the signs, which is from west to east.

This motion, from the best observations, is about  $50\frac{1}{2}$  seconds in a year, so that it would require 25,791 years\* for the equinoctial points to perform an entire revolution westward round the globe.

In the time of Hipparchus, and the oldest astronomers, the equinoctial points were fixed in Aries and Libra; but the signs which were then in conjunction with the sun, when he was in the equinox, are now a whole sign, or 30 degrees eastward of it; so that Aries is now in Taurus, Taurus in Gemini, &c. as may be seen on the celestial globe. Hence also the stars which rose and set at any particular season of the year in the times of Hesiod†, Eudoxus‡, Pliny||, &c. do not answer to the description given by these writers.

### 65. POSI-

\* For the circumference of the equator is 360 degrees, and  $51\frac{1}{2}'' : 1 \text{ yr.} :: 360^\circ : 25791 \text{ years.}$

† HESIOD was a celebrated Grecian poet, born at Ascra, in Bœotia, supposed to have flourished in the time of Homer; he was the first who wrote a poem on Agriculture, entitled *The Works and the Days*, in which he introduces the rising and setting of particular stars, &c. Several editions of his works are now extant.

‡ EUDOXUS was a great geometrician and astronomer, from whom Euclid the geometrician is said to have borrowed great part of his elements of geometry. Eudoxus was born at Cnidus, a town of Caria, in Asia Minor; he flourished about 370 years before Christ.

|| PLINY, generally called Pliny the Elder, was born at Verona, in Italy; he composed a work on natural history in 37 books; it treats of  
the

65. POSITIONS OF THE SPHERE are three; right, parallel, and oblique.

66. A RIGHT SPHERE is that position of the earth where the equator passes through the zenith and the nadir, the poles being in the rational horizon. The inhabitants who have this position of the sphere live at the equator: it is called a right sphere because all the parallels of latitude cut the horizon at right angles, and the horizon divides them into two equal parts, making equal day and night.

67. A PARALLEL SPHERE is that position the earth has when the rational horizon coincides with the equator, the poles being in the zenith and nadir. The inhabitants who have this position of the sphere (if there be any such inhabitants) live at the poles; it is called a parallel sphere, because all the parallels of latitude are parallel to the horizon, and the sun appears above the horizon for six months together.

68. AN OBLIQUE SPHERE is that position the earth has when the rational horizon cuts the equator obliquely, and hence it derives its name. All inhabitants on the face of the earth (except those who live exactly at the poles or the equator) have this position of the sphere, and the days and nights are of unequal lengths, the parallels of latitude being divided into unequal parts by the rational horizon.

69. CLIMATE is a part of the surface of the earth contained between two small circles parallel to the equator, and of such a breadth, that the longest day in the parallel nearest the pole, exceeds the longest day in the parallel of latitude next the equator, by half an hour, in the torrid and temperate zones, or by a month in the frigid zones; so that there are 24 climates between the equator and each polar circle, and six climates between each polar circle and its pole.

---

the stars, the heavens, wind, rain, hail, minerals, trees, flowers, plants, birds, fishes, and beasts; besides a geographical description of every place on the globe, &c. &c. Pliny perished by an eruption of Vesuvius, in the 79th year of Christ, from too eager a curiosity in observing the phenomenon.

From

From the above definition it appears, that all places situated on the same parallel of latitude are in the same climate; but we must not infer from thence, that they have the same atmospherical temperature; large tracts of uncultivated lands, sandy deserts, elevated situations, woods, morasses, lakes, &c. have a considerable effect on the atmosphere. For instance, in Canada, in about the latitude of Paris and the south of England, the cold is so excessive, that the greatest rivers are frozen over from *December* to *April*, and the snow commonly lies from four to six feet deep. The Andes mountains, though part of them are situated in the torrid zone, are at the summit, covered with snow, which cools the air in the adjacent country. The heat on the western coast of Africa, after the wind has passed over the sandy desert, is almost suffocating; whilst that same wind having passed over the Atlantic Ocean, is cool and pleasant to the inhabitants of the Caribbean Islands.

I. CLIMATES between the EQUATOR and the POLAR CIRCLES.

Climate.	Ends in Latitude.		Where the longest Day is.		Breadths of the Climates.		Climate.	Ends in Latitude.		Where the longest Day is.		Breadths of the Climates.	
	D.	M.	H.	M.	D.	M.		D.	M.	H.	M.	D.	M.
I	8	34	12	30	8	34	XIII	59	59	18	30	1	32
II	16	44	13	—	8	10	XIV	61	18	19	—	1	19
III	24	12	13	30	7	28	XV	62	26	19	30	1	8
IV	30	48	14	—	6	36	XVI	63	22	20	—	—	56
V	36	31	14	30	5	43	XVII	64	10	20	30	—	48
VI	41	24	15	—	4	53	XVIII	64	50	21	—	—	40
VII	45	32	15	30	4	8	XIX	65	22	21	30	—	32
VIII	49	2	16	—	3	30	XX	65	48	22	—	—	26
IX	51	59	16	30	2	57	XXI	66	5	22	30	—	17
X	54	30	17	—	2	31	XXII	66	21	23	—	—	16
XI	56	38	17	30	2	8	XXIII	66	29	23	30	—	8
XII	58	27	18	—	1	49	XXIV	66	32	24	—	—	3

II. CLIMATES between the POLAR CIRCLES and the POLES.

Climate.	Ends in Latitude.		Where the longest Day is.		Breadths of the Climates.		Climate.	Ends in Latitude.		Where the longest Day is.		Breadths of the Climates.	
	D.	M.	Days	M.	D.	M.		D.	M.	Days	M.	D.	M.
XXV	67	18	30	or 1	—	46	XXVIII	77	40	120	or 4	4	35
XXVI	69	33	60	— 2	2	15	XXIX	82	59	150	— 5	5	19
XXVII	73	5	90	— 3	3	32	XXX	90	—	180	— 6	7	1

The

The preceding tables may be constructed by the globe, as will be shewn in the problems, but not with that exactness given above. Tables of this kind are generally copied from one author into another, without any explanation of the principles on which they are founded.

*Construction of the first Table.*

In plate IV. figure IV. HO represents the horizon,  $\text{ÆQ}$  the equator,  $\text{cd}$  a parallel of the sun's greatest declination, NO the elevation of the pole or latitude of the place; the angle  $c a b$ , measured by the arch QO, the complement of the latitude;  $a b$  is the ascensional difference, or the time the sun rises before 6 o'clock, and  $b c$  the sun's declination. Hence, by Baron Napier's rules (see *Keith's Spherical Trigonometry*)  $\text{rad.} \times \text{fine } a b = \text{cotangent } a^* \text{ (or tangent NO) } \times \text{tangent } b c$ .

VIZ. As tangent of the sun's greatest declination  $23^{\circ} 28'$ ,

Is to radius, sine of  $90^{\circ}$  degrees;

So is sine of the sun's ascensional difference,

To tangent of the latitude—A general rule.

At the end of the first climate the sun rises  $\frac{1}{2}$  before 6; and in every climate, if you take half the length of the longest day, and deduct 6 hours therefrom, the remainder turned into degrees will give the ascensional difference. Hence the ascensional difference, for the first climate, is 15 minutes of time, equal to  $3^{\circ} 45'$ ; for the second climate 30 minutes  $= 7^{\circ} 30'$ ; for the third climate 45 minutes  $= 11^{\circ} 15'$ ; for the fourth climate 1 hour  $= 15^{\circ}$ , &c.

As tangent of $23^{\circ} 28'$	9.63761	As tangent of $23^{\circ} 8'$	9.63761
Is to radius, sine of $90^{\circ}$	10.00000	Is to radius, sine of $90^{\circ}$	10.00000
So is sine of $3^{\circ} 45'$	8.81560	So is sine of $7^{\circ} 30'$	9.11570
	<hr/>		<hr/>
To tangent lat. $8^{\circ} 34'$	9.17799	To tangent lat. $16^{\circ} 44'$	9.47809

*Construction of the second Table.*

The longest day is the 21st of June, when the sun's declination is  $23^{\circ} 28'$  north. Count half the length of the day from the 21st of June forward and backward; find the sun's declination answering to those two days in the nautical almanac, or in a table of the sun's declination; add the two declinations together, and divide their sum by 2, subtract the quotient from 90 degrees, and the remainder is the latitude. As the sun's declination is variable, it ought to be taken out of the almanac, or tables, for leap year and the three following years; a mean of these declinations used as above will give the latitude as correct as the nature of the problem admits of, and in this manner the second table was constructed.—RICCIOI (an Italian astronomer and mathematician, born at Ferrara, in the Pope's dominions, 1598,) in his *Astronomia Reformata*, published in 1665, makes an allowance for the refraction of the atmosphere in a table of climates. He considers the increase of days to be by half hours, from 12 to 16 hours; by hours from 16 to 20 hours; by 2 hours from 20 to 24 hours: and by months in the frigid zones, making the number of the days of each month in the

the north frigid zone, something more than those in the south; but, as the refraction of the atmosphere is so extremely variable that scarcely any two mathematicians agree with respect to the quantity, it is evident that a table of climates, calculated with such an uncertain allowance, can be of no material advantage.

70. A ZONE is a portion of the surface of the earth contained between two small circles parallel to the equator, and is similar to the term climate, for pointing out the situations of places on the earth, but less exact; as there are only *five* zones, whereas there are 60 climates.

71. THE TORRID ZONE extends from the tropic of Cancer to the tropic of Capricorn, and is  $46^{\circ} 56'$  broad. This zone was thought by the ancients to be uninhabited, because it is continually exposed to the direct rays of the sun; and such parts of the torrid zone as were known to them were sandy deserts, as the middle of Africa, Arabia, &c.; and this sandy desert extends beyond the left bank of the Indus, towards Agimere. But these deserts are not produced merely by the excessive heat of the sun, as the ancients imagined; because it is well known, that moisture is one of the greatest inconveniences in several parts of the torrid zone.

72. THE TWO TEMPERATE ZONES. The north temperate zone extends from the tropic of Cancer to the arctic circle; and the south temperate zone from the tropic of Capricorn to the antarctic circle. These zones are each  $43^{\circ} 4'$  broad, and were called temperate by the ancients, because meeting the sun's rays obliquely, they enjoy a moderate degree of heat.

73. THE TWO FRIGID ZONES. The north frigid zone, or rather segment of the sphere, is bounded by the arctic circle. The north pole, which is  $23^{\circ} 28'$  from the arctic circle, is situated in the centre of this zone. The south frigid zone is bounded by the antarctic circle, distant  $23^{\circ} 28'$  from the south pole, which is situated in the centre of this zone.

74. AMPHISCII are the inhabitants of the torrid zone; so called, because they cast their shadows both north and south at different times of the year; the sun being sometimes to the south of them at noon, and at other times to

the north. When the sun is vertical, or in the zenith, which happens twice in the year, the inhabitants have no shadow, and are then called *ASCII*, or shadowless.

75. *HETEROSCHII* is a name given to the inhabitants of the temperate zones, because they cast their shadows at noon only one way. Thus, the shadow of an inhabitant of the north temperate zone always falls to the north at noon, because the sun is then directly south; and an inhabitant of the south temperate zone casts his shadow towards the south at noon, because the sun is due north at that time.

76. *PERISCHII* are those people who inhabit the frigid zones, so called, because their shadows, during a revolution of the earth on its axis, are directed towards every point of the compass. In the frigid zones the sun does not set during several revolutions of the earth on its axis.

77. *ANTOECI* are those who live in the same degree of longitude, and in equal degrees of latitude, but the one has north and the other south latitude. They have noon at the same time, but contrary seasons of the year; consequently, the length of the days to the one, is equal to the length of the nights to the other. Those who live at the equator have no *Antœci*.

78. *PERIOECI* are those who live in the same latitude, but in opposite longitudes; when it is noon with the one, it is midnight with the other; they have the same length of days, and the same seasons of the year. The inhabitants of the poles have no *Periœci*.

79. *ANTIPODES* are those inhabitants of the earth who live diametrically opposite to each other, and consequently walk feet to feet; their latitudes, longitudes, seasons of the year, days and nights, are all contrary to each other.

80. *THE RIGHT ASCENSION* of the sun, or a star, is that degree of the equinoctial, which rises with the sun, or a star, in a right sphere, and is reckoned from the equinoctial point Aries eastward round the globe.

81. *OBLIQUE ASCENSION* of the sun, or a star, is that degree of the equinoctial which rises with the sun, or a star, in an oblique sphere, and is likewise counted from the point Aries eastward round the globe.

82. *OBLIQUE*

82. **OBLIQUE DESCENSION** of the sun or a star, is that degree of the equinoctial which sets with the sun or a star, in an oblique sphere.

83. The **ASCENSIONAL OR DESCENSIONAL DIFFERENCE**, is the difference between the right and oblique ascension, or the difference between the right and oblique descension, and, with respect to the sun, it is the time he rises before 6 in the summer, or sets before 6 in the winter.

84. **THE CREPUSCULUM, OR TWILIGHT**, is that faint light which we perceive before the sun rises, and after he sets. It is occasioned by the earth's atmosphere refracting the rays of light, and reflecting them from the particles thereof. The twilight is supposed to end in the evening, when the sun is 18 degrees below the horizon, or when stars of the sixth magnitude (the smallest that are visible to the naked eye) begin to appear; and the twilight is said to begin in the morning, or it is *day-break*, when the sun is again within 18 degrees of the horizon. The twilight is the shortest at the equator, and longest at the poles; here the sun is near two months before he retreats 18 degrees below the horizon, or to the point where his rays are first admitted into the atmosphere; and he is only two months more before he arrives at the same parallel of latitude.

85. **REFRACTION**. The earth is surrounded by a body of air, called the **ATMOSPHERE**, through which the rays of light come to the eye from all the heavenly bodies; and since these rays are emitted through a *vacuum*, or at least through a very *rare medium*\*, and fall obliquely upon the atmosphere, which is a dense medium, they will, by the laws of optics, be refracted in lines approaching nearer to a perpendicular from the place of the observer (or nearer to the zenith) than they would be were the medium to be removed. Hence all the heavenly bodies appear higher

---

\* Any fluid, or substance, through which a ray of light can penetrate, is called a medium, as air, water, oil, glass, &c. The air near the surface of the earth is more dense than in the higher regions of the atmosphere; and beyond the atmosphere, the rays of light are supposed to meet with little or no resistance.

than they really are, and the nearer they are to the horizon the greater the refraction, or difference between their apparent and true altitudes will be; at noon the refraction is the least. The sun and the moon appear of an oval figure sometimes, near the horizon, by reason of refraction; for the under side being more refracted than the upper, the perpendicular diameter will be less than the horizontal one, which is not affected by refraction.

Refraction is variable according to the different density of the air; hence it happens, that we sometimes are able to see the tops of mountains, towers, or spires of churches, which at other times are invisible, though we stand in the same place. The ancients knew nothing of refraction, the first who composed a table thereof was *Tycho Brahe*.

The sun's meridian altitude on the longest day decreases from the tropic of Cancer to the north pole; and in the torrid zone when the sun is vertical there is no refraction; hence the refraction is the least in the torrid zone, and greatest at the poles. Varenus, in his geography, speaking of the wintering of the Dutch in Noya Zembla, latitude  $76^{\circ}$  north, in the year 1596, says they saw the sun in the year 1597 six days sooner than they would have seen him, had there been no refraction.

86. **ANGLE OF POSITION** between two places on the terrestrial globe, is an angle at the zenith of one of the places, formed by the brais meridian, and the quadrant of altitude passing through the other place, and is measured on the horizon.

87. **RHUMBS** are the divisions of the horizon into 32 parts, called the points of the compass. The ancients\* were acquainted only with the four cardinal points, and the wind was said to blow from that point to which it was nearest.

A Rhumb line, geometrically speaking, is a loxodromic or spiral curve, drawn or supposed to be drawn upon the earth, so as to cut each meridian at the same angle, called the proper angle of the rhumb. If this line be continued,

\* Pliny's Nat. Hist. Lib. II. chap. 47.

it will never return into itself so as to form a circle, except it happens to be due east and west, or due north and south; and it can never be a right line upon any map, except the meridians be parallel to each other, as in Mercator's and the plane chart. Hence the difficulty of finding the *true* bearing between two places on the terrestrial globe, or on any map but those above mentioned. The bearing found by a quadrant of altitude on a globe, is the only measure of a spherical angle upon the surface of that globe, as defined by the *angle of position*, and not the real bearing or rhumb, as shewn by the compass: for, by the compass, if a place A bear due east from a place B, the place B will bear due west from the place A; but this is not the case when measured with a quadrant of altitude.

88. THE FIXED STARS are so called, because they have usually been observed to keep the same distance with respect to each other. The stars have an apparent motion from east to west, in circles parallel to the equinoctial, arising from the revolution of the earth on its axis, from west to east; and, on account of the precession of the equinoxes, their longitudes increase about  $50\frac{1}{4}$  seconds in a year; this likewise causes a variation in their declinations and right ascensions: their latitudes are also subject to a small variation.

89. THE POETICAL RISING AND SETTING OF THE STARS, so called because they are taken notice of by the ancient poets, who referred the rising and setting of the stars to the sun. Thus, when a star rose with the sun, or set when the sun rose, it was said to rise and set COSMICALLY. When a star rose at sun-setting, or set with the sun, it was said to rise and set ACHRONICALLY. When a star first became visible in the morning, after having been so near the sun as to be hid by the splendour of his rays, it was said to RISE HELIACALLY; and when a star first became invisible in the evening, on account of its nearness to the sun, it was said to SET HELIACALLY.

90. A CONSTELLATION is an assemblage of stars on the surface of the celestial globe, circumscribed by the outlines of some assumed figure, as a *ram*, a *dragon*, a *bear*, &c.

This division of the stars into constellations is necessary, in order to direct a person to any part of the heavens where a particular star is situated.

The following Tables contain all the constellations on the *New British Globes*. The northern constellations are in number 34; the southern 47; the zodiacal constellations are 12; amounting in the whole to 93. The largest stars are called stars of the first magnitude; those of the sixth magnitude are the smallest that can be seen by the naked eye. The number of stars in each constellation, except those marked with asterisks, are taken from Flamsteed.

1. CONSTELLATIONS IN THE ZODIAC, generally called the Signs of the Zodiac.	Number of Stars.	Names of the principal Stars, and their Magnitudes.
1. Aries, <i>The Ram.</i> - - -	66	Arietis 2.
2. Taurus, <i>The Bull.</i> - - -	141	{ Aldebaran 1. The Pleiades. The Hyades.
3. Gemini, <i>The Twins.</i> - - -	85	Castor and Pollux 1. 2.
4. Cancer, <i>The Crab.</i> - - -	83	
5. Leo, <i>The Lion.</i> - - -	95	{ Regulus, or Lion's Heart 1.
6. Virgo, <i>The Virgin.</i> - - -	110	{ Spica Virginis 1. Vendemiatrix 2.
7. Libra, <i>The Balance.</i> - - -	51	
8. Scorpio, <i>The Scorpion.</i> - - -	44	Antares 1.
9. Sagittarius, <i>The Archer.</i> - - -	69	
10. Capricornus, <i>The Goat.</i> - - -	51	
11. Aquarius, <i>The Water-bearer.</i> - - -	108	Scheat. 3.
12. Pisces, <i>The Fishes.</i> - - -	113	

## THE NORTHERN CONSTELLATIONS.

II. CONSTELLATIONS NORTH OF THE ZODIAC that rise nearly in the east and set nearly in the west, at LONDON.	Number of stars.	Names of the principal Stars and their Magnitude.
1. * Mons Mænalus, <i>The mountain Mænalus,</i> - - -	11	
2. Serpens, <i>The serpent,</i> - - -	64	
3. Serpentarius, <i>The serpent-bearer,</i>	74	Ras Alhagus, 2.
4. * Taurus Poniatowski, <i>Bull of Poniatowski,</i> - - -	7	
5. * Scutum Sobieski, <i>Sobieski's shield,</i>	8	
6. { Aquila, <i>The eagle,</i> } { Antinous, }	71	Altair, 1.
7. Equulus, <i>The little horse,</i>	10	
III. CONSTELLATIONS NORTH OF THE ZODIAC that rise to the north of the east, and set to the north of the west, at LONDON.	Number of stars.	Names of the principal Stars and their Magnitude.
1. Leo Minor, <i>The little Lion,</i>	53	Deneb, 2.
2. Coma Berenices, <i>Berenice's hair,</i>	43	
3. { Asterion et Chara, vel, Canes } { Venatici, <i>The greyhounds,</i> }	25	
4. Böotes, - - -	54	Arcturus, 1. Mirach, 3.
5. Corona Borealis, <i>The northern crown,</i>	21	Alphacca, 2.
6. { Hercules, - - - } { Cerberus, <i>The three-headed Dog,</i> }	113	Ras Algethi 3 in the head of Hercules.
7. Lyra, <i>The harp,</i> - - -	21	Vega, 1.
8. Vulpecula et Anser, <i>The Fox and Goose,</i> - - -	35	
9. Sagitta, <i>The arrow,</i>	18	
10. Delphinus, <i>The Dolphin,</i>	18	
11. Pegafus, <i>The flying Horse,</i>	89	Markab, 2. Scheat, 2.
12. Andromeda, - - -	66	Mirach, 2. Almaach, 2.
13. Triangulum, <i>The Triangle,</i>	11	
14. Triangulum Minus, <i>The little Triangle,</i> - - -	5	
15. * Musca, <i>The Fly,</i>	6	

IV. CONSTELLATIONS NORTH OF THE ZODIAC, <i>the whole, or greater part of which, do not set in the latitude of LONDON.</i>	Number of stars.	Names of the principal Stars and their Magnitude.
1. Urfa Minor, <i>The little Bear,</i>	24	Pole Star, 2.
2. Urfa Major, <i>the great Bear,</i>	87	Dubhe, 2. Alioth, 2. Benetnach, 2.
3. * Cor Caroli, <i>Charles's Heart,</i>	3	
4. Draco, <i>The Dragon,</i>	80	Rastaben, 2.
5. Cygnus, <i>The Swan,</i>	81	Deneb Adige, 1.
6. Lacerta, <i>The Lizard,</i>	16	
7. Cepheus, - - -	35	Alderamin, 3.
8. Cassiopeia, - - -	55	Schedar, 3.
9. { Perseus, - - - } { Caput Medusæ, <i>Head of Medusa,</i> }	59	{ Algemb, 2. { Algol, 2.
10. Cameleopardalus, <i>The Cameleopard,</i>	58	
11. Auriga, <i>The Charioteer or Waggoner,</i>	66	Capella, 1.
12. Lynx, <i>The Lynx,</i>	44	

## THE SOUTHERN CONSTELLATIONS.

V. CONSTELLATIONS SOUTH OF THE ZODIAC, <i>that rise nearly in the east, and set nearly in the west, at LONDON.</i>	Number of stars.	Names of the principal Stars and their Magnitude.
1. Cetus, <i>The Whale,</i>	97	Menkar, 2.
2. Eridanus, <i>The river Po,</i>	84	Acherer, 1.
3. Orion,	78	{ Bellatrix, 2. Betel- { guese, 1. Rigel, 1.
4. Monoceros, <i>The Unicorn,</i>	31	
5. Canis Minor, <i>The little Dog,</i>	14	Procyon, 1.
6. Hydra, - - -	60	Cor Hydra, 1.
7. Sextans, <i>The Sextant,</i>	41	
VI. CONSTELLATIONS SOUTH OF THE ZODIAC, <i>that rise to the south of the east, and set to the south of the west, at LONDON.</i>	Number of Stars.	Names of the principal Stars and their Magnitude.
1. * Microscopium, <i>The Microscope,</i>	10	
2. Piscis Notius vel Australis, <i>The southern Fish,</i>	24	Fomalhaut, 1.
3. * Officina Sculptoria, <i>The Sculptor's shop,</i> - - -	12	
4. * Fornax Chemica, <i>The Furnace,</i>	14	
5. * Brandenburgium Sceptrum, <i>The Sceptre of Brandenburg,</i>	3	
6. Lepus, <i>The Hare,</i> - - -	19	
7. * Columba Noachi, <i>Noah's Dove,</i>	10	

VI. CONSTELLATIONS, &c. <i>continued.</i>		
8. Canis Major, <i>The Great Dog,</i>	31	Sirius, 1.
9. * Pyxis Nautica, <i>The Mariner's Compass,</i>	4	
10. * Machina Pneumatica, <i>The Air Pump,</i>	3	
11. Crater, <i>The Cup or Goblet,</i>	31	Alkes, 3.
12. Corvus, <i>The Crow,</i> -	9	Algorab, 3.
VII. CONSTELLATIONS SOUTH OF THE ZODIAC, <i>the whole, or greater part of which, do not rise in the latitude of LONDON.</i>		
	<i>Number of stars.</i>	<i>Names of the principal Stars and their Magnitude.</i>
1. Centaurus, <i>The Centaur,</i>	35	
2. Lupus, <i>The Wolf,</i> -	24	
3. * Norma, vel Quadra Euclidis, <i>Euclid's Square,</i> -	12	
4. * Circinus, <i>The Compasses,</i>	4	
5. * Triangulum Australe, <i>The southern Triangle,</i>	5	
6. * Crux, <i>The Cross,</i>	5	
7. * Musca Australis, vel Apis, <i>The southern Fly, or Bee,</i> -	4	
8. * Chamæleon, <i>The Cameleon,</i>	10	
9. Ara, <i>The Altar,</i>	9	
10. * Telescopium, <i>The Telescope,</i>	9	
11. Corona Australis, <i>The southern Crown,</i>	12	
12. * Indus, <i>The Indian,</i> -	12	
13. * Grus, <i>The Crane,</i> -	13	
14. * Pavo, <i>The Peacock,</i> -	14	
15. * Apus, vel Avis Indica, <i>The bird of Paradise,</i>	11	
16. * Octans Hadleianus, <i>Hadley's Octant,</i> - - -	43	
17. * Phoenix, - - -	13	
18. * Horologium, <i>The Clock,</i>	12	
19. * Reticulus Rhomboidalis, <i>The Rhomboidal Net,</i> -	10	
20. * Hydrus, <i>The Water-snake,</i>	10	
21. * Touchan, <i>The American Goose,</i>	9	
22. * Mons Mensæ, <i>The Table Mountain,</i>	30	
23. * Praxiteles, vel Cela Sculptoria, <i>The Gravers' or Engravers' Tools,</i>	16	
24. * Equuleus Pictorius <i>The Painter's Easel,</i> - - -	8	
25. * Dorado, or Xiphias, <i>The sword Fish,</i>	6	
26. Argo Navis, <i>The Ship Argo,</i>	64	Canopus, 1.
27. * Piscis Volans, <i>The flying Fish,</i>	8	
28. * Robur Caroli, <i>Charles's Oak,</i>	12	

It has been remarked in the 13th definition (page 4), where some account of the origin of the twelve signs of the zodiac is given, that the Chaldeans and Egyptians registered the events of their histories, &c. among the stars by emblematical figures, and that this method was followed by the Greeks and the Romans; though the history of many of the constellations be involved in fable, an abstract of the most general received opinions of their origin may not be uninteresting.

## I. THE NORTHERN CONSTELLATIONS.

**MONS MÆNALUS.** The mountain Mænalus in Arcadia was sacred to the god Pan, and frequented by shepherds: it received its name from Mænalus, a son of Lycaon king of Arcadia.

**SERPENS** is also called *Serpens Ophiuchi*, being grasped by the hands of *Ophiuchus*.

**SERPENTARIUS**, *Ophiuchus*, or *Æsculapius*, is represented with a large beard, and holding in his two hands a serpent. The serpent was the symbol of medicine, and of the gods who presided over it, as Apollo and *Æsculapius*, because the ancient physicians used serpents in their prescriptions.

**TAURUS PONIATOWSKI** was so called in honour of Count Poniatowski, a Polish officer of extraordinary merit, who saved the life of Charles XII. of Sweden, at the battle of Pultowa, a town near the Dnieper, about 150 miles south-east of Kiow; and a second time at the island of Rugen, near the mouth of the river Oder.

**SCUTUM SOBIESKI** was so named by Hevelius, in honour of John Sobieski, king of Poland. Hevelius was a celebrated astronomer, born at Dantzick, his catalogue of fixed stars was intitled *Firmamentum Sobieskianum*, and dedicated to the king of Poland.

**AQUILA** is supposed to have been Merops, a king of the island of Cos, one of the Cyclades; who, according to Ovid, was changed into an eagle, and placed among the constellations.

**ANTINÖUS** was a youth of Bithynia in Asia Minor, a great favourite of the emperor Adrian, who erected a temple to his memory, and placed him among the constellations.—Antinös is generally reckoned a part of the constellation Aquila.

**EQUULUS**, the little horse, or *Equi Sectio*, the horse's head, is supposed to be the brother of Pegasus.

**LEO MINOR** was formed out of the *Stelle Informes*, or unformed stars of the ancients, and placed above LEO the zodiacal constellation. According to the Greek Fables, LEO was the celebrated Nemean lion which had dropped from the moon, but being slain by Hercules, was elevated to the heavens by Jupiter, in commemoration of the dreadful conflict, and in honour of that hero. But this constellation was amongst the Egyptian hieroglyphics, long before the invention of the fables of Hercules. See the notes on definition 13th, page 5. Nemea was a town of Argolis in Peloponnesus, and was infested by a lion which Hercules slew,  
and

and clothed himself in the skin: games were instituted to commemorate this great event.

COMA BERENICES is composed of the unformed stars, between the Lion's tail and Böotes. Berenice was the wife of Evergetes, a surname signifying benefactor; when he went on a dangerous expedition, she vowed to dedicate her hair to the goddess Venus if he returned in safety. Some time after the victorious return of Evergetes, the locks which were in the temple of Venus, disappeared; and Conon, an astronomer, publicly reported that Jupiter had carried them away, and made them a constellation.

ASTERION ET CHARA, *vel* CANES VENATICI, the two greyhounds, held in a string by Böotes; they were formed by Hevelius out of the *Stella Informes* of the ancient catalogues.

BÖOTES is supposed to be Arcas, a son of Jupiter and Calisto; Juno who was jealous of Jupiter, changed Calisto into a bear; she was near being killed by her son Arcas in hunting. Jupiter to prevent farther injury from the huntsmen, made Calisto a constellation of heaven, and on the death of Arcas, conferred the same honour on him. Böotes is represented as a man in a walking posture, grasping in his left hand a club, and having his right hand extended upwards, holding the cord of the two dogs Asterion and Chara, which seem to be barking at the Great Bear; hence Böotes is sometimes called the bear-driver, and the office assigned him is to drive the two bears round about the pole.

CORONA BOREALIS is a beautiful crown given by Bacchus, the son of Jupiter, to Ariadne, the daughter of Minos, second King of Crete. Bacchus is said to have married Ariadne after she was basely deserted by Theseus, king of Athens, and after her death the crown which Bacchus had given her was made a constellation.

HERCULES is represented on the celestial globe holding a club in his right hand, the three-headed dog Cerberus in his left, and the skin of the Nemean Lion thrown over his shoulders. Hercules was the son of Jupiter and Alcmena, and reckoned the most famous hero in antiquity.

CERBERUS was a dog belonging to Pluto, the god of the infernal regions: this dog had fifty heads, according to Hesiod, and three according to other mythologists, he was stationed at the entrance of the infernal regions, as a watchful keeper, to prevent the living from entering, and the dead from escaping from their confinement. The last and most dangerous exploit of Hercules was to drag Cerberus from the infernal regions, and bring him before Eurytheus, king of Argos.

LYRA, the lyre or harp, is included in Vultur Cadens. This constellation was at first a tortoise, afterwards a lyre, because the strings of the lyre were originally fixed to the shell of a tortoise: it is asserted that this is the lyre which Apollo or Mercury gave to Orpheus, and with which he descended the infernal regions, in search of his wife Eurydice. Orpheus after death received divine honours, the muses gave an honourable burial to his remains, and his lyre became one of the constellations.

VULPECULA ET ANSER, the Fox and the Goose, was made by Hevelius out of the unformed stars of the ancients.

**SAGITTA**, the Arrow. The Greeks say that this constellation owes its origin to one of the arrows of Hercules, with which he killed the eagle or vulture that perpetually gnawed the liver of Prometheus, who was tied to a rock on Mount Caucasus, by order of Jupiter.

**DELPHINUS**, the dolphin, was placed among the constellations by Neptune, because by means of a dolphin Amphitrite became the wife of Neptune, though she had made a vow of perpetual celibacy.

**PEGASUS**, the winged horse, according to the Greeks sprung from the blood of the Gorgon Medusa, after Perseus, a son of Jupiter, had cut off her head. Pegasus fixed his residence on mount Helicon in Bœotia, where, by striking the earth with his foot, he produced a fountain called Hippocrene. He became the favourite of the Muses, and being afterwards tamed by Neptune, or Minerva, he was given to Bellerophon to conquer the Chimæra, a hideous monster that continually vomited flames; the foreparts of its body were those of a lion, the middle was that of a goat, and the hinder parts were those of a dragon; it had three heads, viz. that of a lion, a goat, and a dragon. After the destruction of this monster, Bellerophon attempted to fly to heaven upon Pegasus, but Jupiter sent an insect which stung the horse, so that he threw down the rider. Bellerophon fell to the earth, and Pegasus continued his flight up to heaven, and was placed by Jupiter among the constellations.

**ANDROMEDA** is represented on the celestial globe by the figure of a woman almost naked, having her arms extended, and chained by the wrist of her right arm to a rock. She was the daughter of Cepheus, king of Æthiopia, who, in order to preserve his kingdom, was obliged to tie her naked to a rock near Joppa, now Jaffa, in Syria, to be devoured by a sea-monster; but she was rescued by Perseus, in his return from the conquest of the Gorgons, who turned the monster into a rock by shewing it the head of Medusa. Andromeda was made a constellation after her death, by Minerva.

**TRIANGULUM** A triangle is a well known figure in geometry, it was placed in the heavens in honor of the most fertile part of Egypt, being called the delta of the Nile, from its resemblance to the Greek letter of that name  $\Delta$ . The invention of geometry is usually ascribed to the Egyptians, and it is asserted that the annual inundations of the Nile which swept away the bounds and land-marks of estates, gave occasion to it, by obliging the Egyptians to consider the figure and quantity belonging to the several proprietors.

**URSA MAJOR** is said to be Calisto, an attendant of Diana the goddess of hunting. Calisto was changed into a bear by Juno.—*See the Constellation Bœotes.*—It is farther stated that the ancients represented Urfa Major and Urfa Minor, each, under the form of a waggon, drawn by a team of horses. Urfa Major is well known to the country people at this day by the title of *Charles's Wain* or waggon; in some places it is called the Plough. There are two remarkable stars in Urfa Major, considered as the hindmost in the square of the wain, called the pointers, because an imaginary line drawn through these stars and extended upwards will pass near the pole-star in the tail of the Little Bear.

**COR CAROLI**, or Charles's heart, in the neck of Chara, the southernmost of the two dogs held in a string by Böotes, was so denominated by Sir Charles Scarborough, physician to king Charles II, in honour of king Charles I.

**DRACO**. The Greeks give various accounts of this constellation; by some it is represented as the watchful dragon which guarded the golden apples in the garden of the Hesperides, near mount Atlas in Africa: and was slain by Hercules: Juno, who presented these apples to Jupiter on the day of their nuptials, took Draco up to heaven, and made a constellation of it as a reward for its faithful services; others maintain, that in a war with the giants this dragon was brought into combat, and opposed to Minerva, who seized it in her hands and threw it, twisted as it was, into the heavens round the axis of the earth, before it had time to unwind its contortions.

**CYGNUS** is fabled by the Greeks to be the swan under the form of which Jupiter deceived Leda, or Nemesis, the wife of Tyndarus, king of Laconia. Leda was the mother of Pollux and Helena, the most beautiful woman of the age; and also of Castor and Clytemnestra. The two former were deemed the offspring of Jupiter, and the others claimed Tyndarus as their father.

**LACERTA**, the lizard, was added by Hevelius to the old constellations.

**CASSIOPEIA** was the wife of Cepheus, and mother of Andromeda. *See these constellations, as also Cetus.*

**CEPHEUS** was a king of Æthiopia, and the father of Andromeda by Cassiopeia; Cepheus was one of the Argonauts who went with Jason to Colchis to fetch the golden fleece.

**PERSEUS** is represented on the globe with a sword in his right hand, the head of Medusa in his left, and wings at his ancles. Perseus was the son of Jupiter and Danaë. Pluto, the god of the infernal regions, lent him his helmet, which had the power of rendering its bearer invisible; Minerva, the goddess of wisdom furnished him with her buckler, which was resplendent as glass; and he received from Mercury wings and a dagger or sword; thus equipped, he cut off the head of Medusa, and from the blood which dropped from it in his passage through the air, sprang an innumerable quantity of serpents which ever after infested the sandy deserts of Libya. Medusa was one of the three Gorgons who had the power to turn into stones all those on whom they fixed their eyes; Medusa was the only one subject to mortality, she was celebrated for the beauty of her locks, but having violated the sanctity of the temple of Minerva, that goddess changed her locks into serpents. *See the constellation Andromeda.*

**CAMELEOPARDALUS** was formed by Hevelius. The Cameleopard is remarkably tame and tractable; its natural properties resemble those of the camel, and its body is variegated with spots like the leopard. This animal is to be found in Ethiopia and other parts of Africa, its neck is about seven feet long, its fore and hind legs from the hoof to the second joint are nearly of the same length; but from the second joint of the

legs to the body, the fore legs are so long in comparison with the hind ones, that the body seems to slope like the roof of a house.

AURIGA is represented on the celestial globe, by the figure of a man in a kneeling or sitting posture, with a goat and her kids in his left hand and a bridle in his right. The Greeks give various accounts of this constellation: some suppose it to be Erichthonius, the fourth king of Athens, and son of Vulcan and Minerva; he was very deformed, and his legs resembled the tails of serpents; he is said to have invented chariots and the manner of harnessing horses to draw them. Others say that Auriga is Mirtilus, a son of Mercury and Phaetusa; he was charioteer to CEnomaus, king of Pisa, in Elis, and so experienced in riding and the management of horses, that he rendered those of CEnomaus the swiftest in all Greece; his infidelity to his master proved at last fatal to him, but being a son of Mercury, he was made a constellation after his death. But as neither of these fables seem to account for the goat and her kids, it has been supposed that they refer to Amalthæa, daughter of Melissus, king of Crete, who, in conjunction with her sister Melissa, fed Jupiter with goats milk; it is moreover said that Amalthæa was a goat called Olenia, from its residence at Olenus, a town of Peloponnesus.

The LYNX was composed by Hevelius out of the unformed stars of the ancients, between Auriga and Ursa Major.

## II. THE SOUTHERN CONSTELLATIONS.

CETUS, the whale, is pretended by the Greeks, to be the sea-monster which Neptune, brother to Juno, sent to devour Andromeda; because her mother, Cassiopeia, had boasted herself to be fairer than Juno and the Nereides.

ERIDANUS, the river Po, called by Virgil the king of rivers, was placed in the heavens for receiving Phaeton, whom Jupiter struck with thunder bolts when the earth was threatened with a general conflagration, through the ignorance of Phaeton, who had presumed to be able to guide the chariot of the sun. The Po is sometimes called Orion's river.

ORION is represented on the globe by the figure of a man with a sword in his belt, a club in his right hand, and the skin of a lion in his left; he is said by some authors to be the son of Neptune and Euryale, a famous huntress; he possessed the disposition of his mother, became the greatest hunter in the world, and boasted that there was not any animal on the earth which he could not conquer. Others say, that Jupiter, Neptune, and Mercury, as they travelled over Bœotia, met with great hospitality from Hyrieus, a peasant of the country, who was ignorant of their dignity and character. When Hyrieus had discovered that they were gods, he welcomed them by the voluntary sacrifice of an ox. Pleased with his piety, the gods promised to grant him whatever he required, and the old man who had lately lost his wife, and to whom he made a promise  
never

never to marry again, desired them that, as he was childless, they would give him a son without obliging him to break his promise. The gods consented, and Orion was produced from the hide of the ox.

MONOCEROS, the Unicorn, was added by Hevelius, and composed of stars which the ancients had not comprised within the outlines of the other constellations.

CANIS MINOR, the Little Dog, according to the Greek fables is one of Orion's hounds; but the Egyptians were most probably the inventors of this constellation, and as it rises before the dog star, which at a particular season was so much dreaded, it is properly represented as a little watchful creature, giving notice of the other's approach, hence the Latins have called it Antecanis, the star before the dog.

HYDRA is the water serpent which according to poetic fable infested the lake Lerna in Peloponnesus: this monster had a great number of heads, and as soon as one was cut off, another grew in its stead; it was killed by Hercules. The general opinion is, that this Hydra was only a multitude of serpents, which infested the marshes of Lerna.

SEXTANS, the Sextant, a mathematical instrument well known to mariners, was formed by Hevelius from the *Stella Informes* of the ancients.

MICROSCOPIUM, the Microscope, is an optical instrument composed of lenses or mirrors, so arranged that by means of which very minute objects may be clearly and distinctly viewed.

PISCIS AUSTRALIS, the southern fish, is supposed by the Greeks to be Venus, who transformed herself into a fish, to escape from the terrible giant Typhon.

LEPUS, the hare, according to the Greek fables, was placed near Orion, as being one of the animals which he hunted.

CANIS MAJOR, the Great Dog, according to the Greek fables is one of Orion's hounds; (*See Canis Minor*) but the Egyptians, who carefully watched the rising of this constellation, and by it judged of the swelling of the Nile, called the bright star Sirius the sentinel and watch of the year; and according to their hieroglyphical-manner of writing represented it under the figure of a dog. The Egyptians called the Nile *Siris*, and hence is derived the name of their deity *Ostris*.

CORVUS, the Crow, was according to the Greek fables made a constellation by Apollo; this god being jealous of Coronis (the daughter of Phlegyas and mother of Æsculapius) sent a crow to watch her behaviour; the bird, perched on a tree, perceived her criminal partiality to Iſchys, the Theſſalian, and acquainted Apollo with her conduct.

CENTAURUS. The Centauri were a people of Theſſaly, half men and half horses. The Theſſalians were celebrated for their skill in taming horses, and their appearance on horseback was so uncommon a sight to the neighbouring states, that at a distance, they imagined the man and horse to be one animal: when the Spaniards landed in America and appeared on horseback, the Mexicans had the same ideas. This constellation is by some supposed to represent Chiron the Centaur, tutor of Achilles,

Achilles, Æsculapius, Hercules, &c.; but as Sagittarius is likewise a Centaur, others have contended that Chiron is represented by Sagittarius.

CRUX, CRUSERO or CROSIER. There are four stars in this constellation forming a cross, by which mariners sailing in the southern hemisphere, readily find the situation of the Antarctic pole.

ARA is supposed to be the altar on which the gods swore before their combat with the giants.

ARGO NAVIS is said to be the ship Argo, which carried Jason and the Argonauts to Colchis, to fetch the golden fleece.

ROBUR CAROLI, or Charles's Oak, was so called by Dr. Halley, in memory of the tree in which Charles II. saved himself from his pursuers after the battle of Worcester. Dr. Halley went to St. Helena, in the year 1676, to take a catalogue of such stars as do not rise above the horizon of London.

91. GALAXY, VIA LACTEA, or *Milky-way*, is a whitish luminous tract which seems to encompass the heavens like a girdle, of a considerable, though unequal breadth, varying from about 4 to 20 degrees. It is composed of an infinite number of small stars, which by their joint light occasion that confused whiteness which we perceive in a clear night when the moon does not shine very bright. The Milky-way may be traced on the celestial globe, beginning at Cygnus, through Cepheus, Cassiopeia, Perseus, Auriga, Orion's club, the feet of Gemini, part of Monoceros, Argo Navis, Robur Caroli, Crux, the feet of the Centaur, Circinus, Quadra Euclidis, and Ara; here it is divided into two parts, the eastern branch passes through the tail of Scorpio, the bow of Sagittarius, Scutum Sobieski, the feet of Antinous, Aquila, Sagitta, and Vulpecula; the western branch passes through the upper part of the tail of Scorpio, the right side of Serpentarius, Taurus Poniatowski, the Goose, and the neck of Cygnus, and meets the aforesaid branch in the body of Cygnus.

92. NEBULOUS, or *cloudy*, is a term applied to certain fixed stars, smaller than those of the 6th magnitude, which only shew a dim hazy light like little specks or clouds. In Præsepe in the breast of Cancer, are reckoned 36 little stars; F. le Comte adds, that there are 40 such stars in the Pleiades, and 2500 in the whole Constellation of Orion. It may be further remarked, that the Milky-way is a continued assemblage of Nebulæ.

93. BAYER'S

93. BAYER'S CHARACTERS. John Bayer of Augsburg in Swabia, published in 1603, an excellent work, entitled *Uranometria*, being a complete celestial atlas of all the constellations, with the useful invention of denoting the stars in every constellation by the letters of the Greek and Roman Alphabets; setting the first Greek letter  $\alpha$  to the principal star in each constellation,  $\beta$  to the second in magnitude,  $\gamma$  to the third, and so on, and when the Greek alphabet was finished, he began with *a, b, c, &c.* of the Roman. This useful method of describing the stars has been adopted by all succeeding astronomers who have farther enlarged it by adding the numbers, 1, 2, 3, &c. in the same regular succession, when any constellation contains more stars than can be marked by the two alphabets. The figures are however sometimes placed above the Greek letter, especially where double stars occur, for though many stars may appear single to the naked eye, yet when viewed through a telescope of considerable magnifying power, they appear double, triple, &c. Thus, in Dr. Zach's *Tabulæ Motuum, Solis*, we meet with  $f$  Tauri,  $\beta$  Tauri,  $\gamma$  Tauri,  $\delta^1$  Tauri,  $\delta^2$  Tauri, &c.

As the Greek letters so frequently occur in catalogues of the stars and on the celestial globes, the Greek alphabet is here introduced for the use of those who are unacquainted with the letters. The capitals are seldom used in the catalogues of stars, but are here given for the sake of regularity.

## THE GREEK ALPHABET.

		Name.	Sound.
A	$\alpha$	Alpha	a
B	$\beta$	Beta	b
Γ	$\gamma$	Gamma	g
Δ	$\delta$	Delta	d
E	$\epsilon$	Epsilon	e short
Z	$\zeta$	Zeta	z
H	$\eta$	Eta	e long
Θ	$\theta$	Theta	th
I	$\iota$	Iota	i
K	$\kappa$	Kappa	k
Λ	$\lambda$	Lambda	l
M	$\mu$	Mu	m
N	$\nu$	Nu	n
Ξ	$\xi$	X	x

		Name.	Sound.
Ο	ο	Omicron	o short
Π	π ϖ	Pi	p
Ρ	ρ ϱ	Rho	r
Σ	ς σ ς	Sigma	f or s
Τ	τ γ	Tau	t
Υ	υ	Upsilon	u
Φ	φ	Phi	ph
Χ	χ	Chi	ch
Ψ	ψ	Psi	pf
Ω	ω	Omega	o long

94. PLANETS are opaque bodies, similar to our earth, which move round the sun in certain periods of time. They shine not by their own light, but by the reflection of the light which they receive from the sun. The planets are distinguished into primary and secondary.

95. THE PRIMARY PLANETS regard the sun as their centre of motion. There are 7 \* Primary Planets, distinguished by the following characters and names, viz. ☿ Mercury, ♀ Venus, ⊕ the earth, ♂ Mars, ♃ Jupiter, ♄ Saturn, and ♅ the Georgium Sidus.

96. THE SECONDARY PLANETS, satellites or moons, regard the primary planets as their centres of motion: thus the moon revolves round the Earth, the satellites of Jupiter move round Jupiter, &c. There are 18 secondary planets, The earth has *one* satellite, Jupiter *four*, Saturn *seven*, and the Georgium Sidus *six*.

97. THE ORBIT of a planet is the imaginary path it describes round the sun. The earth's orbit is the ecliptic.

98. NODES are the two opposite points where the orbit of a planet seems to intersect the ecliptic. That where the planet appears to ascend from the south to the north side of the ecliptic, is called the ascending or north node, and is marked thus ♊; and the opposite point where the planet appears to descend from the north to the south, is called the descending or south node, and is marked ♋.

---

\* An eighth primary planet called *Ceres*, was discovered by M. Piazzi of Palermo, in Sicily, on the 1st of January 1801; a ninth called *Pallas*, was discovered by Dr. Olbers, of Bremen, on the 28th of March, 1802, and others have since been discovered. See Part II. Chap I.

99. **ASPECT** of the stars or planets, is their situation with respect to each other. There are five aspects, viz.  $\zeta$  *Conjunction*, when they are in the same sign and degree;  $*$  *Sextile*, when they are two signs, or a sixth part of a circle, distant;  $\square$  *Quartile*, when they are three signs, or a fourth part of a circle, from each other;  $\triangle$  *Trine*, when they are four signs, or a third part of a circle, from each other;  $\oslash$  *Opposition*, when they are six signs, or half a circle, from each other.

The conjunction and opposition (particularly of the moon) are called the *Syzygies*, and the quartile aspect, the *Quadratures*.

100. **DIRECT**. A planet's motion is said to be direct when it appears (to a spectator on the earth) to go forward in the zodiac according to the order of the signs.

101. **STATIONARY**. A planet is said to be stationary, when (to an observer on the earth) it appears for some time in the same point of the heavens.

102. **RETROGRADE**. A planet is said to be retrograde, when it apparently goes backward, or contrary to the order of the signs.

103. **DIGIT**, the twelfth part of the sun or moon's apparent diameter.

104. **DISC**, the face of the sun or moon, such as they appear to a spectator on the earth; for though the sun and moon be really spherical bodies, they appear to be circular planes.

105. **GEOCENTRIC** latitudes and longitudes of the planets, are their latitudes and longitudes as seen from the earth.

106. **HELIOCENTRIC** latitudes and longitudes of the planets, are their latitudes and longitudes, as they would appear to a spectator situated in the sun.

107. **APOGEE** or Apogæum is that point in the orbit of a planet, the moon, &c. which is farthest from the earth.

108. **PERIGEE** or Perigæum is that point in the orbit of a planet, the moon, &c. which is nearest to the earth.

109. **APHELION** or Aphelium is that point in the orbit of the earth, or of any other planet, which is farthest from the sun. This point is called the higher **APSIS**.

110. **PERI-**

110. **PERIHELION** or Perihelium is that point in the orbit of the earth, or of any other planet, which is nearest to the sun. This point is called the lower **APSIS**.

111. **LINE OF THE APSIDES** is a straight line joining the higher and lower Apfis of a planet; viz. a line joining the Aphelium and Perihelium.

112. **ECCENTRICITY** of the orbit of any planet is the distance between the sun and the centre of the planet's orbit.

113. **OCCULTATION** is the obscuration or hiding from our sight any star or planet, by the interposition of the body of the moon, or of some other planet.

114. **TRANSIT** is the apparent passage of any planet over the face of the sun, or over the face of another planet, Mercury and Venus, in their trasits over the sun's disc, appear like dark specks.

115. **ECLIPSE OF THE SUN** is an occultation of part of the face of the sun, occasioned by an interposition of the moon between the earth and the sun; consequently all eclipses of the sun happen at the time of new moon.

116. **ECLIPSE OF THE MOON** is a privation of the light of the moon, occasioned by an interposition of the earth between the sun and the moon; consequently all eclipses of the moon happen at full moon.

117. **ELONGATION** of a planet is the angle formed by two lines drawn from the earth, the one to the sun and the other to the planet\*.

118. **DIURNAL ARCH** is the arch described by the sun, moon, or stars, from their rising to their setting.—The sun's semi-diurnal arch is the arch described in half the length of the day.

119. **NOCTURNAL ARCH** is the arch described by the sun, moon, or stars, from their setting to their rising.

\* This and some of the preceding definitions are given to illustrate the 38th and 39 pages of White's Ephemeris, called *Speculum Phanomenorum*. The words *elong. max.* signify the greatest elongation of a planet. In plate II. Fig. 2. E represents the earth, V Venus, and S the sun. The elongation is the angle VES, measured by the arch VS.

120. **ABERRATION** is an apparent motion of the celestial bodies, occasioned by the earth's annual motion in its orbit, combined with the progressive motion of light.

121. **CENTRIPETAL FORCE** is that force with which a moving body is perpetually urged towards a centre, and made to revolve in a curve instead of proceeding in a straight line, for all motion is naturally rectilinear.—Centripetal force, attraction, and gravitation, are terms of the same import.

122. **CENTRIFUGAL FORCE** is that force with which a body revolving about a centre, or about another body, endeavours to recede from that centre, or body.—There are two kinds of centrifugal force, viz. that which is given to bodies moving round another body as a centre, usually called the **PROJECTILE FORCE**, and that which bodies acquire by revolving upon their own axes. Thus, for example, the annual orbit of the earth round the sun is described by the action of the centripetal and projectile forces:—And, the diurnal rotation of the earth on its axis gives to all its parts a centrifugal force proportional to its velocity. Sir Isaac Newton has demonstrated, that the “centrifugal force of bodies at the equator, is to the centrifugal force with which bodies recede from the earth, in the latitude of Paris, in the duplicate ratio of the radius to the co-sine of the latitude.—And, that the centripetal power in the latitude of Paris is to the centrifugal force at the equator as 289 \* is to 1.”

#### GEOGRAPHICAL THEOREMS.

1. **THE** latitude of any place is equal to the elevation of the polar star (nearly) above the horizon; and the elevation of the equator above the horizon, is equal to the complement of the latitude, or what the latitude wants of 90 degrees.

2. All places lying under the equinoctial, or on the equator, have no latitude, and all places situated on the first meridian have no longitude; consequently that particular point

---

\* Princip. Prop. XIX. Book III.

on the globe where the first meridian intersects the equator has neither latitude nor longitude.

3. The latitudes of places increase as their distances from the equator increase. The greatest latitude a place can have is 90 degrees.

4. The longitudes of places increase as their distances from the first meridian increase, reckoned on the equator. The greatest longitude a place can have is 180 degrees, being half the circumference of the globe at that place; hence no two places can be at a greater distance from each other than 180 degrees.

5. The sensible horizon of any place changes as often as we change the place itself.

6. All countries upon the face of the earth, in respect to time, equally enjoy the light of the sun, and are equally deprived of the benefit of it; that is every inhabitant of the earth has the sun above his horizon for six months, and below his horizon for the same length of time\*.

7. In all places of the earth, except exactly under the poles, the days and nights are of an equal length (viz. 12 hours each) when the sun has no declination, that is, on the 21st of March, and on the 23d of September.

8. In all places situated on the equator, the days and nights are always equal, notwithstanding the alteration of

---

\* This though nearly true is not accurately so. The refraction in high latitudes is very considerable, (see definition 85th) and near the poles the sun will be seen for several days before he comes above the horizon; and he will, for the same reason, be seen for several days after he has descended below the horizon.—The inhabitants of the poles (if any) enjoy a very large degree of twilight, the sun being nearly two months before he retreats 18 degrees below the horizon, or to the point where his rays are first admitted into the atmosphere, and he is only two months more before he arrives at the same parallel of latitude: and, particularly near the north-pole, the light of the moon is greatly increased by the reflection of the snow, and the brightness of the Aurora Borealis; the sun is likewise about *seven days* longer in passing through the northern, than through the southern signs; that is from the vernal equinox, which happens on the 21st of March, to the autumnal equinox, which falls on the 23d of September, being the summer half-year to the inhabitants of north latitude, is 186 days, the winter half-year is therefore only 179 days. The inhabitants near the north-pole have consequently more light in the course of a year than any other inhabitants on the surface of the globe.

the sun's declination from north to south, or from south to north.

9. In all places, except those upon the equator, or at the two poles, the days and nights are never equal, but when the sun enters the signs of *Aries* and *Libra*, viz. on the 21st of March, and on the 23d of September.

10. In all places lying under the same parallel of latitude, the days and nights, at any particular time, are always equal to each other.

11. The increase of the longest days from the equator northward or southward, does not bear any certain ratio to the increase of latitude; if the longest days increase equally the latitudes increase unequally. This is evident from the table of climates.

12. To all places in the torrid zone, the morning and evening twilight are the shortest; to all places in the frigid zones the longest; and to all places in the temperate zones, a medium between the other two.

13. To all places lying within the torrid zone, the sun is vertical twice a year; to those under each tropic once, but to those in the temperate and frigid zones, it is never vertical.

14. At all places in the frigid zones, the sun appears every year without setting for a certain number of days, and disappears for nearly the same space of time; and the nearer the place is to the pole the longer the sun continues without setting; viz. the length of the longest days and nights increase the nearer the place is to the pole.

15. Between the end of the longest day, and the beginning of the longest night, in the frigid zone, and between the end of the longest night, and the beginning of the longest day, the sun rises and sets as at other places on the earth.

16. At all places situated under the arctic or antarctic circles, the sun when he has  $23^{\circ} 28'$  declination, appears for 24 hours without setting; - but rises and sets at all other times of the year.

17. At all places between the equator and the north-pole the longest day and the shortest night are when the sun has ( $23^{\circ} 28'$ ) the greatest north declination; and the shortest day and longest night are when the sun has the greatest south declination.

18. At

18. At all places between the equator and the south-pole the longest day and the shortest night are when the sun has ( $23^{\circ} 28'$ ) the greatest south declination; and the shortest day and longest night are when the sun has the greatest north declination.

19. At all places situated on the equator, the shadow at noon of an object, placed perpendicular to the horizon, falls towards the north for one half of the year, and towards the south the other half.

20. The nearer any place is to the torrid zone the shorter the meridian shadow of objects will be. When the sun's altitude is 45 degrees, the shadow of any perpendicular object is equal to its height.

21. The farther any place (situated in the temperate or torrid zones) is from the equator, the greater the rising and setting amplitude of the sun will be.

22. All places situated under the same meridian, so far as the globe is enlightened, have noon at the same time.

23. If a ship set out from any port, and sail round the earth eastward to the same port again, the people in that ship, in reckoning their time, will gain one complete day at their return, or count one day more than those who reside at the same port. If they sail westward they will lose one day, or reckon one day less. To illustrate this, suppose the person who travels westward should keep pace with the sun, it is evident he would have continual day, or it would be the *same* day to him during his tour round the earth; but the people who remained at the place he departed from, have had night in the same time, consequently they reckon a day more than he does.

24. Hence, if two ships should set out at the same time from any port, and sail round the globe, the one eastward and the other westward, so as to meet at the same port on any day whatever, they will differ two days in reckoning their time at their return. If they sail twice round the earth they will differ four days; if thrice, six, &c.

25. But, if two ships should set out at the same time from any port and sail round the globe, northward or southward, so as to meet at the same port on any day whatever, they will not differ a minute in reckoning their time, nor from those who reside at the port.

## CHAPTER II.

*Of the General Properties of Matter and the Laws of Motion.*

1. **M**ATTER is a substance which, by its different modifications, becomes the object of our five senses; viz. whatever we can see, hear, feel, taste, or smell, must be considered as matter, being the constituent parts of the universe.

2. **THE PROPERTIES OF MATTER** are extension, figure, solidity, motion, divisibility, gravity, and vis inertiae. These properties, which Sir Isaac Newton observes \* are the foundation of all philosophy, extend to the minutest particles of matter.

3. **EXTENSION**, when considered as a property of matter, has length, breadth, and thickness.

4. **FIGURE** is the boundary of extension; for every finite extension is terminated by, or comprehended under, some figure.

5. **SOLIDITY** is that property of matter by which it fills space; or, by which any portion of matter excludes every other portion from that space which it occupies. This is sometimes defined the impenetrability of matter.

6. **MOTION**. Though matter of itself has no ability to move; yet as all bodies, upon which we can make suitable experiments, have a capacity of being transferred from one place to another, we infer that motion is a quality belonging to all matter.

7. **DIVISIBILITY** of matter signifies a capacity of being separated into parts, either actually or mentally. That matter is thus divisible, we are convinced by daily experience, but how far the division can be actually carried on is not easily seen. The parts of a body may be so far divided as not to be sensible to the sight; and by the help of microscopes we discover myriads of organized bodies totally unknown before such instruments were invented. A grain of leaf gold will cover fifty square inches of surface†, and contains two millions of visible parts: but the gold which covers

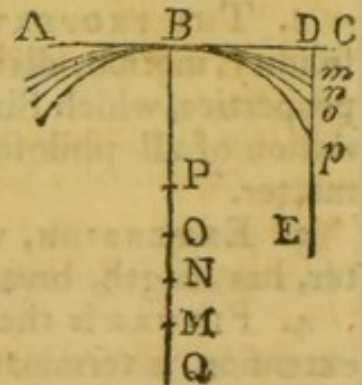
\* Newton's Princip. Book III.—The third rule of reasoning in philosophy.

† Adams' Natural and Experimental Philosophy. Lect. XXIV.

the silver wire, used in making gold lace, is spread over a surface twelve times as great. From such considerations as these, we are led to conclude, that the division of matter is carried on to a degree of minuteness far exceeding the bounds of our faculties.

Mathematicians have shewn that a line may be indefinitely divided, as follows,

Draw any line AC, and another BM perpendicular to it, of an unlimited length towards Q; and from any point D, in AC, draw DE parallel to BM. Take any number of points, P, O, N, M, in BQ; then from P as a centre, and the distance PB, describe the arch  $Bp$ , and in the same manner with C, N, M, as centres, and distances OB, NB, and MB describe the arches  $Bo$ ,  $Bn$ ,  $Bm$ .



Now it is evident the farther the centre is taken from B. the nearer the arches will approach to D, and the line ED will be divided into parts, each smaller than the preceding one; and since the line BM may be extended to an indefinite distance beyond Q, the line ED may be indefinitely diminished, yet it can never be reduced to nothing, because an arch of a circle can never coincide with the straight line BC, hence it follows that ED may be diminished *ad infinitum*.

8. GRAVITY is that force by which a body endeavours to descend towards the centre of the earth. By this power of attraction in the earth, all bodies on every part of its surface are prevented from leaving it altogether, and people move round it in all directions, without any danger of falling from it.—By the influence of attraction, bodies, or the constituent parts of bodies accede, or have a tendency to accede to each other, without any sensible material impulse, and this principle is universally disseminated through the universe, extending to every particle of matter.

9. VIS INERTIÆ is that innate force of matter by which it resists any change. We cannot move the least particle of matter without some exertion, and if one portion of matter be added to another the inertia of the whole is increased,

increased, also if any part be removed the inertia is diminished. Hence, the *vis inertiae* of any body is proportional to its weight.

10. ABSOLUTE AND RELATIVE MOTION. A body is said to be in absolute motion, when its situation is changed with respect to some other body, or bodies at rest; and to be relatively in motion, when compared with other bodies which are likewise in motion.

When a body always passes over equal parts of space in equal successive portions of time, its motion is said to be *uniform*.

When the successive portions of space, described in equal times, continually increase, the motion is said to be *accelerated*; and if the successive portions of space continually decrease, the motion is said to be *retarded*. Also, the motion is said to be *uniformly* accelerated or retarded, when the increments or decrements of the spaces, described in equal successive portions of time, are always equal.


11. THE VELOCITY of a body, or the rate of its motion, is measured by the space uniformly described in a given time.

12. FORCE. Whatever changes, or tends to change, the state of rest or motion of a body is called *force*. If a force act but for a moment, it is called the force of percussion or impulse; if it act constantly it is called an accelerative force; if constantly and equally, it is called an uniform accelerative force.

#### GENERAL LAWS OF MOTION.

LAW I. "Every body perseveres in its state of rest, or uniform motion in a right line, unless it is compelled to change that state by forces impressed thereon."—Newton's Princip. Book I.

Thus, when a body A is positively at rest, if no external force put it in motion it will always continue at rest.



But if any impulse be given to it in the direction AB, unless some obstacle, or new force, stop or retard its motion, it will continue to move on uniformly, for ever, in the same direction AB.—Hence any projectile, as a ball shot from a cannon,

cannon, an arrow from a bow, a stone cast from a sling, &c. would not deviate from its first direction, or tend to the earth, but would go off from it in a straight line with an uniform motion, if the action of gravity and the resistance of the air did not alter and retard its motion.

**LAW II.** *“The alteration of motion, or the motion generated or destroyed, in any body, is proportional to the force applied; and is made in the direction of that straight line in which the force acts.”* Newton’s Princip. Book I.

Thus, if any motion be generated by a given force, a double motion will be produced by a double force, a triple motion by a triple force, &c.—and considering motion as an effect, it will always be found that a body receives its motion in the same direction with the cause that acts upon it.—If the causes of motion be various, and in different directions, the body acted upon must take an oblique or compound direction. Hence a curvilinear motion cannot be produced by a simple cause, but must arise from the joint effect of different causes, acting at the same instant upon the body.

**LAW III.** *“To every action there is always opposed an equal re-action; or the mutual actions of two bodies upon each other are always equal, and directed to contrary points.”* Newton’s Princip. Book I.

If we endeavour to raise a weight by means of a lever, we shall find the lever press the hands with the same force which we exert upon it to raise the weight. Or if we press one scale of a balance, in order to raise a weight in the other scale, the pressure against the finger will be equal to that force with which the other scale endeavours to descend.

When a cannon is fired, the impelling force of the powder acts equally on the breech of the gun and on the ball, so that if the piece and the ball were of equal weight, the piece would recoil with the same velocity as that with which the ball issues out of it. But the heavier any body is the less will its velocity be, provided the force which

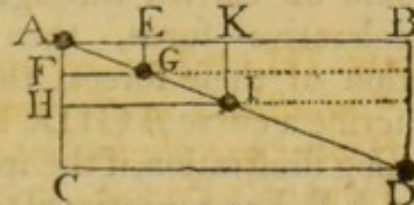
com-

communicates the motion continues the same. Therefore so many times as the cannon and carriage are heavier than the ball, just so many times will the velocity of the cannon be less than that of the ball.

## COMPOUND MOTION.

1. *If two forces act at the same time on any body, and in the same direction, the body will move quicker than it would by being acted upon by only one of the forces.*
2. *If a body be acted upon by two equal forces, in exactly opposite directions, it will not be moved from its situation.*
3. *If a body be acted upon by two unequal forces in exactly contrary directions, it will move in the direction of the greater force.*
4. *If a body be acted upon by two forces, neither in the same nor opposite directions, it will not follow either of the forces, but move in a line between them.*

The first three of the preceding articles may be considered as axioms, being self-evident; the fourth may be thus elucidated: Let a force be applied to a body at A, in the direction AB, which would cause it to move uniformly from A to B in a given period of time; and at the same instant, let another force be applied in the direction AC, such as would cause the body to move from A to C in the same time which the first force would cause it to move from A to B; by the joint action of these forces, the body will describe the diagonal AD of a parallelogram\*, with an uniform motion, in the same time in which it would describe one of the sides AB or AC by one of the forces alone.



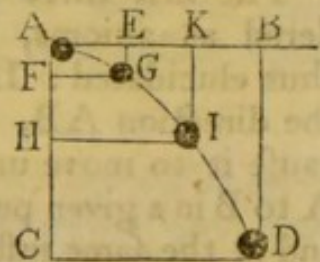
For, suppose a tube equal in length to AB (in which a small ball can move freely from A to B) to be moved parallel to itself from A to C, describing with its two extremities the lines AC and BD, so that the ball may move in the tube from A to B in the same time that the tube has descended

\* A parallelogram is a four-sided figure, having each of the two opposite sides equal and parallel.

to CD; it is evident, that when the tube AB coincides with the line CD, the ball will be at the extremity D of the line, and that it has arrived there in the same time it would have described either of the sides AB or AC. The ball will likewise describe the straight line AD, for by assuming several similar parallelograms AEGF, AKIH, &c. it will appear, that while the ball has moved from A to E the tube will have descended from A to F, consequently the ball will be at G; and while the ball has moved from A to K, the tube will have descended from A to H, and the ball will be at I. Now AGID is a straight line; for smaller parallelograms that are similar to the whole, and similarly situated, are about the same diagonal\*.

5. *If a body, by an uniform motion, describe one side of a parallelogram, in the same time that it would describe the adjacent side by an accelerative force; this body, by the joint action of these forces, would describe a curve, terminating in the opposite angle of the parallelogram.*

Let ABDC be a parallelogram, and suppose the body A to be carried through AB by an uniform force in the same time that it would be carried through AC by an accelerative force, then by the joint action of these forces, the body would describe a curve AGID. For, by the preceding illustration, if the spaces AE, EK, and KB, be proportional to each other, the spaces AF, FH, and HC, will be in the same proportion, and the line AGID will be a straight line when the body is acted upon by uniform forces; but in this example, the force in the direction AB being uniform, would cause the body to move over equal spaces AE, EK, and KB, in equal portions of time; while the accelerative force in the direction AC, would cause the body to describe spaces AF, FH, and HC, increasing in magnitude in equal successive portions of time, hence the parallelograms AEGF, AKIH, &c. are not about the same diagonal†, therefore AGID is not a straight line, but a curve.

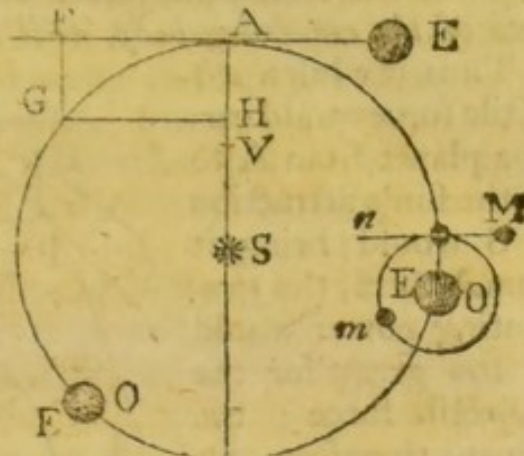


\* Euclid VI. and 26th.

† Ibid. VI. and 24th.

6. *The curvilinear motions of all the planets arise from the uniform projectile motion of bodies in straight lines, and the universal power of attraction which draws them off from these lines.*

If the body E be projected along the right line EAF, in free space where it meets with no resistance, and is not drawn aside by any other force, it will (by the first law of motion) go on for ever in the same direction and with the same velocity. For, the force which moves it



from E to A in a given time, will carry it from A to F in a successive and equal portion of time, and so on; there being nothing either to obstruct or alter its motion. But, if when the projectile force has carried the body to A, another body, as S, begins to attract it, with a power duly adjusted and perpendicular to its motion at A, it will be drawn from the straight line EAF, and revolve about S in the circle \* AGOOA. When the body E arrives at O, or any other part of its orbit, if the small body M, within the sphere of E's attraction, be projected as in the straight line Mn, with a force perpendicular to the attraction of E, it will go round the body E, in the orbit m, and accompany E in its whole course round the body S.—Here S may represent the sun, E the earth, and M the moon.

If the earth at A be attracted towards the sun at S, so as to fall from A to H by the force of gravity alone, in the same time which the projectile force singly would have carried it from A to F; by the combined action of these forces it will describe the curve AG; and if the velocity with which E is projected from A, be such as it would have ac-

\* If any body revolve round another in a circle, the revolving body must be projected with a velocity equal to that which it would have acquired by falling through half the radius of the circle towards the attracting body. *Emerson's Cent. Forces*, Prop. ii.



as overcomes the sun's attraction: this centrifugal or projectile force being too great to allow the planet to approach nearer the sun than it is at  $V$ , or even to move round the sun in the circle  $t a b c d$ , &c., it flies off in the curve  $XZMA$ , with a velocity decreasing as gradually from  $V$  to  $A$ , as if it had returned through the arches  $VT$ ,  $TD$ ,  $DR$ , &c., to a  $A$ , with the same velocity which it passed through these arches in its motion from  $A$ , towards  $V$ . At  $A$  the planet will have acquired the same velocity as it had at first, and thus by the centrifugal and centripetal forces it will continue to move round  $S$ .

Two very natural questions may here be asked; *viz.* why the action of gravity, if it be too great for the projectile force at  $O$ , does not draw the planet to the sun at  $S$ ? and why the projectile force at  $V$ , if it be too great for the centripetal force, or gravity, at the same point, does not carry the planet farther and farther from the sun, till it is beyond the power of his attraction?

*First.* If the projectile force at  $A$  were such as to carry the planet from  $A$  to  $G$ , double the distance, in the same time that it was carried from  $A$  to  $F$ , it would require four \* times as much gravity to retain it in its orbit, *viz.* it must fall through  $AI$  in the time that the projectile force would carry it from  $A$  to  $G$ , otherwise it could not describe the curve  $AOP$ . But an increase of gravity gives the planet an increase of velocity, and an increase of velocity increases the projectile force; therefore, the tendency of the planet to fly off from the curve in a tangent  $Pm$ , is greater at  $P$  than at  $O$ , and greater at  $Q$  than at  $P$ , and so on; hence, while the gravitating power increases, the projectile power increases, so that the planet cannot be drawn to the sun.

*Secondly.* The projectile force is the greatest at, or near, the point  $V$ , and the gravitating power is likewise the greatest at that point. For if  $AS$  be double of  $VS$ , the centripetal force at  $V$  will be four times as great as at  $A$ , being as the square of the distance from the sun. If the projectile force at  $V$  be double of what it was at  $A$ , the

---

\* Ferguson's Astronomy, Art. 153.

space VW, which is the double of AF, will be described in the same time that AF was described, and the planet will be at X in that time. Now, if the action of gravity had been an exact counterbalance for the projectile force during the time mentioned, the planet would have been at *t* instead of X, and it would describe the circle *t, a, b, c,* &c. ; but the projectile force being too powerful for the centripetal force, the planet recedes from the sun at S, and ascends in the curve XZM, &c. Yet, it cannot fly off in a tangent in its ascent, because its velocity is retarded, and consequently its projectile force is diminished, by the action of gravity. Thus, when the planet arrives at Z, its tendency to fly off in a tangent Z *n*, is just as much retarded, by the action of gravity, as its motion was accelerated thereby at Q, therefore it must be retained in its orbit.

---

### CHAPTER III.

#### *Of the Figure of the Earth, and its Magnitude.*

THE figure of the earth, as composed of land and water, is nearly spherical ; the proof of this assertion will be the principal object of this chapter. The ancients held various opinions respecting the figure of the earth ; some imagined it to be cylindrical, or in the form of a drum ; but the general opinion was that it was a vast extended plane, and that the horizon was the utmost limits of the earth, and the ocean the bounds of the horizon. These opinions were held in the infancy of astronomy ; and, in the early ages of Christianity, some of the *fathers* went so far as to pronounce it *heretical* for any person to declare that there was such a thing as the antipodes. But by the industry of succeeding ages, when astronomy and navigation were brought to a tolerable degree of perfection, and when it was observed that the moon was frequently eclipsed by the shadow of the earth, and that such shadow always appeared circular on the *disc* or face of the moon, in whatever position the shadow was projected, it necessarily followed that  
the

the earth, which cast the shadow, must be spherical ; since nothing but a sphere, when turned in every position with respect to a luminous body, can cast a circular shadow ; likewise all calculations of eclipses, and of the places of the planets, are made upon supposition that the earth is a sphere, and they all answer to the true times when accurately calculated. When an eclipse of the moon happens, it is observed sooner by those who live eastward than by those who live westward ; and, by frequent experience, astronomers have determined that, for every fifteen degrees difference of longitude, an eclipse begins so many hours sooner in the easternmost place, or later in the westernmost. If the earth were a plane, eclipses would happen at the same time in all places, nor could one part of the world be deprived of the light of the sun while another part enjoyed the benefit of it. The voyages of the circumnavigators sufficiently prove that the earth is round from west to east. The first who attempted to circumnavigate the globe was Magellan, a Portuguese, who sailed from Seville in Spain on the 10th of August 1519 ; he did not live to return, but his ship arrived at St. Lucar, near Seville, on the 7th of September 1522, without altering its direction, except to the north or south, as compelled by the winds, or intervening land. Since this period, the circumnavigation of the globe has been performed at different times by Sir Francis Drake, Lord Anson, Captain Cook, &c. The voyages of the circumnavigators have been frequently adduced by writers on geography and the globes to prove that the earth is a sphere, but when we reflect that all the circumnavigators sailed westward round the globe (and not northward and southward round it) they might have performed the same voyages had the earth been in the form of a drum or cylinder : but the earth cannot be in the form of a cylinder, for if it were, then the difference of longitude between any two places would be equal to the meridional distance between the same places, as on a Mercator's chart, which is contrary to observation. — Again, if a ship sail in any part of the world and upon any course whatever ; on her departure from the coast, all high towers or mountains gradually disappear, and persons on shore may see the masts of the ship after the hull is hid

by the convexity of the water (*see Figure III. Plate I.*)—If a vessel sail northward, in north latitude, the people on board may observe the polar star gradually to increase in altitude the farther they go: they may likewise observe new stars continually emerging above the horizon which were before imperceptible; and at the same time those stars which appear southward will continue to diminish in altitude till they become invisible. The contrary phænomena will happen if the vessel sail southward, hence the earth is spherical from north to south, and it has already been shewn that it is spherical from east to west.

The arguments already adduced clearly prove the rotundity of the earth, though common experience shews us that it is not strictly a geometrical sphere; for its surface is diversified with mountains and valleys: but these irregularities no more hinder the earth from being reckoned spherical, considering its magnitude, than the roughness of an orange hinders it from being esteemed round\*.

When philosophical and mathematical knowledge arrived at a still greater degree of perfection, there seemed to be a very sufficient reason for the philosophers of the last age to consider the earth not truly spherical, but rather in the form of a spheroid †. This notion first arose from observations  
on

\* Our largest globes, are in general 18 inches in diameter. The diameter of the earth is about 7964 miles. Chimborazo, one of the Andes mountains, the highest in the world, is about 20608 feet or nearly 4 miles high. The radius of the earth is 3982 miles, and that of an 18 inch globe 9 inches. Now, by the rule of three, 3982m : 3982m + 4 :: 9 in. : 9.009 from which deduct the radius of the artificial globe, the remainder  $\frac{9}{18260} = \frac{1}{2111}$  of an inch, nearly, is the elevation of the Andes on an 18 inch globe, which is less than a grain of sand.

† A spheroid is a figure formed by a revolution of an ellipsis about its axis, and an ellipsis is a curve-lined figure in geometry, formed by cutting a cone or cylinder obliquely; but its nature will be more clearly comprehended, by the learner, from the following description.

Let TR (in Plate IV. figure V.) be the transverse diameter, or longer axis of the ellipsis, and CO the conjugate diameter, or shorter axis. With the distance 1D or DR in your compasses, and C as a centre, describe the arch Ff: the points F, f, will be the two foci of the ellipsis. Take a thread of the length of the transverse axis TR, and fasten its  
ends

on pendulum clocks \*, which being fitted to beat seconds in the latitudes of Paris and London, were found to move slower as they approached the equator, and at, or near, the equator they were obliged to be shortened about  $\frac{1}{3}$  of an inch to agree with the times of the stars passing the meridian. This difference appearing to Huygens † and Sir Isaac Newton, to be a much greater quantity than could arise from the alteration by heat only, they separately discovered that the earth was flatted at the poles.—By the revolution of the earth on its axis (admitting it to be a sphere) the centrifugal force at the equator would be greater than the centrifugal force in the latitude of London or Paris, because a larger circle is described by the equator, in the same time; but as the centrifugal force, (or tendency which a body has to recede from the centre) increases, the action of gravity necessarily diminishes; and where the action of gravity is less, the vibrations of pendulums of equal lengths become slower; hence, supposing the earth to be a sphere, we have two causes why a pendulum should move slower at the equator than at London or Paris, viz. the action of heat which dilates all metals, and the diminution of gravity. But these two causes combined would not, according to Sir Isaac Newton, produce so great a difference as  $\frac{1}{3}$ th of an inch in the length of a pendulum, he therefore supposed the

---

ends with pins in F and f, then stretch the thread Ff and it will reach to I in the curve, then by moving a pencil round with the thread, and keeping it always stretched, it will trace out the ellipsis TCRO.—If this ellipsis be made to revolve on its longer axis TR, it will generate an *oblong spheroid*, or *Cassini's figure of the earth*; but if it be supposed to revolve on its shorter axis CO, it will form an *oblate spheroid*, or Sir Isaac Newton's figure of the earth.—The orbits or paths of all the planets are ellipses, and the sun is situated in one of the *foci* of the earth's orbit, as will be observed farther on.—The points F f, are called *foci*, or *burning points*; because, if a ray of light issuing from the point F meet the curve in the point I, it will be reflected back into the focus f. For lines drawn from the two foci of an ellipsis to any point in the curve, make equal angles with a tangent to the curve at that point; and by the laws of optics the angle of incidence is equal to the angle of reflection. Robertson's Conic Sections, Book III. Scholium to Prop. ix.

\* Philosophical Transactions, No. 386.

† A celebrated mathematician born at the Hague in Holland, in 1629.

earth to assume the same figure that a homogenous fluid would acquire by revolving on an axis, viz. the figure of an oblate spheroid, and found that the "diameter of the earth at the equator, is to its diameter from pole to pole, as 230 to 229 \*." Notwithstanding the deductions of Sir Isaac Newton, on the strictest mathematical principles, many of the philosophers in France, the principal of whom was Cassini, asserted that the earth was an oblong spheroid. the polar diameter being the longer; and as these different opinions were supposed to retard the general progress of science in France, the king resolved that the affair should be determined by actual admeasurement at his own expence. Accordingly about the year 1735, two companies of the most able mathematicians of that nation were appointed: the one to measure the degree of a meridian as near to the equator as possible, and the other company to perform a like operation as near the pole as could be conveniently attempted. The results of these admeasurements contradicted the assertions of Cassini, and of J. Bernoulli (a celebrated mathematician of Basil in Switzerland who warmly espoused his cause) and confirmed the calculations of Sir Isaac Newton.—In the year 1756, the Royal Academy of Sciences of Paris appointed eight astronomers to measure the length of a degree between Paris and Amiens; the result of their admeasurement gave 57069 toises for the length of a degree.

---

\* Motte's translation of Newton's Principia, Book III. Page 243. Calling the equatoreal diameter of the earth 7964 English miles, the polar diameter will be 7929.—For  $230 : 229 :: 7964 : 7929$  miles the polar axis. Hence the polar axis is shorter than the equatoreal diameter by 35 miles, and the earth is higher at the equator than at the poles by  $17\frac{1}{2}$  miles, a difference imperceptible on the largest globes that are made.—Suppose a globe to be 18 inches in diameter at the equator, then  $230 : 229 :: 18 : 17\frac{106}{113}$  the polar diameter; the difference of the diameters is  $\frac{9}{113}$  of an inch, half difference is  $\frac{9}{226}$  of an inch, the flatness of an 18 inch globe at each pole, which is less than the 23d part of an inch, or not much thicker than the paper and paste, a quantity not to be discovered by the appearance; and on smaller globes the difference would be considerably less. Hence the learner should be informed, that though the earth be not strictly a globe, it cannot be represented by any other figure which will give so exact an idea of its shape; and a lecturer who informs his hearers, that it is in the shape of a turnip or an orange gives a very false idea of its true figure.

The utility of finding the length of a degree in order to determine the magnitude and figure of the earth, may be rendered familiar to a learner thus; suppose I find the latitude of London to be  $51^{\circ}\frac{1}{2}$  north, and travel due north till I find the latitude of a place to be  $52^{\circ}\frac{1}{2}$  north, I shall then have travelled a degree, and the distance between the two places, accurately measured, will be the length of a degree: now if the earth be a correct sphere, the length of a degree on a meridian, or a great circle, will be equal all over the world, after proper allowances are made for elevated ground, &c. the length of a degree multiplied by 360 will give the circumference of the earth, and hence its diameter, &c. will be easily found: but if the earth be any other figure than that of a sphere, the length of a degree on the same meridian will be different in different latitudes, and if the figure of the earth resemble an oblate spheroid, the lengths of a degree will increase as the latitudes increase. The English translation of Maupertuis' figure of the earth, concludes with these words: (*see page 163 of the work*) "*The degree of the meridian which cuts the polar circle being longer than a degree of the meridian in France, the earth is a spheroid flatted towards the poles.*" For, the longer a degree is, the greater must be the circle of which it is a part; and the greater the circle is, the less is its curvature.

The first person who measured the length of a degree with any appearance of accuracy was Mr. Richard Norwood; by measuring the distance between London and York he found the length of a degree to be 367196 English feet, or  $69\frac{1}{2}$  English miles; hence, supposing the earth to be a sphere, its circumference will be 25020 miles, and its diameter 7964.\* miles; but if the length of a degree, at  
a medi-

---

\* 5280 feet make a mile, therefore 367196 divided by 5280 gives  $69\frac{1}{2}$  miles nearly, which multiplied by 360 produces 25020 miles, the circumference of the earth, but the circumference of a circle is to its diameter as 22 to 7, or more nearly as 355 to 113; hence, 355 : 113 : : 25020 miles : 7964 miles the diameter of the earth. Again 6 French feet make 1 toise, therefore 57069 toises are equal to 342414 French feet; but 107 French feet are equal to 114 English feet, hence 107 F. f. : 114 E. f. : : 3424 F. f. : 364814 English feet, which divided by 5280 the feet in a mile gives 69.09 miles the length of a  
D 5 degree

a medium, be 57069 toises, the circumference of the earth will be 24873 English miles, its diameter 7917 miles, and the length of a degree  $69\frac{1}{7}$  miles.

CONCLUSION. Notwithstanding all the admeasurements that have hitherto been made, it has never been demonstrated, in a satisfactory manner, that the earth is strictly a spheroid; indeed, from observations made in different parts of the earth, it appears that its figure is by no means that of a regular spheroid, nor that of any other known regular mathematical figure, and the only certain conclusion that can be drawn from the works of the several gentlemen employed to measure the earth, is that *the earth is something more flat at the poles than at the equator*.—The course of a ship, considering the earth a spheroid, is so near to what it would be on a sphere, that the mariner may safely trust to the rules of *globular sailing* \*, even though his course and distance were much more certain than it is possible for them to be. For which, and similar reasons, mathematicians content themselves with considering the earth as a sphere in all practical sciences, and hence the artificial globes are made perfectly spherical, as the best representation of the figure of the earth.

#### CHAPTER IV.

##### *Of the † Diurnal and Annual Motion of the Earth.*

THE motion of the earth was denied in the early ages of the world, yet as soon as astronomical knowledge began to be more attended to, its motion received the assent

---

degree by the French admeasurement. Or, 342414 multiplied by 360 produces 123269040 French feet the circumference of the earth, and 107 : 114 :: 123269040 : 131333369 English feet, equal to 24873.74 miles the circumference of the earth, and 355 : 113 :: 24873.74 : 7917 miles the diameter of the earth.

\* Robertson's Navigation, Book VIII. Art. 143.

† Mr. Adam Walker in his Familiar Philosophy (see the lecture on the momentum of light) supposes the earth and planets to be turned on their axes by the impulse of light! He says, "that in all the positions in  
" which

assent of the learned, and of such as dared to think differently from the multitude, or were not apprehensive of ecclesiastical censure.—The astronomers of the last and present age have produced such a variety of strong and forcible arguments in favour of the motion of the earth as must effectually gain the assent of every impartial enquirer.—Among the many reasons for the motion of the earth, it will be sufficient to point out the following.

1. *Of the Diurnal Motion of the Earth.*

The earth is a globe of 7964 miles in diameter (as has been shewn in Chap. III.) and by revolving on its axis every 24 \* hours from west to east, it causes an *apparent* diurnal motion of all the heavenly bodies from east to west.—We need only look at the sun, or stars, to be convinced that either the earth, which is no more than a point † when compared with the heavens, revolves on its axis in a certain time, or else the sun, stars, &c. revolve round the earth in nearly the same time. Let us suppose for instance that the sun revolves round the earth in 24 hours, and that the earth has no diurnal motion.—Now, it is a known principle in the laws of motion, that if any body revolve round another as its centre, it is necessary that the central body be always in the plane in which the revolving body moves, whatever curve it describes ‡; therefore if the sun move round the earth in a day, its diurnal path must always describe a circle which will divide the earth into two *equal*

---

“ which the earth stands to the sun, during its annual revolution round him, it will be found that more rays fall on one side of its axle and centre, than on the other.”—With all due respect to Mr. Walker’s known abilities, I confess I do not see the truth of this assertion; if it be allowed, (as Mr. Walker has admitted in his 9th lecture on optics, page 403,) that the rays of light fall parallel upon the earth from the sun, will not these rays at the time of the equinoxes, strike the earth in a direction perpendicular to the axis? At this season, then the impulse of light would have no effect whatever to turn the earth on its axis.

\* That is, the time from the sun’s being on the meridian of any place, to the time of its returning to the same meridian the next day; but the earth forms a complete revolution on its axis in 23 hours 56 minutes 4 seconds, see definition 61, page 14.

† Dr. Keill, Lect. 26,

‡ Emerson’s Astronomy, page 11.

hemispheres. But this never happens except on two days of the year, viz. at the time of the equinoxes, when the sun rises exactly in the east, and sets exactly in the west; for in our summer the sun rises to the north of the east and sets to the north of the west, and in the winter it rises to the south of the east and sets to the south of the west, and therefore its diurnal path divides the globe into two *unequal* parts; consequently the sun does not move round the earth. To render this more intelligible to a young student, let a pin, of some inches in length, be fixed perpendicular upon an horizontal plane, and observe the shadow that the top of it describes on any day of the year; this shadow will always be a curve, except at the time of the equinoxes, hence the earth is never in the sun's apparent diurnal orbit but then: for if the top of the pin kept all the time in the plane of the sun's apparent diurnal orbit, the shadow described would be a straight line\*, because it would fall in the intersection of two planes †; therefore the sun has no diurnal motion round the earth, consequently the earth has a diurnal motion on its axis.

It is no argument against the earth's diurnal motion that we do not feel it; a person in the cabin of a ship, on smooth water, cannot perceive the ship's motion when it turns gently and uniformly round ‡: neither does the motion of the earth cause bodies to fall from its surface; for all bodies of whatever matter they are composed, are drawn to the earth by the power of its central attraction §; which, laying hold of them according to their densities, or quantities of matter, without regard to their magnitudes, constitutes what we call weight.

The phænomena of the *apparent* diurnal motion of the sun may be explained by the motion of the earth; thus, let IFGH (plate I. fig. v.) represent the earth, S the sun, and the circle DSBC the apparent concavity of the heavens.

\* Emerson's Dialling, Prop. II. p. 9th.

† It is demonstrated in Euclid, Prop. III. Book XI., that if two planes intersect each other, their common section is a straight line.

‡ Ferguson's Astronomy, Art. 119.

§ Newton's Principia, Book III. Prop. vii.

Let the earth revolve on its axis from I towards G (viz. from west to east). Suppose a spectator to be at I, the sun, which is at an immense distance and enlightens half the globe at once, will appear to be rising. As the earth moves round, the spectator is carried towards F, and the sun seems to increase in height, when he has arrived at F, the sun is at the highest. As the earth continues to turn round, the spectator is carried from F towards G, and the altitude of the sun keeps continually diminishing; when he has arrived at G the sun is setting. During the time the spectator has been carried from I to G, the sun has appeared to move the contrary way. Hence it is evident, that while the spectator is carried through the illuminated half of the earth, it is day-light; at the middle point F, it is noon; also while he is carried through the dark hemisphere, it is night; and at H it is midnight. Thus the vicissitude of day and night evidently appears by the rotation of the earth about its axis: what has been said of the sun is equally applicable to the moon, or any star placed at S; therefore all the celestial bodies seem to rise and set by turns, according to their various situations. The spectator at I, F, G, H, will always have his feet towards the centre of the earth, and the sky above his head, whatever position the earth may have; agreeably to the laws of gravitation or attraction. Thus an inhabitant at *a* will be the most powerfully attracted towards his antipodes *b*, because there is the greatest mass of earth under his feet in that direction; for the same reason *b* will be the most attracted towards *a*, *m* towards *n*, and *n* towards *m*, &c. hence it appears that every body on the surface of the earth is attracted towards its centre, or rather towards the antipodes of that body, for the *whole earth* is the attracting mass, and not some unknown substance placed in the centre of the earth. There is no such thing as an upper and under side of the earth, suppose *a* to be an inhabitant of Nankin in China, *b* will be an inhabitant of South America near Buenos Ayres, each having the earth under his feet and the sky above his head; also if *n* be an inhabitant a little east of Quito in South America, *on the equator*, *m* will be an inhabitant upon *the equator* in the island of Sumatra,

matra, and in the course of 12 hours,  $n$  will have the very same position as  $m$ , by the revolution of the earth.

### 2. *Of the annual Motion of the Earth.*

The diurnal revolution of the earth on its axis being proved, the annual motion round the sun will be readily admitted; for, either the earth moves round the sun in a year, or else the sun moves round the earth: now, by the laws of centripetal force, if two bodies revolve about each other, they revolve round their common centre of gravity \*; and it is evident that if the two bodies be of equal magnitude and density, the centre of gravity will be equi-distant from each body; but, if they be of different magnitudes, the centre of gravity will be nearest to the larger body; if the earth, therefore, remain in the same situation while the sun revolves round it, its magnitude must be vastly greater than that of the sun; for it is contrary to the laws of nature for a heavy body to revolve round a light one as its centre of motion: but, from observations on the dimensions † and distances of the sun and planets, it appears that the sun so greatly exceeds, not only the earth, but the planets, in magnitude, that the common centre of gravity of the whole is almost constantly within the body of the sun, so that the sun's motion round the common centre of gravity of the earth and the planets is not perceptible by ordinary observers. Not only the earth, therefore, but the planets, move round the sun.

The earth is computed to be 95 millions of miles from

\* The centre of gravity of two bodies is a point, on which, if they were both supported by a line joining their centres, they would rest in equilibrium.

† The apparent diameters of the planets are found by a *micrometer*, placed in the focus of a telescope; or, the apparent diameter of the sun may be measured by means of the projection of his image into a dark room, through a circular aperture. From these apparent diameters, and the respective distances from the earth, the real diameters of the sun and planets may be determined.

the sun \*, and performs its revolution round him, describing an elliptical orbit or path †, in 365 days 5 hours 48 minutes and 48 seconds, from any equinox or solstice to the same again; it travels at the rate of upwards of 68,000 miles per hour ‡. Besides this motion which is common to every inhabitant on the earth, the inhabitants at the equator are

\* That part of the heavens in which the sun or a planet would appear if viewed from the surface of the earth, is called its *apparent* place; and the point in which it would be seen at the same instant from the centre of the earth, is called its *true* place. The difference between the true and apparent place is called the parallax. In plate IV. fig. vi. let O be the centre of the earth, P the place of an observer on its surface, and S the sun or a planet in the heavens: now, to an observer at O, the sun would appear at *a*, and to an observer at P it would appear at *b*; the arch *a b*, or the angle *a S b*, which is equal to the angle PSO, is called the horizontal parallax. Mr. Short in vol. 52, part ii, of the Philosophical Transactions, has determined the horizontal parallax of the sun to be 8'65, at its mean distance from the earth. Hence, by trigonometry,

As logarithmical sine of 8' 65, or angle PSO,	5.6219140
Is to <i>one</i> semi-diameter of the earth PO,	0.0000000
So is radius, sine of 90 degrees, or sine of OPS.	10.0000000

To 23882.84 semi-diameters,	4.3780860
-----------------------------	-----------

Now, if we take the diameter of the earth 7970 miles, as Mr. Short has done, the semi-diameter 3985 multiplied by 23882.84 gives 95173117 miles, the distance of the earth from the sun: if the diameter of the earth be taken an 7964 miles, the distance will be 95101468 miles; if it be taken 7917 miles (see the chapter of the Figure of the Earth) the distance will be 94540222 miles. In a case of such uncertainty, where a very small error in the parallax will produce an astonishing difference in the conclusion of the process, and where an error in the diameter of the earth will also affect the operation, we may rest content with estimating the distance of the earth from the sun at 95 millions of miles.

† The idea that the earth moved in an elliptical orbit was first conceived by Kepler, an eminent German astronomer, and demonstrated by Sir Isaac Newton. See the Principia, Book III. Prop. xiii.

‡ The earth's distance from the sun is 95 millions of miles, the mean diameter of its orbit is therefore 190 millions of miles; and the circumference of a circle is three times the diameter and one-seventh more; or the circumference is to the diameter as 355 to 113 more nearly; hence, 113 : 355 : : 190,000,000 : 596902654 the circumference of the orbit; but this circumference is described in 365 days 5 hours 48 minutes 48 seconds, or 365 days 6 hours nearly, or 8766 hours; hence 8766 h. : 596902654 m. : : 1 h. 68092 miles *per* hour the inhabitants of the earth are carried by its annual revolution.

carried

carried 1042 \* miles every hour by the diurnal revolution of the earth on its axis, while those in the parallel of London are carried only about 644 miles *per* hour. The axis of the earth makes an angle of  $23^{\circ} 28'$  with a perpendicular to the plane of its orbit, and keeps always the same oblique direction throughout its annual course †; hence it follows that, during one part of its course, the north pole is turned towards the sun, and, during another part of its course, the south pole is turned towards it in the same proportion; which is the cause of the different seasons, as spring, summer, autumn, and winter. The orbit of the earth being elliptical, the earth must at some times approach nearer to the sun than at others, and will of course take more time in moving through one part of its path than through another. Astronomers have observed that the earth is more rapid in the winter half of its orbit than in the summer by about seven days (*see the note to the 6th Geographical Theorem, p 40*); but although in the winter we are nearer to the sun than in the summer, yet in that season it seems farthest from us, and the weather is more cold and inclement: the simple account of which phenomenon is, that the sun's rays falling more perpendicularly on us in summer, augment the heat of the weather; so, being transmitted more obliquely on our parallel of latitude during the winter, the cold is increased and rendered more intense. The heat in the torrid zone does not arise from those parts of the earth being nearer to the sun, but from the rays of the sun falling directly perpendicular upon, and darting immediately through the atmosphere. It might likewise be expected that, as we are less distant from the sun in the winter than in the summer, it would appear larger; but the difference of situation is so

---

\* These distances are found by multiplying the number of miles contained in a degree in any parallel of latitude by 15; thus, the circumference of the earth at the equator is in  $360^{\circ} \times 69\frac{1}{2}$  m., and in the latitude of London it is equal to  $360^{\circ} \times 42.65$ , and  $24 \text{ h.} : 360^{\circ} \times 69\frac{1}{2} : : 1 \text{ h.}$  or  $1 : 15 \times 69\frac{1}{2} : : 1 : 1042\frac{1}{2} \text{ m.}$

† This is not strictly true, though the variation, called the nutation of the earth's axis, is scarcely perceptible in two or three years. *Keill, Lect. viii.*

small as to make no sensible alteration in the sun's apparent magnitude.

The sun is not supposed to be fixed in the centre of the earth's elliptical orbit, but in one of the foci. Let S represent the sun (Plate II, Fig. 3.) and AGFBDE the elliptical orbit of the earth. Then A is called the Perihelion, or lower apsis, being the earth's nearest distance from the sun; B is called the Aphelion, or higher apsis, being the greatest distance of the earth from the sun, and SC the distance between the sun (in the focus) and the centre, is called the eccentricity of the earth's orbit. If from the centre C, there be erected upon the axis AB the perpendicular CE meeting the orbit in E, and the line SE be drawn, it will represent the mean distance of the earth from the sun, being equal to half the axis AB\*, consequently SE is 95 millions of miles.

Though the motion of the earth in its orbit be not uniform, yet it is regulated by a certain immutable law, from which it never deviates; which is that a line drawn from the centre of the sun to the centre of the earth, being carried about with an angular motion, describes an elliptical area proportional to the time in which that area is described †, viz. if the times in which the earth moves from A to E, from E to D, and from D to B, be equal, then the areas, or spaces, ASE, ESD, and DSB, will all be equal. The motion of the earth is sometimes quicker and sometimes slower in moving through equal parts of its orbit; for, when the earth is at A (in the winter) the sun attracts it more strongly, and therefore the motion is quicker than any where else; likewise, when it is at B (in the summer) it is least affected by the sun's attraction, and consequently the motion there is slower than in any other part of its orbit, for the power of gravity decreases as the square of the distance increases ‡; besides it is obvious, from the con-

---

\* It is demonstrated by all writers on conic sections, that a line drawn from one end of the conjugate axis of an ellipsis to the focus, is equal to half the transverse axis, viz.  $SE = CB$  or  $CA$ .

† This law was discovered by Kepler, and demonstrated by Sir Isaac Newton. See the Principia, Book III, Prop. xiii.

‡ Newton's Principia, Book III. Prop. ii.

struction of the figure, that, if the space ASE be described in the same time with the space BSD, the arch AE will be greater than the arch BD.

The phænomena of the different seasons of the year will appear plainly from the following observations. Let ABCD ( Plate III. Fig. 1.) represent the plane of the earth's annual orbit, having the sun in the focus F; and let *a b*, an imaginary line passing through the centre of the earth, be perpendicular to this plane; and let the axis NS, of the earth, make an angle of  $23^{\circ} 28'$  with this perpendicular: then if the earth move in the direction A, B, C, D, in such a manner that NS may always remain parallel to itself, and preserve the same angle with *a b*, it will point out the seasons of the year; for, suppose a line to be drawn from the centre of the sun to the centre of the earth, it is evident that the sun will be vertical to that part of the earth which is cut by this line. Now, when the earth is in Libra  $\zeta$ , the sun will appear to be in Aries  $\gamma$ , the days and nights will be equal in both hemispheres, and the season a medium between summer and winter; the line dividing the dark and light hemispheres, passes through the two poles N and S, and consequently divides all the parallels of latitude, as PR, into two equal parts: hence the inhabitants of the whole face of the earth have their days and nights equal, viz. twelve hours each. While the earth moves from Libra  $\zeta$  to Capricorn  $\cap$ , the north pole N will become more and more enlightened, and the south pole S will be gradually involved in darkness, consequently the days in the northern hemisphere will continue to increase in length, and in the southern hemisphere they will decrease in the same proportion, all the parallels of latitude being unequally divided. When the earth has arrived at Capricorn  $\cap$ , the sun will appear to be in Cancer  $\sigma$ , it will be summer to the inhabitants of the northern hemisphere, and winter to those in the southern; the inhabitants at the north pole, and within the arctic circle, will have constant day, and those at the south pole, and within the antarctic circle, will have constant night. While the earth moves from Capricorn  $\cap$  to Aries  $\gamma$ , the south pole will become more and more enlightened; consequently, the days in the southern hemisphere will increase in length, and in the northern hemisphere

hemisphere they will decrease. When the earth has arrived at Aries  $\varphi$ , the sun will appear to be in Libra  $\triangle$ , and the days and nights will again be equal all over the surface of the earth. Again, as the earth moves from Aries  $\varphi$  towards Cancer  $\varpi$ , the light will gradually leave the north pole and proceed to the south; when the earth has arrived at Cancer  $\varpi$ , it will be summer to the inhabitants in the southern hemisphere, and winter to those in the northern: the inhabitants of the south pole (if any) will have continual day, those at the north pole constant night. Lastly, while the earth moves from Cancer  $\varpi$  to Capricorn  $\nu$ , the sun will appear to move from Capricorn  $\nu$  to Cancer  $\varpi$ , and the days in the northern hemisphere will be increasing, while those in the southern will be diminishing in length; and while the earth moves from Capricorn  $\nu$  to Cancer  $\varpi$ , the sun will appear to move from Cancer  $\varpi$  to Capricorn  $\nu$ , the days in the northern hemisphere will then be decreasing, and those in the southern hemisphere increasing. In all situations of the earth, the equator will be divided into two equal parts, consequently the days and nights at the equator are always equal. Thus the different seasons are clearly accounted for, by the inclination of the axis of the earth to the plane of its orbit\*, combined with the parallel motion of that axis.

CHAP-

---

\* In addition to these observations, the author farther illustrates the seasons of the year by an orrery; and sometimes by a brass wire supported on two stands of different heights, correspondent to the diameter of the wire circle and the obliquity of the ecliptic; as in Ferguson's Astronomy, chap. x. But, as this last method does not so clearly shew the obliquity of the axis of the earth to the plane of its orbit: take a board of any convenient dimensions, suppose two feet across, on which describe a circle, or an ellipsis differing little from a circle, draw a diameter  $OFO$  (Plate III. fig. 1.) and parallel to this diameter let several lines  $e f$  be drawn, then bore several holes perpendicularly down in the points  $e, e$ , &c. of the circumference of the circle, take two pieces of wire crossing each other in an angle of  $23^{\circ} 28'$ ; as  $a g$ , and  $n f$ , of which  $a g$  the perpendicular wire is the longer, and connect them by a straight wire  $e f$ ; then placing a small globe on the point  $n$ , and a light in the centre of the circle  $e$ , of the same height as the centre of the little globe; let the point  $g$  in the longer wire  
be

## CHAPTER V.

*Of the Origin of Springs and Rivers, and of the Saltness of the Sea.*

VARIOUS opinions have been held by ancient, as well as modern philosophers, respecting the origin of springs and rivers; but the true cause is now pretty well ascertained. It is well known that the heat of the sun draws vast quantities of vapour from the sea, which being carried by the wind to all parts of the globe, and being converted by the cold into rain and dew, it falls down upon the earth; part of it runs down into the lower places, forming rivulets, part serves for the purposes of vegetation, and the rest descends into hollow caverns within the earth, which breaking out by the sides of the hills forms little springs; many of these springs running into the valleys increase the brooks or rivulets, and several of these meeting together make a river.

Dr. Halley\* says, the vapours that are raised copiously from the sea, and carried by the winds to the ridges of mountains, are conveyed to their tops by the current of air; where the water being presently precipitated, enters the crannies of the mountains, down which it glides into the caverns, till it meets with a stratum of earth or stone, of a nature sufficiently solid to sustain it. When this reservoir is filled, the superfluous water, following the direction of the stratum, runs over at the lowest place, and in its passage meets perhaps with other little streams, which have a similar origin; these gradually descend till they meet with an aper-

---

be fixed successively in the holes  $e, e$ , &c. in the circumference of the circle, so that the base  $ef$  of the wire, may rest on the lines  $ef$  in the plane of the earth's orbit, the seasons of the year will be agreeably and accurately illustrated. If the little globe be placed upon the point  $a$ , instead of the point  $n$ , and the same method be observed in moving the wires round the orbit, there will be no diversity of seasons. The diurnal revolution of the earth may be shewn by moving the globe round the wire  $nf$ , as an axis with the finger.

\* Philosophical Transactions, No. 192.

ture at the side, or foot, of the mountain, through which they escape and form a spring, or the source of a brook or rivulet. Several brooks or rivulets, uniting their streams form small rivers, and these again being joined by other small rivers, and united in one common channel, form such streams as the Rhine, Rhone, Danube, &c.

Several springs yield always the same quantity of water, equally when the least rain or vapour is afforded, as when rain falls in the greatest quantities; and as the fall of rain, snow, &c. is inconstant or variable, we have here a constant effect produced from an inconstant cause, which is an unphilosophical conclusion. Some naturalists, therefore, have recourse to the sea, and derive the origin of several springs immediately from thence, by supposing a subterraneous circulation of percolated waters from the fountains of the deep.

That the sun exhales as much vapour as is sufficient for rain is past dispute, having been several times proved by actual experiments. Dr. Halley\* determined by experiment and calculation †, that in a summer's day, there may be raised in vapours from the Mediterranean 5280 millions of tuns of water, and yet the Mediterranean does not receive from all its rivers above 1827 millions of tuns in a day, which is little more than a third part of what is exhausted by vapours ‡; and from the river Thames, twenty millions three hundred thousand tuns may be raised in one day in a similar manner.—In the Old Continent there are about 430 rivers which fall directly into the ocean, or into the Mediterranean and Black Seas, and in the New Continent, scarcely 180 rivers are known, which fall directly into the sea: but in this number, only the greater rivers are comprehended §. All these rivers carry to the sea a great

\* Dr. Halley was an eminent mathematician, astronomer, and philosopher, born in London in the year 1656.

† Philosophical Transactions, No. 212.

‡ As evaporation cannot carry off fixed salts, it would appear that if the above calculation be accurate, the Mediterranean would be more salt than the Ocean, but it must be remembered that a current sets constantly out of the Atlantic Ocean into the Mediterranean.

§ Buffon's Natural History.

quantity of mineral and saline particles, which they wash from the different soils through which they pass, and the particles of salt, which are easily dissolved, are conveyed to the sea by the water. Dr. Halley imagines that the saltness of the sea proceeds from the salts of the earth only, which rivers convey thither, and that it was originally fresh. So that its saltness will continue to increase: for, the vapours which are exhaled from the seas are entirely fresh, or devoid of saline particles. Others imagine that there is a great number of rocks of salt at the bottom of the sea and from these rocks it acquires its saltness. Some writers again, have imagined that the sea was created salt that it might not corrupt; but it may well be supposed that the sea is preserved from corruption by the agitations of the wind, and from the flux and reflux of the tide, as much as by the salt it contains; for when sea water is kept in a barrel it corrupts in a few days. The Honorable Mr. Boyle \* relates that a mariner becalmed for thirteen days, found at the end of that time the sea so infected, that if the calm had continued the greatest part of his people on board would have perished.—The sea is nearly equally salt throughout, under the equinoctial line and at the Cape of Good Hope, though there are some places on the Mozambique coast where it is saltier than elsewhere. It is also asserted that it is not quite so salt under the arctic circle as in some other latitudes †, this probably may proceed from the great quantity of snow, and the great rivers which fall into those seas: to which we may add, that the sun does not draw such quantities of fresh water, or vapours, from those seas as in hot countries.

It is worthy of remark that all lakes from which rivers derive their origin, or which fall into the course of rivers, are not saline ‡; and almost all those, on the contrary, which

---

\* A younger son of the Earl of Cork, and one of the most celebrated philosophers in Europe, born at Lismore in the County of Waterford, 1626-7. See his treatise on the saltness of the sea, published in 1674.

† In a treatise on Chemistry, published by Dr. Thompson of Edinburgh, page 375, it is stated that the ocean contains most salt between 10° and 20° south latitude, and that the proportion of salt is the least in latitude 57° north.

‡ Buffon's Natural History, Chap. II.

receive rivers, without other rivers issuing from them are saline: this seems to favour Dr. Halley's opinion respecting the saltness of the sea, for evaporation cannot carry off fixed salts, and consequently those salts which rivers carry into the sea remain there. It is asserted \* to be the peculiar property of sea-water, that when it is absolutely salt it never freezes; and that the islands or rocks of ice which float in the sea near the poles, are originally frozen in the rivers, and carried thence to the sea by the tide; where they continue to accumulate by the great quantities of snow and sleet which fall in those seas. According to this opinion, great quantities of ice can be produced only from great quantities of fresh water, or from large rivers, and as large rivers can only flow from large tracts of land, it would appear that there must be immense tracts of land near the south pole, for the Antarctic Ocean abounds with fields or mountains of ice, as well as the Arctic Ocean; but our circumnavigators have traversed the southern Ocean to upwards of seventy degrees south latitude, without discovering any land. With respect to the freezing of salt water, we have several instances of the Baltic †, and other seas being frozen over, when the ice on the surface could never proceed from rivers. It is true that the sailors frequently take large pieces of the rocks of ice, and thaw them for the use of the ship's company, and always find the water fresh; but it does not follow from this that the ice is formed in the rivers. As fresh water only is extracted from sea water by the heat of the sun, and carried into the atmosphere: may not the fresh, without the saline, particles of sea water be converted into ice by extreme cold?—

---

\* Emerson's Geography, page 64.

† The Baltic Sea is not so salt as the Ocean, and the proportion of salt is increased by a west wind, and still more by a north-west wind: a proof that not only the saltness of the Baltic is derived from the ocean, but that storms have a much greater effect upon the waters of the ocean than has been supposed.—Dr. Thomson's Chemistry page 375.—The Baltic Sea has little or no tides, and a current runs constantly through the Sound into the Cattegat sea.

## CHAPTER VI.

*Of the Flux and Reflex of the Tides.*

**A**TIDE is that motion of the water in the seas and rivers, by which they are found to rise and fall in a regular succession; and this flowing and ebbing is caused by the attraction of the sun and moon. \*

Suppose the earth to be entirely covered by a fluid as A, B, Z, C, D, Q, N. (Plate III. Figure 2.) and the action of the sun and moon to have no effect upon it, then it is evident that all the particles, being equally attracted towards the centre O of the earth, would form an exact spherical surface; except, that by the revolution of the earth on its axis N' S', the attraction from B towards O, and from Q towards O would be a little diminished by the centrifugal force. Let the moon at M now exert her influence upon the water; then because the power of attraction diminishes as the square of the distance increases, those parts will be the most attracted which are the nearest to the moon, and their tendency towards O will be diminished; the waters at Z, B, and C, will therefore rise, and at Z, which is nearest to the moon, they will be the highest; but when the waters in the zenith Z are elevated, those in the nadir N are likewise elevated in a similar manner; this is known from experience, for we have high water when the moon is in our nadir, as well as when she is in our zenith; we therefore conclude that, when the moon is in our zenith, our antipodes have high water: the truth of this, as well as every other phenomena respecting the tides, will be discussed in the following theorems.

---

\* This was known to the ancients, Pliny expressly says that the cause of the ebb and flow is in the sun, which attracts the waters of the ocean, and that they also rise in proportion to the proximity of the moon to the earth. Dr. Hutton's Math. Dict., word Tides.

THEOREM I.\* *The parts of the earth directly under the moon, or where the moon is in the Zenith as at Z (Plate III. Figure 3.) ; and those places which are diametrically opposite to the former, or under the Nadir as at N, will have high water at the same time.*

Because the power of gravity decreases as the square of the distance increases ; the waters at A, B, Z, C, D, on the side of the earth next the moon M, will be more attracted by the moon than the central parts O of the earth, and the central parts will be more attracted than the surface N on the opposite side of the earth ; therefore the distance between the centre of the earth and the surface of the water, under the zenith and nadir, will be increased. For, let three bodies Z, O, and N, be equally attracted by M ; then it is evident they will all move equally fast towards M, and their mutual distances from each other will continue the same ; but if the bodies be unequally attracted by M, that body which is the most attracted will move the fastest, and its distance from the other bodies will be increased. Now, by the law of gravitation, M will attract Z more strongly than it does O, by which the distance between Z and O will be increased. In like manner O being more strongly attracted than N, the distance between O and N † will be increased ; suppose now a number of bodies A, B, Z, C, D, F, N, E, placed round O, to be attracted by M, the parts Z and N will have their distances from O increased ; while the parts A and D, being nearly at the same

---

\* A theorem is a proposition which admits of proof, or demonstration, from definitions clearly understood, and from the known general properties of the subject under consideration.

† This appears very plain, but Mr. Adam Walker, a gentleman well known as an ingenious lecturer on philosophy, says, " That the moon's influence should be less at N than Z there can be little doubt ; but still the place N tends to the earth's centre O, as much as any other part of the globe, and is rather increased than diminished by the power at M. How, therefore, the tide at N should rise for want of attraction, or from being left behind, at that place I cannot conceive, though it is agreeable to the Newtonian hypothesis."

distance from M as O is, will not recede from each other, but will rather approach nearer to O by the oblique attraction of M. Hence if the whole earth were composed of bodies similar to A, B, Z, C, D, F, N, E, and to be similarly attracted by M, the section of the earth, formed by a plane passing through the moon and the earth's centre would be a figure resembling an ellipsis, having its longer axis ZN, directed towards the moon; and its shorter axis AD in the horizon. The figure of the earth therefore would be an oblong spheroid having its longer axis directed to the moon, consequently it will be high water in the zenith and nadir, at the same time; and as the earth turns round its axis from the moon to the moon again in about 24 hours and 48 minutes, there will be two tides of flood and two of ebb in that time, agreeably to experience.

According to the foregoing explanation of the ebbing and flowing of the sea, every part of the earth is gravitating towards the moon; but as the earth revolves round the sun, every part of it gravitates towards the sun likewise; it may be asked how is this possible at the time of full moon, when the moon is at *m* and the sun at *S*; has the earth a tendency to fall contrary ways at the same time? This is a very natural question, but it must be considered that it is not the centre of the earth that describes the annual orbit round the sun, but the common centre of gravity of the earth and moon together; and that whilst the earth is moving round the sun, it also describes a circle round that centre of gravity, about which it revolves as many times as the moon revolves round the earth in a year\*. The earth is therefore constantly falling towards the moon, from a tangent to the circle which it describes round the common centre of gravity of the earth and moon. Let M represent the moon (Plate III. Figure 4.), TW a part of the moon's orbit, and as the earth is supposed to contain about forty times the quantity of matter which is contained in the moon, the common centre of gravity from the centre of the earth towards the moon, will be considerably less than the earth's

---

\* Ferguson's Astronomy, Article 298.

diameter \*, let this common centre of gravity be represented by C. Then whilst the moon goes round her orbit, the centre of the earth describes the circle  $d o e$  round C, to which circle  $O a$  is a tangent: therefore when the moon has gone from M to a little past W, the earth has moved from O to e; and in that time has fallen towards the moon from the tangent at a to e. This figure is drawn for the new moon, but the earth will tend towards the moon in the same manner during its whole revolution round C.

**THEOREM II.** *Those parts of the earth where the moon appears in the horizon, or 90 degrees distant from the Zenith and Nadir, as at A and D (Plate III. Figure 3.) will have ebb, or low water.*

For, as the waters under the zenith and nadir rise at the same time, the waters in their neighbourhood will press to-

\* The common centre of gravity of two bodies is found thus, as the sum of the weights, or quantities of matter in the two bodies is to their distance from each other, so is the weight of the less body to the distance of the greater from the centre of gravity. Now if the quantity of matter in the moon be represented by 1, that in the earth by 40, and the distance of the earth from the moon be estimated at 240,000 miles, then  $40+1 : 240,000 :: 1 : 5853$  miles, the distance of the centre of the earth from the common centre of gravity. Mr. Ferguson in a note makes the distance 6000 miles, but his calculation is wrong, for he has forgot to add the quantity of matter in the moon to that of the earth. Mr. Adam Walker in the 11th Lecture of his Familiar Philosophy has made exactly the same mistake. It may be said that the error here be trifling; the objection is not made to the quantity of the error, but to the principle of calculation, which may lead a learner, in many instances, into very considerable errors.—Mr. A. Walker, in the same Lecture, ingeniously accounts for its being high-water in the zenith and nadir at the same time, in the following manner. “The parts of the earth that are farthest from the moon, will have a swifter motion round the centre of gravity than the other parts; thus, the side  $n$ , will describe the circle  $n V Y$ , while the side  $m$  will only describe the small circle  $m r s$ , round the centre of gravity C. Now, as every thing in motion always endeavours to go forward in a straight line, the water at  $n$ , having a tendency to go off in the line  $n q$ , will in a degree overcome the power of gravity, and swell into a heap or protuberance, as represented in the figure, and occasion a tide opposite to that caused by the attraction of the moon.”

wards those places to maintain the equilibrium ; and to supply the place of these waters, others will move the same way, and so on to places of 90 degrees distance from the zenith and nadir : consequently at A and D where the moon appears in the horizon, the waters will have more liberty to descend towards the centre of the earth ; and therefore in those places they will be the lowest. Hence it plainly appears, that the ocean if it covered the whole surface of the earth, would be a spheroid (as was observed in the foregoing theorem) the longer diameter as ZN passing through the place where the moon is vertical, and the shorter diameter as AD passing through the rational horizon of that place. And as the moon apparently \* shifts her position from east to west in going round the earth every day, the longer diameter of the spheroid following her motion will occasion the two floods and ebbs in about 24 hours and 48 minutes †, the time which any meridian of the earth takes in revolving from the moon to the moon again ; or the time elapsed (at a medium) between the passage of the moon over the meridian of any place, to her return to the same meridian.

The meridian altitude of the moon at any place is her greatest height above the horizon at that place, hence the greater the moon's meridian altitude is, the greater the tides will be ; for they increase from the horizon D to the point Z under the zenith : and the greater the moon's meridian depression is below the horizon, the greater the tides will be ; for they increase from the horizon D towards N the point below the nadir, and consequently as the tides increase from D to N, the tides in their antipodes will increase from A to Z.

\* The real motion of the moon is from the west towards the east ; for if she be seen near any fixed star on any night, she will be seen about 13 degrees to the eastward of that star the next night and so on. The moon goes round her orbit from any fixed star to the same again in about 27 days 8 hours. Hence  $27\text{d } 8\text{h} : 360^\circ :: 1\text{d} : 13^\circ 10' 14'' .6$  the mean motion of the moon in 24 hours.

† The mean motion of the moon in 24 hours is  $13^\circ 10' 14'' .6$  and the mean apparent motion of the sun in the same time is  $59' 8'' .2$  (see the note to definition 61, page 14) the moon's motion is therefore  $12^\circ 11' 6'' .4$  swifter than the apparent motion of the sun in one day, which, reckoning 4 minutes to a degree, amounts to 48 minutes 44 seconds of time.

**THEOREM III.** *The time of high water is not precisely at the time of the moon's coming to the meridian, but about an hour after.*

For, the moon acts with some force after she has passed the meridian, and by that means adds to the libratory, or waving motion, which the waters had acquired whilst she was on the meridian.

**THEOREM IV.** *The tides are greater than ordinary twice every month, viz. at the times of new and full moon, and these are called SPRING-TIDES. (Plate III. Figure 3.)*

For at these times the actions of both the sun and moon concur to draw in the same straight line SMZON, and therefore the sea must be more elevated. In conjunction, or at the new moon when the sun is at S and the moon at M both on the same side of the earth, their joint forces conspire to raise the water in the zenith at Z, and consequently (according to Theorem I.) at N the nadir likewise \*. When the sun and moon are in opposition, or at the full moon when the sun is at S and the moon at *m*, the  
earth

\* Mr. Walker says (Lecture 11th) that at new moon "The sun's influence is added to that of the moon, and the centre of gravity C (Plate III. Figure 4th) will, therefore, be removed farther from the earth than *m* C, and of course, increase the centrifugal tendency of the tide *n*: hence, both the attracted and centrifugal tide are spring-tides, at that time."—"But spring-tides take place at the full as well as at the change of the moon. Now it has been premised, that if we had no moon, the sun would agitate the ocean in a small degree and make *two* tides every twenty-four hours, though upon a small scale. The moon's centrifugal tide at Z (Plate III. Figure 3.) being increased by the sun's attraction at S, will make the protuberance a spring-tide; and the sun's centrifugal tide at N will be reinforced by the moon's attraction at *m*, and make the protuberance N a spring tide; so spring-tides take place at the full as well as change of the moon."—Suppose the moon to be taken away (Plate III. Figure 4.) the common centre of gravity of the earth and the sun would fall entirely within the body of the sun, round which the earth revolves in a year at the rate of about a degree in a day; hence the parts *n* of the earth farthest from the sun would have a little more tendency to recede from the centre of motion S, than the parts *m* which are

earth being between them; while the sun raises the water at Z under the zenith and at N under the nadir, the moon raises the water at N under the nadir and at Z under the zenith.

**THEOREM V.** *The tides are less than ordinary twice every month; that is about the time of the first and last quarters of the moon, and these are called NEAP-TIDES. (Plate III. Figure 3.)*

Because in the quadratures, or when the moon is 90 degrees from the sun, the sun acts in the direction SD and elevates the water at D and A; and the moon acting in the direction MZ or mN elevates the water at Z and N: so that the sun raises the water where the moon depresses it, and depresses the water where the moon raises it; consequently the tides are formed only by the difference between the attractive force of the sun and moon.—The waters at Z and N will be more elevated than the waters at D and A, because the moon's attractive force is four \* times that of the sun.

THEOREM

the nearest. So that if the sun were on the meridian of any place it would be high water at that place by the sun's attraction, and it would at the same time be high water at the antipodes of that place by the centrifugal tendency of  $n$ ; consequently as the earth revolves on its axis from noon to noon in 24 hours, there would be two tides of flood and two of ebb during that time. If the line  $mC$  be increased when the moon is in conjunction with the sun, so as to cause the point  $n$  to describe a larger circle than  $nVY$ , and also the point  $m$  to describe a larger circle than  $mrs$  round the centre of gravity  $C$ ; when the sun is in opposition to the moon, the line  $mC$  will be diminished,  $n$  will therefore describe a smaller circle than  $nVY$ , and  $m$  will describe a smaller circle than  $mrs$ . Hence it appears that the centrifugal tendency of  $n$  is greater at the new moon than it is at the full moon, and  $m$  is likewise more strongly attracted at the same time; the spring-tides at the time of conjunction would therefore be considerably greater than at the time of opposition, were not the moon's centrifugal tide at this time attracted by the sun, and the sun's centrifugal tide added to that caused by the moon's attraction.

\* Sir Isaac Newton Cor. 3. Prop. XXXVII. Book III. Princip. makes the force of the moon to that of the sun, in raising the waters of the ocean, as 4.4815 to 1; and in Corol. I. of the same proposition he calculates the height of the solar tide to be 2 feet 0 inch  $\frac{1}{4}$ , the lunar tide 9 feet 1 inch  $\frac{2}{3}$ , and by their joint attraction 11 feet 2 inches; when the moon

is

**THEOREM VI.** *The spring-tides do not happen exactly on the day of the change or full moon, nor the Neap-tides exactly on the days of the quarters, but a day or two afterwards.*

When the attractions of the sun and moon have conspired together for a considerable time, the motion impressed on the waters will be retained for some time after their attractive forces cease, and consequently the tide will continue to rise. In like manner at the quarters, the tide will be the lowest when the moon's attraction has been lessened by the sun's for several days together.—If the action of the sun and moon were suddenly to cease, the tides would continue their course for some time, like as the waves of the sea continue to be agitated after a storm.

**THEOREM VII.** *When the moon is nearest to the earth, or in Perigee, the tides increase more than in similar circumstances at other times.*

For the power of attraction increases as the square of the distance of the moon from the earth decreases; consequently the moon must attract most when she is nearest to the earth.

is in Perigee the joint force of the sun and moon will raise the tides upwards of  $13\frac{1}{4}$  feet.—Sir Isaac Newton's measures are in French feet in the Principia. I have turned them into English feet.

Mr. Emerson, in his Fluxions, Section III. Prob. 25, calculates the greatest height of the solar-tide to be 1.63 feet, the lunar tide 7.28 feet, and by their joint attraction 8.91 feet, making the force of the sun to that of the moon as 1 to 4.4815.

Dr. Horsley, the late bishop of St. Asaph, estimates the force of the moon to that of the sun as 5.0469 to 1. See his edition of the Principia, lib. 3. sect. 3 Prop. XXXVI. and XXXVII.

Mr. Walker, in Lecture 11th of his Familiar Philosophy, states the influence of the sun to be to the influence of the moon, to raise the water, as 3 is to 10, and their joint force 13; but he gives no reason why these numbers are used.

**THEOREM VIII.** *The spring-tides are greater a short time before the vernal equinox, and after the autumnal equinox, viz. about the latter end of March and September than at any other time of the year (Plate III. Figure 3.)*

Because the sun and moon will then act upon the equator in the direction *af B*, consequently the spheroidal figure of the tides will then revolve round its longer axis, and describe a greater circle than at any other time of the year; and as this great circle is described in the same time that a less circle is described, the waters will be thrown more forcibly against the shores in the former circumstance than in the latter.

**THEOREM IX.** *Lakes are not subject to tides; and small inland seas, such as the Mediterranean and Baltic, are little subject to tides. In very high latitudes north or south the tides are also inconsiderable.*

The lakes are so small, that when the moon is vertical she attracts every part of them alike. The Mediterranean and Baltic seas have very small elevations, because the inlets by which they communicate with the ocean are so narrow, that they cannot, in so short a time, receive or discharge enough to raise or lower their surfaces sensibly.

**THEOREM X.** *The time of the tides happening in particular places, and likewise their height, may be very different according to the situation of these places.*

For the motion of the tides is propagated swifter in the open sea, and slower through narrow channels or shallow places; and being retarded by such impediments the tides cannot rise so high.

#### GENERAL OBSERVATIONS.

The morning tides differ generally in their rise from the evening tides.

The new and full moon spring-tides rise to different heights.

In winter the morning tides are highest.

In summer the evening tides are highest.

The

The tides follow, or flow towards, the course of the moon, when they meet with no impediment. Thus the tide on the coast of Norway flows to the south (towards the course of the moon); from the North-cape in Norway to the Naze at the entrance of the Scaggerac or Cattegate Sea, where it meets with the current which sets constantly out of the Baltic Sea, and consequently prevents any tide rising in the Scaggerac. The tide proceeds to the southward along the east coast of Great Britain, supplying the ports successively with high water, beginning first on the coast of Scotland. Thus it is high water at Tynemouth Bar at the time of new and full moon about three hours after the time of high water at Aberdeen; it is high water at Spurn-head about two hours after the time of high water at Tynemouth Bar; in an hour more it runs down the Humber, and makes high water at Kingston upon Hull; it is about three hours running from Spurn-head to Yarmouth Road, one hour in running from Yarmouth Road to Yarmouth Pier;  $2\frac{1}{2}$  hours running from Yarmouth Road to Harwich,  $1\frac{1}{2}$  hour in passing from Harwich to the Nore, from whence it proceeds up the Thames to Gravesend and London. From the Nore, the tide continues to flow southward to the Downs and Godwin Sands, between the north and south Foreland in Kent, where it meets the tide which flows out of the English Channel through the Strait of Dover.

While the tide, or high water, is thus gliding to the southward along the eastern coast of Great Britain, it also sets to the southward along the western coasts of Scotland and Ireland; but, on account of the obstructions it meets with by the Western Islands of Scotland, and the narrow passage between the north-east of Ireland and the south-west of Scotland, the tide in the Irish sea comes round by the south of Ireland through St. George's Channel, and runs in a north-east direction till it meets the tide between Scotland and Ireland at the north-west part of the Isle of Man. This may be naturally inferred from its being high water at Waterford above three hours before it is high water at Dublin, and it is high water at Dundalk Bay and the Isle of Man nearly at the same time. That the tide continues its course southward may be inferred from its being high water at Ushant, opposite to Brest in France, about

an hour after the time of high water at Cape Clear, on the southern coast of Ireland. Between the Lizard Point in Cornwall and the island of Ushant, the tide flows eastward, or east-north-east, up the English Channel, along the coasts of England and France, and so on through the strait of Dover till it comes to the Godwin Sands or Galloper, where it meets the tide on the eastern coast of England, as has been observed before. The meeting of these two tides contributes greatly towards sending a powerful tide up the river Thames to London; and, when the natural course of these two tides has been interrupted by a sudden change of the wind, so as to accelerate the tide which it had before retarded, and to drive back that tide which had before been driven forward by the wind, this cause has been known to produce twice high water in the course of three or four hours. The above account of the British tides seems to contradict the general theory of the motion of the tides, which ought always to follow the moon, and flow from east to west; but, to allow the tides their full motion, the ocean in which they are produced ought to extend from east to west at least 90 degrees, or 6255 English miles; because that is the distance between the places where the water is the most raised and depressed by the moon. Hence it appears that it is only in the great oceans that the tide can flow regularly from east to west; and hence we also see why the tides in the Pacific ocean exceed those in the Atlantic, and why the tides in the torrid zone, between Africa and America, though nearly under the moon, do not rise so high as in the temperate zones northward and southward, where the ocean is considerably wider. The tides in the Atlantic, in the torrid zone, flow from east to west till they are stopped by the continent of America; and the trade winds likewise continue to blow in that direction. When the action of the moon upon the waters has in some degree ceased, the force of the trade winds, in a great measure, prevents their return towards the African shores. The water thus accumulated \* in the gulf of Mexico, return to the Atlantic between

---

\* To shew that an accumulation of water does take place in the gulf of Mexico, a survey was made across the isthmus of Darien, when the wa-

between the island of Cuba, the Bahama islands, and East Florida, and form that remarkable strong current called the gulf of Florida.

---

CHAPTER VII.

*Of the natural Changes of the earth, caused by Mountains, Floods, Volcanoes, and Earthquakes.*

THAT there have always been mountains from the foundation of the world, is as certain as that there have always been rivers, both from reason and revelation \*; for they were as necessary before the flood for every purpose as they are at present. If the earth were perfectly level (as some of our world-makers have imagined, though directly contrary to the Scripture) there could be no rivers, for water can flow only from a higher to a lower place; and instead of that beautiful variety of hills and valleys, verdant fields, forests, &c. which serve to display the goodness and beneficence of the Deity, a dismal sea would cover the whole face of the earth, and render it at best an habitation for aquatic animals only.

All mountains and high places continually decrease in height. Rivers running near mountains undermine and wash a part of them away, and rain falling on their summits washes away the loose parts, and saps the foundations of the solid parts, so that, in course of time, they tumble down. Thus, old buildings on the tops of mountains are observed to have their foundations laid bare by the gradual washing away of the earth. In plains and valleys we find a

---

ter on the Atlantic was found to be fourteen feet higher than the water on the Pacific side. Walker's Familiar Philosophy, Lecture xi.

\* Four rivers, or rather four branches of one river, are expressly mentioned before the flood, viz. *Pison, Gihon, Hiddekel, and the Euphrates*. Genesis, chap. ii. And in the 7th chapter of Genesis, at the time of the flood, we are told that the fountains of the great deep were broken up, the windows of heaven were opened, the waters prevailed exceedingly upon the earth, and all the high hills and the mountains were covered.

contrary effect; the particles of earth washed down from the hills, fill up the valleys, and ancient houses, built in low places seem to sink. For the same reason a quantity of mud, slime, sand, earth, &c. which is continually washed down from the higher places into the rivers, is carried by the stream, and by degrees choaks up the mouths of rivers, especially when the soil through which they run is of a loose and rich quality. Thus, the water of the river Mississippi, though wholesome and well tasted, is so muddy, that a sediment of two inches of slime has been found in a half pint tumbler of it \*; this river is choaked up at the mouth with the mud, trees, &c. which are washed down it by the rapidity of the current.

A circumstance related by Dr. Plot, in his Natural History of Staffordshire, will serve to give an idea of the quantity of earth which the rain washes from mountains, and carries along with it into the valleys. He says, that, at eighteen feet deep in the earth, a great number of pieces of money, coined in the reign of Edward V. (viz. two hundred years before his time), have been found; so that this ground which is boggy, has increased near a foot in eleven years, or an inch and one-twelfth every year.

The highest mountains in the world are the Andes, in South America, which extend near 4300 miles in length, from the province of Quito to the strait of Magellan; the highest, called Chimborazo, is said to be 20608 feet, or near four miles, above the level of the sea: 2400 feet of which, from the summit, are always covered with snow. From experiments made with a barometer † on the mountain Cotopaxi, another part of the Andes, it appeared that its summit was elevated 6252 yards, or upwards of  $3\frac{1}{2}$  miles above the surface of the sea. There is a mountain in the island of Sumatra, called Ophir by the Europeans, the

---

\* Morse's American Geography.

† The quicksilver in a barometer falls about  $\frac{1}{10}$  of an inch every 32 yards of height; so that, if the quicksilver descend  $\frac{3}{10}$  of an inch, in ascending a hill, the perpendicular height of that hill will be 96 yards. This method is liable to error. See the Causes which affect the Accuracy of Barometrical Experiments, in the Edinburgh Philosophical Transactions by Mr. Playfair.

summit of which is 13842 feet high: the Peak of Teneriffe, in the island of that name, is said to be 13265 feet, or upwards of  $2\frac{1}{2}$  miles high. Mont Blanc, the highest mountain in Europe, is 15304 feet above the level of the sea. These irregularities, although very considerable with respect to us, are nothing when compared with the magnitude of the globe; thus if an inch were divided into one hundred and eleven parts, the elevation of Chimborazo the highest of the Andes, on a globe of eighteen inches in diameter, would be represented by *one* \* of these parts.

Hence the earth, which appears to be crossed by the enormous height of mountains, and cut by the valleys and the great depth of the sea, is nevertheless, with respect to its magnitude, only very slightly furrowed with irregularities, so trifling indeed as to cause no difference in its figure.

Having, in some measure, accounted for the descending of the earth from the hills, and filling up the valleys, stopping the mouths of rivers, &c. which are gradual and much the same in all ages, the more remarkable changes may be reduced to two general causes, floods and earthquakes.

The real or fabulous deluges mentioned by the ancients, may be reduced to six or seven, and, though some authors have endeavoured to represent them all as imperfect traditions of the universal deluge, recorded in the sacred writings, the abbé Mann †, from whom the following observations are extracted, does not doubt but that they refer to various real and distinct events of the kind.

1. The submersion of the *Atlantis* of Plato, probably was the real subsidence of a great island, stretching from the Canaries to the Azores, of which those groups of small islands are the relics.

2. The deluge in the time of Cadmus ‡ and Dardanus, placed by the best chronologists in the year before Christ 1477, is said by Diodorus Siculus to have inundated Samothrace and the Asiatic shores of the Euxine sea.

\* See the first note (Chap. III. page 54) of the Figure of the Earth.

† Vide Nouveaux Memoires de l'Academie Imperiale & Royale de Sciences et des Belles Lettres, de Bruffels, tome premier, 1788.

‡ The ancient names which occur here may all be found in Lempriere's Classical Dictionary.

3. The deluge of Deucalion, which the Arundelian marbles\*, or the Parian chronicles, fix at 1529 years before Christ, overwhelmed Theffaly.

4. The deluge of Ogyges, placed by Acufilaus in the year answering to 1796 before Christ, laid waste Attica and Bœotia. With the poetical and fabulous accounts of Deucalion's flood are mingled several circumstances of the universal deluge; but the best writers attest the locality and distinctness both of the flood of Deucalion and Ogyges.

5. Diodorus Siculus, after Manetho, mentions a flood which inundated all Egypt in the reign of Osiris; but, in the relations of this event, are several circumstances resembling the history of Noah's flood.

6. The account given by Berofus the Chaldean, of an universal deluge in the reign of Xifuthrus, evidently relates to the same event with the flood of Noah.

7. The Persian Guebres, the Bramins, Chinese, and Americans, have also their traditions of an universal deluge. The account of the deluge in the Koran has this remarkable circumstance, that the waters which covered the earth are represented as proceeding from the boiling over of the cauldron †, or oven, *Tannour*, within the bowels of the earth; and that, when the waters subsided, they were swallowed up again by the earth.

The abbé next gives a summary of the Scripture account of Noah's flood, and points out very clearly, that part of the waters came from the atmosphere, and part from underground agreeable to the 11th verse of the viith chapter of Genesis.

Earthquakes are another great cause of the changes made in the earth. From history, we have innumerable instances of the dreadful and various effects of these terrible pheno-

\* Ancient stones, whereon is inscribed a chronical of the city of Athens, engraven in capital letters, in the island of Paros, one of the Cyclades, 264 years before Christ. They take their name from Thomas Earl of Arundel, who procured them from the East. They were presented to the University of Oxford in the year 1667, by the Hon. Henry Howard, afterwards duke of Norfolk grandson to the first collector of them.

† This circumstance is mentioned here, because it agrees with Mr. Whitehurst's theory of the earth; he supposes the flood was occasioned by the expansive force of fire generated at the centre of the earth.

mena. Pliny has not only recorded many extraordinary phenomena which happened in his own time, but has likewise borrowed many others from the writings of more ancient nations.

1. A city of the Lacedemonians was destroyed by an earthquake, and its ruins wholly buried by the mountain Taygetus falling down upon them \*.

2. In the books of the Tuscan Learning an earthquake is recorded, which happened within the territory of Modena, when L. Martius and S. Julius were consuls, which repeatedly dashed two hills against each other; with this conflict all the villages and many cattle were destroyed.

3. The greatest earthquake in the memory of man was that which happened during the reign of Tiberius Cæsar, when twelve cities of Asia were laid level in one night †.

4. The eruption of Vefuvius, in the year 79 ‡, overwhelmed the two famous cities of Herculaneum § and Pompeii, by a shower of stones, cinders, ashes, sand, &c. and totally covered them many feet deep, as the people were sitting in the theatre. The former of these cities was situated about four miles from the crater, and the latter about six.

By the violence of this eruption, ashes were carried over the Mediterranean sea into Africa, Egypt, and Syria; and at Rome they darkened the air on a sudden, so as to hide the face of the sun ||.

5. In the year 1533, large pieces of rock were thrown to the distance of fifteen miles, by the volcano Cotopaxi in Peru ¶.

6. On the 29th of September 1535, previous to an eruption near Puzzoli, which formed a new mountain of three miles in circumference, and upwards of 1200 feet perpen-

\* Pliny's Natural History, chap. 79.

† Pliny, chap. 84.

‡ Pliny lost his life by this eruption, from too eager a curiosity in viewing the flames.

§ This city was discovered in the year 1736, eighty feet below the surface of the earth; and some of the streets of Pompeii, &c. have since been discovered.

|| Burnet's Sacred History, page 85, vol. ii.

¶ Ulloa's Voyage to Peru, vol. i. page 324.

dicular height, the earth frequently shook, and the plain lying between the lake Averno, mount Barbaro, and the sea, was raised a little; at the same time the sea, which was near the plain, retired two hundred paces from the shore\*.

7. In the year 1538, a subterraneous fire burst open the earth near Puzzoli, and threw such a vast quantity of ashes and pumice stones, mixed with water, as covered the whole country, and thus formed a new mountain, not less than three miles in circumference, and near a quarter of a mile perpendicular height. Some of the ashes of this volcano reached the vale of Diana, and some parts of Calabria, which are more than one hundred and fifty miles from Puzzoli †.

8. In the year 1538, the famous town called St. Euphemia, in Calabria Ulterior, situated at the side of the bay under the jurisdiction of the knights of Malta, was totally swallowed up with all its inhabitants, and nothing appeared but a fetid lake in the place of it ‡.

9. A mountain in Java, not far from the town of Panacura, in the year 1586, was shattered to pieces by a violent eruption of glowing sulphur (though it had never burnt before), whereby ten thousand people perished in the under-land fields §.

10. In the year 1600, an earthquake happened at Arquepa in Peru, accompanied with an eruption of sand, ashes, &c. which continued during the space of twenty days, from a volcano breaking forth: the ashes falling, in many places, above a yard thick, and in some places more than two, and where least, above a quarter of a yard deep, which buried the corn grounds of maize and wheat. The boughs of trees were broken, and the cattle died for want of pasture; for the sand and ashes, thus erupted, covered the fields ninety miles one way, and one hundred and twenty another way. During the eruption, mighty thunders and lightnings were heard and seen ninety miles round Arquepa,

\* Sir W. Hamilton's Observations on Vesuvius.

† Ibid. p. 128.

‡ Dr. Hooke's Post. p. 306.

§ Varenus' Geography, vol. i. p. 150.

and it was so dark whilst the showers of ashes and sand lasted, that the inhabitants were obliged to burn candles at mid-day\*.

11. On the 16th of June 1628, there was so terrible an earthquake in the island of St. Michael, one of the Azores, that the sea near it opened, and in one place where it was one hundred and sixty fathoms deep, threw up an island; which in fifteen days, was three leagues long, a league and a half broad, and 360 feet above the water †.

12. In the year 1631 vast quantities of boiling water flowed from the crater of Vesuvius previous to an eruption of fire; the violence of the flood swept away several towns and villages, and some thousands of inhabitants ‡.

13. In the year 1632, rocks were thrown to the distance of three miles from Vesuvius §.

14. In the year 1646, many of those vast mountains the Andes || were quite swallowed up and lost ¶.

15. In the year 1692, a great part of Port Royal in Jamaica was sunk by an earthquake, and remains covered with water several fathoms deep; some mountains along the rivers were joined together, and a plantation was removed half a mile from the place where it formerly stood\*\*.

16. On the 11th of January 1693, a great earthquake happened in Sicily, and chiefly about Catania; the violent shaking of the earth threatened the whole island with entire desolation. The earth opened in several places in very long clefts, some three or four inches broad, others like great gulfs. Not less than 59,969 persons were destroyed by the falling of houses in different parts of Sicily ††.

17. In the year 1699, seven hills were sunk by an earthquake in the island of Java, near the head of the great Ba-

\* Dr. Hooke's Post. p. 304.

† Sir W. Hamilton's Observations on Vesuvius and Ætna, page 159.

‡ Ibid.

§ Baddam's Abridg. Phil. Transf. vol. ii. p. 417.

|| M. Condamine represents these mountains and the Apennines as chains of volcanoes. See his Tour through Italy, 1755.

¶ Dr. Hooke's Post. p. 306.

\*\* Lowthorp's Abridg. Phil. Transf. vol. ii. p. 417.

†† Ibid. vol. ii. p. 408, 409.

tavian river, and nine more were also sunk near the Tangarang river. Between the Batavian and Tangarang rivers, the land was rent and divided afunder, with great clefts more than a foot wide \*.

18. On the 20th of November 1720, a subterraneous fire burst out of the sea near Tercera, one of the Azores, which threw up such a vast quantity of stones, &c. in the space of thirty days, as formed an island about two leagues in diameter, and nearly circular. Prodigious quantities of pumice stone, and half-broiled fish, were found floating on the sea for many leagues round the island †.

19. In the year 1746, Calloa, a considerable garrison town and sea port in Peru, containing 5000 inhabitants, was violently shaken by an earthquake on the 28th of October; and the people had no sooner begun to recover from the terror occasioned by the dreadful convulsion, than the sea rolled in upon them in mountainous waves, and destroyed the whole town. The elevation of this extraordinary tide was such as conveyed ships of burden over the garrison walls, the towers, and the town. The town was razed to the ground and so completely covered with sand, gravel, &c. that not a vestige of it remained ‡.

80. Previous to an eruption of Vesuvius, the earth trembles, and subterraneous explosions are heard; the sea likewise retires from the adjacent shore, till the mountain is burst open, then returns with impetuosity and overflows its usual boundary. These undulations of the sea are not peculiar to Vesuvius: the earthquake which destroyed Lisbon on the first of November 1755, was preceded by a rumbling noise, which increased to such a degree as to equal the explosion of the loudest cannon. About an hour after these shocks, the sea was observed from the high grounds to come rushing towards the city like a torrent, though against wind and tide; it rose forty feet higher than was ever known and suddenly subsided. At Rotterdam, the branches or chandeliers in a church were observed to oscillate like a pendulum; and we are told that it is no uncom-

\* Lowthorp's Abridg. Phil. Transf. vol. ii. p. 419.

† Eames' Abridg. Phil. Transf. vol. vi. part ii. page 203.

‡ Osborne's Relation of Earthquakes.

mon thing to see the surface of the earth undulate as the waves of the sea at the time of these dreadful convulsions of nature\*.

21. The last eruption of Vesuvius happened in July 1794, being the most violent and destructive of any mentioned in history, except those in 79 and 1631. The lava covered and totally destroyed 5000 acres of rich vineyards and cultivated lands; and overwhelmed the town of Torre-del-Greco: the inhabitants, amounting to 18,000, fortunately escaped; and the town is now rebuilding on the lava that covers their former habitations. By this eruption the top of the mountain fell in, and the mouth of Vesuvius is now little short of two miles in circumference.

Earthquakes are generally supposed to be caused by nitrous and sulphureous vapours, inclosed in the bowels of the earth, which by some accident take fire where there is little or no vent. These vapours may take fire by fermentation †, or by the accidental falling of rocks and stones in hollow places of the earth, and striking against each other. When the matters which form subterraneous fires ferment, heat, and inflame, the fire makes an effort on every side, and, if it does not find a natural vent, it raises the earth and forms a passage by throwing it up, producing a volcano. If the quantity of substances which take fire be not considerable, an earthquake may ensue without a volcano being formed. The air produced and rarefied by the subterraneous fire, may also find small vents by which it may escape, and in this case there will only be a shock, without any eruption or volcano. Again, all inflammable substances, capable of explosion, produce by inflammation a great quantity of air and vapour, and such air will necessarily be in a state of very great rarefaction: when it is compressed in a small space, like that of a cavern, it will not shake the earth immediately above, but will search for passages in order to

---

\* See the Phil. Transf. respecting the earthquake on the first of November 1755, vol. xlix. part 1.

† An equal quantity of sulphur and the filings of iron (about 10 or 15 lb.) worked into a paste with water, and buried in the ground, will burst into a flame in eight or ten hours, and cause the earth round it to tremble.

make its escape, and will proceed through the several interstices between the different strata, or through any channel or cavern which may afford it a passage. This subterraneous air or vapour will produce in its passage a noise and motion proportionable to its force and the resistance it meets with : these effects will continue till it finds a vent, perhaps in the sea, or till it has diminished its force by expansion.

Mr. Whitehurst imagines, that fire and water are the principal agents employed in these dreadful operations of nature \* ; and that the undulations of the sea and the earth, and the oscillation of pendulous bodies, are phenomena which arise from the expansive force of steam, generated in the bowels of the earth by means of subterraneous fires ; the force of steam being twenty-eight times greater than that of gunpowder, viz. as 14000 is to 500 †.

It is evident, that there is a great quantity of steam generated in the bowels of the earth, especially in the neighbourhood of volcanoes, from the frequent eruptions of boiling water and steam, in various parts of the world. Dr. Uno Von Troil, in his Letters on Iceland, has recorded many curious instances. " One sees here," says he, " within the circumference of half a mile, or three English miles, forty or fifty boiling springs together : in some the water is perfectly clear, in others thick and clayey ; in some, where it passes through a fine ochre, it is tinged red as scarlet ; and in others, where it flows over a paler clay, it is white as milk." The water spouts up from some of these springs continually, from others only at intervals. The aperture through which the water rose in the largest spring was nineteen feet in diameter, and the greatest height to which it threw a column of water was ninety-two feet. Previous to this eruption, a subterraneous noise was frequently heard, like the explosion of cannon ; and several stones, which were thrown into the aperture during the eruption, returned with the spouting water.

---

\* M. Dolomieu seems to be of the same opinion.

† Inquiry into the Original State and Formation of the Earth, chap. xi. page 112.

## CHAPTER VIII.

*Hypotheses of the Antediluvian world, and the Cause of Noah's Flood.*

"Go teach eternal Wisdom how to rule,  
Then drop into thyself, and be a fool."

POPE.

**T**HERE have been various opinions, conjectures, and hypotheses, respecting the original formation of the earth. The writers of these hypotheses, not satisfied with the Mosaical account of the creation, though they had no other certain foundation to build upon, thought themselves at liberty to model the earth according to the dictates of their own imaginations. Hence we have had as great a variety of theoretical systems as writers, and these so contradictory and discordant to each other, that, instead of throwing light on the subject, they have, if possible, involved it in greater obscurity\*.

## I. DR. BURNET'S THEORY †.

Dr. Burnet supposes that the earth was originally a fluid mass or chaos, composed of various substances, differing both in density and figure: those which were the most dense sunk to the centre, and formed there a hard solid body; those which were specifically lighter remained next above; and the waters, which were still lighter, covered the whole surface of the earth. The air and other ethereal fluids,

---

\* The object of all the writers is to prove that Noah's flood might have been produced by natural causes, without the immediate interposition of the Almighty. Each of these hypotheses contains much useful information, blended in the common mass of fiction and conjecture. The author of this work has been induced to draw up, in as small a compass as possible, a general outline of each of these hypotheses; and to shew occasionally, in short notes, the insufficiency of any of them to account for the preservation of mankind and the different animals, without the particular protection of the Divine Power.

† See Dr. Keill's examination and confutation of this theory. Dr. Goldsmith, in his *Animated Nature*, calls it a theory alike distinguished for the elegance of its language, and the shallowness of its arguments.

which

which were lighter than water, floated above the waters, and totally surrounded the globe. Between the waters, however, and the circumambient air, was formed a coat of oily and unctuous matter, lighter than water. The air at first was very impure, and must necessarily have carried up with it many of those particles with which it was once blended: however, it soon began to purify itself, and deposit those particles upon the oily crust above mentioned, which soon uniting together, the earth and oil became the crust of vegetable earth, with which the whole globe is now covered.

At this time the earth was smooth, regular, and uniform, without mountains and without a sea. In order to form rivers, he supposes the heat of the sun cracked the outward crust of the earth, and so raised vapours from the great abyss below. There was no diversity or alteration of the seasons of the year, but a perpetual summer; the heat of the sun therefore, acting continually upon the earth, made the cracks or fissures wider and wider, and, as it reached the waters in the abyss, it began to rarefy them, and generate steam or vapour.

These vapours being pent in by the exterior earth, pressed with violence against the crust, and broke it into millions of fragments\*; these fragments falling into the abyss, drew down with them vast quantities of air, and by dashing against each other, and breaking into small parts by the repeated violence of the shock, they at length left between them large cavities, containing nothing but air. These cavities naturally offered a bed to receive the influent waters; and,

---

\* During these violent convulsions in nature, how were Noah and the animals preserved without the immediate interposition of Providence? The only animals that could stand any chance of escaping destruction would be the fishes; and how they could exist in the great abyss below, without air, is not easy to conceive. There was no water on the surface of the earth till the excessive heat of the sun cracked the oily and vegetable crust; now, if the animals and Adam, &c. were created before this crust was cracked, how did they exist without water? In the Mosaical account of the creation, in the first chapter of Genesis, we find the wisdom and goodness of God displayed, by providing subsistence for his creatures before they were created.

in proportion as they filled, the face of the earth became once more visible.

The higher parts of its surface now became the tops of mountains, and were the first that appeared; the plains next made their appearance; and at length the whole globe was freed from the waters, except the places in the lowest stations; so that the ocean and seas are still a part of the ancient abyfs. Islands and rocks are fragments of the earth's former crust; continents are larger masses of its broken substance; and all the inequalities which are to be found on the surface of the present earth, are effects of the confusion into which both the earth and water were at that time thrown.

## 2. DR. WOODWARD'S THEORY\*.

Dr. Woodward begins with asserting, that all earthly substances are disposed in beds of various natures, lying horizontally one over the other, similar to the coats of an onion; that they are replete with shells and other productions of the sea, these shells being found in the deepest cavities, and on the tops of the highest mountains.

From these observations, which are warranted by experience, he proceeds to observe, that these shells and extraneous fossils are not productions of the earth, but are all actual remains of those animals which they are known to resemble; that all the strata or beds of earth lie underneath each other in the order of their specific gravity †, and that they are disposed as if they had been left there by subsiding waters, consequently all the substances of which the earth was composed were originally in a state of dissolution. This dissolution he supposes to have taken place at the flood: but, being aware of an objection, that the shells, &c. supposed to

---

\* See Dr. Arbuthnot's examination of this theory, and comparison thereof with Steno's hypothesis.

† This is by no means true, for we find layers of stone over the lightest soils, and the softest earth under the hardest bodies. The specific gravity of water is less than that of earth, and therefore would, if this hypothesis were true, constantly overflow the earth; and instead of a terra-queous, we should have an aqueous surface, a fit habitation for nothing but fishes!

have been deposited at the flood, are not dissolved, he exempts them from the solvent power of the waters, and endeavours to shew that they have a stronger cohesion than minerals; and that while even the hardest rocks are dissolved, bones and shells may remain entire.

### 3. MR WHISTON'S THEORY\*.

Mr. Whiston supposes the earth was originally a comet; and considers the Mosaic account of the creation as commencing at the time when the Creator placed this comet in a more regular manner, and made it a planet in the solar system. Before that time he supposes it to have been a globe without beauty or proportion; a world in disorder, subject to all the vicissitudes that comets endure, and alternately exposed to the extremes of heat and cold. These alternations of heat and cold, continually melting and freezing the surface of the earth, he supposed to have produced, to a certain depth, a chaos surrounding the solid contents of the earth. This surrounding chaos he describes as a dense though fluid atmosphere, composed of substances mingled, agitated, and shocked against each other; and in this disorder he supposes the earth to have been, just at the commencement of the Mosaic creation. When the orbit of the comet was changed, and more regularly wheeled round the sun, every thing took its proper place, every part of the surrounding fluid then fell into a certain situation, according as it was light or heavy. The middle or central part which always remained unchanged, still continued so; retaining a part of that heat which it received in its primeval approaches towards the sun; which heat he calculates may continue about six thousand years. Next to this fell the heavier parts of the chaotic atmosphere, which served to sustain the lighter: but as in descending, they could not entirely be separated from many watery parts, with which they were intimately mixed, they drew down these also along with them; and these could not ascend again after the surface of the earth was consolidated. Thus the en-

---

\* See Dr. Keill's examination and remarks on this theory.

tire body of the earth was composed, next the centre, of a great burning globe of more than 2000 leagues in diameter: next to this is placed a heavy earthy substance which encompasses it; round which is circumfused a body of water; and upon this body of water is placed the crust which we inhabit. The body of the earth being thus formed, the air, which is the lightest substance of all, surrounded its surface, and the beams of the sun darting through, produced the light, which we are told by Moses first obeyed the Divine command.

The whole œconomy of the creation being thus adjusted, it only remains to account for the risings and depressions on its surface, with other seeming irregularities of its appearance. The hills and valleys are by him supposed to be formed by their pressing upon the internal fluid, which sustains the external shell of earth, with greater or less weight: those parts of the earth which are heaviest sink the lowest into the fluid, and thus become valleys; those that are lightest rise higher upon the earth's surface, and are called mountains. Such was the face of nature before the deluge; the earth was then more fertile and populous than at present: the lives of men and animals were extended to ten times their present duration, and all these advantages arose from the superior heat of the central globe, which has ever since been cooling.

To account for the deluge, he says that a comet descending in the plane of the ecliptic towards its perihelion, on the first day of the deluge, passed just before the body of the earth. This comet, when it came below the moon, would raise a vast and strong tide, both in the seas that were on the surface, and in the abyfs which was under the upper crust of the earth, in the same manner as the moon at present raises the tides in the ocean. That these tides would begin to rise and increase during the approach of the comet, and would be at their greatest height when the comet was at its least distance from the earth. By these tides, caused by the attraction of the comet, he supposes that the abyfs would assume an elliptical figure, the surface of which being much larger than the former spherical one, the exterior crust of earth must conform itself to the same figure. But

as the external crust was solid and compact, it must of necessity, by the violent force of the tide, be stretched and broken\*. This comet by passing close by the earth involved it in its atmosphere and tail for a considerable time, and left a prodigious quantity of vapours on the earth's surface. These vapours being very much rarefied after their primary fall, would be immediately drawn up into the air again, and afterwards descend in violent rains, and would be the cause of the forty days rain mentioned in Scripture.

The rest of the water was forced upon the surface of the earth by the vast and prodigious pressure of the incumbent water derived from the comets atmosphere, which sunk the outward crust of the earth into the abyfs. By these means he supposes that there was water enough brought on the surface to cover the whole face of the earth, to the perpendicular height of three miles. And, to remove this body of water, he supposes the wind dried up some, and forced the rest through the cracks and fissures of the earth into the abyfs, whence great part of it had issued.

#### 4. BUFFON'S THEORY.

M. De Buffon begins his theory by attempting to prove that this world which we inhabit is nothing more than the ruins of a world. "The surface of this immense globe  
 " (says he) exhibits to our observation, heights, depths,  
 " plains, sea, marshes, rivers, caverns, gulphs, volcanoes;  
 " and on a cursory view, we can discover in the disposition  
 " of these objects neither order nor regularity. If we pene-  
 " trate into the bowels of the earth, we find metals, mine-

---

\* How was the ark preserved during this commotion? To preserve the ark without the immediate protection of Providence, it would be necessary that the flood of water should be perfectly calm, and free from storms and tempests; but if the waters were smooth, and underwent no violent agitation, how could shells and marine bodies be thrown upon the land on the tops of mountains, or be buried many feet deep in the earth? The calm sea, necessary for preserving the ark, could move none of the shells; and the rough sea, necessary for transporting the shells, would destroy the ark.

“ rals, stone, bitumens, sands, earths, waters, and matter  
“ of every kind, placed as it were by mere accident, and  
“ without any apparent design. Upon a nearer and more  
“ attentive inspection, we discover sunk mountains, caverns  
“ filled up, shattered rocks, whole countries swallowed up,  
“ new islands emerged from the ocean, heavy substances  
“ placed above light ones, hard bodies inclosed within soft  
“ bodies : in a word we find matter in every form, dry and  
“ humid, warm and cold, solid and brittle, blended in a  
“ chaos of confusion, which can be compared to nothing  
“ but a heap of rubbish, or the ruins of a world.”—In examining the bottom of the sea, he observes, that we perceive it to be equally irregular as the surface of the dry land. We discover hills and valleys, plains and hollows, rocks and earths of every kind ; we discover likewise, that islands are nothing but the summits of vast mountains, whose foundations are buried in the ocean. We find other mountains whose tops are nearly on a level with the surface of the water ; and rapid currents which run contrary to the general movement ; these like rivers never exceed their natural limits. The bottom of the ocean and shelving sides of rocks produce plentiful crops of plants of many different species : its soil is composed of sand, gravel, rocks, and shells ; in some places it is fine clay, in others a compact earth : and in general, the bottom of the sea has an exact resemblance to the dry land which we inhabit. In short, Buffon supposed that the dry land was formerly the bottom of the sea ; he says moreover, that it is impossible that the shells and marine substances which we find at an immense depth in the earth, and even in rocks and marble, should have been the effects of the deluge : for the waters could not overturn, and dissolve the whole surface of the earth, to the greatest depths. The earth must therefore have been originally much softer than it now is, and that it has acquired its present solidity by the continual action of gravity, and consequently the earth is much less subject to change now than formerly.

With regard to the original formation of the earth and all the planets in our system, he supposes that they were detached from the sun all at once by a mighty stroke of a comet

met \* ; not in the form of globes, but in the form of torrents ; the motion of the foremost particles being accelerated by those which immediately followed, and the attraction of the foremost particles would accelerate the motion of the hindmost ; and that the acceleration produced by one or both of these causes, might be such as would necessarily change the original motion arising from the impulse of the comet ; and a motion might result similar to that which takes place in the planets. The revolution of the primary planets on their axes, he accounts for from the obliquity of the original stroke impressed by the comet †—“ It is therefore evident (says he) that the earth assumed its figure when in a melted state ; and to pursue our theory, it is natural to think, that the earth, when it issued from the sun, had no other form but that of a torrent of melted and inflamed matter : that this torrent, by the mutual attraction of its parts, took on a globular figure, which its diurnal motion changed into a spheroid : that when the earth cooled, the vapours which were expanded like the tail of a comet, gradually condensed, and fell down in the form of water upon the surface, depositing at the same time a slimy substance mixed with sulphur and salts ; part of which was carried by the motion of the waters into the perpendicular fissures of the strata, and produced metals ; and the rest remained on the surface, and gave rise to the vegetable mould which abounds in different places, the organization of which is not obvious to our senses.

“ Thus the interior parts of the globe were originally composed of vitrified matter. Above this vitrified matter were placed those bodies which the fire had reduced to the smallest particles, as sands, which are only portions of glass ; and above these pumice-stones and the scoriæ of melted matter, which produced the different clays. The whole was covered with water to the depth of 500 or 600 feet, which originated from the condensation of vapours

---

\* Here Mr. Buffon loses himself in conjecture, scarcely within the verge of possibility, and very improbable.

† This is a wild theory to account for the diurnal motion of the earth and other planets!

“ when the earth began to cool. This water deposited a  
 “ stratum of mud, mixed with all those matters which are  
 “ capable of being sublimed or exhaled by fire : and the air  
 “ was formed of the most subtile vapours, which, from their  
 “ levity, rose above the water.

“ Such was the condition of the earth when the tides,  
 “ the winds, and the heat of the sun began to introduce  
 “ changes on its surface. The diurnal motion of the earth,  
 “ and that of the tides, elevated the waters in the equato-  
 “ rial regions, and necessarily transported thither great quan-  
 “ tities of slime, clay, and sand ; and by thus elevating  
 “ those parts of the earth, they perhaps sunk those under  
 “ the poles about two leagues, or a 230th part of the whole ;  
 “ for the waters would easily reduce into powder pumice-  
 “ stones, and other spongy parts of the vitrified matter up-  
 “ on the surface, and by this means excavate some places  
 “ and elevate others, which in time, would produce islands  
 “ and continents, and all those inequalities on the surface,  
 “ which are more considerable towards the equator than to-  
 “ wards the poles.”

### 5. DR. HUTTON'S THEORY.

In the first volume of the Edinburgh Philosophical Trans-  
 actions, Dr. Hutton has laid down a new theory of the  
 earth, perhaps the most elaborate and comprehensive that  
 has hitherto appeared ; to give a general abstract of it  
 would much exceed the bounds allotted to this chapter,  
 wherefore all that can be done here is, to point out some  
 of the most striking passages.

He says, the general view of the terrestrial system con-  
 veys to our minds a fabric erected in wisdom, and that it  
 was originally formed by design as an habitation for living  
 creatures. In taking a comprehensive view of the mecha-  
 nism of the globe, we observe three principal parts of which  
 it is composed, and which, by being properly adapted  
 to one another, form it into an habitable world. these are  
 the solid body of the earth, the waters of the ocean, and

the atmosphere surrounding the whole. On these Dr. Hutton observes :

1. The parts of the terrestrial globe more immediately exposed to our view are supported by a central body commonly supposed, but without any good reason, to be solid and inert.

2. The aqueous part, reduced to a spherical form by gravitation, has become oblate by the earth's centrifugal force. Its use is to receive the rivers, be a fountain of vapours, and to afford life to innumerable animals, as well as to be the source of growth and circulation to the organised bodies of the earth.

3. The irregular body of land, raised above the level of the sea, is by far the most interesting, as immediately necessary to the support of animal life.

4. The atmosphere surrounding the whole is evidently necessary for innumerable purposes of life and vegetation, neither of which could subsist a moment without it.

Having thus considered the mechanism of the globe, he proceeds to investigate the powers by which it is upheld: these are the gravitating and projectile forces by which the planets are guided; the influence of light and heat; cold and condensation: to which may be added electricity and magnetism.

With regard to the beginning of the world, though Dr. Hutton does not pretend to lay aside the Mosaic accounts respecting the origin of man, yet he endeavours to prove that the marine\* animals are of much higher antiquity than the human race.

The solid parts of the globe are in general, composed of sand, gravel, argillaceous and calcareous strata, or of these mixed with some other substances.

Sand is separated and sized by streams and currents; gravel is formed by the mutual attrition of stones agitated in water; and marly, or argillaceous strata have been collected by subsiding in water in which those earthy substances

---

\* According to the Mosaic account of the creation, the marine animals were created the fifth day, and man the sixth!

had floated. Thus, so far as the earth is formed of these materials, it would appear to have been the production of water, wind, and tides.

The doctor's next inquiry is into the origin of our land, which he seems willing to derive entirely from the exuviae of marine animals\*. After adducing some arguments in support of this opinion, the principal of which is drawn from the quantity of marine productions found in different parts of the earth, he says, "The general amount of our reasoning is this; that nine-tenths perhaps, or 99 hundredths, of this earth, so far as we see, have been formed by natural operations of the globe, in collecting loose materials and depositing them at the bottom of the sea, consolidating these collections in various degrees, and either elevating those consolidated masses above the level on which they were formed, or lowering the level of that sea."

With respect to the different strata, he thinks it most probable that they have been consolidated by heat and fusion; and this hypothesis he imagines will solve every difficulty respecting them; and, as the question is of the greatest importance in natural history, he discusses it to a considerable length. He considers metals of every species as the vapour of the mineral regions, condensed occasionally in the crevices of the land.

His next consideration is the means by which the different strata have been elevated from the bottom of the ocean; (for he looks upon it as an indubitable fact that the highest points of our land have been for ages at the bottom of the ocean;) and concludes, that the land on which we dwell has been elevated from a lower situation by the same agent which has been employed in consolidating the strata, in giving them stability, and preparing them for the pur-

---

\* To give this any appearance of probability, the marine animals must have been created many centuries before either the dry land or the land-animals were created; yet, according to the Mosaic account of the creation, the dry land appeared on the third day!

pose of the living world. This agent is matter, actuated by extreme heat, and expanded with amazing force.

The doctor imagines the world to be eternal, and endued with a renovating power; for he says: "When the former land of this globe had been complete, so as to begin to waste and be impaired by the encroachment of the sea, the present land began to appear above the surface of the ocean. In this manner we suppose a due proportion of land and water to be always preserved upon the surface of the globe for the purpose of a habitable world, such as we possess." After endeavouring to prove a succession of worlds in the system of nature, he concludes his dissertation in these words; "The result, therefore, of our present inquiry is, that we find no vestige of a beginning, no prospect of an end."

#### 6. MR. WHITEHURST'S THEORY.

Mr. Whitehurst first proceeds to shew, that all fluid bodies, which do not revolve about their axes, assume spherical forms, from the mutual attraction of their component parts; and thence infers that all bodies, naturally spherical, have been originally in a state of fluidity. Again, as it is a known principle in the laws of motion that, if any fluid body turn on its axis, it will, by the centrifugal force, depart from a spherical form, and assume that of an oblate spheroid; and as the earth is known to be such a figure, agreeing with the laws of gravity, fluidity, and centrifugal force, he supposes that the earth was originally a fluid, composed of chaotic, heterogeneous matter, which acquired its present form by revolving on its axis in that state of fluidity; and that its diurnal and annual rotations have suffered no change, but have performed equal rotations in equal times, from the moment of its first existence to the present era.

This heterogeneous mass, being totally unfit for animal or vegetable life, was not instantaneously but progressively formed into an habitable world. As soon as the component parts of the chaos became quiescent, similar particles began to unite and compose bodies of various denominations, *viz.*  
the

the particles of air united with those of air, those of water with water, and those of earth with earth. Bodies of the greatest density began their approach towards the centre of gravity, and those of the greatest levity ascended towards the surface. Thus, apparently, commenced the separation of the chaos into air, water, earth, and other select bodies. As the earth consolidated more and more towards its centre, its surface became gradually covered with water, until the sea prevailed *universally* over the whole earth. At this time the marine animals were created, and multiplied so exceedingly, as to replenish the ocean from pole to pole.

The sun and the moon were coeval with the creation of the earth, and, as the atmosphere was progressively freed from heterogeneous substances, light and heat gradually increased until the sun became visible in the firmament, and shone with its full lustre and brightness.

The attractive influence of the sun and moon, interfering with the regular and uniform subsiding of the solids of the earth, caused the sea to be unequally deep, and, consequently the dry land to appear. Hence the primitive islands were gradually formed by the flux and reflux of the tides, and in process of time, became firm and dry, fit for the reception of the animal and vegetable kingdoms. The ocean being plentifully stocked with inhabitants, previous to the appearance of dry land, many of these animals became daily enveloped and buried in the mud, in all parts of the sea from pole to pole, by the daily action of the tides.

As the central parts of the earth began to consolidate before the superficial parts thereof, the former became ignited before the latter. As the subterraneous fire gradually increased, its expansive force likewise increased till it became superior to the incumbent weight, and distended the strata like a bladder forcibly blown: and as the subterraneous fire operated universally in the same stratum, and with the same degree of force, it appears most probable that the deluge, or Noah's flood, prevailed universally over the whole earth.

The expansive force of subterraneous fire still increasing, it became superior to the incumbent weight and cohesion of the strata, which were then burst, and opened a communication between the two oceans of melted matter and water; by these two different elements coming in contact, the latter became instantly converted into steam, and produced an explosion infinitely beyond all human conception. The terraqueous globe being thus burst into millions of fragments\*, the strata were broken, and thrown into every possible degree of confusion and disorder; hence those mighty eminences the Alps, the Andes, the Pyrenean, and all other chains of mountains, were brought from beneath the deep; for the earth, in its primitive state was perfectly level.

Hence the sea retired from those vast tracts of land the continents, into the caverns, became fathomless, and environed with craggy rocks, cliffs, and impending shores, and its bottom spread over with mountains and valleys, like the land.

As mountains and continents were not primary productions of nature, but produced at the time of the deluge, the inclemencies of the seasons were totally unknown in the antediluvian state of nature; an uniform temperature universally prevailed in the atmosphere; it was not subject to storms and tempests, and, consequently, not to rain; and as there was no rain, most certainly there was no rainbow.

On account of the small elevations of the primitive islands, and the inferiority of their superficies to that of continents, the surface of the sea, and the quantity of aqueous particles exhaled, were proportionably greater. The atmosphere was thus plentifully saturated with humidity, which descended copiously in dews, during the absence of the sun, and abundantly replenished the earth.

---

\* We are in the same dilemma here with respect to the preservation of Noah and the ark, as in Burnet's and Whiston's theories; besides, the noise of such an explosion as above described, would for ever deprive any human being of the noble faculty of hearing.

## CHAPTER IX.

*Of the Atmosphere, Air, Winds, and Hurricanes.*

THE earth is surrounded by a thin fluid mass of matter, called the atmosphere: this matter gravitates towards the earth, revolves with it in its diurnal motion, and goes round the sun with it every year. Were it not for the atmosphere, which abounds with particles capable of reflecting light in all directions, only that part of the heavens would appear bright in which the sun was placed \*, and the stars and planets would be visible at mid-day †; but, by means of an atmosphere, we enjoy the sun's light (reflected from the aerial particles contained in the atmosphere) for some time before he rises and after he sets; for, on the 21st of June at London, the APPARENT day is 9m. 14 sec. longer than the astronomical day ‡. This invisible fluid extends to an unknown height; but if, as astronomers generally estimate, the sun begins to enlighten the atmosphere in the morning when he comes within 18 degrees of the horizon of any place, and ceases to enlighten it when he is again depressed more than 18 degrees below the horizon in the evening, the height of the atmosphere may easily be calculated to be near 50 miles §. Notwithstanding this great height

\* Dr. Keill, Lect. xx.

† M. de Sauffure, when on the top of Mont Blanc, which is elevated 5101 yards above the level of the sea, and where consequently the atmosphere must be more rare than ours, says, that the moon shone with the brightest splendour in the midst of a sky as black as ebony; while Jupiter, rayed like the sun, rose from behind the mountains in the east. *Append. vol. 74, Monthly Review.*

‡ See Keith's Plane and Spherical Trigonometry, page 256.

§ Let A r B Plate III. Figure 5.) represent the horizon of an observer at A; S r a ray of light falling upon the atmosphere at r, and making an angle S r B of 18 degrees with the horizon (the sun being supposed to have that depression) the angle S r A will then be 162 degrees. From the centre O of the earth draw O r, and it will be perpendicular to the reflecting particles at r; and, by the laws of optics, likewise bisect the angle

height of the atmosphere, it is seldom sufficiently dense at two miles high to bear up the clouds; it becomes more thin and rare the higher we ascend. This fluid body is extremely light, being at a mean density, 816 times lighter than water \*; it is likewise very elastic, as the least motion excited in it is propagated to a great distance: it is invisible, for we are only sensible of its existence from the effects it produces. It is capable of being compressed into a much less space than what it naturally possesses, though it cannot be congealed or fixed as other fluids may; for no degree of cold has ever been able to destroy its fluidity. It is of different density in every part upwards from the earth's surface, decreasing in its weight the higher it rises, and consequently must also decrease in density. The weight or pressure of the atmosphere upon any portion of the earth's surface is equal to the weight of a column of mercury which will cover the same surface, and whose height is from 28 to 31 inches: this is proved by experiment on the barometer, which seldom exceeds the limits above-mentioned. Now, if we estimate the diameter of the earth at 7964 † miles,

the

angle  $S \angle A$ . In the right angled triangle  $O A r$ , the angle  $O \angle A = 81^\circ$ ,  $AO = 3982$  miles, the radius of the earth. Hence, by trigonometry,

As sine of $O \angle A$ , $81^\circ$	-	9.9946199
Is to $A O$ , 3982	-	3.6001013
So is radius, sine of $90^\circ$	-	10.

To  $O r$ , 4031.76 - - 3.6054814

Now, if from  $O r = 4031.6$ , there be taken  $OV = OA = 3982$ , the remainder  $V r = 49.6$  miles is the height of the atmosphere.

\* Dr. Thomson's Chemistry, vol. iii. p. 251.

† The diameter of the earth in inches will be 504599040; and the diameter with the atmosphere 504599099 inches, the difference between the cubes of these diameters multiplied by .5236 gives 23597489140125 231287.3564 cubic inches in the atmosphere. Now, if 1728 cubic inches weigh 13500 ounces, as stated by Dr. Thomson, page 254, vol. iii. of his chemistry, the weight of the atmosphere will be determined as above. If the square of the diameter 504599040 be multiplied by 3.1416, the product will give the superficies of the earth, = 799914792576284098.56 square inches; and if the weight of the atmosphere be divided by this super-

the mean height of the barometer at  $29\frac{1}{2}$  inches, and a cubic foot of mercury to weight 13500 ounces avoirdupois, the whole weight of the atmosphere will be 11522211494201773089 lbs. avoirdupois, and its pressure upon a square inch of the earth's surface  $14\frac{2}{5}$  lbs.

The atmosphere is the common receptacle of all the effluvia or vapours arising from different bodies, *viz.* of the steam or smoke of things melted or burnt; of the fogs or vapours proceeding from damp, watery places; of steams arising from the perspiration of whatever enjoys animal or vegetable life, and of their putrescence when deprived of it; also of the effluvia proceeding from sulphureous, nitrous, acid, and alkaline bodies, &c. which ascend to greater or less heights according to their specific gravity. Hence the difficulty of determining the true composition of the atmosphere. Chemical writers\*, however have endeavoured to shew, that it consists *chiefly* of three distinct elastic fluids, united together by chemical affinity; namely, air, vapour or water, and carbonic acid gas †, differing in their proportions at different times and in different places; but the average proportion of each, supposing the whole atmosphere to be divided into 100 equal parts, is given by Dr. Thomson as follows:

98 $\frac{3}{5}$ air,
$\frac{2}{5}$ vapour, or water,
1 carbonic acid,
—
100
—

Hence it appears, that the foreign bodies which are mixed or united with the air in the atmosphere, are so mi-

superficies, the quotient will be 14.4 lbs. =  $14\frac{2}{5}$  lbs. the pressure of the atmosphere on every square inch of the earth's surface. The pressure of the atmosphere on a square inch of surface, may likewise be found by experiments made with the air pump, or by weighing a column of mercury whose base is one inch square, and height  $29\frac{1}{2}$  inches.

\* Dr. Thomson's Chemistry, page 287, vol. iii.

† *Gas* is a term applied by chemists to all permanently elastic fluids, except common air; and *carbonic acid* gas is what was formerly called *fixed air*, or such as extinguishes flame, and destroys animal life,

nute in quantity, when compared with it, that they have no very sensible influence on its general properties; wherefore, in describing the mechanical properties of the air, in the succeeding parts of this chapter, no attention is paid to its component parts in a chemical point of view; but wherever the word *air* occurs, common or atmospheric air \* is always meant.

Air is not only the support of animal and vegetable life, but it is the vehicle of sound; and this arises from its elasticity: for a body being struck vibrates, and communicates a tremulous motion to the air; this motion acts upon the cartilaginous portion of the ear, where there are several well contrived eminences and concavities to convey it into the auditory passage, where it strikes on the membrana tympani, or drum of the ear, and produces the sense of hearing.

From the fluid state of the atmosphere, its great subtilty and elasticity, it is susceptible of the smallest motion that can be excited in it: hence it is subject to the disturbing forces of the moon and the sun; and tides will be generated in the atmosphere similar to the tides in the ocean. By the continual motion of the air, noxious vapours, which are destructive to health, are in some measure dispersed; so that the air, like the sea, is kept from putrefaction by winds and tides.

Air may be vitiated, by remaining closely pent up in any place for a considerable length of time; and, when it has lost its vivifying spirit, it is called damp or fixed air, not only because it is filled with humid or moist vapours, but because it deadens fire, extinguishes flame, and destroys life.

If part of the vivifying spirit of air, in any country, begin to putrify, the inhabitants of that country will be subject to an epidemical disease, which will continue until the putrefaction is over: and as the putrifying spirit occasions

---

\* Dr. Thompson, page 269, vol. iii. of his Chemistry, says, we may consider it as established by experiment, that air is composed of twenty-two parts out of a hundred of oxygen gas (viz. vital air) and seventy-eight of azotic gas (viz. poisonous air) by bulk: but as the weight of these two gases is not exactly the same; by weight the oxygen gas contains twenty-six parts out of a hundred, and the azotic gas seventy-four parts, so that the vital air composes only-one third of the atmosphere.

this disease, so, if the diseased body contribute towards the putrifying of the air, then the disease will not only be epidemical, but pestilential and contagious.

The air will press upon the surfaces of all fluids, with any force, without passing through them or entering into them; so that the softest bodies sustain this pressure without suffering any change in their figure, and the most brittle bodies bear it without being broken. Thus the weight of the atmosphere presses upon the surface of water, and forces it up into the barrel of a pump. It likewise keeps mercury suspended at such a height, that its weight is equal to the pressure, and yet it never forces itself through the mercury into the vacuum above.

Another property of the air is, that it is expanded by heat, and condensed or contracted by cold: hence the fire rarefying and attenuating the air in the chimnies, causes it to ascend the funnels, while the air in the room, by the pressure of the atmosphere, is forced to supply the vacancy, and rushes into the chimney in a constant torrent, bearing the smoke into the higher regions of the atmosphere. In large cities, in the winter, when there are many fires, people, and animals, the air is considerably more rarefied than in the adjoining country; for which reason, continual currents of colder air rush in at all the exterior streets, bearing up the rarefied and contaminated air above the tops of the houses and the highest buildings, and supplying their place with air of a more salubrious quality. The more extensive winds owe their origin to the heat of the sun: this heat acting upon some part of the air causes it to expand, and become lighter, and consequently it must ascend; while the air adjoining, which is more dense and heavy, will press forward towards the place where it is rarefied. Upon this principle, we can easily account for the trade winds, which blow constantly from east to west about the equator; for when the sun shines perpendicularly on any part of the earth, it will heat and rarefy the air in that part, and cause it to ascend; while the adjacent air will rush in to supply its place, and consequently will cause a stream or current of air to flow from all parts towards that which is the most heated by the sun. But as the sun, with respect to the earth, moves  
from

from east to west, the common course of the air will be from east to west; and therefore at or near the equator, where the mean heat of the earth is the greatest, the wind will blow continually from the east; but on the north side of the equator, it will decline a little to the north; and, on the south side of the equator it will decline to the south. If the earth were covered with water, the motion of the wind would follow the apparent motion of the sun, in the same manner as the motion of the water would follow the motion of the moon; but, as the regular course of the tides is changed by the obstruction of continents, islands, &c. so the regular course of the winds is changed by high mountains, by the declination of the sun towards the north and south, by burning sands which retain the solar heat to an incredible degree, by the falling of great quantities of rain, which causes a sudden condensation or contraction of the air, by exhalations that rise out of the earth at certain times and places, and from various other causes. Thus, according to Dr. Halley, between the 3d and 10th degree of south latitude, the south-east trade-wind continues from April to October; during the rest of the year the wind blows from the north-west; but between Sumatra and New Holland this monsoon blows from the south during our summer months; it changes about the end of September, and continues in the opposite direction till April.

Over the whole of the Indian ocean, to the northward of the third degree of south latitude, the north-east trade-wind blows from October to April, and a south-west wind from April to October\*. From Borneo, along the coast of Malacca, and as far as China, this monsoon in our summer blows nearly from the south, and in winter from the north by east. Near the coast of Africa, between Mozambique and Cape Guardafui, the winds are irregular during the whole year, owing to the different monsoons which surround that particular place. Monsoons are likewise regular

---

\* The student will find these winds represented on Adams' globes and some others, by arrows having the barbed points flying in the direction of the wind as if shot from a bow; and, where the winds are variable, these arrows seem to be flying in all directions.

in the Red Sea; between April and October they blow from the north-west, and during the other months from the south-east, keeping constantly parallel to the Arabian coast\*.

On the coast of Brazil, between Cape St. Augustine and the island of St. Catherine, from September to April the wind blows from the east or north-east; and from April to September it blows from the south-west; so that monsoons are not altogether confined to the Indian Ocean.

On the coast of Africa, from Cape Bajador, opposite the Canary Islands, to Cape Verd, the winds are generally north-west; and from hence to the island of St. Thomas, near the equator, they blow almost perpendicular to the shore.

In all maritime countries of any considerable extent, between the tropics, the wind blows during a certain number of hours from the sea, and during a certain number towards the land; these winds are called sea and land breezes. During the day, the air above the land is hotter and more rare than that above the sea; the sea air therefore flows in upon the land and supplies the place of the rarefied air, which is made to float higher in the atmosphere; as the sun descends, the rarefaction of the land air is diminished, and an equilibrium is restored. As the night approaches, the denser air of the hills and mountains (for where there are no hills, there are no sea and land breezes), falls down upon the plains, and pressing upon the air of the sea, which has now become comparatively lighter than the land air, causes the land breeze.

The Cape of Good Hope is famous for its tempests, and the singular cloud which produces them: this cloud appears at first only like a small round spot in the sky, called by the sailors the Ox's Eye, and which probably appears so minute from its exceedingly great height.

In Natolia, a small cloud is often seen, resembling that at the Cape of Good Hope, and from this cloud a terrible wind † issues, which produces similar effects. In the sea

---

\* Bruce's Travels, vol. i. chap. 4.

† This wind seems to be described by St. Paul in the 27th chapter of the Acts, by the name of Euroclydon.

between Africa and America, especially at the equator and in the neighbouring parts, tempests of this kind very often arise, and are generally announced by small black clouds. The first blast which proceeds from these clouds is furious, and would sink ships in the open sea, if the sailors did not take the precaution to furl their sails. These tempests seem to arise from a sudden rarefaction of the air, which produces a kind of vacuum, and the cold dense air rushing in to supply the place.

Hurricanes, which arise from similar causes, have a whirling motion which nothing can resist. A calm generally precedes these horrible tempests, and the sea then appears like a piece of glass; but, in an instant, the fury of the winds raises the waves to an enormous height. When from a sudden rarefaction, or any other cause, contrary currents of air meet in the same point, a whirlwind is produced.

The force of the wind upon a square foot of surface is nearly as the square of the velocity; that is, if on a square board of one foot in surface, exposed to a wind, there be a pressure of one pound, another wind, with double the velocity, will press the board with a force of four pounds, &c. The following table, extracted from the Philosophical Transactions, shews the velocity and pressure of the winds, according to their different appellations.

Velocity

Velocity of the wind.		Perpendicular force on one square foot, in pounds avoirdupois.	Common appellations of the winds.
Miles in one hour.	Feet in one second.		
1	1.47	.005	Hardly perceptible.
2 }	2.93 }	.020 }	
3 }	4.40 }	.044 }	Just perceptible.
4 }	5.87 }	.079 }	
5 }	7.33 }	.123 }	Gentle pleasant wind.
10 }	14.67 }	.492 }	
15 }	22.00 }	1.107 }	Pleasant brisk gale.
20 }	29.34 }	1.968 }	
25 }	36.67 }	3.075 }	Very brisk.
30 }	44.01 }	4.429 }	
35 }	51.34 }	6.027 }	High winds.
40 }	58.68 }	7.873 }	
45 }	66.01 }	9.963 }	Very High.
50	73.35	12.300	
60	88.02	17.715	A storm or tempest.
80	117.36	31.490	A great storm.
			A hurricane.
100	146.70	49.200	{ A hurricane that tears up trees, and carries buildings, &c. before it.

CHAPTER X.

*Of Vapours, Fogs and Mists, Clouds, Dew, and Hoar-Frost, Rain, Snow and Hail, Thunder and Lightning, Falling Stars, Ignis Fatuus, Aurora Borealis, and the Rainbow.*

1. **V**APOURS are composed of aqueous or watery particles, separated from the surface of the water, or moist earth, by the action of the sun's heat; whereby they are so rarefied, attenuated, and separated from each other,

as

as to become specifically lighter than the air, and consequently they rise and float in the atmosphere.

2. **FOGS AND MISTS.** Fogs are a collection of vapours which chiefly rise from fenny, moist places, and become more visible as the light of the day decreases. If these vapours be not dispersed, but unite with those that rise from water, as rivers, lakes, &c. so as to fill the air in general, they are called mists.

3. **CLOUDS** are generally supposed to consist of vapours exhaled from the sea and land\*. These vapours ascend till they are of the same specific gravity as the surrounding air; here they coalesce, and by their union become more dense and weighty. The more thin and rare the clouds are, the higher they soar, but their height seldom, if ever, exceeds two miles. The generality of clouds are suspended at the height of about a mile; sometimes, when the clouds are highly electrified, their height is not above seven or eight hundred yards. The wonderful variety in the colours of the clouds, is owing to their particular situation to the sun, and the different reflections of his light. The various figure of the clouds probably proceeds from their loose and volatile texture, revolving in any form according to the different force of the winds, or from the electricity contained in them.

4. **DEW.** When the earth has been heated in the daytime by the sun, it will retain that heat for some time after

\* Dr. Thomson, in vol. iii. of his chemistry, page 321, &c. says, it is remarkable that, though the greatest quantity of vapours exists in the lower strata of the atmosphere, clouds never begin to form there, but always at some considerable height. The heat of the clouds is sometimes greater than that of the surrounding air. The formation of clouds and rain is neither owing to the saturation of the atmosphere, nor the diminution of heat, nor the mixture of airs of different temperatures. Evaporation often goes on for a month together in hot weather, especially in the torrid zone, without any rain. The water can neither remain in the atmosphere, nor pass through it, in a state of vapour: What then becomes of the vapour after it enters the atmosphere? What makes it lay aside the new form which it must have assumed, and return again to its state of vapour, and fall down in rain? Till these questions are experimentally answered, Dr. Thomson concludes that the formation of clouds and rain cannot be accurately accounted for.

the sun has set. The air being a less dense, or less compact substance, will retain the heat for a less time : so that in the evening the surface of the earth will be warmer than the air about it, and consequently the vapours will continue to rise from the earth ; but, as these vapours come immediately into a cool air, they will only rise to a small height ; as the rarefied air in which they began to rise becomes condensed, the small particles of vapours will be brought nearer together. When many of these particles are united, they form dew ; and, if this dew freeze, it will produce hoar-frost.

5. RAIN. When the weight of the air is diminished, its density will likewise be diminished, and consequently the vapours that float in it will be less resisted, and begin to fall, and, as they strike one upon another in falling, they will unite and form small drops. But when the small drops of which a cloud consisted, are united into such large drops that no part of the atmosphere is sufficiently dense to produce a resistance able to support them, they will then fall to the earth, and constitute what we call rain. If these drops be formed in the higher regions of the atmosphere, many of them will be united before they come to the ground, and the drops of rain will be very large \*. The drops of rain increase so much both in bulk and motion, during their descent, that a bowl placed on the ground would receive, in a shower of rain, almost twice the quantity of water that a similar bowl would receive on a neighbouring high steeple †. The mean annual quantity of rain is greatest at the equator, and decreases gradually as we approach the poles. Thus, at

	Latitude.	Depth of rain.
‡ Grenada, West Indies,	13° 0'	126 inches.
St. Domingo, Cape St. François,	19° 46'	120.

\* Dr. Rutherford's Natural Philosophy, vol ii. chap. 10. Signior Beccaria, whose observations on the general state of electricity in the atmosphere have been very accurate and extensive, ascribes the cause of rain, hail, snow, &c. &c. to the effect of a moderate electricity in the atmosphere.

† Mr. Adam Walker's Familiar Philosophy, lect. v. page 215.

‡ Dr. Thomson's Chemistry, vol. iii. page 324, &c.

	Latitude.	Depth of rain.
Calcutta	22° 23'	81 inches.
In England	53° 0'	32
Petersburg	59° 16'	16

On the contrary, the number of rainy days is smallest at the equator, and increases in proportion to the distance from it. The number of rainy days is often greater in winter than in summer; but the quantity of rain is greater in summer than in winter. More rain falls in mountainous countries than in plains. Among the Andes it is said to rain almost perpetually, while in the plains of Peru and in Egypt, it hardly ever rains at all. The mean annual quantity of rain for the whole globe is estimated by Dr. Thomson at 34 inches in depth; hence may be found the whole quantity of rain that falls in a year upon the whole surface of the earth and sea, in the same manner as the number of cubic inches were found in the atmosphere, in chapter IX. of this work. The same author observes that, for every square inch of the earth's surface, about 41 cubic inches of water is annually evaporated: so that the average quantity of rain is considerably less than the average quantity of water evaporated.

6. SNOW AND HAIL. Snow consists of such vapours as are frozen while the particles are small; for, if these stick together after they are frozen, the mass that is formed out of them will be of a loose texture, and form little flakes or fleeces, of a white substance, somewhat heavier than the air, and therefore will descend in a slow and gentle manner through it. Hail, which is a more compact mass of frozen water, consists of such vapours as are united into drops, and are frozen while they are falling\*.

7. THUNDER AND LIGHTNING. It has been already observed, that the atmosphere is the common receptacle of all the effluvia, or vapours, rising from different bodies. Now, when the effluvia of sulphureous and nitrous bodies †

\* Rutherford's Philosophy, vol ii. chap 10.

† Gunpowder, the effects of which is similar to thunder and lightning, is composed of six parts of nitre, one part of sulphur, and one part of charcoal.

meet each other in the air, there will be a strong conflict, or fermentation, between them, which will sometimes be so great as to produce fire \*. Then, if the effluvia be combustible, the fire will run from one part to another, just as the inflammable matter happens to lie. If the inflammable matter be thin and light, it will rise to the upper part of the atmosphere, where it will flash without doing any harm; but if it be dense, it will lie near the surface of the earth, where, taking fire, it will explode with a surprizing force, and by its heat, rarefy and drive away the air, kill men and cattle, split trees, walls, rocks, &c. and be accompanied with terrible claps of thunder. The effects of thunder and lightning are owing to the sudden and violent agitation the air is put into, together with the force of the explosion. Stones and bricks struck by lightning, are often found in a vitrified state. Signior Beccaria supposes that some stones in the earth, having been struck in this manner, gave rise to the vulgar opinion of the thunder-bolt. It is now generally admitted that lightning and the electrical fluid are the same †.

8. THE FALLING STARS, and other fiery meteors, which are frequently seen at a considerable height in the atmosphere, and which have received different names according to the variety of their figure and size, arise from the fermentation of the effluvia of acid and alkaline bodies, which float in the atmosphere. When the more subtile parts of the effluvia are burnt away, the viscous and earthy parts become too heavy for the air to support, and by their gravity fall to the earth.

---

\* Professor Winkler's Philosophy

† Signior Beccaria, of Turin, observes that the atmosphere abounds with electricity; and if a cloud which is positively charged (viz. which has more than its natural share of electrical fluid) pass near another cloud which is negatively charged (viz. which has less than its natural share of electrical fluid) they will attract each other, and a quick deprivation of the electrical fluid will take place: the flash is called lightning, the report thunder, (the ensuing rolling are only echoes from distant clouds); the water, thus deprived of its usual support, falls down in impetuous torrents.

9. OF THE IGNIS FATUUS, commonly called *Will-with-a-Wisp*, or *Jack with a Lantern*. This meteor, like most others, has not failed to attract the attention of philosophical inquirers. Sir Isaac Newton, in his *Optical Queries*, calls it a vapour shining without heat. Various accounts of it may be seen in the *Philosophical Transactions* \*. The most probable opinion is, that it consists of inflammable air †, or oleaginous matter, emitted from a putrefaction and decomposition of vegetable substances, in marshy grounds; which being kindled by some electric spark, or other cause unknown to us, will continue to burn or reflect a kind of thin flame in the dark, without any sensible degree of heat, till the matter which composes the vapour is consumed. This meteor never appears on elevated grounds, because they do not sufficiently abound with moisture to produce the inflammable air, which is supposed to issue from bogs and marshy places. It is often observed flying by the sides of hedges, or following the course of rivers; the reason of which is obvious, for the current of air is greater in these places than elsewhere. These meteors are very common in Italy and in Spain. Dr. Shaw ‡ has described a remarkable ignis fatuus, which he saw in the Holy Land, when the atmosphere was so uncommonly thick and hazy, that the dew on the horses' bridles was remarkably clammy and unctuous. This meteor was sometimes globular, then in the form of the flame of a candle, presently afterwards it spread itself so much as to involve the whole company in a pale harmless light, and then it would contract itself again, and suddenly disappear; but, in less than a minute, it would become visible as before, and running along from one place to another with a swift progressive motion, would again expand itself, and cover a considerable space of ground.

\* Mr. Ray and some others suppose it to be a collection of *glow-worms* flying together; but Dr. Derham confuted this opinion, No. 411.

† Inflammable air may be made thus: exhaust a receiver of the air-pump, let the air run into it through the flame of the oil of turpentine, then remove the cover of the receiver, and hold a lighted candle to the air, it will take fire, and burn quicker or slower according to the density of the oleaginous vapour.

‡ Shaw's Travels, page 363.

10. OF THE AURORA BOREALIS, OR NORTHERN LIGHTS. There have been various opinions and conjectures respecting the cause and properties of these extraordinary phænomena \* ; and the most probable opinion is, that they arise from exhalations, and are produced by a combustion of inflammable air, caused by electricity. This inflammable air is generated particularly between the tropics, by many natural operations, such as the putrefaction of animal and vegetable substances, volcanoes, &c. ; and being lighter than any other, ascends to the upper regions of the atmosphere, and, by the motion of the earth, is urged towards the poles ; for it has been proved by experiments that, whatever is lighter, or swims on a fluid which revolves on an axis, is urged towards the extreme points of that axis † : Hence, these inflammable particles continually accumulate at the poles, and by meeting with heterogeneous matter, take fire, and cause those luminous appearances frequently seen towards the polar regions ‡.

In high latitudes the Auroræ Boreales appear with the greatest lustre, and extend over the greater part of the hemisphere, varying their colours from all the tints of yel-

\* Philosophical Transactions, N<sup>o</sup>. 305, 310, 320, 347, 348, 349, 351, 352, 363, 365, 368, 376, 385, 395, 398, 399, 402, 410, 418, 431, and 433, &c.

† See Mr. Kirwan's account of the Aurora Borealis, Irish Phil. Transactions for 1788, page 70, &c.

‡ We have very few accounts of the Aurora Australis, or Southern Lights, owing perhaps to the want of observations in those remote parts of the globe, and a proper channel of information. Captain Cook, in his second voyage towards the south pole, says: " (February 17th, 1773), We observed a beautiful phenomenon in the heavens, consisting of long columns of clear white light, shooting up from the heavens to the eastward, almost to the zenith, and gradually spreading over the whole southern part of the sky. Though these columns were in most respects similar to the Aurora Borealis, yet they seemed to differ from them in being always of a whitish colour. The stars were sometimes hid by, and sometimes faintly to be seen through, the substance of these Auroræ Australes. The sky was generally clear when they appeared, and the air sharp and cold, the thermometer standing at the freezing point ; the ship being in latitude 58° south."

low to the most obscure rufflet \*. In the north-east parts of Siberia, Hudson's Bay, &c. they are attended by a continued hissing and cracking noise through the air, similar to that produced by fire works †.

II. OF THE RAINBOW. The rainbow is the most beautiful meteor with which we are acquainted : it is never seen but in rainy weather, where the sun illuminates the falling rain, and when the spectator turns his back to the sun. There are frequently two bows seen, the interior and exterior bow. The interior bow is the brightest, being formed by the rays of light falling on the *upper parts* of the drops of rain ; for a ray of light entering the upper part of a drop of rain will, by refraction, be thrown upon the inner part of the spherical surface of that drop, whence it will be reflected to the lower part of the drop, where undergoing a second refraction, it will be bent towards the eye of the spectator, hence the rays which fall upon the interior bow come to the eye after two refractions and one reflection, and the colours of this bow from the *upper part* are *red, orange, yellow, green, blue, indigo, and violet*. The exterior bow is formed by the rays of light falling on the *lower parts* of the drops of rain ; these rays, like the former, undergo two refractions, *viz.* one when they enter the drops, and another when they emerge from the drops to the eye ; but they suffer two or more reflections in the interior surface of the drops ; hence the colours of these rays are not so strong and well defined as those in the interior bow, and appear in an inverted order, *viz.* from the *under part* they are *red, orange, yellow, green, blue, indigo, and violet*. To illustrate this by experiment, suspend a glass globe filled with water in the sun-shine, turn your back to the sun, and view the globe at such a distance that the part of it the farthest from the sun may appear of a full red colour, then will the rays which come from the globe to the eye make an angle of 42 degrees with the sun's direct rays ; and if the eye remain in the same position, and another person lower the glass

\* Dr Rees' New Cyclopædia, word Aurora Borealis.

† Philosophical Transactions, vol. lxxiv. page 228.

globe gradually, the orange, yellow, green, &c. colours, will appear in succession, as in the interior bow. Again, if the glass globe be elevated, so that the side nearest to the sun may appear red, the rays which come from the globe to the eye will make an angle of about 50 degrees; then, if another person gradually raise the glass globe, while the spectator remains in the same position, the rays will successively change from red to orange, green, yellow, &c. as in the exterior bow. These observations being understood, let  $d n e$  (Plate IV. Fig. 1.) represent a drop of rain belonging to the interior bow,  $S d$  a ray of light falling on the upper part of the drop at  $d$ ; instead of the ray continuing its direction towards  $F$ , it will be refracted or bent towards  $n$ , whence part of it (for some will pass through the drop) will be reflected to  $e$ , making the angle of incidence  $d n k$  equal to the angle of reflection  $e n k$ ; instead of continuing its direction from  $e$  towards  $f$ , it will, by emerging out of the water into the air, be again refracted to the eye at  $O$ . But, as this ray of light consists of a pencil\* of rays, some of which are more refrangible† than others, the violet, which is the most refrangible, will proceed towards  $B$ , and the red, which is the least refrangible, will proceed towards  $O$ . Now, if the eye of the spectator be so placed that the ray of light falling upon it has been once reflected, and twice refracted, so that  $O e$  shall make, with the solar ray  $S d$ , an angle  $S m O$  of  $42^{\circ} 2'$  ‡, he will see the red ray in the direction  $O e m$ ; and if the eye be raised to  $B$ , so that  $B e$  shall make, with the solar ray  $S d$ , an angle

\* A pencil of rays is a portion of light of a conical form, *diverging* or proceeding from a point; or tending to a point, in which case the rays are said to *converge*.

† Refrangibility of the rays of light is their tendency to deviate from their natural course. Those rays which deviate the most from their natural course, in passing out of one medium into another, are said to be the most refrangible; and those which deviate the least from their natural course are the least refrangible. Sir Isaac Newton, by experiment, found the red rays to be the least refrangible, and the violet rays the most; and those rays which are the least refrangible are likewise the least reflexible.

‡ The sine of incidence and refraction of the least refrangible rays, out of water into air, is as 3 to 4, or as 81 to 108; and the most refrangible, as 81 to 107. Emerison's Optics, p. 92.—The same author, at

angle  $BFS$  of  $40^{\circ} 17'$ , the violet ray will be seen in the direction  $BcF$ ; the red ray will appear the highest, the violet the lowest, and the rest in order, according to their different refrangibility, as in the interior bow (Fig. 2. Plate IV.); for the drop of water descends from  $F$  to  $e$ . What has been observed of one drop of water, will be true in an infinite number of drops; hence the interior bow is composed of a circular arch, whose breadth is  $Fe$ , proportional to the difference between the least and most refrangible rays.

To explain the exterior bow, Let  $ctnd$  (Plate IV. Fig. 1) represent a drop of rain,  $Sd$  a ray of light falling upon the under part of it at  $d$ ; instead of this ray continuing its direction towards  $m$ , it will be refracted to  $n$ , whence part of it will pass through the drop, and the rest will be reflected to  $t$ ; at  $t$  a part of it will again pass through the drop, and the remainder will be reflected to  $C$ ; then in emerging from the water into the air, instead of continuing the direction  $CZ$ , it will be refracted from  $C$  to the eye at  $O$ . But as this ray of light, like that in the interior bow, consists of a pencil of rays of different refrangibility, the red, which is the least refrangible, will proceed towards  $A$ ; and the violet, which is the most refrangible, will proceed towards  $O$ . Now, if the eye of the spectator be so placed that the ray of light falling upon it has been twice reflected, and twice refracted, so that  $Oo$  shall make with the solar ray  $S_o$  an angle  $S_oO$  of  $54^{\circ} 7'$ , he will see the violet ray in the direction  $Ocv$ ; and if the eye be raised to  $A$ , so that  $Ao$  shall make with the solar ray  $S_o$  an angle  $S_oA$  of  $50^{\circ} 57'$ , the red ray will be seen in the direction  $Acr$ ; the violet ray will appear the highest, and the red ray the lowest, and the rest in order according to their different refrangibility, as in the exterior bow (Plate IV. Fig. 2.), for the drop of water descends from  $H$  to  $d$ .

---

page 237, prob xxvi, of his Optics, by the method of fluxions or increments, and using the numbers above, finds that the angle which the emergent ray makes with the incident ray, in the interior bow, is  $42^{\circ} 2'$  for the red, and  $40^{\circ} 17'$  for the violet; and for the exterior bow, these angles are  $50^{\circ} 57'$ , and  $54^{\circ} 7'$ . The investigations are here omitted, because they cannot be rendered intelligible to any persons but mathematicians.

The same observations apply to an infinite number of drops, as in the interior bow.

Hence, if the sun were a point, the breadth of the exterior bow would be  $(54^{\circ} 7' - 50^{\circ} 57') 3^{\circ} 10'$ , that of the interior bow  $(42^{\circ} 2' - 40^{\circ} 17') 1^{\circ} 45'$ , and the distance between them  $(50^{\circ} 57' - 42^{\circ} 2') 8^{\circ} 55'$ ; but, as the mean diameter of the sun is about  $32' 2''$ , the breadths of the bows must be increased by this quantity, and their distances diminished; the breadth of the exterior bow will then be  $3^{\circ} 42'$ , that of the interior bow  $2^{\circ} 17'$ , and their distance  $8^{\circ} 23'$ . The greatest semi-diameter of the interior bow will be  $(42^{\circ} 2' + 16', \text{ the sun's semi-diameter}) 42^{\circ} 18'$ , and the least semi-diameter of the exterior bow  $(50^{\circ} 57' - 16' \text{ the sun's semi-diameter}) 50^{\circ} 41'$ .

All rainbows are arches of equal circles, and consequently are equally large, though we do not always see an equal quantity of them; for the eye of a spectator is the vertex of a cone, and its circular base is the rainbow, the semi-diameter of which (for the interior bow) is the fixed quantity  $42^{\circ} 18'$ , equal to the angle FOP; and as SF will in all situations be parallel to OP, and the angle SFO, equal to FOP, must be always equal to  $42^{\circ} 18'$ , it is evident that, as S rises, F and P will sink; and when SF makes an angle of  $42^{\circ} 18'$  with the horizon, OF will coincide with OQ, and the interior bow will vanish; hence the interior bow cannot be seen if the sun's altitude exceed  $42^{\circ} 18'$ : again, as the point P rises, the point S will sink, and when OP coincides with OQ, SF will be parallel to the horizon (viz. the sun will be rising or setting) and the whole semi-diameter of the rainbow will appear, which is the greatest part of it that ever can be seen on level ground; hence half a rainbow is the most that can be seen in such a situation; but if the observer be on the top of a high mountain, such as the Andes, with his back to the sun, and if it rains in a valley before him, a whole rainbow may be seen, forming a complete circle. The above reasoning is equally applicable to the outer bow; hence, as the sun rises, the bows sink, and, when his altitude exceeds  $42^{\circ} 18'$ , the interior bow cannot be seen, and, if it exceeds  $(54^{\circ} 7' + 16')$   $54^{\circ} 23'$ , the exterior bow cannot be seen.

## PART II.

THE ELEMENTARY PRINCIPLES OF ASTRONOMY,  
CONTAINING,

1. *The Solar System, &c.* 2. *The Nature of Comets; the Elongations, stationary and retrograde Appearances of the Planets; of the Fixed Stars; the Eclipses of the Sun and Moon &c.*

## CHAPTER I.

*Of the Solar System. (Plate II. Fig. 1.)*

THE solar system is so called because the sun is supposed to be placed in a certain point termed the centre of the system, having all the planets revolving round him at different distances, and in different periods of time. This is likewise called the Copernican system.

## I. OF THE SUN.

The sun is situated near the centre of the orbits of all the planets, and revolves on its axis in 25 days 14 hours 8 minutes. This revolution is determined from the motion of the spots on its surface, which first make their appearance on the eastern extremity, and then by degrees come forwards towards the middle, and so pass on till they reach the western edge, and then disappear. When they have been absent for nearly the same period of time which they were visible, they appear again as at first, finishing their entire circuit in 27 days 12 hours 20 minutes\*.

---

\* M. Cassini determined the time which the sun takes to revolve on its axis thus: the time in which a spot returns to the same situation on the sun's disc (determined from a series of accurate observations) is 27 d. 12 h. 20 m. now the mean motion of the earth in that time is  $27^{\circ} 7' 8''$ ; hence,  $360^{\circ} + 27^{\circ} 7' 8'' : 27 \text{ d. } 12 \text{ h. } 20 \text{ m.} :: 360^{\circ} : 25 \text{ d. } 14 \text{ h. } 8 \text{ m.}$ , the time of rotation.

The

The sun is likewise agitated by a small motion round the centre of gravity of the solar system, occasioned by the various attractions of the surrounding planets; but, as this centre of gravity is generally within the body of the sun \*, and can never be at the distance of more than the length of the solar diameter from the centre of that body, astronomers generally consider the sun as the centre of the system, round which all the planets revolve; though in reality the centre of gravity of the sun and of all the planets is the *centre of the world* †. As the sun revolves on an axis, his figure is supposed not to be strictly in the form of a globe, but a little flattened at the poles; and that his axis makes an angle of about eight degrees ‡, with a perpendicular to the plane of the earth's orbit. As the sun's apparent diameter is longer in December than in June, it follows that the sun is nearer to the earth in our winter than it is in summer; for the apparent magnitude of a distant body diminishes as the distance increases. The mean apparent diameter of the sun is stated to be  $32' 2''$ ; hence, taking the distance of the sun from the earth to be 95 millions of miles as before determined §, its real diameter will be 886149 miles;

\* Sir I. Newton's Princip. Book iii. Prop. 11 and 12.

† Newton's Princip. Book iii. Prop. 12. Corol.

‡ Walker's Familiar Philosophy, Lecture xi. page 516.

§ The semi diameter of the earth has been determined at page 57, in the note, to be 3982 miles; and the distance of the earth from the sun is 23882.84 semi-diameters of the earth. See the note, page 63. Now, the apparent semi-diameter  $m n$  of the sun (Plate IV. Fig. 3.) is measured by the angle  $m o n = 32' 2''$ ; hence the angle  $O m n =$  the angle  $O n m = \frac{180^\circ - 32' 2''}{2} = 89^\circ 43' 59''$ ; and on account of the distance of the sun from the earth,  $O m$ ,  $O n$ , and  $O c$ , may be considered as equal. Hence.

As sine $O n m$ $89^\circ 43' 59''$	-	9.9999953
Is to 23882.84 semi-diameters	-	4.3780860
So is sine $m O n$ $32' 2''$	-	7.9693152
To 222.5388 semi-diameters	-	2.3474059

Now,  $222.5388 \times 3982 = 886149.5016$  miles the diameter of the sun, the cube of which divided by the cube of 7964, the diameter of the earth, gives 1377613 times the sun is larger than the earth.

and, as the magnitudes of all spherical bodies are as the cubes \* of their diameters, the magnitude of the sun will be 1377613 times that of the earth ; the diameter of the earth being only 7964 miles, the diameter of the sun is above one hundred and eleven times the diameter of the earth.

## II. OF MERCURY ☿.

Mercury is the least of all the planets whose magnitudes are accurately known, and the nearest to the sun. The inclination of its axis to the plane of its orbit, and the time it takes to revolve on its axis, are unknown, consequently the vicissitudes of its seasons, and the length of its day and night, are likewise unknown. Mercury is seen through a telescope sometimes in the form of a half moon, and sometimes a little more or less than half his disc is seen ; hence it is inferred, that he has the same phases as the moon, except that he never appears quite round, because his enlightened side is never turned directly towards us, unless when he is so near the sun as to become invisible, by reason of the splendor of the sun's rays. The enlightened side of this planet being always towards the sun, and his never appearing round, are evident proofs that he shines not by his own light ; for, if he did, he would constantly appear round. The best observations of this planet are those made when he is seen on the sun's disc, called his transit ; for, in his lower conjunction, he sometimes passes before the sun, like a little spot, eclipsing a small part of the sun's body, only observable with a telescope. That node from which Mercury ascends northward above the ecliptic is in the fifteenth degree of Taurus †, and consequently the opposite or descending node is in the fifteenth degree of Scorpio. The earth is in the fifteenth degree of Taurus on the 6th of May, and in the fifteenth of Scorpio on the 4th of November ; and when Mercury comes to either of his nodes at

---

\* Euclid xii. and 18th.

† The place of Mercury's ascending node for 1750 was  $15^{\circ} 20' 43''$  in Taurus, and its variation in one hundred years is  $1^{\circ} 12' 10''$ . *Vince's Astronomy.*

his inferior conjunction (viz. when he is between the earth and the sun), he will pass over the sun's disc, if it happen on or near the days above mentioned: but in all other parts of his orbit, he goes either above or below the sun, and consequently his conjunctions are invisible.

Mercury performs his periodical revolution round the sun in 87 d. 23 h. 15 min. 43 sec.; his greatest elongation is  $28^{\circ} 20'$ , distance from the sun 36814721 \* miles; the eccentricity

\* The distance of Mercury, or any planet, from the sun, may be found by Kepler's rule. Thus as the square of the time which the earth takes to revolve round the sun, is to the cube of the mean distance of the earth from the sun, so is the square of the time which any other planet takes to revolve round the sun, to the cube of *its* mean distance; the cube-root of which will give the distance sought. OR, *which is shorter*, divide the square of the time in which any planet revolves round the sun, by the square of the time in which the earth revolves round the sun, the cube-root of the quotient will give the *relative distance* of the planet from the sun. This relative distance multiplied by the mean distance of the earth from the sun, will give the mean distance of the planet from the sun.

*First for Mercury.* The earth revolves round the sun in 365 d. 5 h. 48 m. 48 sec. = 31556928 sec. the square of which is 995839704797184, a constant divisor for all the planets, and 23882.84, the distance of the earth from the sun in semi-diameters (see page 63, note) will be a constant multiplier. 87 d. 23 h. 15 m. 43 sec. = 7600543 sec. the square of which is 57768253894849. This square divided by the former, gives .0580096 nearly, the cube-root of which is .38710991, the distance of Mercury from the sun, supposing the distance of the earth from the sun to be an *unit*.  $.38710991 \times 23882.84 = 9245.2841$  distance of Mercury from the sun in semi-diameters of the earth; hence  $9245.2841 \times 3982$ , radius of the earth, = 36814721 miles, the mean distance of Mercury from the sun.

The distance of the inferior planets from the sun may be found by their elongations. M. de la Lande has calculated that, when Mercury is in his aphelion, and the earth in its perigee, the greatest elongation of Mercury is  $28^{\circ} 20'$ ; but when Mercury is in his perihelion, and the earth in its apogee, the greatest elongation is  $17^{\circ} 36'$ ; the medium, therefore, is  $22^{\circ} 58'$ . Hence, in the triangle, SEV (Plate II. Fig. 2.) the angle SEV =  $22^{\circ} 58'$ , the distance of the earth from the sun SE = 23882.84 semi-diameters, and EVS is a right angle.

centricity of his orbit is estimated at one-fifth of his mean distance from the sun; his apparent diameter  $11''$ ; hence his real diameter is 3108 miles\*, and his magnitude about one-sixteenth of the magnitude of the earth.

Mercury emits a bright white light; he appears a little after sun-set, and again a little before sun-rise; but, on account of his nearness to the sun, and the smallness of his magnitude, he is seldom seen. The light and heat which this planet receives from the sun, is about seven times greater than the light and heat which the earth receives †.

As radius, sine of $90^\circ$	-	10 0000000
Is to SE = 23882.84	-	4.3780860
So is sine of $22^\circ 58'$	-	9.5912823
To 9318.976 semi-diameters	-	3.9693683

Hence  $9318976 \times 3982 = 37108162$  miles, the distance of Mercury from the sun by this method; but an error of a few seconds in the elongation will make a considerable difference.

\* The mean distance of the earth from the sun is 23882.84 semi-diam. and Mercury's distance 9245.2841 semi-diam.: the difference is 14637.5559 semi-diam., the distance of Mercury from the earth; and, as the magnitudes of all bodies vary *inversely* as their distances, we have by the rule of three inverse, as  $14637.5559 : 11'' :: 23882.84 : 6''.74179$ , the apparent diameter of Mercury, at a distance from the earth equal to that of the sun. Now, the mean apparent diameter of the sun is  $32' 2''$ , and its real diameter 886149 miles; hence  $32' 2'' : 886149 \text{ m.} :: 6''.74179 : 3108$  miles of the diameter of Mercury: and, if the cube of the diameter of the earth be divided by the cube of the diameter of Mercury, the quotient will be 16.8 times the magnitude of the earth exceeds that of Mercury.

The diameter of Mercury might have been found exactly in the same manner as the diameter of the sun was found in the note page 127, using  $11''$  instead of  $32' 2''$ , and 14637.5559 semi-diam. instead of 23882.84 semi-diam.: the result of the operation in this case will be .78061 semi-diam. of the earth; hence  $.78061 \times 3982 = 3108$  miles the diameter of Mercury exactly as above, it has been remarked at page 62, that the apparent diameters of the planets are measured by a micrometer, said to be invented by *M. Azout, a Frenchman*; but it appears, from the Philosophical Transactions, that it was invented by *Mr. Gascoigne, an Englishman*.

† As the effects of light and heat are reciprocally proportional to the squares of the distances from the centre whence they are propagated, if you divide the square of the earth's distance from the sun, by the square of Mercury's distance from the sun, the quotient will shew the comparative heat of Mercury to that of the earth.

The

The orbit of Mercury makes an angle of seven degrees with the ecliptic, and he revolves round the sun at the rate of upwards of one hundred and nine thousand miles *per* hour\*. The manner in which the earth revolves round the sun, has already been explained at page 62, and, as all the other planets move in a similar manner in elliptical orbits, having the sun in one of the foci, what has been observed respecting the earth will be equally applicable to all the planets.

### III. OF VENUS ♀.

Venus is the brightest, and, to appearance, the largest of all the planets; her light is distinguished from that of the other planets by its brilliancy and whiteness, which are so considerable that, in a dusky place, she causes an object to cast a sensible shadow. Venus, when viewed through a telescope, appears to have all the phases of the moon, from the crescent to the enlightened hemisphere, though she is seldom seen perfectly round. Her illuminated part is constantly turned towards the sun; hence the convex part of her crescent is turned towards the east when she is a morning star, and towards the west when she is an evening star; for, when Venus is west of the sun, as seen from the earth, that is, when her longitude is less than the sun's longitude, she rises before him in the morning, and is then called a morning star; but when she is east of the sun, viz. when her longitude is greater than the sun's longitude, she shines in the evening after the sun sets, and is then called an evening star.

---

\* This is found in the same manner as for the earth at page 63. Thus if you double the distance of any planet from the sun, then multiply by 355, and divide the last product by 113, you obtain the circumference of the planet's orbit in miles. This circumference, divided by the number of hours in the planet's year, will give the number of miles *per* hour which that planet travels round the sun: *a general rule for all the planets.* Hence,

The circumference of Mercury's orbit will be found 231313733.717 miles; then as 87 d. 23 h. 15' 43'' : 231313733.717 miles : : 1 h. : 109561 miles Mercury travels *per* hour.

Venus is a morning star, or appears west of the sun for about 290 days, and she is an evening star, or appears east of the sun for nearly the same length of time, though she performs her whole revolution round the sun in 224 days 16 hours 49 minutes 10 seconds. A very natural question here may be asked, viz. Why Venus appears a longer time to the eastward or westward of the sun than the whole time of her entire revolution round him? This is easily answered, by considering that, while Venus is going round the sun, the earth is going round him the same way, though slower than Venus, and therefore the relative motion of Venus is slower than her absolute motion.

Sometimes Venus is seen on the disc of the sun in the form of a dark round spot. These appearances happen but seldom, viz. they can happen only when Venus is between the earth and the sun, and when the earth is nearly in a line with one of the nodes of Venus\*. The last transit of Venus was in 1769, and there will not happen another of them till the year 1874. The time which this planet takes to revolve on its axis, and the inclination of its axis to the plane of its orbit, have been given by different astronomers; but Dr. Herschel, from a long series of observations on this planet, published in the Philosophical Transactions for 1793, concludes, that the time of this planet's rotation on its axis is uncertain, and that the position of its axis is equally uncertain; that its atmosphere is very considerable; that it has probably inequalities on its surface, but that it requires a better eye than his, or the assistance of better instruments than he is possessed of, to discover any mountains. The apparent diameter of Venus is stated to be  $58''.79$ ; the eccentricity of her orbit 473100 miles†; her greatest elongation  $47^{\circ}48'$ ; her revolution round the sun

---

\* The place of the ascending node of Venus for 1750 was  $14^{\circ}26'18''$  in Gemini, and its variation in 100 years is  $51'40''$ . *Vince's Astronomy.*

† For, according to M. de la Lande, if the mean distance of the earth be 100000, the eccentricity of Venus will be 498; hence, when the distance is 95 millions of miles, the eccentricity will be 473100 miles.

is performed in 224 d. 16 h. 49 m. 10 sec. \*, as before stated; and, if her apparent diameter be taken as above, her true diameter will be † 7498 miles, and her magnitude something less than that of the earth; likewise her distance from the sun which will be found to be 68791752 miles.

The light and heat which this planet receives from the sun, are about double to what the earth receives ‡. The orbit of Venus makes an angle of  $3^{\circ} 23' 35''$  with the ecliptic, and she revolves round the sun at the rate of upwards of eighty thousand miles *per* hour §. This planet, like Mercury, never departs from the sun; she is only visible a few hours in the morning before the sun rises, or in the evening after he sets, an evident proof that the orbits of these planets are contained within the orbit of the earth, otherwise they would be seen in opposition to the sun, or above the horizon at midnight.

\* The seconds in this time = 19414150, the square of which is 376909220222500, this divided by 995839704797184 (*see the note, page 129*), gives .3784838, &c. the cube root of which is .7233511; this multiplied by 23882.84 produces 17275.678585 semi-diam., which multiplied by 3982 = 68791752 miles the distance of Venus from the sun.

M. de la Lande has found the greatest elongations of Venus to be  $47^{\circ} 48'$  and  $44^{\circ} 57'$  when in similar situations to Mercury mentioned in the note to page 129; the medium is  $46^{\circ} 22' 30''$ , using this angle and the very same calculation as in the note pages 129 and 130, the distance of Venus from the sun will be found = 17288.09 semi-diameters of the earth; hence the distance will be had = 68841174 miles, astonishingly near to the distance found by Kepler's rule, considering the great difference in the principles of calculation, and a strong proof of the truth of the Copernican system.

† Here, (as in the note page 130,)  $23882.84 - 17275.678585 = 6607.16145$  semi-diam. distance of Venus from the earth; hence, inversely,  $6607.16145 : 58'.79 :: 23882.84 : 16''.26419$ , and  $32' 2'' : 886149 :: 16''.26419 : 7498$  miles the diameter of Venus. Or, by trigonometry, using the angle  $58''.79$ , and distance 6607.16145, the result is 1.88314;  $\times 3982 = 7498$  miles.

‡ This is found by dividing the square of the earth's distance from the sun by the square of the distance of Venus from the sun.

§ By the process mentioned in the note page 131, the circumference of the orbit of Venus will be found to be 432231362.123 miles; then, as 224 d. 16 h. 49 m. 10 sec.; 432231362.123 miles :: 1 h. : 80149 miles Venus travels *per* hour.

IV. OF THE EARTH  $\ominus$ , and its SATELLITE THE MOON  $\text{D}$ .

The figure and the magnitude of the earth have been already explained in Chapter III. Part I ; and its diurnal and annual revolution round the sun, distance from the sun, seasons of the year, &c. have been shewn in Chapter IV ; as it would be superfluous to repeat those particulars here, this chapter is confined entirely to the moon.

The moon being the nearest celestial body to the earth, and next to the sun the most resplendent in appearance, has excited the attention of astronomers in all ages. The Hebrews, the Greeks, the Romans, and, in general, all the ancients, used to assemble at the time of new, or full moon, to discharge the duties of piety and gratitude for its manifold uses. The day being measured by observing the time which the sun took in apparently moving from any meridian to the same again, so the month was measured by the number of days elapsed from new moon to new moon ; this month was supposed to be completed in thirty days\* ; and when the motion of the moon came to be compared with, and adjusted to, the apparent motion of the sun, twelve of these months were thought to correspond exactly with the sun's annual course. The lunar month is of two sorts, periodical and synodical. A periodical month is the time in which the moon finishes her course round the earth, and consists of 27 days 7 hours 43 min. 5 seconds ; and a synodical month is the time elapsed from new moon to new

---

\* The Rev. Mr. Costard, in his History of Astronomy, supposes that the oldest measure of time (taken from the revolutions of the heavenly bodies) was a month : and, after the length of the year was discovered, the ecliptic, and all other circles, were divided into 360 equal parts, called degrees, because  $30 \text{ d.} \times 12 = 360 \text{ days}$ , the length of the year. *Hist. of Astr. p. 44.* In an account of the Pelew Islands, we are told that the inhabitants reckoned their time by months, and not by years ; for, when the King entrusted his son to the care of Captain Wilson, he inquired how many moons would elapse before he might expect the return of his son. The inhabitants of these islands were totally ignorant of the arts and sciences.

moon, and consists of 29 days 12 hours 44 min. 3 seconds. The synodical month was probably the only one observed in the infancy of astronomy.

The orbit of the moon is nearly elliptical, having the earth in one of its foci ; but the eccentricity of this ellipsis is variable, being the greatest when the line of the apsides is in the syzygies, for then the tranverse axis of the moon's orbit is lengthened ; and the least when the tranverse axis is in the quadratures, for then the conjugate axis is lengthened, and consequently the orbit approaches nearer to a circle. The moon, in her revolution round the earth, would always describe the same ellipsis, were that revolution undisturbed by the action of the sun ; the principal axis of her orbit would remain at rest, and be always of the same quantity ; her periodic times would all be equal, and the inclination of her orbit to the ecliptic and the place of her nodes would be invariable : but her motions being disturbed by the action of the sun, they become subject to so many irregularities, that to calculate the moon's place truly, and to establish the elements of her theory, are almost insuperable difficulties.

The orbit of the moon is inclined to the ecliptic in an angle, which is variable from  $5^{\circ}$  to  $5^{\circ} 18'$ , consequently it is inclined in an angle of  $5^{\circ} 9'$  at a medium. The motion of the moon's nodes, or places where her orbit crosses the orbit of the earth, is westward, or contrary to the order of the signs : this motion is likewise irregular, but by comparing together a great number of distant observations, the mean, annual retrograde motion is found to be about  $19^{\circ} 19' 44''$ , so that the nodes make a compleat retrograde revolution from any point of the ecliptic to the same again in about 18 years 228 days 6 hours. The axis of the moon is almost perpendicular to the plane of the ecliptic, the angle being  $88^{\circ} 17'$ , consequently she has little or no diversity of seasons. The moon turns round her axis, from the sun to the sun again, in 29 days 12 hours 44 minutes 3 seconds, which is exactly the time that she takes to go round her orbit from new moon to new moon ; she therefore has constantly the same side turned towards the earth. This, however, is subject to a small

a small variation, called the libration \* of the moon, so that she sometimes turns a little more of the one side of her face towards the earth, and sometimes a little more of the other, arising from her uniform motion on her axis and unequal motion in her orbit: this is called her libration in longitude. The moon likewise appears to have a kind of vacillating motion, which presents to our view sometimes more and sometimes less of the spots on her surface towards each pole; this arises from the axis of the moon making an angle of about  $1^{\circ} 43'$  with a perpendicular to the plane of the ecliptic; and, as this axis maintains its parallelism during the moon's revolution round the earth, it must necessarily change its situation to an observer on the earth: this is called the moon's libration in latitude.

While the moon revolves round the earth in an elliptical orbit, she likewise accompanies the earth in its elliptical orbit round the sun; by this compound motion her path is every where concave towards the sun †.

The moon, like the planets, is an opaque body, and shines entirely by light received from the sun, a portion of which is reflected to the earth. As the sun can only enlighten one-half of a spherical surface at once, it follows that according to the situation of an observer, with respect to the illuminated part of the moon, he will see more or less of the light reflected from her surface. At the conjunction, or time of new moon, the moon is between the earth and the sun, and consequently that side of the moon which is never seen from the earth is enlightened by the sun; and that side which is constantly turned towards the earth is wholly in darkness ‡. Now, as the mean motion of the moon in her orbit exceeds the apparent motion of the sun by about  $12^{\circ} 11'$  in a day §, it follows that, about four

\* A lunar globe was published a few years ago by Mr. Ruffel, which shews not only the libration of the moon in the most perfect manner, but is a complete picture of the mountains, pits, and shades, on her surface.

† See M. Maclaurin's account of sir Isaac Newton's discoveries, book iv. chap. 5; Rowe's Fluxions, second edition, page 225; Ferguson's Astronomy, octavo edition, article 266; or a treatise on Astronomy, by Mr. O. Gregory, article 458.

‡ Except the light which is reflected upon it from the earth, which we cannot perceive.

§ See the note page 76.

days after the new moon, she will be seen in the evening a little to the east of the sun, after he has descended below the western part of the horizon. A spectator will see the convex part of the moon towards the west, and the horns or cusps towards the east; or, if the observer live in north latitude, as he looks at the moon the horns will appear to the left hand; for if the line joining the cusps of the moon be bisected by a perpendicular passing through the enlightened part of the moon, that perpendicular will point directly to the sun. As the moon continues her motion eastward, a greater portion of her surface towards the earth becomes enlightened; and when she is 90 degrees eastward of the sun, which will happen about  $7\frac{1}{2}$  days from the time of new moon, she will come to the meridian about 6 o'clock in the evening, having the appearance of a bright semi-circle; advancing still to the eastward, she becomes more enlightened towards the earth, and at the end of about  $14\frac{1}{2}$  days, she will come to the meridian at midnight, being diametrically opposite to the sun; and consequently she appears a complete circle, or it is said to be *full moon*. The earth is now between the sun and the moon, and that half of her surface which is constantly turned towards the earth, is wholly illuminated by the direct rays of the sun; whilst that half of her surface which is never seen from the earth is involved in darkness. The moon continuing her progress eastward, she becomes deficient on her western edge, and about  $7\frac{1}{2}$  days from the full moon she is again within 90 degrees of the sun, and appears a semi-circle with the convex side turned towards the sun: moving on still eastward, the deficiency on her western edge becomes greater, and she appears a crescent, with the convex side turned towards the east and her cusps or horns turned towards the west: and about  $14\frac{1}{2}$  days from the full moon she has again overtaken the sun, this period being performed in 29 days 12 hours 44 minutes 3 seconds, as has been observed before. Hence, from the new moon to the full moon, the phases are *horned*, *half moon*, and *gibbous*; and as the convex or well-defined side of the moon is always turned towards the sun, the horns, or irregular side, will appear to the east, or towards the left hand of a spectator in north latitude. From the full moon to the change, the phases are *gibbous*,  
*half*

*half moon*, and *horned*, the convex or well-defined side of her face will appear to the east, and her horns or irregular side towards the west, or to the right hand of a spectator.

As the full moons always happen when the moon is directly opposite to the sun, all the full moons, in our winter, happen when the moon is on the north side of the equinoctial. The moon, while she passes from Aries to Libra, will be visible at the north pole, and invisible during her progress from Libra to Aries; consequently, at the north pole, there is a fortnight's moonlight and a fortnight's darkness by turns. The same phenomena will happen at the south pole during the sun's absence, in our summer. If the earth, the moon, and the sun, were all in the same plane, there would be an eclipse of the sun at every new moon (for then the moon is between the earth and the sun), and there would be an eclipse of the moon at every full moon, at which time the earth is between the sun and the moon. But as the orbit of the moon crosses the orbit of the earth or the ecliptic in two opposite points, called the nodes; it is evident that the moon is never in the ecliptic except when she is in one of these nodes; an eclipse, therefore can never happen unless the moon be in or near one of these nodes, at all other times she is either above or below the orbit of the earth; and though the moon crosses each of these nodes every month, yet if there should not be a new or full moon, at or near that time, there will be no eclipse. (*See more of this subject in a succeeding chapter*). The influence of the moon upon the waters of the ocean has already been explained; and the nature of the harvest-moon will be shewn amongst the problems on the globes.

The moon's greatest horizontal parallax is  $61' 32''$ , the least  $54' 4''$ , consequently the mean horizontal parallax is  $* 57' 48''$ ; and her mean distance from the earth  $236847 \dagger$  miles.

\* Dr. Hutton's Mathematical Dict. word Parallax.

† As in the note page 63.

Sine of angle PSO $57' 48''$	-	8.226335
Is to semi-diam. of the earth PO		0.000000
So is radius sine of $90^\circ =$ sine OPS		10.000000
To $59.47938$ semi-diameters		<u>1.7743665</u>

Hence

miles. The apparent diameter of the moon is variable according to her distance from the earth; her mean apparent diameter is stated to be  $31' 7'' \frac{1}{2}$ ; hence her real diameter is 2144 miles  $\S$ , and her magnitude about  $\frac{1}{35}$  of the magnitude of the earth. The moon performs her revolution round the earth in 27 days 7 hours 43 minutes 5 seconds, as has been observed before, consequently she travels at the rate of  $\parallel$  2270 miles *per* hour round the earth, besides attending the earth in its annual journey round the sun.

The surface of the moon is greatly diversified with inequalities, which through a telescope have the appearance of hills and valleys. Astronomers have drawn the face of the moon as viewed through a telescope, distinguishing the dark and shining parts by their proper shades and figures. Each of the spots on the moon has been marked by a numerical figure, serving as a reference to the proper name of the particular spot which it represents; as \*, Herschel's volcano; 1, Grimaldi; 2, Galileo, &c.; so that the several spots are named from the most noted astronomers, philo-

Hence  $59.47938 \times 3882 = 236846.89$  miles, distance of the moon from the earth.

$\frac{1}{2}$  Vince's Astronomy.

$\S$  As in the preceding notes say, inversely, as 59.47938 semidiam. :  $31' 7''$  : : 23882 84 sem. :  $4'' .6497$ , the apparent diameter of the moon at a distance from the earth equal to that of the sun; hence  $32' 2''$  : 886149 : :  $4'' .6497$  : 2143.8 miles the diameter of the moon. Or, by trigonometry, the angle  $m O n$ , (Plate IV. Fig. 3.) =  $31' 7''$ , hence  $O m n = \frac{180^\circ - 31' 7''}{2} = 89^\circ 59' 44'' 26\frac{1}{2}'''$

As sine of $89^\circ 59' 44''$ , &c. = (sine of 90 extremely near)	10.0000000
Is to 59.47938 semi-diameters	1.7743665
So is sine $31' 7''$	7.9567310
To .53839 semi-diameters of the earth	1.7310975

And  $.53839 \times 3982 = 2143.86$ , &c., miles the diameter of the moon, See the note Pages 129, 130. If the cube of the earth's diameter be divided by the cube of the moon's diameter, the quotient will be 51.2; hence the magnitude of the earth is upwards of 50 times that of the moon.

$\parallel$  For, by the note page 131, as 113 : 355 : :  $236846.9 \times 2$  : 1488153.09 miles circumference of the moon's orbit; then 27 d. 7 h. 43 m. 5 sec. : 1488153.09 m. : : 1 h. : 2269 5 miles.

sophers,

fophers, and mathematicians. The best and most complete picture of the moon is that drawn on Mr. Ruffel's lunar globe.

Dr. Herschel informs us that, on the 19th of April 1787, he discovered three volcanoes in the dark part of the moon; two of them appeared nearly extinct, the third exhibited an actual eruption of fire, or luminous matter. On the subsequent night it appeared to burn with greater violence, and might be computed to be about three miles in diameter. The eruption resembled a piece of burning charcoal, covered by a thin coat of white ashes; all the adjacent parts of the volcanic mountain were faintly illuminated by the eruption, and were gradually more obscure at a greater distance from the crater. That the surface of the moon is indented with mountains and caverns, is evident from the irregularity of that part of her surface which is turned from the sun; for, if there were no parts of the moon higher than the rest, the light and dark parts of her disc at the time of the quadratures would be terminated by a perfectly straight line; and at all other times the termination would be an elliptical line, convex towards the enlightened part of the moon in the first and fourth quarters, and concave in the second and third: but, instead of these lines being regular and well defined when the moon is viewed through a telescope, they appear notched and broken in innumerable places. It is rather singular that the edge of the moon, which is always turned towards the sun, is regular and well defined, and at the time of full moon no notches or indented parts are seen on her surface. In all situations of the moon, the elevated parts are constantly found to cast a triangular shadow with its vertex turned from the sun; and, on the contrary, the cavities are always dark on the side next the sun, and illuminated on the opposite side: these appearances are exactly conformable to what we observe of hills and valleys on the earth: and even in the dark part of the moon's disc, near the borders of the lucid surface, some minute specks have been seen, apparently enlightened by the sun's rays: these shining spots are supposed to be the summits of high mountains\*, which are illuminated by the sun,

---

\* supposing this to be the fact astronomers have determined the height of some of the lunar mountains. The method made use of by Riccioli (though

sun, while the adjacent valleys nearer the enlightened part of the moon are entirely dark.

Whether the moon has an atmosphere or not, is a question that has long been controverted by various astronomers; some endeavour to prove that the moon has neither an atmosphere, seas, nor lakes; while others contend that she has all these in common with our earth, though her atmosphere is not so dense as ours. It cannot be expected in an introductory treatise, where general received truths only ought to be admitted, that we should enter into the discussion of a controverted question; however, it may be proper to inform the student, that the advocates for an atmosphere, if we may be allowed to reason from analogy, have the advantage over those who contend that there is none.

(though it gives the true result only at the time of the quadratures) is here explained, because it is much more simple than the general method given by Dr. Herschel in the Philosophical Transactions for 1780. Let ADB (I late IV. Fig. 7.) be the disc or face of the moon at the time of the quadratures; ACB the boundary of light and darkness; MO a mountain in the dark part, the summit M of which is just beginning to be enlightened, by a ray of light SAM from the sun. Now, by means of a micrometer, the ratio of MA to AB may be determined; and as AC is the half of AB, and MAC a right angled triangle, by Euclid 1 and 47th  $\sqrt{AC^2 + AM^2} = CM$  from which take  $CO = AC$ , and the remainder MO, is the height of the mountain. Riccioli observed the illuminated part of the mountain St. Catharine, on the fourth day after the new moon, to be distant from the illuminated part of the moon about 1-sixteenth part of the moon's diameter, viz.  $MA = 1$ -sixteenth of AB, or  $= 1$ -eighth of AC; now, if we take the moon's diameter 2144 miles, as we have before determined, the height of this mountain will be  $2\frac{1}{15}$  miles! Galileo makes  $MA = 1$ -20th of AB; and Hevelius makes  $MA = 1$ -26th of AB; the former of these will give the height of the mountain  $5\frac{1}{15}$  miles, and the latter  $3\frac{1}{15}$  miles. Dr. Herschel thinks, "That the height of the lunar mountains is in general greatly over rated, and that the generality of them do not exceed half a mile in their perpendicular elevation." On the contrary, M. Schroeter, a learned astronomer of Lilienthal, in the duchy of Bremen, says, that there are mountains in the moon much higher than any on the earth, and mentions one above a thousand toises higher than Chimborazo in South America. The same author has likewise lately published a new work on the height of the mountains of Venus, some of which he makes upwards of twenty-three thousand toises in height, which is above seven times the height of Chimborazo!

It

It is admitted on all hands, that the moon has mountains and valleys, like the earth, and appears nearly the same with respect to shape and the nature of her motions; may we not then fairly infer that she is similar to the earth in other respects?

#### V. OF MARS $\delta$ .

Mars appears of a dusky red colour, and though he is sometimes apparently as large as Venus, he never shines with so brilliant a light. From the dulness and ruddy appearance of this planet, it is conjectured that he is encompassed with a thick cloudy atmosphere, through which the red rays of light penetrate more easily than the other rays. This being the first planet without the orbit of the earth, he exhibits to the spectator different appearances to Mercury and Venus. He is sometimes in conjunction with the sun, like Mercury and Venus, but was never known to transit the sun's disc. Sometimes he is directly opposite the sun, that is, he comes to the meridian at midnight, or rises when the sun sets, and sets when the sun rises; at this time he shines with the greatest lustre, being nearest to the earth. Mars, when viewed through a telescope, appears sometimes full and round, at others gibbous, but never horned. The foregoing appearances clearly shew, that Mars moves in an orbit more distant from the sun than that of the earth. The apparent motion of this planet, like that of Mercury and Venus, is sometimes direct, or from east to west; at others retrograde, or from west to east; and sometimes he appears stationary. Sometimes he rises before the sun, and is seen in the morning; at others he sets after the sun, and of course is seen in the evening. Mars revolves on its axis in 24 hours 39 minutes 22 seconds; and its polar diameter is to its equatorial diameter as 15 to 16, according to Dr. Herschel; but Dr. Maskelyne, who carefully observed this planet at the time of opposition, could perceive no difference between its axes. The inclination of the orbit of Mars to the plane of the ecliptic is  $1^{\circ} 51'$ ; the place of his ascending node about  $18^{\circ}$  in Taurus\*, his horizontal pa-

\* The longitude of the ascending node of Mars for the beginning of the year 1750 was  $17^{\circ} 38' 38''$  in Taurus, and its variation in 100 years is  $46' 40''$ . *Vince's Astronomy.*

rallax is said to be  $23''.6$ ; he performs his revolution round the sun in 686 days 23 hours 15 minutes 44 seconds; and his apparent semi-diameter, at his nearest distance from the earth, is  $25''$ ; consequently his mean distance from the sun is 144907630 † miles; his diameter 4218 miles; and his magnitude a little more than  $\frac{1}{3}$ th of that of the earth ‡. This planet travels round the sun at the rate of 55223 miles per hour §; and the parallax of the earth's annual orbit, as seen from Mars, is about 41 degrees. As the distances of the interior planets from the sun are found by their elongations, so the distances of the exterior planets may be found by the parallax of the earth's annual orbit \*.

## VI. OF

† For, 686 days 23 hours 15 min 44 sec. = 59354144 seconds, the square of which is 3522914409972736, this divided by 995839704797184 the seconds in a year (see the note page 129) gives 3.537632, the cube root of which is 1.523716, the *relative* distance of Mars from the sun. Hence  $1.523716 \times 23882.84 = 36390.6654$  distance of Mars from the sun in semi-diam. of the earth, and  $36390.6654 \times 3982 = 1449076296$  miles the mean distance of Mars from the sun. Now, if the horizontal parallax of Mars at the time of opposition be  $23''.6$ , as stated by M. de la Caille, we have (see Plate IV. Fig. 6.)

Sine P $\hat{S}$ O = sine $23''.6$	-	-	6 0583927
Is to PO = 1 semi diameter	-	-	0.0000000
So is radius sine of $90^\circ$	-	-	10.0000000
To SO = 8741.93 semi diam.			3 9416073

Hence the distance of Mars from the earth at the time of opposition is 8741.93 of the earth's semi-diameters;  $8741.93 : 25'' : : 23882.84 : 9''$  15 the apparent diameter of Mars if seen from the earth at a distance equal that of the sun; then  $32', 2'' : 886149 : : 9'' .15 : 4218$  miles the diameter of Mars.

‡ The cube of 7964, the diameter of the earth, is 505119057344; and the cube of 4218, the diameter of Mars, is 75044648232; the quotient produced by dividing the former by the latter, is 6.73. viz. the magnitude of the earth is nearly seven times that of Mars.

§ For,  $1 : 3 : 355 : : 144907630 \times 2 : 910481569$  miles, the circumference of the orbit of Mars, and 686 days 23 h. 15 min. 44 sec. : 910481569 m. : : 1 h. : 55223 miles.

\* In Plate IV. Figure 8. let S represent the sun, E the earth, and M Mars; now, as the earth moves quicker in its orbit than Mars, the planet Mars will appear to go backward when the earth passes it. Thus, when the earth is at E, Mars will appear among the fixed stars at *m*; but as the earth passes from E to *e*, Mars will appear to go from *m* to *n*, though he is in reality travelling the same way as the earth from M to O.

The

## VI. OF THE NEW PLANETS, CERES, PALLAS, JUNO, &amp;c.

I. On the 1st of January 1801, M. Piazzi, Astronomer Royal at Palermo, in the island of Sicily, discovered a new planet between the orbits of Mars and Jupiter (generally called CERES FERDINANDIA, from the island in which it was discovered, and Ferdinand IV. King of the Two Sicilies). The elements of the theory of this planet are at present very imperfectly known: it appears like a star of the eighth magnitude (consequently it is invisible to the naked eye), its distance from the sun is said to be about  $2\frac{4}{5}$  times that of the earth, and its periodical revolution nearly four years and eight months. This planet, called by some astronomers an afteroid, is not confined within the ancient limits of the zodiac. Its diameter, according to Dr. Herschel, is about 162 miles.

II. On the 28th of March 1802, Dr. Olbers of Bremen, while examining some of the stars near the new-discovered planet, Ceres Ferdinandia, perceived a star of the seventh magnitude, situated near the northern wing of the constellation Virgo, which had the appearance of a planet. By continuing his observations, he soon discovered it to be a new planet, to which he gave the name of *Pallas*. As the theory of the various phenomena of this planet is less known even than that of Ceres Ferdinandia, the accounts of its magnitude, distance, and the time of its periodical revolution round the sun, must be very imperfect. Its distance from the sun, and the time of its revolution, are stated to be nearly the same as those of Ceres Ferdinandia, and its diameter about 95 miles.

---

The place *m*, where Mars is seen from the earth among the fixed stars, is called his GEOCENTRIC place, but the place *P*, where he would be seen from the sun, is called his HELIOCENTRIC place, and the arch *mP*, which is the difference between his apparent and true place, is called the PARALLAX OF THE EARTH'S ANNUAL ORBIT. Now as this angle may be determined from observation, and is known to be about  $41^\circ$ ; in the right angled triangle SEM, we have given  $SE = 23882.84$  semi-diameters, the distance of the earth from the sun, the angle SME measured by the arch *mP*  $= 41^\circ$ , to find  $SM = 36403.49$  semi-diameters of the earth, the distance of Mars from the sun.

III. On

III. On the 1st of September 1804, Mr. Harding, of Lilienthal in the duchy of Bremen, discovered the planet *Juno*. It appears like a star of the eighth magnitude, the Planets or Asteroids, *Ceres*, *Pallas*, and *Juno*, are all so nearly at equal distances from the sun, that it is not yet decided with certainty, which of the three is the nearest, or the most remote.

IV. On the 29th of March 1807, at 21 m. past 8. mean time, Dr. Olbers discovered a *fourth* new planet called *Vesta*; its right ascension at that time was  $184^{\circ} 8'$  and its declination  $11^{\circ} 47' N$ . It is apparently about the same distance from the sun as the three already mentioned. In size it appears like a star of the fifth magnitude.

#### VII. OF JUPITER $\Upsilon$ , and his Satellites, &c.

Jupiter is the largest of all the planets, and, notwithstanding his great distance from the sun and the earth, he appears to the naked eye almost as large as Venus, though his light is something less brilliant. Jupiter when in opposition to the sun (that is, when he comes to the meridian at mid-night, or rises when the sun sets, and sets when the sun rises), is much nearer to the earth than he is a little before and after his conjunction with the sun; hence, at the time of opposition, he appears larger and more luminous than at other times. When the longitude of Jupiter is less than that of the sun, he will be a morning star, and appear in the east before the sun rises; but, when his longitude is greater than the sun's longitude, he will be an evening star, and appear in the west after the sun sets. Jupiter revolves on his axis in 9 hours 56 minutes, which is the length of his day; but as his axis is nearly perpendicular to the plane of his orbit, he has no diversity of seasons. Jupiter is surrounded by faint substances, called zones or belts; which, from their frequent change in number and situation, are generally supposed to consist of clouds. One or more dark spots frequently appear between the belts; and when a belt disappears, the contiguous spots disappear likewise. The time of the rotation of the different spots is variable, being less by six minutes near the equator than near the poles. Dr. Herschel has determined, that not only the

times of rotation of the different spots vary, but that the time of rotation of the same spot (between the 25th of February 1778 and the 12th of April) varied from 9 hours 55 minutes 20 seconds, to 9 hours 51 minutes 35 seconds.

The inclination of the orbit of Jupiter to the plane of the ecliptic is  $1^{\circ} 18' 56''$ ; the place of his ascending node about 8 degrees in Cancer \*; and he performs his revolution round the sun in 4330 days 14 h. 27 m. 11 sec. moving at the rate of 29894 miles *per* hour, his mean distance from the sun being 494499108 miles †. Jupiter at his mean distance from the earth, at the time of opposition, subtends an angle of  $46''$ , hence his real diameter is 89069 miles ‡; and his magnitude 1400 times that of the earth ||. The light and heat which Jupiter receives from the sun is about  $\frac{1}{27}$  of the light and heat which the earth receives §.

\* The place of Jupiter's ascending node for the beginning of the year 1750 was  $7^{\circ} 55' 32''$  in Cancer, and its variation in 100 years is  $59' 30''$  *Vince's Astronomy*.

† For, 4330 days 14 hours 27 min. 11 sec. = 374164031 seconds, the square of which is 139998722094168961, this divided by 995839704 797184, the square of the seconds in a year (see the note page 129) gives 140.5835913, the cube root of which is 5.1997, the relative distance of Jupiter from the sun. Hence  $23882.84 \times 5.1997 = 124183.603148$  distance of Jupiter from the sun in semi-diameters of the earth; and  $124183.603148 \times 3982 = 494499107.7$  miles, the mean distance of Jupiter from the sun.

Now (by the note page 131)  $113 : 355 :: 494499107.7 \times 2 : 3107029791$  miles, the circumference of the orbit of Jupiter, and 4330 d. 14 h. 27 m. 11 sec. : 3107029791 : : 1 h. : 29894 miles.

‡  $494499108 - 95101468$  miles the distance of the earth from the sun, = 399397640 distance of the earth from Jupiter. Now, by the rule of three, inversely,  $399397640 : 46'' :: 95101468 : 193'' .1862$ , the apparent diameter of Jupiter at a distance from the earth equal to that of the sun. Hence (as in the note page 130)  $32' 2'' : 886149 : : 193'' .1862 : 89069.5$  miles, the diameter of Jupiter.

|| For, if the cube of the diameter of Jupiter be divided by the cube of the diameter of the earth, the quotient will be  $1398.9 = 1400$  nearly.

§ If the square of the mean distance of Jupiter from the sun be divided by the square of the mean distance of the earth from the sun, the quotient will be 27.

On account of the great magnitude of Jupiter, and his quick revolution on his axis, he is considerably more flatted at the poles than the earth is. The ratio between his polar and equatorial diameters has been differently stated by different astronomers: Dr. Pound makes it as 12 to 13; Mr. Short as 13 to 14; Dr. Bradley as  $12\frac{1}{2}$  to  $13\frac{1}{2}$ ; and Sir Isaac Newton (by theory) as  $9\frac{1}{3}$  to  $10\frac{1}{3}$ .

*Of the Satellites of Jupiter.*

Jupiter is attended by four satellites or moons, each of which revolves round him in a manner similar to that of the moon round the earth. The times of their periodical revolutions round Jupiter, and their respective distances from his centre, are given in the following table \* :

Satellites.	Periodical revolution.	Distance from	Distance from
		Jupiter in semi-diameters.	Jupiter in English miles.
	d. h. m. sec.		
I.	1 . 18 . 27 . 33	5.67	252511
II.	3 . 13 . 13 . 42	9.00	400810
III.	7 . 3 . 42 . 33	14.38	640406
IV.	16 . 16 . 32 . 8	25.30	1126723

The satellites of Jupiter are invisible to the naked eye: they were first discovered by Galileo, the inventor of telescopes, in the year 1610. This was an important disco-

\* The second and third columns in the above table, are copied from M. de la Lande, and the fourth is found by multiplying the numbers in the third column by 44534.5, being the half of 89069, the diameter of Jupiter. The distances of the satellites from the centre of Jupiter may be found at the time of their greatest elongations, by measuring their distances from the centre of Jupiter, and also the diameter of Jupiter, with a micrometer. Then say, as the apparent diameter of Jupiter (by the micrometer) is to his real diameter, so is the apparent distance of the satellite to its real distance. Or, having determined the periodical times of the satellites, and the distance of one of them from the sun, the distances of all the rest may be found by Kepler's rule, as in page 129.

very; for, as these satellites revolve round Jupiter in the same direction which Jupiter revolves round the sun, they are frequently eclipsed by his shadow, and afford an excellent method of finding the true longitudes of places on the land. To these eclipses we likewise owe the discovery of the progressive motion of light, and hence the aberration of the fixed stars.

The satellites of Jupiter do not revolve round him in the same plane, neither are their nodes in the same place. These satellites appear of different magnitudes and brightness; the fourth *generally* appears the smallest, but sometimes the largest, and the apparent diameter of its shadow on Jupiter is sometimes greater than the satellite. M. Cassini and Mr. Pound supposed that the satellites of Jupiter revolved on their axes; and Dr. Herschel has discovered that they revolve about their axes in the time in which they respectively revolve about Jupiter.

The first satellite is the most important of the four, from its numerous eclipses. The times of the eclipses of the satellites of Jupiter are calculated for the meridian of Greenwich, and inserted in the 3d page of the Nautical Almanac for every month, and their configuration or appearances with respect to Jupiter are inserted in page 12. As the earth turns on its axis from west to east at the rate of 15 degrees in an hour, or one degree in four minutes of time, a person one degree westward of Greenwich will observe the emersion or immersion of any one of the satellites of Jupiter four minutes later than the time mentioned in the Nautical Almanac; and, if he be one degree eastward of Greenwich, the eclipse will happen four minutes sooner at his place of observation than at Greenwich. These eclipses must be observed with a good telescope and a pendulum clock which beats seconds or half seconds.

The configuration of the satellites of Jupiter at ten o'clock at night, in the year 1796, are given in the Nautical Almanac as in the following page; an explanation of which will render the 12th page of that work intelligible to a young student for any other year and month.

1.	2 ●	4	1.	○	3.
2.		4	2	○	1. 3.
4.			3.	○	1. 2. 4
5.	1.○	3.	2.	○	4
7.			3	○	.1 .2 4
12.		2 6 4	.1	○	

On the *first* day of the month, given above, the second satellite is eclipsed at ten at night; the first and fourth satellites are on the left hand of Jupiter, and the third satellite on the right hand. When a satellite has north latitude, that is, when it is above the orbit of Jupiter, it is marked with a point on the left hand, as .4; when the satellites have south latitude, or when they are below the orbit of Jupiter, they are marked with a point to the right hand, as 1. 3.

On the *second* day of the month, at the same hour, the second and fourth satellites are on the left hand of Jupiter, and in north latitude; and the first and third are on the right hand, in south latitude.

On the *fifth* day, the first satellite will appear like a bright spot on the disc of Jupiter; the second and third will be on the left hand, in south latitude; and the fourth on the right hand, in north latitude.

On the *seventh* day, the four satellites will appear in a straight line, and all in north latitude; the first, second, and fourth, will be on the right hand of Jupiter, and the third on the left.

On the *twelfth* day, the second and fourth satellites will be in conjunction, or appear as one; the first will be in north latitude, and the third in south latitude. Only three of the satellites will be visible, and all of them on the left hand of Jupiter.

By observations on the satellites of Jupiter the progressive motion of light was discovered; for it has been found by repeated experiments, that, when the earth is exactly between Jupiter and the sun, the eclipses of Jupiter's satellites are seen  $8\frac{1}{4}$  minutes sooner than the time predicted by calculating from astronomical tables, truly constructed; and when the earth is nearly in the opposite point of its orbit, these eclipses happen about  $8\frac{1}{4}$  minutes later than the time predicted; hence it is inferred, that light takes up about  $16\frac{1}{2}$  minutes of time to pass over a space equal to the diameter of the earth's annual orbit, which is 190 millions of miles, or double the distance of the earth from the sun; for if the effects of light were instantaneous, the eclipses of the satellites would, in all situations of the earth in its orbit, happen exactly at the time predicted by calculation.

#### VIII. OF SATURN $\text{h}$ , his Satellites and Ring.

Saturn shines with a pale, feeble light, being the farthest from the sun of any of the planets that are visible without a telescope. This planet when viewed through a good telescope, always engages the attention of the young astronomer by the singularity of its appearance. It is surrounded by an interior and exterior ring, beyond which are seven satellites or moons, all, except one, in the same plane with the rings. These rings and satellites are all opaque and dense bodies, like that of Saturn, and shine only by the light which they receive from the sun. The disc of Saturn is likewise crossed by obscure zones or belts, like those of Jupiter, which vary in their figure according to the direction of the rings. Saturn performs his revolution round the sun in 10759 days 1 hour 51 minutes 11 seconds; hence his mean distance from the sun is 907089032 miles\*; and his progressive motion in his orbit is 22072 miles per hour.

The

---

\* For 10759 d. 1 h. 51 m. 11 sec. = 929584271 seconds, the square of which is 864126916890601441, this divided by 995839704797184, the square of the seconds in a year (see the note page 129) gives 867.736958 the cube root of which is 9.538118, the relative distance of Saturn from the sun.

The inclination of the orbit of Saturn to the plane of the ecliptic is said to be  $2^{\circ} 29' 50''$ , and the place of his ascending node about 21 degrees in Cancer\*.

Saturn, at his mean distance from the earth, subtends an angle of  $20''$ ; hence his real diameter is 78730 † miles, and his magnitude 966 ‡ times that of the earth. The light and heat which this planet receives from the sun is about  $\frac{1}{156}$  part || of the light and heat which the earth receives.

According to Dr. Herschel, Saturn revolves on his axis from west to east in 10 hours 16 min. 2. sec. and this axis is perpendicular to the plane of his ring. The equatorial diameter of Saturn, viz. the diameter in the direction of the ring, is to the polar diameter, viz. the axis, as 11 to 10.

*Of the Satellites of Saturn.*

Saturn is attended by seven moons: the *fourth* was discovered by Huygens, a Dutch mathematician, in the year 1655. The *first, second, third, and fifth*, were discovered at different times, between the years 1671 and 1685, by Cassini, a celebrated Italian astronomer. The *sixth and seventh* satellites were discovered by Dr. Herschel in the years 1787 and 1789. The two satellites discovered by Dr. Herschel are nearer to Saturn than the other five, and therefore

sun. Hence  $23882.84 \times 9.538118 = 227797.34609512$ , distance of Saturn from the sun in semi-diameters of the earth; and  $227797.34609512 \times 3982 = 907089032.15$  miles, the mean distance of Saturn from the sun. As  $113 : 355 :: 907089032 \times 2 : 5699408962.1238$  miles, circumference of the orbit of Saturn. Then, As  $10759$  d.  $1$  h.  $5$  m.  $11$  sec. :  $5699408962$  miles ::  $1$  h. :  $22072$  miles which Saturn moves *per hour* in his orbit.

\* The place of Saturn's ascending node for the beginning of the year 1750 was  $21^{\circ} 32' 22''$  in Cancer, and its variation in 100 years is  $55' 30''$ . *Vince's Astronomy.*

†  $907089032 - 95101468$  miles, the distance of the earth from the sun, =  $811987564$  miles distance of the earth from Jupiter. Now, inversely,  $811987564 : 20'' :: 95101468 : 170''.762$ , the apparent diameter of Saturn at a distance from the earth equal to that of the sun; (by the note page 130)  $32' 2'' : 886149 :: 170''.762 : 78730$  miles, the diameter of Saturn.

‡ Found by dividing the cube of the diameter of Saturn by the cube of the diameter of the earth.

|| Found by dividing the square of the mean distance of Saturn from the sun by the square of the earth's mean distance from the sun.

should be called the *first* and *second*; but to distinguish them from the other satellites, and to prevent confusion in referring to former observations, they are called the sixth and seventh satellites. The seventh satellite, which is nearest to Saturn, was discovered a short time after the sixth. In the following table, the satellites are arranged according to their respective distances from Saturn, and the Roman figures in the left hand column shew the number of the satellite. The figures between the parentheses shew the order in which they ought to be numbered.

Satellites.	Periodical revolution.	Distance from Saturn in semi-diameters.	Distance from Saturn in English miles.
	d. h. m. sec.		
VII. (1)	0 . 22 . 37 . 23	2 $\frac{5}{2}$	111534
VI. (2)	1 . 8 . 53 . 9	3 $\frac{5}{2}$	139964
I. (3)	1 . 21 . 18 . 27	4 $\frac{3}{2}$	172222
II. (4)	2 . 17 . 44 . 51	5 $\frac{1}{2}$	216507
III. (5)	4 . 12 . 25 . 11	8	314920
IV. (6)	15 . 22 . 41 . 16	18	708570
V. (7)	79 . 7 . 53 . 43	54	2125710

Dr. Hutton's  
Math. Dic.

The first, second, third, and fourth satellites, as well as the sixth and seventh, are all nearly in the same plane with Saturn's ring, and are inclined to the orbit of Saturn in an angle of about 30 degrees; but the orbit of the fifth satellite is said to make an angle of 15 degrees with the plane of Saturn's ring. Sir Isaac Newton conjectured\* that the fifth satellite of Saturn revolved round its axis in the same time that it revolved about Saturn; and the truth of his opinion has been verified by the observations of Dr. Herschel.

#### *Of Saturn's Ring.*

The ring of Saturn is a thin, broad, and opaque circular arch, surrounding the body of the planet without touching it, like the wooden horizon of an artificial globe. If the equator of the artificial globe be made to coincide with the

\* Principia, Book III. Prop. xvii.

horizon, and the globe be turned on its axis from west to east, its motion will represent that of Saturn on its axis, and the wooden horizon will represent the ring, especially if it be supposed a little more distant from the globe. The ring of Saturn was first discovered by Huygens; and when viewed through a good telescope, appears double. Dr. Herschel says, that Saturn is encompassed by two concentric rings, of the following dimensions.

	Miles.
Inner diameter of the smaller ring	146345
Outside diameter of ditto	184393
Inner diameter of the larger ring,	190248
Outside diameter of ditto,	204883
Breadth of the inner ring,	20000
Breadth of the outer ring,	7200
Breadth of the vacant space, or dark zone between the rings.	2839

The ring of Saturn revolves round the axis of Saturn, and in a plane coincident with the plane of his equator, in 10 hours 32 min. 15.4 sec. The ring being a circle, appears elliptical, from its oblique position; and it appears most open when Saturn's longitude is about 2 signs 17 degrees, or 8 signs 17 degrees. There have been various conjectures relative to the nature and properties of this ring.

#### IX. OF THE GEORGIUM SIDUS, OR HERSCHEL'S and its Satellites.

The *Georgian* is the remotest of all the known planets belonging to the solar system; it was discovered at Bath by Dr. Herschel on the 13th of March 1781. This planet is called by the English the *Georgium Sidus*, or *Georgian*, a name by which it is distinguished in the Nautical Almanac. It is frequently called by foreigners *Herschel*, in honour of the discoverer. The royal academy of Prussia, and some others, call it *Ouranus*, because the other planets are named from such heathen deities as were relatives: thus, *Ouranus* was the father of Saturn, *Saturn* the father of Jupiter, *Jupiter* the father of Mars, &c. This planet, when viewed

through a telescope of a small magnifying power, appears like a star of between the 6th and 7th magnitude. In a very fine clear night, in the absence of the moon, it may be perceived, by a good eye, without a telescope. Though the Georgium Sidus was not known to be a planet till the time of Dr. Herschel, yet astronomers generally believe that it has been seen long before his time, and considered as a fixed star\*.

In so recent a discovery of a planet at such an immense distance, the theory of its magnitude, motion, &c. must be in some degree imperfect. Its periodical revolution round the sun is said to be performed in  $30445 \frac{3}{4}$  days, or upwards of 83 years: the ratio of its diameter to that of the earth, is as 4.32 to 1; consequently its magnitude is upwards of eighty times that of the earth. If the periodical revolution of the Georgian, as above, be truly ascertained its distance from the sun may be determined by Kepler's rule, as for the other planets.

The Georgian planet is attended by six satellites; their periodical revolutions and times of discovery are as follow:

	d.	h.	m.	s.	
I. or nearest, revolves in	5	21	25	0,	discovered in 1798.
II. - - - - -	8	17	1	19,	discovered in 1787.
III. - - - - -	10	23	4	0,	discovered in 1798.
IV. - - - - -	13	11	5	$1\frac{1}{2}$ ,	discovered in 1787.
V. - - - - -	38	1	49	0,	discovered in 1798.
VI. - - - - -	107	16	40	0,	discovered in 1798.

All these satellites were discovered by Dr. Herschel; their orbits are said to be nearly perpendicular to the ecliptic, and, what is more singular, they perform their revolutions round the Georgian planet in a retrograde order, viz. contrary to the order of the signs.

---

\* According to F. de Zach's account of this planet, in the Memoirs of the Bruffel's Academy, 1785, there was then in the library of the Prince of Orange, four observations of this planet considered as a star, in a catalogue of observations written by Tycho Brahe: but, as Tycho was not acquainted with the use of telescopes, some writers contend that he could not see it; while others maintain that, as he has marked stars which are not greater than this planet, he might certainly have seen it.

## CHAPTER II.

*On the Nature of Comets ; the Elongations, Stationary and Retrograde Appearances of the Planets ; of the Fixed Stars ; and the Eclipses of the Sun and Moon.*

## I. ON COMETS.

**T**HOUGH the primary planets already described, and their satellites, are considered as the whole of the regular bodies which form the solar system, yet that system is sometimes visited by other bodies, called *comets*, which are *supposed* to move round the sun in elliptical orbits. These orbits are supposed to have the sun in one foci, like the planets ; and to be so very eccentric, that the comet becomes invisible when in that part of its orbit which is the farthest from the sun. It is extremely difficult to determine the elliptic orbit of a comet, with any degree of accuracy, by calculation ; for, if the orbit be very eccentric, a small error in the observation will change the computed orbit into a parabola or hyperbola ; and from the thickness and inequality of the atmosphere with which a comet is surrounded, telescopic observations on them are always liable to error. Hence the theory of the orbits, motions, &c. of comets, is very imperfect ; and though many volumes have been written on the subject \*, they are chiefly founded on conjecture. The unexpected appearance of the comet in 1807 fully confirms this assertion, and will doubtless give rise to a variety of new calculations, and new hypotheses, which like former ones, for want of sufficient data, will disappoint the expectations of succeeding astronomers. The comets, Sir Isaac Newton † observes, are compact, solid, and durable bodies, or a kind of pla-

---

\* The latest writings on the subject of comets are M. Pingre's *Cométographie*, in 2 vols. 4to, and sir Henry Englefield's work, entitled, "On the Determination of the Orbits of Comets." A well written article on Comets may be seen in Dr. Rees *New Cyclopaedia*, together with the elements of ninety-seven of them, and the names of the authors who have calculated their orbits.

† Many interesting particulars respecting the nature of comets, &c. may be learned by referring to the latter end of the third book of Newton's *Principia*,

nets which move in very oblique and eccentric orbits every way with the greatest freedom, and preserve their motions for an exceeding long time, even where contrary to the course of the planets. Their tail is a very thin and slender vapour, emitted by the head or *nucleus* of the comet, ignited or heated by the sun.

## II. OF THE ELONGATIONS, &c. OF THE INTERIOR PLANETS.

Let T, E, *e*, (Plate IV. Fig. 8.) represent the orbit of the earth; *a*, *w*, *v*, *x*, *f*, *g*, *b*, the orbit of an interior planet, as Mercury or Venus, and S the sun.

Let T represent the earth, S the sun, and *a* Venus at the time of her inferior conjunction; at this time she will disappear like the new moon, because her dark side will be turned towards the earth. While Venus moves from *a* towards *w* she appears to the westward of the sun, and becomes gradually more and more enlightened (having all the different phases of the moon). When she arrives at *v*, her greatest elongation, she appears half enlightened, like the moon in her first quarter, at this time she shines very bright. From her inferior to her superior conjunction, viz. from her situation in that part of her orbit which is directly between the earth and the sun as at *a*, to her situation in that part of her orbit in which the sun is between her and the earth; she rises before the sun in the morning, and is called a morning star. From her superior to her inferior conjunction she shines in the evening, after the sun sets, and is then called an evening star.

From the greatest elongation of Venus when westward of the sun as at *v*, to her greatest elongation when eastward of the sun, as at *g*, she will appear to go forward in her orbit, and describe the arch VWHG amongst the fixed stars; but from *g* to *v* she will appear retrograde\*, or return to the point V in the heavens in the order GHVV. For when Venus is at *f*, she will be seen amongst the fixed stars at H, and when at *g* she will appear at G: when she

---

\* The stationary and retrograde appearances of the *inferior* planets, are neatly illustrated by a small orrery, made and sold by Messrs. Wm. and S. Jones, No. 30, Holborn.

arrives at *b* she will again appear at *H* in the heavens. Hence in a considerable part of her orbit between *f* and *b*, and between *w* and *x*, she will appear nearly in the same point amongst the fixed stars, and at these times is said to be stationary.

When a planet appears to move from the neighbourhood of any fixed stars, towards others which lie to the eastward, its motion is said to be *direct*; when it proceeds towards the stars which lie to the west, its motion is *retrograde*; and when it seems not to alter its position amongst the fixed stars, it is said to be stationary.

If the earth stood still at *T*, the planet Venus would seem to make equal vibrations from the sun each way, forming the equal angles *g* *TS* and *v* *TS*, each  $47^{\circ} 48'$ , her greatest elongation, and the stationary points would always be in the same place in the heavens; but it must be remembered that, while Venus is proceeding in her orbit from *a* towards *x*, the earth is going forward from *T* towards *E*; hence the stationary points, and places of conjunction and opposition, vary in every revolution.

What has been observed with respect to Venus, may be applied with a little variation to Mercury.

### III. OF THE STATIONARY AND RETROGRADE APPEARANCES OF THE EXTERIOR PLANETS.

Because the earth's orbit is contained within the orbit of Mars, Jupiter, &c. they are seen in all sides of the heavens, and are as often in opposition to the sun as in conjunction with him. Let the circle in which *T* is situated (Plate IV. Fig. 8.) represent the orbit of the earth, and that in which *M* is situated the orbit of Mars. Now, if the earth be at *T* when Mars is at *M*, Mars and the sun will be in conjunction, but if the earth be at *t* when Mars is at *M*, they will be in opposition, viz. the sun will appear in the east when Mars is in the west. If the earth stood still at *T*, the motion of the planet Mars would always appear *direct*; but the motion of the earth being more rapid than that of Mars, he will be overtaken and passed by the earth. Hence Mars will have two stationary and one retrograde appearance. Suppose the earth to be at *E* when Mars is at *M*, he will be seen in the heavens amongst the fixed stars at *m*; and

and for some time before the earth has arrived at E, and after it has passed E, he will appear nearly in the same point *m*, viz. he will be *stationary*. While the earth moves through the part E *t e* of its orbit, if Mars stood still at M, he would appear to move in a *retrograde* direction through the arch *m P r n*, in the heavens, and would again be stationary at *n*; but if, during the time the earth moves from E to *e*, Mars moves from M to O, the arch of retrogradation would be nearly *m P r*.

The same manner of reasoning may be applied to Jupiter and all the superior planets.

#### IV. OF THE FIXED STARS.

The division of the stars into constellations, the marks by which they are distinguished, &c. have already been given among the Definitions, from page 23 to 36.

1. *The Motion of the fixed Stars.*—All the fixed stars except the polar star, appear to have a diurnal motion from east to west: this arises from the diurnal motion of the earth on its axis from west to east. The fixed stars have also a small apparent motion about their real places, arising from the velocity of the earth in its orbit combined with the motion of light. This motion is called the aberration of the fixed stars, and was discovered by Dr. Bradley. They vary in their situations by the precession of the equinoxes; hence their longitudes, &c. vary considerably in a series of years, which renders it necessary to have new plates\* engraven for our celestial globes at least once in about fifty years.

Dr. *Maskeelyne* observes † that many, if not all the fixed stars, have small motions among themselves, which are called their *proper motions*; the cause and laws of which are hid, for the present, in almost equal obscurity. By comparing his observations with others, he found the annual proper motion of the following stars, in right ascension, to be, of *Sirius*,—0".63; of *Castor*,—0".28; of *Procyon*,—0".8; of *Pollux*,—0".93; of *Regulus*,—0".41;

\* Before the publication of Cary's Globes and Bardin's New British Globes, there had been no *new* plates engraven since the time of Senex.

† Explanation of the tables, vol. I. of his *Observations*.

of *Arcturus*,—  $1'' . 4$  ; of  $\alpha$  *Aquila* +  $0'' . 57$  ; and *Sirius* increased in north polar distance +  $1'' . 20$ , *Arcturus* +  $2'' . 01$ .

2. *Of the Magnitudes, Distance, Number, and Appearance of the fixed Stars.*—The magnitudes of the fixed stars will probably for ever remain unknown ; all that we can have any reason to expect, is a mere approximation founded on conjecture. From a comparison of the light afforded by a fixed star, and that of the sun, it has been concluded that the magnitudes of the stars do not differ materially from that of the sun. The different apparent magnitudes of the stars is supposed to arise from their different distances ; for the young astronomer must not imagine that all the fixed stars are placed in a concave hemisphere, as they appear in the heavens, or on a convex surface, as they are represented on a celestial globe.

From a series of accurate observations by Dr. Bradley on  $\gamma$  *Draconis*, he inferred that its annual parallax did not amount to a single second ; that is, the diameter of the earth's annual orbit, which is not less than 190 millions of miles, would not form an angle at this star of one second in magnitude ; or, that it appeared in the same point of the heavens during the earth's annual course round the sun.

The same author calculates the distance of  $\gamma$  *Draconis* from the earth to be 400,000 times that of the sun, or 38,000,000,000,000 miles ; and the distance of the *nearest* fixed star from the earth to be 40,000 times the diameter of the earth's orbit, or 7,600,000,000,000 miles. These distances are so immensely great, that it is impossible for the fixed stars to shine by the light of the sun reflected from their surfaces : they must therefore be of the same nature with the sun, and like him shine by their own light.

The number of the fixed stars is almost infinite, though the number which may be seen by the naked eye in the whole heavens does not exceed, and perhaps falls short of 3000 \*, comprehending all the stars from the first to the sixth magnitude inclusive ; but a good telescope, directed

---

\* By adding up the numbers of stars in the third column of the British Catalogue given at pages 24, 25, 26, and 27, the sum will be found to be 3442.

almost indifferently to any point in the heavens; discovers multitudes of stars invisible to the naked eye. That bright irregular zone, the milky way, has been very carefully examined by Dr. Herschel; who has, in the space of a quarter of an hour, seen 116000\* stars pass through the field of view of a telescope of only 15' aperture.

The fixed stars are the only marks by which astronomers are enabled to judge of the course of the moveable ones, because they do not vary their relative situations. Thus in contemplating any number of fixed stars, which to our view form a triangle, a four-sided figure, or any other, we shall find that they always retain the same relative situation, and that they have had the same situation for some thousands of years, viz. from the earliest records of authentic history. But as there are few general rules without some exceptions, so this general inference is likewise subject to restrictions. Several stars, whose situations were formerly marked with precision, are no longer to be found; new ones have also been discovered, which were unknown to the ancients; while numbers seem gradually to vanish, and others appear to have a periodical increase and decrease of magnitude. Dr. Herschel, in the Philosophical Transactions for 1783, has given a large collection of stars which were formerly seen, but are now lost, together with a catalogue of variable stars, and of new stars.

The periodical variation of *Algol* or  $\beta$  *Persei*, is about two days 21 hours; its greatest brightness is of the second magnitude, and least of the fourth. It varies from the second magnitude to the fourth in about 3 $\frac{1}{2}$  hours, and back again in the same time, retaining its greatest brightness for the remainder of its period.

The fixed stars do not appear to be all regularly disseminated through the heavens, but the greater part of them are collected into clusters; and it requires a large magnifying power, with a great quantity of light, to distinguish separately the stars which compose these clusters. With a

---

\* Vince's Astronomy — This vast multitude of stars, seen and numbered in so short a period of time, appears almost incredible, as it would require the doctor to count upwards of 128 stars in a second.

small magnifying power, and a small quantity of light, they only appear as minute whitish spots, like small light clouds, and thence are called *nebulae*. Dr. Herschel has given a catalogue of 2000 *nebulae*, which he has discovered, and is of opinion that the starry heavens is replete with these *nebulae*. The largest *nebula* is the milky way, already noticed at page 34.

From an attentive examination of the stars with good telescopes, many which appear single to the naked eye, have been found to consist of two, three, or more stars. Dr. Herschel by the help of his improved telescopes has discovered near 700 such stars. Thus  $\alpha$  *Herculis*,  $\delta$  *Lyræ*,  $\alpha$  *Geminorum*,  $\gamma$  *Andromeda*,  $\mu$  *Herculis*, and many others, are double stars:  $\nu$  *Lyræ*, is a triple star; and  $\epsilon$  *Lyræ*,  $\beta$  *Lyræ*,  $\lambda$  *Orionis*, and  $\xi$  *Libræ*, are quadruple stars\*.

#### V. ON SOLAR AND LUNAR ECLIPSES.

An *eclipse of the sun* is occasioned by the dark body of the moon passing between the earth and the sun, or by the shadow of the moon falling on the earth at the place where the observer is situated; hence all the eclipses of the sun happen at the time of new moon. Thus, let S represent the sun (Plate II. Fig. 6.), *m* the moon between the earth and the sun, *a E G b* a portion of the earth's orbit, *e* and *f* two places on the surface of the earth. The dark part of the moon's shadow is called the *umbra* and the light part the *penumbra*; now it is evident that if a spectator be situated in that part of the earth where the *umbra* falls, that is between *e* and *f*, there will be a total eclipse of the sun at that place; at *e* and *f* in the *penumbra* there will be a *partial* eclipse; and beyond the *penumbra* there will be no eclipse. As the earth is not always at the same distance from the moon, if an eclipse should happen when the earth is so far from the moon that the lines *Fe* and *Cf* cross each other before they come to the earth, a spectator situated on the earth, in a direct line between the centres of the sun and moon, would see a ring of light round the dark body of the moon, called an *annular* eclipse; when this happens there can be no total eclipse any where, because the moon's *umbra* does not reach

\* Vince's Astronomy, chap. xxiv.

the earth. People situated in the penumbra will perceive a partial eclipse.

According to M. de Séjour, an eclipse can never be annular longer than 12 min. 24 sec., nor total longer than 7 min. 58 sec. The duration of an eclipse of the sun can never exceed two hours\*.

As the sun is not deprived of any part of his light during a solar eclipse, and the moon's shadow, in its passage over the earth from west to east, only covers a small part of the earth's enlightened hemisphere at once, it is evident that an eclipse of the sun may be invisible to some of the inhabitants of the earth's enlightened hemisphere, and a partial or total eclipse may be seen by others at the same moment of time.

*An eclipse of the moon* is caused by her entering the earth's shadow, and consequently it must happen when she is in opposition to the sun, that is at the time of full moon, when the earth is between the sun and the moon. Let S represent the sun (Plate II. Fig. 6.), EG the earth, and *m* the moon in the earth's umbra, having the earth between her and the sun; DEP and HGP the penumbra. Now, the nearer any part of the penumbra is to the umbra, the less light it receives from the sun, as is evident from the figure; and, as the moon enters the penumbra before she enters the umbra, she gradually loses her light and appears less brilliant.

The duration of an eclipse of the moon, from her first touching the earth's penumbra to her leaving it, cannot exceed  $5\frac{1}{2}$  hours. The moon cannot continue in the earth's umbra longer than  $3\frac{3}{4}$  hours in any eclipse, neither can she be totally eclipsed for a longer period than  $1\frac{3}{4}$  hour †. As the moon is actually deprived of her light during an eclipse, every inhabitant upon the face of the earth who can see the moon will see the eclipse.

#### GENERAL OBSERVATIONS ON ECLIPSES.

If the orbit of the earth and that of the moon were both in the same plane, there would be an eclipse of the sun at every new moon, and an eclipse of the moon at every full moon. But

\* Emerson's Astronomy, Sect. 7. page 347. † Ib. page 339.

the orbit of the moon makes an angle of about  $5\frac{1}{4}$  degrees with the plane of the orbit of the earth, and crosses it in two points called the nodes: now, astronomers have calculated that, if the moon be less than  $17^{\circ} 21'$  from either node, at the time of new moon, the sun may be eclipsed; or if less than  $11^{\circ} 34'$  from either node, at the full moon, the moon may be eclipsed; at all other times there can be no eclipse, for the shadow of the moon will fall either above or below the earth at the time of new moon: and the shadow of the earth will fall either above or below the moon at the time of full moon. To illustrate this, suppose the right hand part of the moon's orbit (Plate II. Fig. 6.) to be elevated above the plane of the paper, or earth's orbit, it is evident that the earth's shadow, at full moon, would fall below the moon; the left hand part of the moon's orbit at the same time would be depressed below the plane of the paper, and the shadow of the moon, at the time of new moon, would fall below the earth. In this case, the moon's nodes would be between E and *a*, and between G, and *b*, and there would be no eclipse, either at the full or new moon: but, if the part of the moon's orbit between G and *b* be elevated above the plane of the paper, or earth's orbit; the part between E and *a* will be depressed, the line of the moon's nodes will then pass through the centre of the earth and that of the moon, and an eclipse will ensue\*. An eclipse of the sun begins on the western side of his disc, and ends on the eastern; and an eclipse of the moon begins on the eastern side of her disc, and ends on the western.

#### NUMBER OF ECLIPSES IN A YEAR.

The average number of eclipses in a year is *four*, two of the sun and two of the moon; and, as the sun and moon are as long below the horizon of any *particular place* as they are above it, the average number of visible eclipses in a year is two, one of the sun and one of the moon; the lunar eclipse frequently happens a fortnight after the solar one, or the solar one a fortnight after the lunar one.

\* If you draw the figure on card paper, and cut out the moon, her shadow and orbit, so as to turn on the line *a E G b*. &c. the above illustration will be rendered more familiar.

*The most general number of eclipses, in any year, is four; there are sometimes six eclipses in a year, but there cannot be more than seven, nor fewer than two.*

The reason will appear, by considering that the sun cannot pass both the nodes of the moon's orbit more than once a year, making four eclipses, except he pass one of them in the beginning of the year; in this case he *may* pass the *same* node again a little before the end of the year, because he is about 173\* days in passing from one node to the other; therefore he may return to the same node in about 346 days, which is less than a year, making six eclipses. As twelve lunations †, or 354 days from the eclipse in the beginning of the year may produce a new moon before the year is ended, which (on account of the retrograde motion of the moon's nodes) *may* fall within the solar limit, it is possible for seven eclipses to happen in a year, five of the sun and two of the moon. When the moon changes in either node, she cannot be near enough to the other node at the time of the next full moon to be eclipsed, and in six lunar months afterwards, or about 177 days, she will change near the other node; in this case there cannot be more than two eclipses in a year, and both of the sun.

The ecliptic limits of the sun are greater than those of the moon, and hence there will be more solar than lunar eclipses, in the ratio of  $17^{\circ} 21'$  to  $11^{\circ} 34'$ , or nearly of 3 to 2; but more lunar than solar eclipses are seen at any given place, because a lunar eclipse is visible to a whole hemisphere at once; whereas, a solar eclipse is visible only to a part, as has been observed before, and therefore there is a greater probability of seeing a lunar than a solar eclipse.

\* The moon's nodes have a retrograde motion of about  $19\frac{1}{3}$  degrees in a year (see page 135); therefore the sun will have to move  $(188^{\circ} - \frac{19\frac{1}{3}}{2})$

$= 170\frac{1}{3}$  degrees from one node to the other. But it has been shewn in a preceding note (see page 14), that the sun's apparent diurnal motion is about  $59'$  in a day; hence  $59' : 1 \text{ day} :: 170\frac{1}{3}^{\circ} : 173 \text{ days}$

† That is, 12 times 29 days 12 hours 44 min. 3 sec., or 354 days 8 hours 48 min. 36 sec.

PART III.

CONTAINING

*Problems performed by the Terrestrial and Celestial Globes.*

CHAPTER I.

*Problems performed by the Terrestrial Globe.*

PROBLEM I.

*To find the Latitude of any given Place.*

**R**ULE. Bring the given place to that part of the brass meridian which is numbered from the equator towards the poles; the degree above the place is the latitude. If the place be on the north side of the equator, the latitude is north; if it be on the south side the latitude is south.

On small globes the latitude of a place cannot be found nearer than to about a quarter of a degree. Each degree of the brass meridian on the largest globes is generally divided into three equal parts; each part containing twenty geographical miles; on such globes the latitude may be found to 10'.

**EXAMPLES.** What is the latitude of Edinburgh?

*Answer.* 56° north

2. Required the latitudes of the following places :

Amsterdam	Florence	Philadelphia
Archangel	Gibraltar	Quebec
Barcelona	Hamburgh	Rio Janeiro
Batavia	Ipahan	Stockholm
Bencoolen	Lausanne	Turin
Berlin	Lisbon	Vienna
Cadiz	Madras	Warsaw
Canton	Madrid	Washington
Dantzic	Naples	Wilna
Drontheim	Paris	York

3. Find all the places on the globe which have no latitude.
4. What is the greatest latitude a place can have?

### PROBLEM II.

*To find all those places which have the same latitude as any given place.*

**RULE.** Bring the given place to that part of the brass meridian which is numbered from the equator towards the poles, and observe its latitude; turn the globe round, and all places passing under the observed latitude are those required.

All places in the same latitude have the same length of day and night and the same seasons of the year, though, from local circumstances, they may not have the same atmospheric temperature. See the note page 17.

**EXAMPLES. I.** What places have the same, or nearly the same latitude as Madrid?

*Answer.* Minorca, Naples, Constantinople, Samarcand, Philadelphia, &c.

2. What inhabitants of the earth have the same length of days as the inhabitants of Edinburgh?
3. What places have nearly the same latitude as London?
4. What inhabitants of the earth have the same seasons of the year as those of Ispahan?
5. Find all places of the earth which have the longest day the same length as at Port Royal in Jamaica?

### PROBLEM III.

*To find the longitude of any place.*

**RULE.** Bring the given place to the brass meridian, the number of degrees on the equator, reckoning from the meridian passing through London to the brass meridian, is the longitude. If the place lie to the right hand of the meridian passing through London, the longitude is east; if to the left hand, the longitude is west.

On Adams' globes there are two rows of figures above the equator. When the place lies to the right hand of the meridian of London, the longitude must be counted on the upper line; when it lies to the left hand, it must be counted on the lower line. Bardin's New British Globes have also two rows of figures above the equator, but the lower line is always used in reckoning the longitude.

EXAMPLES. 1. What is the longitude of Petersburg ?

*Answer.*  $30\frac{1}{4}^{\circ}$  east.

2. What is the longitude of Philadelphia ?

*Answer.*  $75\frac{1}{4}^{\circ}$  west.

3. Required the longitudes of the following places :

Aberdeen	Civita Vecchia	Lisbon
Alexandria	Constantinople	Madras
Barbadoes	Copenhagen	Masulipatam
Bombay	Drontheim	Mecca
Botany Bay	Ephesus	Nankia
Canton	Gibraltar	Palermo
Carlsrona	Leghorn	Pondicherry
Cayenne	Liverpool	Queda

4. What is the greatest longitude a place can have ?

#### PROBLEM IV.

*To find all those places that have the same longitude as a given place.*

**RULE.** Bring the given place to the brass meridian, then all places under the same edge of the meridian from pole to pole have the same longitude.

All people situated under the same meridian from  $66^{\circ} 28'$  north latitude to  $66^{\circ} 28'$  south latitude, have noon at the same time : or, if it be one, two, three, or any number of hours before or after noon with the particular place, it will be the same hour with every other place situated under the same meridian.

EXAMPLES. 1. What places have the same, or nearly the same longitude as Stockholm ?

*Answer.* Dantzic, Presburg, Tarento, the cape of Good Hope, &c.

2. What places have the same longitude as Alexandria ?

3. When it is ten o'clock in the evening at London, what inhabitants of the earth have the same hour ?

4. What inhabitants of the earth have midnight when the inhabitants of Jamaica have midnight ?

5. What Places of the earth have the same longitude as the following places ?

London	Quebec	The Sandwich islands
Perkin	Dublin	Pelew Islands

#### PROBLEM

## PROBLEM V.

*To find the latitude and longitude of any place.*

**RULE.** Bring the given place to that part of the brass meridian which is numbered from the equator towards the poles; the degree above the place is the latitude, and the degree on the equator, cut by the brass meridian, is the longitude.

This problem is only an exercise of the *first* and *third*.

**EXAMPLES.** 1. What are the latitude and longitude of Petersburg?

*Answer.* Latitude  $60^{\circ}$  N. longitude  $30\frac{1}{4}^{\circ}$  E.

2. Required the latitudes and longitudes of the following places:

Acapulco	Cusco	Leith
Aleppo	Copenhagen	Lizard
Algiers	Durazzo	Lubec
Archangel	Elfinore	Malacca
Belfast	Flushing	Manilla
Bergen	Cape Guardafui	Medina
Buenos Ayres	Hamburgh	Mexico
Calcutta	Jeddo	Mocha
Candy	Jaffa	Moscow
Corinth	Ivica	Oporto

## PROBLEM VI.

*To find any place on the globe having the latitude and longitude of that place given.*

**RULE.** Find the longitude of the given place on the equator, and bring it to that part of the brass meridian which is numbered from the equator towards the poles; then under the given latitude, on the brass meridian, you will find the place required.

**EXAMPLES.** 1. What place has  $151^{\circ}\frac{1}{2}$  east longitude and  $34^{\circ}$  south latitude.

*Answer.* Botany Bay.

2. What places have the following latitudes and longitudes?

Latitudes.	Longitudes.	Latitudes.	Longitudes.
50° 6' N.	5° 54' W.	19° 26' N.	100° 6' W.
48 12 N.	16 16 E.	59 56 N.	30 19 E.
55 58 N.	3 12 W.	0 13 S.	77 55 W.
52 22 N.	4 51 E.	46 55 N.	69 53 W.
31 13 N.	29 55 E.	59 21 N.	18 4 E.
64 34 N.	38 58 E.	8 32 N.	81 11 E.
34 29 S.	18 23 E.	5 9 S.	119 49 E.
3 49 S.	102 10 E.	22 54 S.	42 44 W.
34 35 S.	58 31 W.	36 5 N.	5 22 W.
32 25 N.	52 50 E.	32 38 N.	17 6 W.

## PROBLEM VII.

*To find the difference of latitude between any two places.*

**RULE.** Bring one of the places to that half of the brass meridian which is numbered from the equator towards the poles, and mark the degree above it; then bring the other place to the meridian, and the number of degrees between it and the above mark will be the difference of latitude.

**OR,** Find the latitudes of both the places (by Prob. I.) Then, if the latitudes be both north or both south, subtract the less latitude from the greater, and the remainder will be the difference of latitude; but, if the latitudes be one north and the other south, add them together, and their sum will be the difference of latitude.

**EXAMPLES.** 1. What is the difference of latitude between Philadelphia and Petersburg?

*Answer.* 20 degrees.

2. What is the difference of latitude between Madrid and Buenos Ayres?

*Answer.* 75 degrees.

3. Required the difference of latitude between the following places?

London and Rome.

Delhi and Cape Comorin.

Vera Cruz and Cape Horn.

Mexico and Botany Bay.

Astracan and Bombay.

St. Helena and Manilla.

Copenhagen and Toulon.

Brest and Inverness.

Cadiz and Sierra Leone.

Alexandria and the Cape of Good Hope.

Pekin and Lima.

St. Salvador and Surinam.

Washington and Quebec.

Porto Bello and the Straits of Magellan.

Trinidad I. and Trincomalé.

Bencoolen and Calcutta.

4. What two places on the globe have the greatest difference of latitude ?

### PROBLEM VIII.

*To find the difference of longitude between any two places.*

**RULE.** Bring one of the given places to the brass meridian, and mark its longitude on the equator; then bring the other place to the brass meridian, and the number of degrees between its longitude and the above mark, counted on the equator, the nearest way round the globe, will shew the difference of longitude.

**OR,** Find the longitudes of both the places (by Prob. III.) then, if the longitudes be both east or both west, subtract the less longitude from the greater, and the remainder will be the difference of longitude: but, if the longitudes be one east and the other west, add them together, and their sum will be the difference of longitude.

When this sum exceeds 180 degrees, take it from 360, and the remainder will be the difference of longitude.

**EXAMPLES.** 1. What is the difference of longitude between Barbadoes and Cape Verd ?

*Answer.*  $41^{\circ} 48'$ .

2. What is the difference of longitude between Buenos Ayres and the Cape of Good Hope ?

*Answer.*  $76^{\circ} 50'$ .

3. What is the difference of longitude between Botany Bay and O'why'ee ?

*Answer.*  $52^{\circ} 45'$ , or  $52\frac{1}{2}^{\circ}$ .

4. Required the difference of longitude between the following places ?

Vera Cruz and Canton.

Bergen and Bombay.

Columbo and Mexico.

Juan Fernandes I. and Manilla.

Pelew I. and Ispahan.

Boston in Amer and Berlin.

Constantinople and Batavia.

Bermudas I. and I. of Rhodes.

Port Patrick and Berne.

Mount Heckla and Mount Vesuvius.

Mount Ætna and Teneriffe.

North Cape and Gibraltar.

5. What is the greatest difference of longitude comprehended between two places.

## PROBLEM IX.

*To find the distance between any two places.*

RULE. The shortest distance between any two places on the earth, is an arch of a great circle contained between the two places. Therefore, lay the graduated edge of the quadrant of altitude over the two places, so that the division marked O may be on one of the places, the degrees on the quadrant comprehended between the two places will give their distance; and if these degrees be multiplied by 60, the product will give the distance in geographical miles; or multiply the degrees by  $69\frac{1}{2}$ , and the product will give the distance in English miles.

OR, Take the distance between the two places with a pair of compasses, and apply that distance to the equator, which will shew how many degrees it contains.

If the distance between the two places should exceed the length of the quadrant, stretch a piece of thread over the two places, and mark their distance; the extent of thread between these marks, applied to the equator, from the meridian of London, will shew the number of degrees between the two places.

Simple as this problem may appear in theory, on a superficial view, yet, when applied to practice, the difficulties which occur are almost insuperable. In sailing across the trackless ocean, or travelling through extensive and unknown countries, our only guide is the compass, and except two places be situated directly north and south of each other, or upon the equator, though we may travel or sail from one place to the other by the compass, yet we cannot take the shortest route, as measured by the quadrant of altitude.

To illustrate these observations by examples: *first*, Let two places be situated in latitude  $50^{\circ}$  north, and differing in longitude  $48^{\circ} 50'$ , which will nearly correspond with the Land's End and the eastern coast of Newfoundland. The arch of *nearest* distance being that of a great circle, truly calculated by *spherical trigonometry*, is  $30^{\circ} 49' 6''$ , equal to  $1849\frac{1}{5}$  geographical miles, or  $2141\frac{2}{5}$  English miles: but, if a ship steer from the Land's End directly westward, in the latitude of  $50^{\circ}$  north, till her difference of longitude be  $48^{\circ} 50'$ , her true distance sailed will be  $1883\frac{2}{5}$  geographical miles, or  $2181\frac{3}{5}$  English miles, making a circuitous course of  $34\frac{1}{5}$  geographical miles, or  $40\frac{2}{5}$  English miles. Those who are acquainted with *spherical trigonometry* and the principles of navigation,

particularly *great circle sailing*, know that it is *impossible* to conduct a ship exactly on the arch of a great circle, except, as before observed, on the equator or a meridian; for, in this example, she must be steered through all the different angles, from N.  $70^{\circ} 49' 30''$  W. to 90 degrees, and continue sailing from thence through all the same varieties of angles, till she arrives at the intended place, where the angle will become  $70^{\circ} 49' 30''$ , the same as at first.

*Secondly.* Suppose it were required to find the shortest distance between the Lizard, lat.  $49^{\circ} 57'$  N. long.  $5^{\circ} 21'$  W. and the island of Bermudas, lat.  $32^{\circ} 35'$  N, long.  $63^{\circ} 32'$  W. The arch of a great circle contained between the two places, will be found, by spherical trigonometry, to be  $45^{\circ} 44'$ , being 2744 geographical miles, or 3178 English miles. See the method of calculating such problems in *Keith's Trigonometry*, page 269. Now, for a ship to run this shortest track, she must sail from the Lizard S.  $89^{\circ} 29'$  W. and gradually lessen her course so as to arrive at Bermudas on the rhumb bearing S.  $49^{\circ} 47'$  W.; but this, though true in theory, is impracticable; the course and distance must therefore be calculated by *Mercator's Sailing*. The direct course by the compass will be found to be S.  $68^{\circ} 9'$  W., and the distance upon that course 2800 geographical miles, or 3243 English miles; making a circuitous course of 56 geographical miles, or 65 English miles.

Hence, to find the distance between any two places whose latitudes and longitudes are known, in order to travel or sail from one place to the other, on a direct course by the mariner's compass, the following methods must be used.

1. If the places be situated on the same meridian, their difference of latitude will be the *nearest* distance between them in degrees, and the places will be exactly north and south of each other.

2. If the places be situated on the equator, their difference of longitude will be the *nearest* distance in degrees, and the places will be exactly east and west of each other.

3. If the places differ both in latitudes and longitudes, the distance between them and the point of the compass on which a person must sail or travel, from the one place to the other, must be found by *Mercator's Sailing*, as in navigation.

4. If the places be situated in the same latitude, they will be directly east and west of each other; and their difference of longitude, multiplied by the number of miles which make a degree in the given latitude, according to the following table, will give the distance.

Deg. Lat.	Geog. Miles.	English Miles.	Deg. Lat.	Geog. Miles.	English Miles.	Deg. Lat.	Geog. Miles.	English Miles.
0	60.00	69.07	31	51.43	59.13	61	29.09	33.45
1	59.99	69.06	32	50.88	58.51	62	28.17	32.40
2	59.96	69.03	33	50.32	57.87	63	27.24	31.33
3	59.92	68.97	34	49.74	57.20	64	26.30	30.24
4	59.85	68.90	35	49.15	56.51	65	25.36	29.15
5	59.77	68.81	36	48.54	55.81	66	24.40	28.06
6	59.67	68.62	37	47.92	55.10	67	23.45	26.96
7	59.55	68.48	38	47.28	54.37	68	22.48	25.85
8	59.42	68.31	39	46.63	53.62	69	21.5	24.73
9	59.26	68.15	40	45.96	52.85	70	20.52	23.60
10	59.09	67.95	41	45.28	52.07	71	19.53	22.47
11	58.89	67.73	42	44.59	51.27	72	18.54	21.32
12	58.69	67.48	43	43.88	50.46	73	17.54	20.17
13	58.46	67.21	44	43.16	49.63	74	16.54	19.02
14	58.22	66.95	45	42.43	48.78	75	15.53	17.86
15	57.95	66.65	46	41.68	47.93	76	14.52	16.70
16	57.67	66.31	47	40.92	47.06	77	13.50	15.52
17	57.38	65.98	48	40.15	46.16	78	12.48	14.35
18	57.06	65.62	49	39.36	45.26	79	11.45	13.17
19	56.73	65.24	50	38.57	44.35	80	10.42	11.98
20	56.38	64.84	51	37.76	43.42	81	9.38	10.79
21	56.01	64.42	52	36.94	42.48	82	8.35	9.59
22	55.63	63.97	53	36.11	41.53	83	7.31	8.41
23	55.23	63.51	54	35.27	40.56	84	6.27	7.21
24	54.81	63.03	55	34.41	39.58	85	5.22	6.00
25	54.38	62.53	56	33.55	38.58	86	4.18	4.81
26	53.93	62.02	57	32.68	37.58	87	3.14	3.61
27	53.46	61.48	58	31.79	36.57	88	2.09	2.41
28	52.97	60.93	59	30.90	35.54	89	1.05	1.21
29	52.48	60.35	60	30.00	34.50	90	0.00	0.00
30	51.96	59.75	Length of a degree 69.07 English miles					

The above table is calculated thus: As radius is to the length of a degree upon the equator, so is the co-sine of the given latitude to the length of a degree in that latitude. See this proportion illustrated in *Keith's Trigonometry*, page 249.

EXAMPLES. I. What is the nearest distance between the Lizard and the island of Bermudas ?

$$\begin{array}{r}
 45\frac{3}{4} \text{ distance in degrees.} \\
 \underline{60} \\
 2700 \\
 30 \\
 \underline{15} \\
 2745 \text{ geographical miles.}
 \end{array}$$

$$\begin{array}{r}
 45\frac{3}{4} \text{ distance in degrees.} \\
 \underline{69\frac{1}{2}} \\
 22\frac{7}{8} \\
 405 \\
 270 \\
 34\frac{1}{2} \\
 \underline{17\frac{1}{4}} \\
 3179\frac{5}{8}
 \end{array}$$

2. What is the nearest distance between the island of Bermudas and St. Helena ?

$$\begin{array}{r}
 73\frac{1}{2} \text{ distance in degrees.} \\
 \underline{60} \\
 4380 \\
 30 \\
 \underline{\quad} \\
 4410 \text{ geographical miles.}
 \end{array}$$

$$\begin{array}{r}
 73\frac{1}{2} \text{ distance in degrees.} \\
 \underline{69\frac{1}{2}} \\
 36\frac{3}{4} \\
 657 \\
 438 \\
 34\frac{1}{2} \\
 \underline{\quad} \\
 5138\frac{1}{4} \text{ English miles.}
 \end{array}$$

3. What is the nearest distance between London and Botany Bay ?

$$\begin{array}{r}
 154 \text{ distance in degrees.} \\
 \underline{60} \\
 9240 \text{ geographical miles.}
 \end{array}$$

$$\begin{array}{r}
 154 \text{ distance in degrees.} \\
 \underline{69\frac{1}{2}} \\
 77 \\
 1386 \\
 924 \\
 \underline{\quad} \\
 10703 \text{ English miles.}
 \end{array}$$

4. What is the direct distance between London and Jamaica, in geographical and in English miles ?

5. What is the extent of Europe in English miles, from Cape Matapan in the Morea, latitude  $36^{\circ} 35'$  N. to the North Cape in Lapland, latitude  $71^{\circ} 30'$  N. ? the places being situated nearly due north and south.

6. What is the extent of Africa from Cape Verd, lat.  $14^{\circ} 45'$  N. long.  $17^{\circ} 33'$  W. to Cape Guardafui, lat.  $11^{\circ} 47'$  N. long.  $51^{\circ} 35'$  E. ?

7. What is the extent of South America from Cape Blanco in the west to Cape St. Roque in the east ?

8. Sup-

8. Suppose the track of a ship to Madras be from the Lizard to St. Anthony, one of the Cape Verd islands, thence to St. Helena, thence to the Cape of Good Hope, thence to the east of the Mauritius, thence a little to the south-east of Ceylon, and thence to Madras; how many English miles is the Land's End from Madras?

#### PROBLEM X.

*A place being given on the globe, to find all places which are situated at the same distance from it as any other given place.*

**RULE.** Lay the graduated edge of the quadrant of altitude over the two places, so that the division marked O may be on one of the places, then observe what degree of the quadrant stands over the other place; move the quadrant entirely round, keeping the division marked O in its first situation, and all places which pass under the same degree which was observed to stand over the other place, will be those sought.

**OR,** Place one foot of a pair of compasses in one of the given places, and extend the other foot to the other given place; a circle described from the first place as a centre, with this extent, will pass through all the places sought.

If the distance between the two given places should exceed the length of the quadrant, or the extent of a pair of compasses, stretch a piece of thread over the two places, as in the preceding problem.

**Examples.** 1. It is required to find all the places on the globe which are situated at the same distance from London as Warsaw is?

*Answer.* Königsburg, Buda, Pofega, Alicant, &c.

2. What places are at the same distance from London as Petersburg is?

3. What places are at the same distance from London as Constantinople is?

4. What places are at the same distance from Rome as Madrid is?

## PROBLEM XI.

*Given the latitude of a place and its distance from a given place, to find that place whereof the latitude is given.*

RULE. If the distance be given in English or geographical miles, turn them into degrees by dividing by  $69\frac{1}{2}$  for English miles, or 60 for geographical miles; then put that part of the graduated edge of the quadrant of altitude which is marked O upon the given place, and move the other end eastward or westward (according as the required place lies to the east or west of the given place) till the degrees of distance cut the given parallel of latitude; under the point of intersection you will find the place sought.

OR, Having reduced the miles into degrees, take the same number of degrees from the equator with a pair of compasses, and with one foot of the compasses in the given place, as a centre, and this extent of degrees, describe a circle on the globe; turn the globe till this circle falls under the given latitude in the brass meridian, and you will find the place required.

EXAMPLES. 1. A place in latitude  $60^{\circ}$  N. is  $1320\frac{1}{2}$  English miles from London, and it is situated in E. longitude; required the place?

*Answer.* Divide  $1320\frac{1}{2}$  miles by  $69\frac{1}{2}$  miles, or, which is the same thing, 2641 half miles by 139 half miles, the quotient will give 19 degrees; hence the required place is Petersburg.

2. A place in latitude  $32\frac{1}{2}^{\circ}$  N. is 1350 geographical miles from London, and it is situated in W. longitude; required the place?

*Answer.* Divide 1350 by 60 the quotient is  $22^{\circ} 30'$ , or  $22\frac{1}{2}^{\circ}$  degrees; hence the required place is the west point of the island of Madeira.

3. What place, in E. longitude and  $41^{\circ}$  N. latitude, is 1529 English miles from London.

4. What place, in W. longitude and  $13^{\circ}$  N. latitude, is 3660 geographical miles from London?

## PROBLEM XII.

*Given the longitude of a place and its distance from a given place, to find that place whereof the longitude is given.*

**RULE.** If the distance be given in English or geographical miles, turn them into degrees by dividing by  $69\frac{1}{2}$  for English miles, or 60 for geographical miles; then, put that part of the graduated edge of the quadrant of altitude which is marked O upon the given place, and move the other end northward or southward (according as the required place lies to the north or south of the given place), till the degrees of distance cut the given longitude: under the point of intersection you will find the place sought.

**OR,** Having reduced the miles into degrees, take the same number of degrees from the equator with a pair of compasses, and with one foot of the compasses in the given place, as a centre, and this extent of degrees, describe a circle on the globe; bring the given longitude to the brass meridian, and you will find the place, upon the circle, under the brass meridian.

**EXAMPLES.** 1. A place in north latitude, and in 60 degrees west longitude, is  $4239\frac{1}{2}$  English miles from London; required the place?

*Answer.* Divide  $4239\frac{1}{2}$  miles by  $69\frac{1}{2}$  miles, or, which is the same thing 8479 half miles by 139 half miles, the quotient will give 61 degrees; hence the required place is the island of Barbadoes.

2. A place in north latitude, and in  $75\frac{1}{4}$  degrees west longitude, is 3120 geographical miles from London; what place is it?

3. A place in  $31\frac{1}{4}$  degrees east longitude, and situated southward of London, is 2224 English miles from it; required the place?

4. A place in 29 degrees east longitude, and situated southward of London, is 1529 English miles from it; required the place?

## PROBLEM XIII.

To find how many miles make a degree of longitude in any given parallel of latitude.

RULE. Lay the quadrant of altitude parallel to the equator, between any two meridians in the given latitude, which differ in longitude 15 degrees \* ; the number of degrees intercepted between them multiplied by 4, will give the length of a degree in geographical miles. The geographical miles may be brought into English miles by multiplying by 116, and cutting off two figures from the right hand of the product.

OR, Take the distance between two meridians, which differ in longitude 15 degrees in the given parallel of latitude, with a pair of compasses ; apply this distance to the equator, and observe how many degrees it makes ; with which proceed as above.

Since the quadrant of altitude will measure no arch truly but that of a great circle ; and a pair of compasses will only measure the chord of an arch, not the arch itself ; it follows, that the preceding rule cannot be mathematically true, though sufficiently correct for practical purposes. When great exactness is required, recourse must be had to calculation. See the table in the note to Problem IX, page 173.

The above rule is founded on a supposition that the number of degrees contained between any two meridians, reckoned on the equator, is to the number of degrees contained between the same meridians, on any parallel of latitude, as the number of geographical miles contained in one degree of the equator, is to the number of geographical miles contained in one degree on the given parallel of latitude. Thus in the latitude of London, two places which differ 15 degrees in longitude are  $9\frac{1}{4}$  degrees distant by the rule. Hence,

$15^{\circ} : 9\frac{1}{4}^{\circ} :: 60 \text{ m.} : 37 \text{ m.}$ , or  $15^{\circ} : 60 \text{ m.} :: 9\frac{1}{4}^{\circ} : 37 \text{ m.}$  but 15 is to 60 as 1 is to 4, therefore,  $1 : 4 :: 9\frac{1}{4} : 37$  geographical miles contained in one degree. Now, any number of geographical miles may be brought into English miles by multiplying by  $69\frac{1}{2}$  and dividing by 60 ; or by multiplying by 1.16, for  $60 : 69\frac{1}{2} :: 1 : 1.16$  nearly.

EXAMPLES. I. How many geographical and English miles make a degree in the latitude of Pekin.

Answer. The latitude of Pekin is  $40^{\circ}$  north ; the distance between two meridians in that latitude (which differ in longitude 15 degrees) is  $11\frac{1}{2}$  degrees. Now,  $11\frac{1}{2}$  degrees multiplied by 4, produces 46 geographical miles for the length of a degree of longitude, in the latitude of Pekin ; and, if 46 be multiplied by 116, the product will be 5336 ; cut off the

The meridians on Cary's globes are drawn through every ten degrees. The rule will answer for these globes, by reading 10 degrees for 15 degrees, and multiplying by 6 instead of 4.

two right hand figures, and the length of a degree in English miles will be 53. OR, by the rule of three  $15^{\circ} : 69\frac{1}{2} \text{ m.} :: 11\frac{1}{2}^{\circ} : 53 \text{ miles.}$

2. How many miles make a degree in the parallels of latitude wherein the following places are situated?

Surinam.	Washington.	Spitzbergen.
Barbadoes.	Quebec.	Cape Verd.
Havannah.	Skalholt.	Alexandria.
Bermudas I.	North Cape.	Paris.

#### PROBLEM XIV.

*To find the bearing of one place from another.*

RULE. If both the places be situated on the same parallel of latitude, their bearing is either east or west from each other; if they be situated on the same meridian, they bear north and south from each other; if they be situated on the same rhumb-line\*, that rhumb-line is their bearing; if they be not situated on the same rhumb-line, lay the quadrant of altitude over the two places, and that rhumb-line which is the nearest of being parallel to the quadrant will be their bearing.

OR, If the globe have no rhumb-lines drawn on it, make a small mariner's compass (such as in Plate I. Fig. 4.) and apply the centre of it to any given place, so that the north and south points may coincide with some meridian; the other points will shew the bearings of all the circumjacent places, to the distance of upwards of a thousand miles, if the central place be not far distant from the equator.

EXAMPLES. 1. Which way must a ship steer from the Lizard to the island of Bermudas?

*Answer.* W.S.W.

2. Which way must a ship steer from the Lizard to the island of Madeira?

*Answer.* S.S.W.

---

\* On Adams' globes there are two compasses drawn on the equator, each point of which may be called a rhumb-line, being drawn so as to cut all the meridians in equal angles. One compass is drawn on a vacant place in the Pacific ocean, between America and New Holland; and another, in a similar manner, in the Atlantic, between Africa and South America. There are no rhumb-lines, neither on Cary's, nor on Bardin's globes.

3. Required the bearing between London and the following places ?

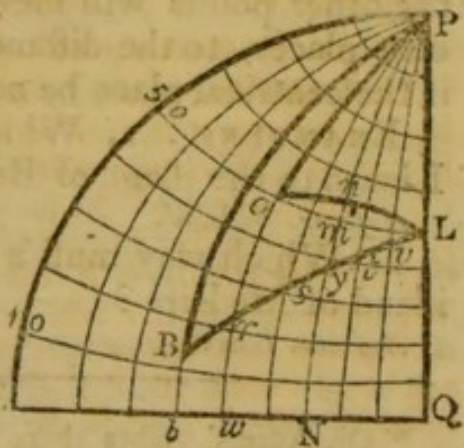
Amsterdam.	Copenhagen,	Petersburg.
Athens.	Dublin.	Prague.
Bergen.	Edinburgh.	Rome.
Berlin.	Lisbon.	Stockholm.
Berne.	Madrid.	Vienna.
Brussels.	Naples.	Warsaw.
Buda.	Paris.	

### PROBLEM XV.

*To find the angle of position between the two places.*

**RULE.** Elevate the north or south pole, according as the latitude is north or south, so many degrees above the horizon as are equal to the latitude of one of the given places ; bring that place to the brass meridian, and screw the quadrant of altitude upon the degree over it ; next move the quadrant till its graduated edge falls upon the other place ; then the number of degrees on the wooden horizon, between the graduated edge of the quadrant and the brass meridian, reckoning towards the elevated pole, is the angle of position between the two places.

This simple problem has been the occasion of many disputes among writers on the globes. Some suppose the angle of position to represent the true bearing of two places, viz. *that point of the compass upon which any person must constantly sail or travel, from the one place to the other ;* while others contend, that the angle of position between two places is very different from their bearing by the mariner's compass. We shall here endeavour to set the matter in a clear point of view. The annexed figure represents a quarter of the sphere, stereographically projected on the plane of the meridian, with the half meridians and parallels of latitude drawn



through every ten degrees ; P represents the north pole, and EQ a portion of the equator. Now, by attending to the manner of finding the angle of position, as laid down in the foregoing problem, we shall find, that *the quadrant of altitude always forms the base of a spherical triangle, the two sides*

sides of which triangle are the complements of the latitudes of the two places, and the vertical angle is their difference of longitude. The angles at the base of this triangle, are the angles of position between the two places.

1. *When the two places are situated on the same parallel of latitude.*

Let two places L and O be situated in latitude  $50^{\circ}$  north, and differing in longitude  $48^{\circ} 50'$ , which will nearly correspond with the Land's End and the eastern coast of Newfoundland (See the note to Prob. IX.); then OP and LP will be each 40 degrees, the angle OPL, measured by the arch  $w$  Q, will be  $48^{\circ} 50'$ ; whence the arch of nearest distance O n L may be found (by rule 4, p. 201, *Keith's Trigonometry*) being  $30^{\circ} 39' 6''$ , the angle PLO equal to P O L, the triangle being isosceles, is  $70^{\circ} 49' 30''$ ; and if  $n$  be the middle point between L and O, the latitude of that point will be found to be  $52^{\circ} 37'$  north, and the angles P n L and P n O will be right angles. Now, if an indefinite number of points be taken along the edge of the quadrant of latitude, viz. on the arch L n O, the angle of position between L and each of these points will be N.  $70^{\circ} 49' 30''$  W.; but, if it were possible for a ship to sail along the arch L n O by the compass, her latitude would gradually increase between L and  $n$ , from  $50^{\circ}$  N to  $52^{\circ} 37'$  N.; and the courses she must steer would vary from  $70^{\circ} 49' 30''$  at L, to  $90^{\circ}$  at  $n$ . In sailing from  $n$  to O, she must decrease her latitude from  $52^{\circ} 37'$  N. to  $50^{\circ}$  N. and her courses must vary from  $90^{\circ}$ , or directly west, to  $70^{\circ} 49' 30''$ ; but, if a ship were to sail along the parallel of latitude L m O, her course would be invariably due west. Hence it follows that, if two places be situated on the same parallel of latitude, the angle of position between them cannot represent their true bearing by the mariner's compass.

COROLLARY. If the two places were situated on the equator as at  $w$  and Q, the angle of position between Q and  $w$ , and between Q and all the intermediate points as at N, would be 90 degrees. In this case therefore, and in this *only*, the angle of position shews the true bearing by the compass.

2. *If the two places differ both in latitudes and longitudes.*

Let L represent a place in latitude  $50^{\circ}$  N; B a place in latitude  $13^{\circ} 30'$  N., and let their difference of longitude BPL, measured by the arch  $b$  Q, be  $52^{\circ} 58'$ . The angle of position between L and B (calculated by spherical trigonometry) will be found to be S.  $68^{\circ} 57'$  W., and the angle of position between B and L will be N.  $38^{\circ} 5'$  E.; whereas, the direct course by the compass from L to B (calculated by *Mercator's Sailing*) is S.  $50^{\circ} 6'$  W., and from B to L, it is N.  $50^{\circ} 6'$  E. If we assume any number of points on the arch L B, the angle of position between L and each of these points will be invariable, viz. P L  $v$ , P L  $t$ , P L  $y$ , P L  $s$ , P L  $r$ , &c. are each equal to  $68^{\circ} 57'$ : while the angles of position between each of these places and L, viz. P  $v$  L, P  $t$  L, P  $y$  L, P  $s$  L, P  $r$  L, &c. are continually diminishing. If a ship, therefore, were to sail from L, on a S.  $68^{\circ} 57'$  W. course, by the mariner's compass, she would never arrive at B; and were she to sail from B, on a N.  $38^{\circ} 6'$  E. course by the compass, she would never arrive at L.

Hence an angle of position between two places cannot represent their bearing, except those places be on the equator, or upon the same meridian.

EXAM-

EXAMPLES. I. What is the angle of position between London and Prague ?

*Answer.* 90 degrees from the north, towards the east ; the quadrant of altitude will fall upon the east point of the horizon, and pass over or near the following places, viz. Rotterdam, Frankfort, Cracow, Ockzakow, Caffa, south part of the Caspian sea, Guzerat in India, Madras, and part of the island of Ceylon. Hence all these places have the same angle of position from London.

2. What is the angle of position between London and Port Royal in Jamaica ?

*Answer.* 90 degrees from the north towards the west ; the quadrant of altitude will fall upon the west point of the horizon.

3. What is the angle of position between Philadelphia and Madrid ?

*Answer.* 65 degrees from the north towards the east ; the quadrant of altitude will fall between the E. N. E. and N. E. by E. points of the horizon.

4. Required the angles of position between London and the following places ?

Amsterdam.	Copenhagen.	Rome.
Berlin.	Cairo.	Stockholm.
Berne.	Lisbon.	Petersburg.
Constantinople.	Madras.	Quebec.

#### PROBLEM XVI.

*To find the Antæci, Periæci, and Antipodes of any place.*

RULE. Place the two poles of the globe in the horizon, and bring the given place to the eastern part of the horizon ; then, if the given place be in north latitude, observe how many degrees it is to the northward of the east point of the horizon ; the same number of degrees to the southward of the east point will shew the Antæci ; an equal number of degrees, counted from the west point of the horizon towards the north, will shew the Periæci ; and the same number of degrees, counted towards the south of the west, will point out the Antipodes. If the place be in south latitude the same rule will serve by reading south for north, and the contrary.

## OR THUS:

*For the Antæci.* Bring the given place to the brass meridian and observe its latitude, then in the opposite hemisphere, under the same degree of latitude, you will find the Antæci.

*For the Periæci.* Bring the given place to the brass meridian, and set the index of the hour circle to 12, turn the globe half round, or till the index points to the other 12, then under the latitude of the given place you will find the Periæci.

*For the Antipodes.* Bring the given place to the brass meridian, and set the index of the hour circle to 12, turn the globe half round, or till the index points to the other 12, then under the same degree of latitude with the given place, but in the opposite hemisphere, you will find the Antipodes.

EXAMPLES. 1. Required the Antæci, Periæci, and Antipodes of the island of Bermudas?

*Answer.* A place in Paraguay, a little N.W. of Buenos Ayres, is the Antæci; the Periæci is a place in China N.W. of Nankin; and the S.W. part of New Holland is the Antipodes.

2. Required the Antæci, Periæci, and Antipodes, of the Cape of Good Hope?

3. Captain Cook, in one of his voyages, was in 50 degrees south latitude and 180 degrees of longitude; in what part of Europe was his antipodes?

4. Required the Antæci of the Falkland Islands?

5. Required the Periæci to the Philippine islands?

6. What inhabitants of the earth are Antipodes to Buenos Ayres?

## PROBLEM XVII.

*To find at what rate per hour the inhabitants of any given place are carried, from west to east, by the revolution of the earth on its axis.*

RULE. Find how many miles make a degree of longitude in the latitude of the given place (by Problem XIII.) which multiply by 15 for the answer\*.

---

\* The reason of this rule is obvious, for, if  $m$  be the number of miles contained in a degree, we have 24 hours;  $360^\circ \times m$ ; ; 1 hour to the answer;

OR, Look for the latitude of the given place in the table, Problem IX, against which you will find the number of miles contained in one degree; multiply these miles by 15, and reject two figures from the right hand of the product; the result will be the answer.

EXAMPLES. 1. At what rate *per* hour are the inhabitants of Madrid carried from west to east by the revolution of the earth on its axis.

*Answer.* The latitude of Madrid is about  $40^{\circ}$  N. where a degree of longitude measures 46 geographical, or 53 English miles (see Example 1. Prob XIII.) Now, 46 multiplied by 15 produces 690, and 53 multiplied by 15 produces 795; hence the inhabitants of Madrid are carried 690 geographical, or 795 English miles *per* hour.

*By the Table.* Against the latitude 40 you will find 45.96 geographical miles, and 52.85 English miles: Hence,  $45.96 \times 15 = 689.40$  and  $52.85 \times 15 = 792.75$ , by rejecting the two right hand figures from each product, the result will be 689 geographical miles, and 792 English miles, agreeing nearly with the above.

2. At what rate *per* hour are the inhabitants of the following places carried from west to east by the revolution of the earth on its axis?

Skalholt.	Philadelphia.	Cape of Good Hope.
Spitzbergen.	Cairo.	Calcutta.
Petersburg.	Barbadoes.	Delhi.
London.	Quito.	Batavia.

### PROBLEM XVIII.

*A particular place and the hour of the day at that place being given, to find what hour it is at any other place.*

RULE. Bring the place, at which the time is given, to the brass meridian, and set the index of the hour circle to 12\* ; turn the globe till the other place comes to the meri-

answer; but, 24 is contained 15 times in 360; therefore, 1 hour: 15  $\times$  m : : 1 hour to the answer: that is, on a supposition that the earth turns on its axis from west to east in 24 hours; but we have before observed that it turns on its axis in 23 hours 56 min. 4 sec., which will make a small difference not worth notice.

\* The index may be set to any hour, but 12 is the most convenient to count from, and it is immaterial which 12 on the hour circle the index is set to.  
dian,

dian, and the hours passed over by the index will be the difference of time between the two places. If the place where the hour is sought lie to the east of that wherein the time is given, count the difference of time forward from the given hour; if it lie to the west reckon the difference of time backward.

OR, WITHOUT THE HOUR CIRCLE.

Find the difference of longitude between the two places (by Problem VIII.) and turn it into time by allowing 15 degrees to an hour, or four minutes of time to one degree. The difference of longitude in time, will be the difference of time between the two places, with which proceed as above. Degrees of longitude may be turned into time by multiplying by 4; observing that minutes or miles of longitude, when multiplied by 4, produce seconds of time, and degrees of longitude, when multiplied by 4, produce minutes of time.

It has been remarked in the note page 6, that some globes have two rows of figures on the hour circle, others but one; this difference frequently occasions confusion; and the manner in which authors in general direct a learner to solve those problems wherein the hour circle is used, serves only to increase that confusion. In this, and in all the succeeding problems, great care has been taken to render the rules general for any hour circle whatsoever.

EXAMPLES. 1. When it is ten o'clock in the morning at London, what hour is it at Petersburg?

*Answer.* The difference of time is two hours; and, as Petersburg is eastward of London, this difference must be counted forward, so that it is twelve o'clock at noon at Petersburg.

OR, The difference of longitude between Petersburg and London is  $30^{\circ} 25'$ , which multiplied by 4 produces 2 hours 1 min. 40 sec. the difference of time shewn by the clocks of London and Petersburg; hence, as Petersburg lies to the east of London, when it is ten o'clock in the morning at London, it is one minute and forty seconds past twelve at Petersburg.

2. When it is two o'clock in the afternoon at Alexandria in Egypt, what hour is it at Philadelphia?

*Answer.* The difference of time is seven hours; and because Philadelphia lies to the west of Alexandria, this difference must be reckoned backward, so that it is seven o'clock in the morning at Philadelphia.

OR,

OR,	The longitude of Alexandria is	30° 16' E.
	The longitude of Philadelphia is	75 19 W.
	Difference of longitude	<hr/> 105 35
		<hr/> 4

Difference of longitude in time 7 h 2 m. 20 sec., the clocks at Philadelphia are slower than those at Alexandria; hence, when it is two o'clock in the afternoon at Alexandria, it is 57 m. 40 sec. past six in the morning at Philadelphia

3. When it is noon at London, what hour is it at Calcutta?
4. When it is ten o'clock in the morning at London, what hour is it at Washington?
5. When it is nine o'clock in the morning at Jamaica, what o'clock is it at Madras?
6. My watch was well regulated at London, and when I arrived at Madras, which was after a five month's voyage, it was four hours and fifty minutes slower than the clocks there. Had it gained or lost during the voyage? And how much?

#### PROBLEM XIX.

*A particular place and the hour of the day being given to find all places on the globe where it is then noon, or any other given hour.*

**RULE.** Bring the given place to the brass meridian, and set the index of the hour circle to 12; then, as the difference of time between the given and required places is always known by the problem, if the hour at the required places be earlier than the hour at the given place, turn the globe eastward till the index has passed over as many hours as are equal to the given difference of time; but, if the hour at the required places be later than the hour at the given place, turn the globe westward till the index has passed over as many hours as are equal to the given difference of time; and, in each case, all the places required will be found under the brass meridian.

#### OR, WITHOUT THE HOUR CIRCLE.

Reduce the difference of time between the given place and the required places into minutes; these minutes, divided by 4, will give degrees of longitude; if there be a remainder after dividing by 4, multiply it by 60, and divide

vide the product by four, the quotient will be minutes or miles of longitude. The difference of longitude between the given place and the required places being thus determined, if the hour at the required places be earlier than the hour at the given place, the required places lie as many degrees to the westward of the given place as are equal to the difference of longitude; if the hour at the required places be later than the hour at the given place, the required places lie as many degrees to the eastward of the given place as are equal to the difference of longitude.

EXAMPLES. 1. When it is noon at London, at what places is it  $\frac{1}{2}$  past eight o'clock in the morning.

*Answer.* The difference of time between London, the given place, and the required places, is  $3\frac{1}{2}$  hours, and the time at the required places is earlier than that at London; therefore the required places lie  $3\frac{1}{2}$  hours westward of London; consequently, by bringing to London the brass meridian, setting the index to 12, and turning the globe eastward till the index has passed over  $3\frac{1}{2}$  hours, all the required places will be under the brass meridian, as the eastern coast of Newfoundland, Cayenne, part of Paraguay, &c.

OR, The difference of time between London, the given place, and the required places, is 3 hours 30 min.

$$\begin{array}{r}
 3 \text{ h. } 30 \text{ m.} \\
 \underline{60} \\
 4)210 \text{ m.} \\
 \underline{\phantom{00}} \\
 52^\circ \text{ — } 2 \\
 \phantom{52^\circ} \underline{60} \\
 4)120
 \end{array}$$

The difference of longitude between the given place and the required places is  $52^\circ 30'$ . The hour at the required places being earlier than that at the given place, they lie  $52^\circ 30'$  westward of the given place. Hence, all places situated in  $52^\circ 30'$  west longitude from London are the places sought, and will be found to be Cayenne, &c. as above.

2. When it is two o'clock in the afternoon at London, at what places is it  $\frac{1}{2}$  past five in the afternoon?

*Answer.* Here the difference of time between London, the given place, and the required places, is  $3\frac{1}{2}$  hours; but the time at the required places is later than at London. The operation will be the same as in example 1, only the globe must be turned  $3\frac{1}{2}$  hours towards the west, because the required places will be in east longitude, or eastward of the given place. The places sought are the Caspian sea, western part of Nova Zembla, the island of Socotra, eastern part of Madagascar, &c.

3. When it is  $\frac{3}{4}$  past four in the afternoon at Paris, where is it noon?

4. When it is  $\frac{3}{4}$  past seven in the morning at Ispahan, where is it noon?

5. When

5. When it is noon at Madras, where is it  $\frac{1}{2}$  past six o'clock in the morning?

6. At sea in latitude  $40^{\circ}$  north, when it was ten o'clock in the morning by the time-piece, which shews the hour at London, it was exactly 9 o'clock in the morning at the ship, by a correct celestial observation. In what part of the ocean was the ship?

7. When it is noon at London, what inhabitants of the earth have midnight?

8. When it is ten o'clock in the morning at London, where is it ten o'clock in the evening.

#### PROBLEM XX.

*To find the sun's longitude (commonly called the sun's place in the ecliptic) and his declinations.*

**RULE.** Look for the given day in the circle of months on the horizon, against which, in the circle of signs, are the sign and degree in which the sun is for that day. Find the same sign and degree in the ecliptic on the surface of the globe; bring the degree of the ecliptic, thus found, to that part of the brass meridian which is numbered from the equator towards the poles, its distance from the equator, reckoned on the brass meridian, is the sun's declination.—*This problem may be performed by the celestial globe, using the same rule.*

#### OR, BY THE ANALEMMA.\*

Bring the analemma to that part of the brass meridian which is numbered from the equator towards the poles, and

---

\* The Analemma is properly an orthographic projection of the sphere on the plane of the meridian; but what is called the Analemma on the globe, is a narrow slip of paper, the length of which is equal to the breadth of the torrid zone. It is pasted on some vacant place on the globe in the torrid zone, and is divided into months, and days of the months, correspondent to the sun's declination for every day in the year. It is divided into two parts; the right hand part begins at the winter solstice, or December 21st, and is reckoned upwards towards the summer solstice, or June 21st, where the left hand part begins, which is reckoned downwards in a similar manner, or towards the winter solstice. On Cary's globes the Analemma somewhat resembles the figure 8. It appears to have been drawn in this shape for the convenience of shewing the equation of time, by means of a straight line which passes through the middle of it. The equation of time is placed on the horizon of Bardin's globes.

the degree on the brass meridian, exactly above the day of the month, is the sun's declination. Turn the globe till a point of the ecliptic, correspondent to the day of the month, passes under the degree of the sun's declination, that point will be the sun's longitude or place for the given day. If the sun's declination be *north*, and increasing, the sun's longitude will be somewhere between Aries and Cancer. If the declination be decreasing, the longitude will be between Cancer and Libra. If the sun's declination be *south*, and increasing, the sun's longitude will be between Libra and Capricorn; if the declination be decreasing, the longitude will be between Capricorn and Aries.

The sun's longitude and declination are given in the *second* page of every month, in the *Nautical Almanac*, for every day in that month; they are likewise given in *White's Ephemeris*, for every day in the year.

**EXAMPLES.** 1. What is the sun's longitude and declination on the 15th of April?

*Answer.* The sun's place is  $26^{\circ}$  in  $\epsilon^{\circ}$ , declination  $10^{\circ}$  N.

2. Required the sun's place and declination for the following days?

January 21.	May 18.	September 9.
February 7.	June 11.	October 16.
March 16.	July 11.	November 17.
April 8.	August 1.	December 1.

#### PROBLEM XXI.

*To place the globe in the same situation, WITH RESPECT TO THE SUN, as our earth is at the EQUINOXES, at the SUMMER SOLSTICE, and at the WINTER SOLSTICE, and thereby to shew the comparative lengths of the longest and shortest days\*.*

1. FOR THE EQUINOXES. Place the two poles of the globe in the horizon; for at this time the sun has no decli-

---

\* In this problem, as in all others where the pole is elevated to the sun's declination, the sun is supposed to be fixed, and the earth to move on its axis from west to east. The author of this work has a little brass ball made to represent the sun; this ball is fixed upon a strong wire, and when used, slides out of a socket like an acromatic telescope. The socket is made to screw to the brass meridian (of any globe) over the sun's declination, and the little brass ball, representing the sun, stands over the declination, at a considerable distance from the globe.

nation, being in the equinoctial in the heavens, which is an imaginary line standing vertically over the equator on the earth. Now, if we suppose the sun to be fixed, at a considerable distance from the globe, vertically over that point of the brass meridian which is marked O, it is evident that the wooden horizon will be the boundary of light and darkness on the globe, and that the upper hemisphere will be enlightened from pole to pole.

Meridians, or lines of longitude, being generally drawn on the globe through every 15 degrees of the equator, the sun will *apparently* pass from one meridian to another in an hour. If you bring the point Aries on the equator to the eastern part of the horizon, the point Libra will be in the western part thereof; and the sun will appear to be setting to the inhabitants of London and to all places under the same meridian: let the globe be now turned gently on its axis towards the east, the sun will appear to move towards the west, and, as the different places successively enter the dark hemisphere, the sun will appear to be setting in the west. Continue the motion of the globe eastward, till London comes to the western edge of the horizon; the moment it emerges above the horizon, the sun will appear to be rising in the east. If the motion of the globe on its axis be continued eastward, the sun will appear to rise higher and higher, and to move towards the west; when London comes to the brass meridian, the sun will appear at its greatest height; and, after London has passed the brass meridian, he will continue his apparent motion westward, and gradually diminish in altitude till London comes to the eastern part of the horizon, when he will again be setting. During this revolution of the earth on its axis, every place on its surface has been twelve hours in the dark hemisphere, and twelve hours in the enlightened hemisphere; consequently the days and nights are equal all over the world; for all the parallels of latitude are divided into two equal parts by the horizon, and in every degree of latitude there are six meridians between the eastern part of the horizon and the brass meridian; each of these meridians answers to one hour, hence half the length of the day is six hours, and the whole length twelve hours.

If any place be brought to the brass meridian, the number of degrees between that place and the horizon (reckoned the nearest way) will be the sun's meridian altitude. Thus, if London be brought to the meridian, the sun will then appear exactly south, and its altitude will be  $38\frac{1}{2}$  degrees; the sun's meridian altitude at Philadelphia will be 50 degrees; his meridian altitude at Quito 90 degrees; and here, as in every place on the equator, as the globe turns on its axis, the sun will be vertical. At the Cape of Good Hope the sun will appear due north at noon, and his altitude will be  $55\frac{1}{2}$  degrees.

2. FOR THE SUMMER SOLSTICE.—The summer solstice, to the inhabitants of north latitude, happens on the 21st of June, when the sun enters Cancer, at which time his declination is  $23^{\circ} 28'$  north. Elevate the north pole  $23^{\circ}$  degrees above the northern point of the horizon, bring the sign of Cancer in the ecliptic to the brass meridian, and over that degree of the brass meridian under which this sign stands, let the sun be supposed to be fixed at a considerable distance from the globe.

While the globe remains in this position, it will be seen that the equator is exactly divided into two equal parts, the equinoctial point Aries being in the western part of the horizon, and the opposite point Libra in the eastern part, and between the horizon and the brass meridian (counting on the equator) there are six meridians, each fifteen degrees, or an hour apart, consequently the day at the equator is twelve hours long. From the equator northward, as far as the Arctic circle, the *diurnal arches* will exceed the *nocturnal arches*; that is, more than one half of any of the parallels of latitude will be above the horizon, and of course less than one half will be below, so that the days are longer than the nights. All the parallels of latitude within the Arctic circle will be wholly above the horizon, consequently those inhabitants will have no night. From the equator southward, as far as the Antarctic circle, the *nocturnal arches* will exceed the *diurnal arches*; that is, more than one half of any one of the parallels of latitude will be below the horizon, and consequently less than one half will be above. All the parallels of latitude within the Antarctic circle will be

be wholly below the horizon, and the inhabitants, if any, will have twilight or dark night.

From a little attention to the parallels of latitude, while the globe remains in this position, it will easily be seen that the arches of those parallels which are above the horizon, north of the equator, are exactly of the same length as those below the horizon, south of the equator; consequently, when the inhabitants of north latitude have the longest day, those in south latitude have the longest night. It will likewise appear, that the arches of those parallels which are above the horizon, south of the equator, are exactly of the same length as those below the horizon, north of the equator; therefore, when the inhabitants who are situated south of the equator have the shortest day, those who live north of the equator have the shortest night.

By counting the number of meridians (supposing them to be drawn through every fifteen degrees of the equator) between the horizon and the brass meridian, on any parallel of latitude, half the length of the day will be determined in that latitude, the double of which is the length of the day.

1. In the parallel of 20 degrees north latitude there are six meridians and two thirds more, hence the longest day is 13 hours and 20 minutes; and, in the parallel of 20 degrees south latitude, there are five meridians and one third, hence the shortest day in that latitude is ten hours and forty minutes.

2. In the parallel of 30 degrees north latitude there are seven meridians between the horizon and the brass meridian, hence the longest day is 14 hours; and in the same degree of south latitude, there are only five meridians, hence the shortest day in that latitude is ten hours.

3. In the parallel of 50 degrees north latitude there are eight meridians between the horizon and the brass meridian; the longest day is therefore sixteen hours; and in the same degree of south latitude there are only four meridians; hence the shortest day is eight hours.

4. In the parallel of 60 degrees north latitude there are  $9\frac{1}{4}$  meridians from the horizon to the brass meridian, hence the longest day is  $18\frac{1}{2}$  hours; and, in the same degree of south latitude there are only  $2\frac{3}{4}$  meridians, the length of the shortest day is therefore  $5\frac{1}{2}$  hours.

By turning the globe gently round on its axis from west to east we shall readily perceive that the sun will be vertical to all the inhabitants under the tropic of Cancer as the places successively pass the brass meridian.

If any place be brought to the brass meridian, the number of degrees between that place and the horizon (reckoned the nearest way) will shew the sun's meridian altitude. Thus, at London, the sun's meridian altitude will be found to be about 62 degrees, at Petersburg  $54\frac{1}{2}$  degrees, at Madrid 73 degrees, &c. To the inhabitants of these places the sun appears due south at noon. At Madras the sun's meridian altitude will be  $79\frac{1}{2}$  degrees, at the Cape of Good Hope 32 degrees, at Cape Horn  $10\frac{1}{2}$  degrees, &c. The sun will appear due north to the inhabitants of these places at noon. If the southern extremity of Spitzbergen, in latitude  $76\frac{1}{2}$  north, be brought to that part of the brass meridian which is numbered from the equator towards the poles, the sun's meridian altitude will be 37 degrees, which is its greatest altitude; and if the globe be turned eastward twelve hours, or till Spitzbergen comes to that part of the brass meridian which is numbered from the pole towards the equator, the sun's altitude will be 10 degrees, which is its least altitude for the day given in the problem. It was shewn, in the foregoing part of the problem, that, when the sun is vertically over the equator in the vernal equinox, the north pole begins to be enlightened, consequently the farther the sun apparently proceeds in its course northward, the more day-light will be diffused over the north polar regions, and the sun will appear gradually to increase in altitude at the north pole, till the 21st of June, when his greatest height is  $23\frac{1}{2}$  degrees; he will then gradually diminish in height till the 23d of September, the time of the autumnal equinox, when he will leave the north pole and proceed towards the south; consequently the sun has been visible at the north pole for six months.

3. FOR THE WINTER SOLSTICE.—The winter solstice, to the inhabitants of north latitude, happens on the 21st of December, when the sun enters Capricorn, at which time his declination is  $23^{\circ} 28'$  south. Elevate the south pole  $23\frac{1}{2}$  degrees

degrees above the southern point of the horizon, bring the sign of Capricorn in the ecliptic to the brass meridian, and over that degree of the brass meridian under which this sign stands let the sun be supposed to be fixed at a considerable distance from the globe.

Here as at the summer solstice, the days at the equator will be twelve hours long, but the equinoctial point Aries will be in the eastern part of the horizon, and Libra in the western. From the equator southward, as far as the Antarctic circle, the *diurnal arches* will exceed the *nocturnal arches*. All the parallels of latitude within the Antarctic circle will be wholly above the horizon. From the equator northward, the *nocturnal arches* will exceed the *diurnal arches*. All the parallels of latitude within the Arctic circle will be wholly below the horizon. The inhabitants south of the equator will now have their longest day, while those on the north of the equator will have their shortest day.

As the globe turns on its axis from west to east, the sun will be vertical successively to all the inhabitants under the tropic of Capricorn. By bringing any place to the brass meridian, and finding the sun's meridian altitude (as in the foregoing part of the problem), the greatest altitudes will be in south latitude, and the least in the north; contrary to what they were before. Thus, at London, the sun's greatest altitude will be only 15 degrees, instead of 62; and his greatest altitude at Cape Horn will now be  $57\frac{1}{2}$  degrees, instead of  $10\frac{1}{2}$ , as at the summer solstice: hence it appears, that the difference between the sun's greatest and least meridian altitude at any place in the temperate zones, is equal to the breadth of the torrid zone, viz. 47 degrees, or more correctly, 46° 56'. On the 23d of September, when the sun enters Libra, that is, at the time of the autumnal equinox, the south pole begins to be enlightened, and, as the sun's declination increases southward, he will shine farther over the south pole, and gradually increase in altitude at the pole; for, at all times, his altitude at either pole is equal to his declination. On the 21st of December the sun will have the greatest south declination, after which his altitude at the south pole will gradually diminish as his declination diminishes; and on the 21st of March, when the sun's de-

clination

clination is nothing, he will appear to skim along the horizon at the south pole, and likewise at the north pole; the sun has therefore been visible at the south pole for six months.

### PROBLEM XXII.

*To place the globe in the same situation, WITH RESPECT TO THE POLAR STAR in the heavens, as our earth is to the inhabitants of the equator, &c. viz. to illustrate the three positions of the sphere, RIGHT, PARALLEL, and OBLIQUE, so as to shew the comparative length of the longest and shortest days\*.*

I. FOR THE RIGHT SPHERE.—The inhabitants who live upon the equator have a right sphere, and the north  
polar

---

\* In this problem, and in all others where the pole is elevated to the latitude of a given place, the earth is supposed to be fixed, and the sun to move round it from east to west. When the given place is brought to the brass meridian, the wooden horizon is the true rational horizon of that place, but it does not separate the enlightened part of the globe from the dark part, as in the preceding problem. Mr. Adam Walker, lecturer in philosophy, in his "Easy Introduction to Geography," disapproves of this method of elevating the pole. He says: Simplicity and perspicuity should ever be studied by those who cultivate the young mind; and jarring, opposing, or equivocal ideas, should be avoided almost as much as error or falsehood. Our globes, till of late years, were equipt with an hour circle, which prevented the poles from sliding through the horizon; hence their rectification was generally for the *place on the earth*, instead of the *sun's place in the ecliptic*; which put the globe in so *unnatural* and *absurd* a position respecting the sun, that young people were confounded when they compared it with the earth's position during its annual rotation round that luminary, and considering the horizon as the boundary of day and night. Being, therefore, sometimes obliged to rectify for the place on the earth, and sometimes for the sun's place in the ecliptic, the two rules clash so unhappily in the pupil's mind, that few remember a single problem a twelvemonth after the end of their tuition." It will certainly be admitted that jarring, opposing, or equivocal ideas, should be avoided, and that perspicuity should be the study of every tutor; but there is nothing either absurd or unnatural in elevating the pole to the latitude of the *place on the earth*; for this is placing the globe in its *true* situation respecting the heavens and the fixed stars: besides, in explaining the principles of dialling, and other problems where the globe is exposed to the sun's rays, the pole *must* be elevated

polar star appears always in (or very near) the horizon. Place the two poles of the globe in the horizon, then the north pole will correspond with the north polar star, and all the heavenly bodies will *appear* to revolve round the earth from east to west, in circles parallel to the equinoctial, according to their different declinations: One half of the starry heavens will be constantly above the horizon, and the other half below, so that the stars will be visible for twelve hours, and invisible for the same space of time; and, in the course of a year, an inhabitant upon the equator may see all the stars in the heavens. The ecliptic being drawn on the terrestrial globe, young students are often led to imagine that the sun apparently moves daily round the earth in the same oblique manner. To correct this false idea, we must suppose the ecliptic to be transferred to the heavens, where it properly points out the sun's apparent annual path amongst the fixed stars. The sun's diurnal path is either over the equator, as at the time of the equinoxes, or in lines nearly parallel to the equator: this may correctly be illustrated by fastening one end of a piece of packthread upon the point Aries on the equator, and winding the packthread round the globe towards the right hand, so that one fold may touch another, till you come to the tropic of Cancer; thus you will have a correct view of the sun's apparent diurnal path from the vernal equinox to the summer solstice; for, after a diurnal revolution, the sun does not come to the same point of the parallel whence it departed, but, according as it approaches to or recedes from the tropic, is a little above or below that point. When the sun is in the equinoctial, he will be vertical to all the inhabitants upon the equator, and

---

elevated to the latitude of the place, as will be shewn in some of the succeeding problems. The pupil who wishes to make himself *completely* master of the globes, must endeavour to comprehend, why he sometimes elevates the pole to the latitude of the place, and at others to the sun's declination. A little perseverance will soon remove all jarring and equivocal ideas from his mind, and, instead of forgetting the problems in a twelve-month, he will remember them as long as he retains his faculties: "What we acquire with difficulty we remember with ease," and nothing but a superficial knowledge of any subject can be obtained without close application and attention.

his apparent diurnal path will be over that line: when the sun has ten degrees of north declination, his apparent diurnal path will be from east to west nearly along that parallel. When the sun has arrived at the tropic of Cancer, his diurnal path in the heavens will be along that line, and he will be vertical to all the inhabitants on the earth in latitude  $23^{\circ} 28'$  north. The inhabitants upon the equator will always have twelve hours day and twelve hours night, notwithstanding the variation of the sun's declination from north to south, or from south to north; because the parallel of latitude which the sun apparently describes for any day will always be cut into two equal parts by the horizon. The greatest meridian altitude of the sun will be  $90^{\circ}$ , and the least  $66^{\circ} 32'$ . During one half of the year, an inhabitant on the equator will see the sun full north at noon, and during the other half it will be full south.

2. FOR THE PARALLEL SPHERE.—The inhabitants (if any) who live at the north pole, have a parallel sphere and the north polar star in the heavens appears exactly (or very nearly), over their heads. Elevate the north pole ninety degrees above the horizon, then the equator will coincide with the horizon, and all the parallels of latitude will be parallel thereto. In the summer half year, that is from the vernal to the autumnal equinox, the sun will appear above the horizon, consequently the stars and planets will be invisible during that period. When the sun enters Aries, on the 21st of March, he will be seen by the inhabitants of the north pole (if there be any inhabitants) to skim just along the edge of the horizon; and, as he increases in declination, he will increase in altitude, forming a kind of spiral, as before described, by wrapping a thread round the globe. The sun's altitude at any particular hour is always equal to his declination. The greatest altitude the sun can have is  $23^{\circ} 28'$ , at which time he has arrived at the tropic of Cancer; after which he will gradually decrease in altitude as his declination decreases. When the sun arrives at the sign Libra, he will again appear to skim along the edge of the horizon, after which he will totally disappear, having been above the horizon for six months. Though the inhabitants at the north pole will lose sight of

the sun a short time after the autumnal equinox, yet the twilight will continue for nearly two months; for the sun will not be  $18^\circ$  below the horizon till he enters the 20th of Scorpio, as may be seen by the globe.

After the sun has descended  $18^\circ$  below the horizon, all the stars in the northern hemisphere will become visible, and appear to have a diurnal revolution round the earth from east to west, as the sun appeared to have when he was above the horizon. These stars will not set during the winter half of the year; and the planets, when they are in any of the northern signs, will be visible. The inhabitants under the north polar star have the moon constantly above their horizon during fourteen revolutions of the earth on its axis, and at every full moon which happens, from the 23d of September to the 21st of March, the moon is in some of the northern signs, and consequently visible at the north pole; for the sun being below the horizon at that time, the moon must be above the horizon, because she is always in that sign which is diametrically opposite to the sun at the time of full moon.

When the sun is at his greatest depression below the horizon, being then in Capricorn, the moon is at her FIRST QUARTER in Aries: FULL in Cancer; and at her THIRD QUARTER in Libra: and as the beginning of Aries is the rising point of the ecliptic, Cancer the highest, and Libra the setting point, the moon rises at her FIRST QUARTER in Aries, is most elevated above the horizon and FULL in Cancer, and sets at the beginning of Libra in her THIRD QUARTER; having been visible for fourteen revolutions of the earth on its axis, viz. during the moon's passage from Aries to Libra. Thus the north pole is supplied one half of the winter time with constant moonlight in the sun's absence; and the inhabitants only lose sight of the moon from her THIRD to her FIRST QUARTER, while she gives but little light, and can be of little or no service to them.

3. FOR THE OBLIQUE SPHERE.—Whenever the terrestrial globe is placed in a proper situation with respect to the fixed stars, the pole must be elevated as many degrees above the horizon as are equal to the latitude of the given place, and the north pole of the globe must point to  
the

the north polar star in the heavens ; for in sailing, or travelling from the equator northward, the north polar star appears to rise higher and higher. On the equator it will appear in the horizon ; in ten degrees of north latitude it will be ten degrees above the horizon ; in twenty degrees of north latitude it will be twenty degrees above the horizon ; and so on, always increasing in altitude as the latitude increases. Every inhabitant of the earth, except those who live upon the equator, or exactly under the north polar star, has an oblique sphere, viz. the equator cuts the horizon obliquely. By elevating and depressing the poles, in several problems, a young student is sometimes led to imagine that the earth's axis moves northward and southward just as the pole is raised or depressed : this is a mistake, the earth's axis has no such motion \*. In travelling from the equator northward, our horizon varies ; thus, when we are on the equator, the northern point of our horizon is exactly opposite the north polar star ; when we have travelled to ten degrees north latitude, the north point of our horizon is ten degrees below the pole, and so on : now, the wooden horizon on the terrestrial globe is immoveable, otherwise it ought to be elevated or depressed, and not the pole ; but whether we elevate the pole ten degrees above the horizon, or depress the north point of the horizon ten degrees below the pole, the appearance will be exactly the same.

The latitude of London is about  $51\frac{1}{2}$  degrees north : if London be brought to the brass meridian, and the north pole be elevated  $51\frac{1}{2}$  degrees above the north point of the wooden horizon, then the wooden horizon will be the true horizon of London ; and, if the artificial globe be placed exactly north and south by a mariner's compass, or by a meridian line, it will have *exactly* the position which the *real globe* has. Now, if we imagine lines to be drawn through every degree † within the torrid zone, parallel to the equator, they will nearly represent the

---

\* The earth's axis has a kind of librating motion, called the *nutation* but this cannot be represented by elevating or depressing the pole.

† Such lines are drawn on Adams' globes.

sun's diurnal path on any given day. By comparing these diurnal paths with each other, they will be found to increase in length from the equator northward, and to decrease in length from the equator southward; consequently, when the sun is north of the equator, the days are increasing in length; and when south of the equator, the days are decreasing. The sun's meridian altitude for any day may be found by counting the number of degrees from the parallel in which the sun is on that day, towards the horizon, upon the brass meridian; thus, when the sun is in that parallel of latitude which is ten degrees north of the equator, his meridian altitude will be  $48\frac{1}{2}$  degrees. Though the wooden horizon be the true horizon of the given place, yet it does not separate the enlightened hemisphere of the globe from the dark hemisphere, when the pole is thus elevated. For instance when the sun is in Aries, and London at the meridian, all the places on the globe above the horizon beyond those meridians which pass through the east and west points thereof, reckoning towards the north, are in darkness, notwithstanding they are above the horizon; and all places below the horizon, between those same meridians and the southern point of the horizon, have day-light, notwithstanding they are below the horizon of London.

### PROBLEM XXIII.

*The month and day of the month being given, to find all places of the earth where the sun is vertical on that day; those places where the sun does not set, and those places where he does not rise on the given day.*

**RULE.** Find the sun's declination (by Problem XX.) for the given day, and mark it on the brass meridian; turn the globe round on its axis from west to east, and all the places which pass under this mark will have the sun vertical on that day.

*Secondly.* Elevate the north or south pole, according as the sun's declination is north or south, so many degrees above the horizon as are equal to the sun's declination; turn the globe on its axis from west to east; then, to those places which do not descend below the horizon, in that frigid

zone

zone near the elevated pole, the sun does not set on the given day : and to those places which do not ascend above the horizon, in that frigid zone adjoining to the depressed pole, the sun does not rise on the given day.

OR, BY THE ANALEMMA.

Bring the analemma to that part of the brass meridian which is numbered from the equator towards the poles, the degree directly above the day of the month, on the brass meridian, is the sun's declination. Elevate the north or south pole, according as the sun's declination is north or south, so many degrees above the horizon as are equal to the sun's declination ; turn the globe on its axis from west to east, then to those places which pass under the sun's declination on the brass meridian the sun will be vertical ; to those places (in that frigid zone near the elevated pole) which do not go below the horizon, the sun does not set ; and to those places (in that frigid zone near the depressed pole) which do not come above the horizon, the sun does not rise on the given day.

EXAMPLES. 1. Find all places of the earth where the sun is vertical on the 11th of May, those places in the north frigid zone where the sun does not set, and those places in the south frigid zone where he does not rise.

*Answer.* The sun is vertical to St. Anthony, one of the Cape Verd islands, the Virgin Islands, south of St. Domingo, Jamaica, Golconda, &c. All places within eighteen degrees of the north pole will have constant day ; and those (if any) within eighteen degrees of the south pole will have constant night.

2. Whether does the sun shine over the north or south pole on the 27th of October, to what places will he be vertical at noon, what inhabitants of the earth will have the sun below their horizon during several revolutions, and to what part of the globe will the sun never set on that day ?

3. Find all the places of the earth where the inhabitants have no shadow when the sun is on their meridian, on the first of June.

4. What inhabitants of the earth have their shadows directed to every point of the compass during a revolution of the earth on its axis on the 15th of July ?

5. How far does the sun shine over the south pole on the 14th of November, what places in the north frigid zone are in perpetual darkness, and to what places is the sun vertical?

6. If the sun be vertical in any place on the 15th of April how many days will elapse before he is vertical a second time at that place?

7. If the sun be vertical at any place on the 20th of August, how many days will elapse before he is vertical a second time at that place?

8. Find all places of the earth where the moon will be vertical on the 15th of May 1808. \*

#### PROBLEM XXIV.

*A place being given in the torrid zone, to find those two days of the year on which the sun will be vertical at that place.*

**RULE.** Bring the given place to that part of the brass meridian which is numbered from the equator towards the poles, and mark its latitude; turn the globe on its axis, and observe what two points of the ecliptic pass under that latitude; seek those points of the ecliptic in the circle of signs on the horizon, and exactly against them, in the circle of months, stand the days required.

OR, BY THE ANALEMMA.

Find the latitude of the given place (by Problem I.), and mark it on the brass meridian; bring the analemma to the brass meridian, upon which, exactly under the latitude, will be found the two days required.

**EXAMPLES.** 1. On what two days of the year will the sun be vertical at Madras.

*Answer.* On the 25th of April and on the 18th of August.

---

\* To perform this example, find the moon's declination on the given day in the Nautical Almanac, or White's Ephemeris, and mark it on the brass meridian, all places passing under that degree of declination will have the moon vertical or nearly so, on the given day. The moon's declination at midnight on the 15th of May 1808 is  $14^{\circ} 34'$  south.

2. On what two days of the year is the sun vertical at the following places :

O'why'hee	St. Helena	Sierra Leone
Friendly Isles	Rio Janeiro	Vera Cruz
Straits of Alafs	Quito	Manilla
Penang	Barbadoes	Tinian Isle
Trincomalé	Porto Bello	Pelew Islands

#### PROBLEM XXV.

*The month and the day of the month being given (at any place not in the frigid zones), to find what other day of the year is of the same length.*

**RULE.** Find the sun's place in the ecliptic for the given day (by Problem XX.), bring it to the brass meridian, and observe the degree above it; turn the globe on its axis till some other point of the ecliptic falls under the same degree of the meridian; find this point of the ecliptic on the horizon, and directly against it you will find the day of the month required.

*This problem may be performed by the celestial globe in the same manner.*

#### OR, BY THE ANALEMMA.

Look for the given day of the month on the analemma, and adjoining to it you will find the required day of the month.

#### OR, WITHOUT A GLOBE.

Any two days of the year which are of the same length, will be an equal number of days from the longest or shortest day. Hence, whatever number of days the given day is before the longest or shortest day, just so many days will the required day be after the longest or shortest day, *et contra*.

**EXAMPLES.** 1. What day of the year is of the same length as the 25th of April?

*Answer.* The 18th of August.

2. What day of the year is of the same length as the 25th of May?

3. If the sun rise at four o'clock in the morning at London on the 17th of July, on what other day of the year will it rise at the same hour?

4. If the sun set at seven o'clock in the evening at London on the 24th of August, on what other day of the year will it set at the same hour?

5. If the sun's meridian altitude be  $90^\circ$  at Trincomalé, in the island of Ceylon, on the 12th of April, on what other day of the year will the meridian altitude be the same?

6. If the sun's meridian altitude at London, on the 25th of April be  $51^\circ 35'$ , on what other day of the year will the meridian altitude be the same?

#### PROBLEM XXVI.

*The month, day, and hour of the day being given, to find where the sun is vertical at that instant.*

**RULE.** Find the sun's declination (by Problem XX.), and mark it on the brass meridian; bring the given place to the brass meridian, and set the index of the hour circle to twelve; then, if the given time be before noon, turn the globe *westward* as many hours as it wants of noon; but, if the given time be past noon, turn the globe *eastward* as many hours as the time is past noon; the place exactly under the degree of the sun's declination will be that sought.

**EXAMPLES.** 1. When it is forty minutes past six o'clock in the morning at London, on the 25th of April, where is the sun vertical?

*Answer.* Here the given time is five hours twenty minutes before noon; hence the globe must be turned towards the *west* till the index has passed over five hours twenty minutes\*, and under the sun's declination on the brass meridian you will find Madras, the place required.

---

\* If the hour circle be not divided to twenty minutes, turn the globe till the index has passed over five hours and a quarter, by turning it a degree and a quarter farther to the west (answering to five minutes of time) the solution will be exact. See the note to the next problem. The degrees must be counted on the equator.

2. When it is four o'clock in the afternoon at London, on the 18th of August, where is the sun vertical?

*Answer.* Here the given time is four hours past noon; hence the globe must be turned towards the east, till the index has passed over four hours; then, under the sun's declination, you will find Barbadoes, the place required.

3. When it is three o'clock in the afternoon at London, on the 4th of January, where is the sun vertical?

4. When it is three o'clock in the morning at London on the 11th of April, where is the sun vertical?

5. When it is thirty-seven minutes past one o'clock in the afternoon at the Cape of Good Hope, on the 5th of February where is the sun vertical?

6. When it is eleven minutes past one o'clock in the afternoon at London, on the 29th of April, where is the sun vertical?

7. When it is twenty minutes past five o'clock in the afternoon at Philadelphia, on the 18th of May, where is the sun vertical?

8. When it is nine o'clock in the morning at Calcutta, on the 11th of April, where the sun is vertical?

#### PROBLEM XXVII.

*The month, day, and hour of the day at any place being given, to find all those places of the earth where the sun is rising, those places where the sun is setting, those places that have noon, that particular place where the sun is vertical, those places that have morning twilight, those places that have evening twilight, and those places that have midnight.*

**RULE.** Find the sun's declination (by Problem XX.) and mark it on the brass meridian; elevate the north or south pole, according as the sun's declination is north or south, so many degrees above the horizon as are equal to the sun's declination; bring the given place to the brass meridian, and set the index of the hour circle to twelve; then, if the given time be before noon, turn the globe westward as many hours as it wants of noon; but, if the given time be past noon, turn the globe eastward as many hours as the time is past noon; keep the globe in this position; then

then all places along the western edge of the horizon have the sun rising; those places along the eastern edge have the sun setting; those under the brass meridian, above the horizon, have noon; that particular place which stands under the sun's declination on the brass meridian has the sun vertical; all places below the western edge of the horizon, within eighteen degrees, have morning twilight; those places which are below the eastern edge of the horizon, within eighteen degrees, have evening twilight; all the places under the brass meridian below the horizon have midnight; all the places above the horizon have day, and those below it have night or twilight.

**EXAMPLES.** When it is fifty-two minutes past four o'clock in the morning at London, on the 5th of March, find all places of the earth where the sun is rising, setting, &c. &c.

*Answer.* The sun's declination will be found to be  $6\frac{1}{4}^{\circ}$  south; therefore, elevate the south pole  $6\frac{1}{4}^{\circ}$  above the horizon. The given time being seven hours eight minutes before noon ( $= 12 \text{ h.} - 4 \text{ h. } 52 \text{ m.}$ ) the globe must be turned towards the *west* till the index has passed over seven hours eight minutes\*. Let the globe be fixed in this position; then,

*The Sun is rising* at the western part of the White Sea, Petersburg, the Morea in Turkey, &c.

*Setting* at the eastern coast of Kamtschatka, Jesus island, Palmerston, Island, &c. between the Friendly and Society Islands.

*Noon* at the lake Baikal in Irkoutsk, Cochm China, Cambodia, Sunda Islands, &c.

*Vertical* at Batavia.

*Morning twilight* at Sweden, part of Germany, the southern part of Italy, Sicily, the western coast of Africa along the Æthiopian Ocean, &c.

*Evening twilight* at the north west extremity of North America, the Sandwich Islands, the Society Islands, &c.

*Midnight* at Labrador, New York, western part of St. Domingo, Chili, and the western coast of South America.

---

\* The hour circles, in general, are not divided into parts less than a quarter of an hour, but the odd minutes are easily reckoned. In this example having turned the globe westward till the index has passed over seven hours, then, because four minutes of time make one degree, reckon *two* degrees on the equator eastward, and turn the globe till they pass under the brass meridian.

*Day* at the eastern part of Russia in Europe, Turkey, Egypt, the Cape of Good Hope, and all the eastern part of Africa, almost the whole of Asia, &c.

*Night* at the whole of North and South America, the western part of Africa, the British Isles, France, Spain, Portugal, &c.

2. When it is four o'clock in the afternoon at London, on the 25th of April, where is the sun rising, setting, &c. &c.

*Answer.* The sun's declination being  $13^{\circ}$  north, the north pole must be elevated  $13^{\circ}$  above the horizon; and, as the given time is four o'clock in the afternoon, the globe must be turned four hours towards the east; then the sun will be rising at O'why'hee, &c. setting at the Cape of Good Hope, &c. it will be noon at Buenos Ayres, &c.; the sun will be vertical at Barbadoes; and, following the directions in the problem, all the other places are readily found.

3. When it is ten o'clock in the morning at London, on the longest day, to what countries is the sun rising, setting, &c. &c.

4. When it is ten o'clock in the afternoon at Botany Bay, on the 15th of October, where is the sun rising, setting, &c. &c.

5. When it is seven o'clock in the morning at Washington, on the 17th of February, where is the sun rising, setting, &c. &c.

6. When it is midnight at the Cape of Good Hope on the 27th of July, where is the sun rising, setting, &c. &c.

### PROBLEM XXVIII.

*To find the time of the sun's rising and setting, and the length of the day and night at any place.*

**RULE.** Find the sun's declination (by Problem XX.), and elevate the north or south pole, according as the declination is north or south, so many degrees above the horizon as are equal to the sun's declination; bring the given place to the brass meridian, and set the index of the hour circle to twelve; turn the globe eastward till the given place comes to the eastern semi-circle of the horizon, and the number of hours passed over by the index will be the time of the sun's setting: deduct these hours from twelve, and you have the time of the sun's rising; because the sun rises as  
many

many hours before twelve as it sets after twelve. Double the time of the sun's setting gives the length of the day, and double the time of rising gives the length of the night.

By the same rule, the length of the *longest* day, at all places not in the frigid zones, may be readily found; for the longest day at all places in north latitude is on the 21st of June, or when the sun enters Cancer; and the longest day at all places in south latitude is on the 21st of December or when the sun enters the sign Capricorn.

OR,

Find the latitude of the given place, and elevate the north or south pole, according as the latitude is north or south, so many degrees above the horizon as are equal to the latitude; find the sun's place in the ecliptic (by Problem XX), bring it to the brass meridian, and set the index of the hour circle to twelve; turn the globe *westward* till the sun's place comes to the western semi-circle of the horizon, and the number of hours passed over by the index will be the time of the sun's setting; and these hours taken from twelve will give the time of rising; then, as before, double the time of setting gives the length of the day, and double the time of rising gives the length of the night.

OR, BY THE ANALEMMA.

Find the latitude of the given place, and elevate the north or south pole, according as the latitude is north or south, the same number of degrees above the horizon; bring the middle of the analemma to the brass meridian, and set the index of the hour circle to twelve; turn the globe *westward* till the day of the month, on the analemma comes to the western semi-circle of the horizon, and the number of hours passed over by the index will be the time of the sun's setting, &c. as above.

EXAMPLES. I. What time does the sun rise and set at London on the 17th of July, and what is the length of the day and night?

*Answer.* The sun sets at 8 and rises at  $(12 - 8 =) 4$ ; the length of the day is 16 hours, and the length of the night 8. The learner will readily perceive that, if the time at which the sun rises be given, the time at which it sets, together with the length of the day and night, may be found without a globe; if the length of the day be given, the length of the

the night, and the time the sun rises and sets may be found; if the length of the night be given, the length of the day and the time the sun rises and sets are easily known,

2. At what time does the sun rise and set at the following places, on the respective days mentioned, and what is the length of the day and night?

London, 17th of May?	Cape of Good Hope, 7 Dec.?
Gibraltar, 22d of July.?	Cape Horn, 29th January?
Edinburgh, 29th January?	Washington, 15 December?
Botany Bay, 20th February?	Petersburg, 24th October?
Pekin, 20th of April?	Constantinople, 18 August?

3. Find the time the sun rises and sets at every place on the surface of the globe on the 21st of March, and likewise on the 23d of September.

4. Required the length of the longest day and shortest night at the following places:

London	Paris	Pekin
Petersburg	Vienna	Cape Horn
Aberdeen	Berlin	Washington
Dublin	Buenos Ayres	Cape of Good Hope
Glasgow	Botany Bay	Copenhagen

5. Required the lengths of the shortest day and longest night at the following places:

London	Lima	Paris
Archangel	Mexico	O'why'hee
O Taheitee	St. Helena	Lisbon
Quebec	Alexandria	Falkland Islands

6. How much longer is the 21st of June at Petersburg than at Alexandria

7. How much longer is the 21st of December at Alexandria than at Petersburg?

8. At what time does the sun rise and set at Spitzbergen on the 5th of April.

## PROBLEM XXIX.

*The length of the day at any place being given, to find the sun's declination, and the day of the month.*

**RULE.** Bring the given place to the brass meridian, and set the index to twelve; turn the globe eastward till the index has passed over as many hours as are equal to half the length of the day; keep the globe from revolving on its axis, and elevate or depress one of the poles till the given place exactly coincides with the eastern semi-circle of the horizon; the distance of the elevated pole from the horizon will be the sun's declination: mark the sun's declination, thus found, on the brass meridian; turn the globe on its axis, and observe what two points of the ecliptic pass under this mark; seek those points in the circle of signs on the horizon, and exactly against them, in the circle of months, stand the days of the months required.

OR,

Bring the meridian passing through Libra\* to coincide with the brass meridian, elevate the pole to the latitude of the place, and set the index of the hour circle to twelve; turn the globe eastward till the index has passed over as many hours as are equal to half the length of the day, and mark where the meridian, passing through Libra, is cut by the eastern semi-circle of the horizon; bring this mark to the brass meridian †, and the degree above it is the sun's declination; with which proceed as above.

OR, BY THE ANALEMMA.

Bring the middle of the analemma to the brass meridian, elevate the pole to the latitude of the place, and set the in-

\* Any meridian will answer the purpose, and the globe may be turned either eastward or westward; but it is the most convenient to turn it eastward because the brass meridian is graduated on the east side.

† If Adams' globes be used, the meridian passing through Libra is graduated like the brass meridian, and the declination is found at once.

dex of the hour circle to twelve ; turn the globe eastward till the index has passed over as many hours as are equal to half the length of the day ; the two days, on the analemma, which are cut by the eastern semi-circle of the horizon, will be the days required ; and, by bringing the analemma to the brass meridian, the sun's declination will stand exactly above these days.

EXAMPLES. 1. What two days in the year are each sixteen hours long at London, and what is the sun's declination ?

*Answer.* The 24th of May and the 17th of July. The sun's declination is about  $21^{\circ}$  north.

2. What two days of the year are each fourteen hours long at London ?

3. On what two days of the year does the sun set at half past seven o'clock at Edinburgh ?

4. On what two days of the year does the sun rise at four o'clock at Petersburg ?

5. What two nights of the year are each ten hours long at Copenhagen ?

6. What day of the year at London is sixteen hours and a half long ?

### PROBLEM XXX.

*To find the length of the longest day at any place in the north\* frigid zone.*

RULE. Bring the given place to the northern point of the horizon (by elevating or depressing the pole), and observe its distance from the north pole on the brass meridian ; count the same number of degrees on the brass meridian from the equator towards the north pole, and mark the place where the reckoning ends ; turn the globe on its axis, and observe what two points of the ecliptic pass under the

---

\* The south frigid zone being uninhabited (at least we know of no inhabitants) the problem is not applied to that zone ; however, the rule is general, reading south for north, and 21st of December for the 21st of June.

above mark ; find those points of the ecliptic in the circle of signs on the horizon, and exactly against them, in the circle of months, you will find the days on which the longest day begins and ends. The day preceding the 21st of June is that on which the longest day begins at the given place, and the day following the 21st of June is that on which the longest day ends : the space of time between these days is the length of the longest day.

OR, BY THE ANALEMMA.

Bring the given place to that part of the brass meridian which is numbered from the north pole towards the equator, and observe its distance in degrees from the pole ; count the same number of degrees on the brass meridian from the equator towards the north pole, and mark where the reckoning ends ; bring the analemma to the brass meridian, and the two days which stand under the above mark will point out the beginning and end of the longest day.

EXAMPLES. 1. What is the length of the longest day at the North Cape, in the island of Maggeroe, in latitude  $71^{\circ} 30'$  north ?

*Answer.* The place is  $18\frac{1}{2}^{\circ}$  from the pole ; the longest day begins on the 14th of May, and ends on the 30th of July ; the day is therefore seventy-seven days long, that is, the sun does not set during seventy-seven revolutions of the earth on its axis.

2. What is the length of the longest day in the north of Spitzbergen, and on what days does it begin and end ?

3. What is the length of the longest day at the northern extremity of Nova Zembla ?

4. What is the length of the longest day at the north pole, and on what days does it begin and end ?

## PROBLEM XXXI.

*To find the length of the longest night at any place in the north\* frigid zone.*

**RULE.** Bring the given place to the northern point of the horizon (by elevating or depressing the pole), and observe its distance from the north pole on the brass meridian; count the same number of degrees on the brass meridian from the equator towards the south pole, and mark the place where the reckoning ends; turn the globe on its axis, and observe what two points of the ecliptic pass under the above mark; find those points of the ecliptic in the circle of signs in the horizon, and exactly against them, in the circle of months, you will find the days on which the longest night begins and ends. The day preceding the 21st of December is that on which the longest night begins at the given place, and the day following the 21st of December is that on which the longest night ends: the space of time between these days is the length of the longest night.

## OR, BY THE ANALEMMA.

Bring the given place to that part of the brass meridian which is numbered from the north pole towards the equator, and observe its distance in degrees from the pole; count the same number of degrees on the brass meridian from the equator towards the south pole, and mark where the reckoning ends; bring the analemma to the brass meridian, and the two days which stand under the above mark will point out the beginning and end of the longest night.

**EXAMPLES.** 1. What is the length of the longest night at the North Cape, in the island of Maggeroe, in latitude  $71^{\circ} 30'$  north?

*Answer.* The place is  $18\frac{1}{2}^{\circ}$  from the pole; the longest night begins on the 16th of November, and ends on the 27th of January: the night is therefore seventy-three days long, that is, the sun does not rise during seventy-three revolutions of the earth on its axis.

---

\* This problem is equally applicable to any place in the south frigid zone, and the rule will be general by reading south for north, and the contrary; likewise, instead of the 21st of December read the 21st of June.

2. What is the length of the longest night at the north of Spitzbergen?

3. The Dutch wintered in Nova Zembla, latitude 76 degrees north, in the year 1596: on what day of the month did they lose sight of the sun; on what day of the month did he appear again; and how many days were they deprived of his appearance, setting aside the effect of refraction?

4. For how many days are the inhabitants of the northernmost extremity of Russia deprived of a sight of the sun?

### PROBLEM XXXII.

*To find the number of days which the sun rises and sets at any place in the north \* frigid zone.*

RULE. Bring the given place to the northern point of the horizon (by elevating or depressing the pole), and observe its distance from the north pole on the brass meridian; count the same number of degrees on the brass meridian from the equator towards the poles northward and southward, and make marks where the reckoning ends; observe what two points of the ecliptic, nearest to Aries, pass under the above marks; these points will shew (upon the horizon) the end of the longest night and the beginning of the longest day; during the time between these days the sun will rise and set every twenty-four hours: next observe what two points of the ecliptic, nearest to Libra, pass under the marks on the brass meridian; find these points, as before, in the circle of signs, and against them you will find the day on which the longest day ends at the given place, and the day on which the longest night begins; during the time between these days the sun will rise and set every twenty-four hours.

OR,

Find the length of the longest day at the given place (by Prob. XXX.), and the length of the longest night (by

---

\* The same might be found for a place in the south frigid zone, where that zone inhabited.

Problem XXXI.), add these together, and subtract the sum from 365 days, the length of the year, the remainder will shew the number of days which the sun rises and sets at that place.

OR, BY THE ANALEMMA.

Find how many degrees the given place is from the north pole, and mark those degrees upon the brass meridian on both sides of the equator; observe what four days on the analemma stand under the marks on the brass meridian; the time between those two days on the left hand part of the analemma (reckoning towards the north pole) will be the number of days on which the sun rises and sets, between the end of the longest night and the beginning of the longest day; and the time between the two days on the right hand part of the analemma (reckoning towards the south pole) will be the number of days on which the sun rises and sets, between the end of the longest day and the beginning of the longest night.

EXAMPLES. 1. How many days in the year does the sun rise and set at the north Cape, in the island of Maggeroe, in latitude  $71^{\circ} 30'$  north?

*Answer.* The place is  $18\frac{1}{2}^{\circ}$  from the pole, the two points in the ecliptic, nearest to Aries, which pass under  $18\frac{1}{2}^{\circ}$  on the brass meridian, are  $8^{\circ}$  in  $\alpha$ , answering to the 27th of January, and  $24^{\circ}$  in  $\gamma$ , answering to the 14th of May. Hence the sun rises and sets for 107 days, viz. from the end of the longest night, which happens on the 27th of January, to the beginning of the longest day, which happens on the 14th of May. Secondly, the two points in the ecliptic, nearest to Libra, which pass under  $18\frac{1}{2}^{\circ}$  on the brass meridian, are  $8^{\circ}$  in  $\omega$ , answering to the 30th of July, and  $24^{\circ}$  in  $\nu$ , answering to the 15th of November. Hence the sun rises and sets for 108 days, viz. from the end of the longest day, which happens on the 30th of July, to the beginning of the longest night, which happens on the 15th of November; so that the whole time of the sun's rising and setting is 215 days.

OR, THUS:

The length of the longest day, by Example 1st, Prob. XXX. is 77 days, the length of the longest night, by Example 1st, Prob. XXXI. is 73 days; the sum of these is 150, which deducted from 365, leaves 215 days as above.

2. How many days in the year does the sun rise and set at the north of Spitzbergen?
3. How many days does the sun rise and set at Greenland, in latitude  $75^{\circ}$  north?
4. How many days does the sun rise and set at the northern extremity of Russia in Asia?

PROBLEM XXXIII.

To find in what degree of north latitude, on any day between the 21st of March and the 21st of June, or in what degree of south latitude, on any day between the 23d of September and the 21st of December, the sun begins to shine constantly without setting; and also in what latitude in the opposite hemisphere he begins to be totally absent.

RULE. Find the sun's declination (by Prob. XX.), and count the same number of degrees from the north pole towards the equator, if the declination be north, or from the south pole, if it be south, and mark the point where the reckoning ends; turn the globe on its axis, and all places passing under this mark are those in which the sun begins to shine constantly without setting at that time: the same number of degrees from the contrary pole will point out all the places where twilight or total darkness begins.

EXAMPLES. 1. In what latitude north, and at what places, does the sun begin to shine without setting during several revolutions of the earth on its axis, on the 14th of May?

Answer. The sun's declination is  $18\frac{1}{2}^{\circ}$  north, therefore all places in latitude  $71\frac{1}{2}^{\circ}$  north will be the places sought, viz. the north Cape in Lapland, the southern part of Nova Zembla, Icy Cape, &c.

2. In what attitude south does the sun begin to shine without setting on the 18th of October, and in what latitude north does he begins to be totally absent?

Answer. The sun's declination is  $10^{\circ}$  south, therefore he begins to shine constantly in latitude  $80^{\circ}$  south where there are no inhabitants known, and to be totally absent in latitude  $80^{\circ}$  north, viz. at Spitzbergen.

3. In what latitude does the sun begin to shine without setting on the 20th of April?

4. In what latitude north does the sun begin to shine without setting on the 1st of June, and in what degree of south latitude does it begin to be totally absent?

### PROBLEM XXXIV.

*Any number of days, not exceeding 182, being given, to find the parallel of north latitude in which the sun does not set for that time.*

**RULE.** Count half the number of days from the 21st of June on the horizon, eastward or westward, and opposite the last day you will find the sun's place in the circle of signs; look for the sign and degree on the ecliptic, which bring to the brass meridian, and observe the sun's declination; reckon the same number of degrees from the north pole (on that part of the brass meridian which is numbered from the equator towards the poles) and you will have the latitude sought.

**EXAMPLES.** 1. In what degree of north latitude, and at what places, does the sun continue above the horizon for seventy-seven days?

*Answer.* Half the number of days is  $38\frac{1}{2}$ , and, if reckoned backward, or towards the east, from the 21st of June, will answer to the 14th of May; and if counted forward, or towards the west, will answer to the 30th of July; on either of which days the sun's declination is  $18\frac{1}{2}$  degrees north, consequently the places sought are  $18\frac{1}{2}$  degrees from the north pole or in latitude  $71\frac{1}{2}$  degrees north; answering to the North Cape in Lapland, the south part of Nova Zembla, Icy Cape, &c.

2. In what degree of north latitude is the longest day 134 days, or 3216 hours in length?

3. In what degree of north latitude does the sun continue above the horizon for 2160 hours?

4. In what degree of north latitude does the sun continue above the horizon for 1152 hours?

## PROBLEM XXXV.

*To find the beginning, end, and duration of twilight at any place, on any given day.*

RULE. Find the sun's declination for the given day (by Problem XX.), and elevate the north or south pole, according as the declination is north or south, so many degrees above the horizon as are equal to the sun's declination; screw the quadrant of altitude on the brass meridian, over the degree of the sun's declination; bring the given place to the brass meridian, and set the index of the hour circle to twelve: turn the globe eastward till the given place comes to the horizon, and the hours passed over by the index will shew the time of the sun's setting, or the beginning of evening twilight: continue the motion of the globe eastward, till the given place coincides with  $18^{\circ}$  on the quadrant of altitude below \* the horizon, the time passed over by the index of the hour circle, from the time of the sun's setting, will be the duration of evening twilight. The morning twilight is the same length.

OR, THUS:

Elevate the north or south pole, according as the latitude of the given place is north or south, so many degrees above the horizon as are equal to the latitude; find the sun's place in the ecliptic, bring it to the brass meridian, set the index of the hour circle to twelve, and screw the quadrant of altitude upon the brass meridian over the given latitude; turn the globe westward on its axis till the sun's place comes to the western edge of the horizon, and the hours passed over by the index will shew the time of the sun's setting, or the beginning of evening twilight; continue the motion of the globe westward till the sun's place coincides with  $18^{\circ}$  on the quadrant of altitude below the horizon, the time passed over by the index of the hour circle, from the time

---

\* The quadrant of altitude belonging to our modern globes is always graduated to  $18$  degrees below the horizon.

of the sun's setting, will be the duration of evening twilight.

OR, BY THE ANALEMMA.

Elevate the pole to the latitude of the place, as above, and screw the quadrant of altitude upon the brass meridian over the degree of latitude; bring the middle of the analemma to the brass meridian, and set the index of the hour circle to twelve; turn the globe westward till the given day of the month, on the analemma, comes to the western edge of the horizon, and the hours passed over by the index will shew the time of the sun's setting, or the beginning of evening twilight: continue the motion of the globe westward till the given day of the month coincides with  $18^{\circ}$  on the quadrant below the horizon, the time passed over by the index, from the time of the sun's setting, will be the duration of evening twilight.

EXAMPLES. 1. Required the beginning, end, and duration of morning and evening twilight at London, on the 19th of April?

*Answer.* The sun sets at two minutes past seven, and rises at fifty-eight minutes past four: the duration of twilight is two hours and seventeen minutes; consequently, evening twilight ends at nineteen minutes past nine, and morning twilight begins, or day breaks, at forty one minutes past two.

2. What is the duration of twilight at London on the 23d of September, what time does dark night begin, and at what time does day break in the morning?

*Answer.* The sun sets at six o'clock, and the duration of twilight is two hours; consequently the evening twilight ends at eight o'clock, and the morning twilight begins at four.

3. Required the beginning, end, and duration of morning and evening twilight at London, on the 25th of August?

4. Required the beginning, end, and duration of morning and evening twilight at Edinburgh, on the 20th of February?

5. Required the beginning, end, and duration of morning and evening twilight at Cape Horn, on the 20th of February?

6. Required the beginning, end, and duration of morning and evening twilight at Madras, on the 15th of June ?

### PROBLEM XXXVI.

*To find the beginning, end, and duration of constant day or twilight at any place.*

**RULE.** Find the latitude of the given place, and add  $18^\circ$  to that latitude ; count the number of degrees correspondent to the sum, on that part of the brass meridian which is numbered from the pole towards the equator, mark where the reckoning ends, and observe what two points of the ecliptic pass under the mark \* ; that point wherein the sun's declination is increasing will shew on the horizon the beginning of constant twilight ; and that point wherein the sun's declination is decreasing, will shew the end of constant twilight.

**EXAMPLES.** 1. When do we begin to have constant day or twilight at London, and how long does it continue ?

*Answer.* The latitude of London is  $51\frac{1}{2}$  degrees north to which add 18 degrees, the sum is  $69\frac{1}{2}$ , the two points of the ecliptic which pass under  $69\frac{1}{2}$  are two degrees in  $\Pi$ , answering to the 22d of May, and 29 degrees in  $\sigma$ , answering to the 21st of July ; so that, from the 22d of May to the 21st of July, the sun never descends 18 degrees below the horizon of London.

2. When do the inhabitants of the Shetland islands cease to have constant day or twilight ?

3. Can twilight ever continue from sun-set to sun-rise at Madrid ?

4. When does constant day or twilight begin at Spitzbergen ?

5. What is the duration of constant day or twilight at the North Cape in Lapland, and on what day, after their

---

\* If, after 18 degrees be added to the latitude, the distance from the pole will not reach the ecliptic, there will be no constant twilight at the given place : viz. to the given latitude add 18 degrees, and subtract the sum from 90, if the remainder exceed  $23\frac{1}{2}$  degrees, there can be no constant twilight at the given place.

long winter's night, does the sun's rays first enter the atmosphere.

### PROBLEM XXXVII.

*To find the duration of twilight at the north pole.*

**RULE.** Elevate the north pole so that the equator may coincide with the horizon; observe what point of the ecliptic, nearest to Libra, passes under  $18^{\circ}$  below the horizon, reckoned on the brass meridian, and find the day of the month correspondent thereto; the time elapsed from the 23d of September to this time will be the duration of evening twilight. Secondly, observe what point of the ecliptic, nearest to Aries, passes under  $18^{\circ}$  below the horizon, reckoned on the brass meridian, and find the day of the month correspondent thereto; the time elapsed from that day to the 21st of March will be the duration of morning twilight.

**EXAMPLE.** What is the duration of twilight at the north pole, and what is the duration of dark night there?

*Answer.* The point of the ecliptic nearest to Libra which passes under  $18^{\circ}$  degrees below the horizon, is  $22^{\circ}$  degrees in  $\eta$ , answering to the 13th of November; hence the evening twilight continues from the 23d of September (the end of the longest day) to the 13th of November (the beginning of dark night) being 51 days. The point of the ecliptic nearest to Aries which passed under  $18^{\circ}$  degrees below the horizon is  $9^{\circ}$  degrees in  $\gamma$ , answering to the 29th of January; hence the morning twilight continues from the 29th of January to the 21st of March (the beginning of the longest day) being fifty-one days. From the 23d of September to the 21st of March are 179 days, from which deduct  $102 (= 51 \times 2)$ , the remainder is 77 days, the duration of total darkness at the north pole; but, even during this short period, the moon and the Aurora Borealis shine with uncommon splendour.

### PROBLEM XXXVIII.

*To find in what climate any given place on the globe is situated.*

**RULE.** 1. If the place be not in the frigid zones, find the length of the longest day at that place (by Problem XXVIII. and subtract twelve hours therefrom; the number of half hours in the remainder will shew the climate.

7. If the place be in the frigid zone \*, find the length of the longest day at that place (by Problem XXX), and if that be less than thirty days, the place is in the twenty-fifth climate, or the *first* within the polar circle. If more than thirty and less than sixty, it is in the twenty-sixth climate, or the *second* within the polar circle; if more than sixty, and less than ninety, it is in the twenty-seventh climate, or the *third* within the polar circle, &c.

EXAMPLES. 1. In what climate is London, and what other remarkable places are situated in the same climate?

*Answer.* The longest day at London is  $16\frac{1}{2}$  hours if we deduct 12 therefrom, the remainder will be  $4\frac{1}{2}$  hours, or nine half hours; hence London is in the 9th climate north of the equator; and, as all places in or near the same latitude are in the same climate, we shall find Amsterdam, Dreiden, Warsaw, Irkoutsk, the southern part of the peninsula of Kamtschatka, Nootka Sound, the south of Hudson's Bay, the north of Newfoundland, &c. to be in the same climate as London — The learner is requested to turn to the note to Definition 69th, at pages 16 and 17.

2. In what climate is the North Cape in the island of Maggeroe, latitude  $71^{\circ} 30'$  north.

*Answer.* The length of the longest day is 77 days; these days divided by 30, give two months for the quotient, and a remainder of 17 days; hence the place is in the *third* climate within the polar circle, or the 27th climate reckoning from the equator. The southern part of Nova Zembla, the northern part of Siberia, James' island, Baffin's Bay, the northern part of Greenland, &c. are in the same climate.

---

\* The climates between the polar circles and the poles were unknown to the ancient geographers; they reckoned only seven climates north of the equator. The middle of the first northern climate they made to pass through *Meroe*, a city of Ethiopia, built by Cambyfes on an island in the Nile, nearly under the tropic of Cancer; the second through *Syene*, a city of Thebais in upper Egypt, near the cataracts of the Nile; the third through *Alexandria*; the fourth through *Rhodes*; the fifth through *Rome* or the *Hellepont*; the sixth through the mouth of the *Borysthenes* or *Dnieper*, and the seventh through the *Riphaean mountains*, supposed to be situated near the source of the Tanais or Don river. The southern parts of the earth being in a great measure unknown, the climates received their names from the northern ones, and not from particular towns or places. Thus the climate which was supposed to be at the same distance from the equator southward, as *Meroe* was northward, was called *Antidiames*, or the opposite climate to *Meroe*; *Antidiasyenes*, was the opposite climate to *Syenes*, &c.

3. In

3. In what climate is Edinburgh, and what other places are situated in the same climate ?
4. In what climate is the north of Spitzbergen ?
5. In what climate is Cape Horn ?
6. In what climate is Botany Bay, and what other places are situated in the same climate ?

### PROBLEM XXXIX.

*To find the breadths of the several climates between the equator and the polar circles.*

**RULE.** For the northern climates. Elevate the north pole  $23\frac{1}{2}^{\circ}$  above the northern point of the horizon, bring the sign Cancer to the meridian, and set the index to twelve ; turn the globe eastward on its axis till the index has passed over a quarter of an hour ; observe that particular point of the meridian passing through Libra, which is cut by the horizon, and at the point of intersection make a mark with a pencil ; continue the motion of the globe eastward till the index has passed over another quarter of an hour, and make a second mark ; proceed thus till the meridian passing through Libra \* will no longer cut the horizon ; the several marks brought to the brass meridian will point out the latitude where each climate ends †.

**EXAMPLES.** 1. What is the breadth of the ninth north climate, and what places are situated within it ?

*Answer.* The breadth of the 9th climate is  $2^{\circ} 57'$ , it begins in latitude  $49^{\circ} 2'$  north, and ends in latitude  $51^{\circ} 59'$  north, and all places situated within this space are in the same climate. The places will be nearly the same as those enumerated in the first example to the preceding problem.

2. What is the breadth of the second climate, and in what latitude does it begin and end ?

---

\* On Adams' globes, the meridian passing through Libra is divided into degrees, in the same manner as the brass meridian is divided ; the horizon will, therefore, cut this meridian in the several degrees answering to the end of each climate, without the trouble of bringing it to the brass meridian, or marking the globe.

† See a Table of the climates, with the method of constructing it, at pages 17 and 18.

3. Required the beginning, end, and breadth of the fifth climate ?

4. What is the breadth of the seventh climate north of the equator, in what latitude does it begin and end, and what places are situated within it ?

### PROBLEM XL.

*To find that part of the equation of time which depends on the obliquity of the ecliptic.*

**RULE.** Find the sun's place in the ecliptic, and bring it to the brass meridian ; count the number of degrees from Aries to the brass meridian, on the equator and on the ecliptic ; the difference, reckoning four minutes of time to a degree, is the equation of time. If the number of degrees on the ecliptic exceed those on the equator, the sun is faster than the clock ; but, if the number of degrees on the equator exceed those on the ecliptic, the sun is slower than the clock.

*Note.* The equation of time, or difference between the time shewn by a well-regulated clock, and a true sun-dial, depends upon two causes; viz. the obliquity of the ecliptic, and the unequal motion of the earth in its orbit. The former of these causes may be explained by the above problem. If two suns were to set off at the same time from the point Aries, and move over equal spaces in equal time, the one on the ecliptic, the other on the equator, it is evident they would never come to the meridian together, except at the time of the equinoxes, and on the longest and shortest days. The annexed Table shews how much the sun is faster or slower than the clock ought to be, so far as the variation depends on the obliquity of the ecliptic only. The signs of the first and third quadrants of the ecliptic are at the top of the table, and the degrees in these signs on the left hand; in any of these signs the sun is faster than the clock. The signs of the second and third quadrants are at the bottom of the table, and the degrees in these signs at the right hand; in any of these signs the sun is slower than the clock.

Thus, when the sun is in 20 degrees of  $\gamma$  or  $\mu$ , it is 9 minutes 50 seconds faster than the clock, and, when the sun is in 18 degrees of  $\tau$  or  $\nu$ , it is 6 minutes 2 seconds slower than the clock.

SUN faster than the CLOCK in				
Degrees.	$\gamma$	$\delta$	$\epsilon$	1 Qu.
	$\mu$	$\nu$	$\xi$	3 Qu.
	M. S.	M. S.	M. S.	
0	0 0	8 24	8 46	30
1	0 20	8 35	8 36	29
2	0 40	8 45	8 25	28
3	1 0	8 54	8 14	27
4	1 19	9 3	8 1	26
5	1 39	9 11	7 49	25
6	1 59	9 18	7 35	24
7	2 18	9 24	7 21	23
8	2 37	9 31	7 6	22
9	2 56	9 36	6 51	21
10	3 16	9 41	6 35	20
11	3 34	9 45	6 19	19
12	3 53	9 49	6 2	18
13	4 11	9 51	5 45	17
14	4 29	9 53	5 27	16
15	4 47	9 54	5 9	15
16	5 4	9 55	4 50	14
17	5 21	9 55	4 31	13
18	5 38	9 54	4 12	12
19	5 54	9 52	3 52	11
20	6 10	9 50	3 32	10
21	6 26	9 47	3 12	9
22	6 41	9 43	2 51	8
23	6 55	9 38	2 30	7
24	7 9	9 33	2 9	6
25	7 23	9 27	1 48	5
26	7 36	9 20	1 27	4
27	7 49	9 13	1 5	3
28	8 1	9 5	0 43	2
29	8 13	8 56	0 22	1
30	8 24	8 46	0 0	0
2 Qu	$\mu$	$\nu$	$\xi$	Deg.
4 Qu	$\kappa$	$\omega$	$\psi$	

SUN slower than the CLOCK in

EXAMPLES. 1. What is the equation of time on the 17th of July?

*Answer.* The degrees on the equator exceed the degrees on the ecliptic by two; hence the sun is eight minutes slower than the clock\*.

2. On what four days of the year is the equation of time nothing?

3. What is the equation of time dependant on the obliquity of the ecliptic on the 27th of October?

4. When the sun is  $18^\circ$  of Aries, what is the equation of time?

### PROBLEM XLI.

*To find the sun's meridian altitude at any time of the year at any given place.*

RULE. Find the sun's declination, and elevate the pole to that declination; bring the given place to the brass meridian, and count the number of degrees between it and the horizon; these degrees will shew the sun's meridian altitude †.

OR :

Elevate the pole so many degrees above the horizon as are equal to the latitude of the place; find the sun's place in the ecliptic, and bring it to that part of the brass meridian which is numbered from the equator towards the poles; count the number of degrees contained on the brass meridian between the sun's place and the horizon, and they will shew the altitude ‡.

OR, BY THE ANALEMMA.

Elevate the pole so many degrees above the horizon as are equal to the latitude of the place; find the day of the

---

\* The learner will observe, that the equation of time here determined, is not the true equation, as noted on the 7th circle on the horizon of Bardin's globes; the equation of time there given cannot be determined by the globe.

† See Problem XXI.

‡ See Problem XXII.

month on the analemma, and bring it to that part of the brass meridian which is numbered from the equator towards the poles; count the number of degrees contained on the brass meridian between the given day of the month and the horizon, and they will shew the altitude,

EXAMPLES. 1. What is the sun's meridian altitude at London on the 21st of June?

*Answer.* 62 degrees.

2. What is the sun's meridian altitude at London on the 21st of March?

3. What is the sun's least meridian altitude at London?

4. What is the sun's greatest meridian altitude at Cape Horn?

5. What is the sun's meridian altitude at Madras on the 20th of June?

6. What is the sun's meridian altitude at Bencoolen on the 15th of January?

#### PROBLEM XLII.

*When it is midnight at any place in the temperate or torrid zones, to find the sun's altitude at any place (on the same meridian) in the north frigid zone, where the sun does not descend below the horizon.*

RULE. Find the sun's declination for the given day, and elevate the pole to that declination; bring the place (in the frigid zone) to that part of the brass meridian which is numbered from the north pole towards the equator, and the number of degrees between it and the horizon will be the sun's altitude.

OR,

Elevate the north pole so many degrees above the horizon as are equal to the latitude of the place in the frigid zone; bring the sun's place in the ecliptic to the brass meridian, and set the index of the hour circle to twelve; turn the globe on its axis till the index points to the other twelve; and the number of degrees between the sun's place and the horizon, counted on the brass meridian toward

L 6

that

that part of the horizon marked north, will be the sun's altitude.

EXAMPLES. 1. What is the sun's altitude at the North Cape in Lapland, when it is midnight at Alexandria in Egypt on the 21<sup>st</sup> of June?

*Answer.* 5 degrees.

2. When it is midnight to the inhabitants of the island of Sicily on the 22<sup>d</sup> of May, what is the sun's altitude at the north of Spitzbergen, in latitude  $80^{\circ}$  north?

3. What is the sun's altitude at the north east of Nova Zembla, when it is midnight at Tobolsk, on the 15<sup>th</sup> of July?

4. What is the sun's altitude at the north of Baffin's Bay, when it is midnight at Buenos Ayres, on the 28<sup>th</sup> of May?

#### PROBLEM XLIII.

*To find the sun's amplitude at any place.*

Elevate the pole so many degrees above the horizon as are equal to the latitude of the given place; find the sun's place in the ecliptic, and bring it to the eastern semi-circle of the horizon; the number of degrees from the sun's place to the east point of the horizon will be the rising amplitude: bring the sun's place to the western semi-circle of the horizon, and the number of degrees from the sun's place to the west point of the horizon will be the setting amplitude.

OR, BY THE ANALEMMA.

Elevate the pole so many degrees above the horizon as are equal to the latitude of the place; bring the day of the month on the analemma to the eastern semi-circle of the horizon: the number of degrees from the day of the month to the east point of the horizon will be the rising amplitude: bring the day of the month to the western semicircle of the horizon, and the number of degrees from the day of the month to the west point of the horizon will be the setting amplitude.

EXAMPLES. 1. What is the sun's amplitude at London on the 21<sup>st</sup> of June?

*Answer.*

*Answer.*  $39^{\circ} 48'$  to the north of the east, and  $39^{\circ} 48'$  to the north of the west.

2. On what point of the compass does the sun rise and set at London on the 17th of May?

3. On what point of the compass does the sun rise and set at the Cape of Good Hope on the 21st of December?

4. On what point of the compass does the sun rise and set on the 21st of March?

5. On what point of the compass does the sun rise and set at Washington on the 21st of October?

6. On what point of the compass does the sun rise and set at Petersburg on the 18th of December?

#### PROBLEM XLIV.

*To find the sun's azimuth and his altitude at any place, the day and hour being given.*

**RULE.** Elevate the pole so many degrees above the horizon as are equal to the latitude of the place, and screw the quadrant of altitude on the brass meridian, over that latitude; find the sun's place in the ecliptic, bring it to the brass meridian, and set the index of the hour circle to twelve; then, if the given time be before noon, turn the globe eastward\* as many hours as it wants of noon; but, if the given time be past noon, turn the globe westward as many hours as it is past noon; bring the graduated edge of the quadrant of altitude to coincide with the sun's place, then the number of degrees on the horizon, reckoned from the north or south point thereof to the graduated edge of the quadrant, will shew the azimuth; and the number of degrees on the quadrant, counting from the horizon to the sun's place, will be the sun's altitude.

---

\* Whenever the pole is elevated for the latitude of the place, the proper motion of the globe is from east to west, and the sun is on the east side of the brass meridian in the morning, and on the west side in the afternoon; but, when the pole is elevated for the sun's declination, the motion is from west to east, and the place is on the west side of the meridian in the morning, and on the east side in the afternoon.

## OR, BY THE ANALEMMA.

Elevate the pole so many degrees above the horizon as are equal to the latitude of the place, and screw the quadrant of altitude on the brass meridian, over that latitude; bring the middle of the analemma to the brass meridian, and set the index of the hour circle to twelve; then, if the given time be before noon, turn the globe eastward on its axis as many hours as it wants of noon; but, if the given time be past noon, turn the globe westward as many hours as it is past noon; bring the graduated edge of the quadrant of altitude to coincide with the day of the month on the analemma, then the number of degrees on the horizon, reckoned from the north or south point thereof to the graduated edge of the quadrant, will shew the azimuth; and the number of degrees on the quadrant, counting from the horizon to the day of the month will be the sun's altitude.

EXAMPLES. 1. What is the sun's altitude, and his azimuth from the north, at London, on the first of May, at ten o'clock in the morning?

*Answer.* The altitude is  $47^{\circ}$ , and the azimuth from the north  $136^{\circ}$ , or from the south  $44^{\circ}$ .

2. What is the sun's altitude and azimuth at Petersburg on the 13th of August, at half past five o'clock in the morning?

3. What is the sun's azimuth and altitude at Antigua, on the 21st of June, at half past six in the morning, and at half past ten \*?

4. At Barbadoes on the 20th of May, when the sun's declination is 20 degrees north, required the time of the sun's appearing on the same azimuth, twice in the forenoon and twice in the afternoon?

---

\* At all places in the torrid zone, whenever the declination of the sun exceeds the latitude of the place, and both are of the same name, the sun will appear twice in the forenoon and twice in the afternoon, on the same point of the compass, and will cause the shadow of an azimuth dial to go back several degrees. In this example, the sun's azimuth at the hours given above will be  $69^{\circ}$  from the north towards the east; and at half past eight o'clock, the sun will appear to have the same azimuth for some time.

5. On the 13th of August at half past eight o'clock in the morning, at sea in latitude  $57^{\circ}$  N. the observed azimuth of the sun was S.  $40^{\circ} 14'$  E., what was the sun's altitude, his true azimuth, and the variation of the compass?

6. On the 14th of January, in latitude  $33^{\circ} 52'$  S., at half past three o'clock in the afternoon, the sun's magnetic azimuth was observed to N.  $63^{\circ} 51'$  W.; what was the true azimuth, the variation of the compass, and the sun's altitude?

### PROBLEM XLV.

*The latitude of the place, day of the month, and the sun's altitude being given, to find the sun's azimuth and the hour of the day\*.*

RULE. Elevate the pole so many degrees above the horizon as are equal to the latitude of the place, and screw the quadrant of altitude on the brass meridian, over that latitude; bring the sun's place in the ecliptic to the brass meridian, and set the index of the hour circle to twelve; turn the globe on its axis till the sun's place in the ecliptic coincides with the given degree of altitude on the quadrant; the hours passed over by the index of the hour circle will shew the time from noon, and the azimuth will be found on the horizon, as in the preceding problem.

### OR, BY THE ANALEMMA.

Elevate the pole to the latitude of the place, and screw the quadrant of altitude over that latitude; bring the middle of the analemma to the brass meridian, and set the index of the hour circle to twelve; move the globe and the quadrant till the day of the month coincides with the given altitude, the hours passed over by the index will shew the

---

\* This problem is only a variation of the preceding; for, by the nature of spherical trigonometry, any three of the following quantities, viz. the latitude of the place, the sun's declination, altitude, azimuth, or time of the day, being given, the rest may be found, admitting of several variations. A large collection of Astronomical problems may be found in *Keith's Trigonometry*, page 223. These problems are useful exercises on the globes.

time from noon, and the azimuth will be found in the horizon, as before.

EXAMPLES 1. At what hour of the day on the 21st of March is the sun's altitude  $22\frac{1}{4}^{\circ}$  at London, and what is his azimuth? The observation being made in the afternoon.

*Answer.* The time from noon will be found to be 3 hours 30 minutes, and the azimuth  $59^{\circ} 1'$  from the south towards the west. Had the observation been made before noon, the time from noon would have been  $3\frac{1}{2}$  hours, viz. It would have been 30 minutes past eight in the morning, and the azimuth would have been  $59^{\circ} 1'$  from the south towards the east\*.

2. At what hour on the 9th of March is the sun's altitude  $25^{\circ}$  at London, and what is his azimuth? The observation being made in the forenoon.

3. At what hour on the 18th of May is the sun's altitude  $30^{\circ}$  at Lisbon, and what is the azimuth? The observation being made in the afternoon.

4. Walking along the side of Queen-square in London, on the 5th of August in the forenoon, I observed the shadows of the iron-rails to be exactly the same length as the rails themselves; pray what o'clock was it, and on what point of the compass did the shadows of the rails fall?

#### PROBLEM XLVI.

*Given the latitude of the place, and the day of the month, to find at what place the sun is due east or west.*

**RULE.** Elevate the pole so many degrees above the horizon as are equal to the latitude of the place, find the sun's place in the ecliptic, bring it to the brass meridian, and set the index of the hour circle to twelve; screw the quadrant of altitude on the brass meridian, over the given latitude, and move the lower end of it to the east point of the horizon; hold the quadrant in this position, and move the globe on its axis till the sun's place comes to the graduated edge of the quadrant; the hours passed over by the index

---

\* The learner will observe, that the sun has the same altitude at equal distances from noon; hence it is necessary to say whether the observation be made before or after noon, otherwise the problem admits of two answers.

from twelve will be the time from noon when the sun is due east \*, and at the same time from noon he will be due west.

OR, BY THE ANALEMMA.

This is exactly the same as above, only, instead of bringing the sun's place to the meridian, you bring the analemma there, and, instead of bringing the sun's place to the graduated edge of the quadrant, the day of the month on the analemma must be brought to it.

EXAMPLES. 1. At what hour will the sun be due east at London on the 19th of May; at what hour will he be due west; and what will his altitude be at these times?

*Answer.* The time from 12, when the sun is due east, is 4 hours 54 minutes; hence the sun is due east at six minutes past seven o'clock in the morning, and due west at 54 minutes past four in the afternoon: the sun's altitude may be found at the same time, as in Problem XLIV. In this example it is  $25^{\circ} 26'$ .

2. At what hours will the sun be due east and west at London on the 21st of June, and on the 21st of December; and what will be his altitude above the horizon on the 21st of June?

3. Find at what hours the sun will be due east and west, not only at London, but at every place on the surface of the globe, on the 21st of March and on the 23d of September?

4. At what hours is the sun due east and west at Buenos Ayres on the 21st of December?

PROBLEM XLVII.

*Given the sun's meridian altitude, and the day of the month, to find the latitude of the place.*

RULE. Find the sun's place in the ecliptic, and bring it to that part of the brass meridian which is numbered from

---

\* If the latitude be north, and the sun's declination be south, he will be due east and west when he is below the horizon; and the same thing will happen if the latitude be south when the declination is north. Examples exercising these cases are useless; however they are easily solved, if we consider that, when the sun is due east below the horizon at any time, the opposite point of the ecliptic will be due west above the horizon; therefore, instead of bringing the lower edge of the quadrant to the east of the horizon, bring it to the west, and, instead of using the sun's place, make use of a point in the ecliptic diametrically opposite.

the equator towards the poles ; then, if the sun was south \* of the observer when the altitude was taken, count the number of degrees from the sun's place on the brass meridian towards the south point of the horizon, and mark where the reckoning ends ; bring this mark to coincide with the south point of the horizon, and the elevation of the north pole will shew the latitude. If the sun was north of the observer when the altitude was taken, the degrees must be counted in a similar manner, from the sun's place towards the north point of the horizon, and the elevation of the south pole will shew the latitude.

OR, WITHOUT A GLOBE.

Subtract the sun's altitude from ninety degrees, the remainder is the zenith distance. If the sun be south when his altitude is taken, call the zenith distance north ; but, if north, call it south ; find the sun's declination in an ephemeris † or a table of the sun's declination, and mark whether it be north or south ; then, if the zenith distance and declination have the same name, their sum is the latitude ; but, if they have contrary names, their difference is the latitude, and it is always of the same name with the greater of the two quantities.

EXAMPLES. 1. On the 10th of May 1808, I observed the sun's meridian altitude to be  $50^{\circ}$ , and it was south of me at that time ; required the latitude of the place ?

*Answer.*  $57^{\circ} 39'$  north.

*By calculation.*

$90^{\circ} 0'$	
$50 \quad 0$	S., sun's altitude at noon.
$40 \quad 0$	N., the zenith distance.
$17 \quad 39$	N., the sun's declination 10th of May 1808.
$57 \quad 39$	N., the latitude sought.

---

\* It is necessary to state whether the sun be to the north or south of the observer at noon, otherwise the problem is unlimited.

† The most convenient is White's Ephemeris ; see the note page 38, c1 the Nautical Almanac.

2. On the 10th of May 1808, the sun's meridian altitude was observed to be  $50^{\circ}$ , and it was north of the observer at that time; required the latitude of the place?

*Answer.* The latitude is  $22^{\circ} 21'$  south.

*By calculation.*

$$\begin{array}{r}
 90^{\circ} \ 0' \\
 50 \ 0 \ \text{N., sun's altitude at noon.} \\
 \hline
 40 \ 0 \ \text{S., the zenith distance.} \\
 17 \ 39 \ \text{N., the sun's declination.} \\
 \hline
 22 \ 21 \ \text{S., the latitude sought.}
 \end{array}$$

3. On the 5th of August 1808, the sun's meridian altitude was observed to be  $74^{\circ} 30'$  north of the observer; what was the latitude?

4. On the 19th of November 1808, the sun's meridian altitude was observed to be  $40^{\circ}$  south of the observer; what was the latitude?

5. At a certain place, where the clocks are two hours faster than at London, the sun's meridian altitude was observed to be 30 degrees to the south of the observer on the 21st of March; required the place?

6. At a place where the clocks are five hours slower than at London, the sun's meridian altitude was observed to be  $60^{\circ}$  to the south of the observer on the 16th of April 1808; required the place?

### PROBLEM XLVIII.

*The length of the longest day at any place, not within the polar circles being given, to find the latitude of that place.*

**RULE.** Bring the first point of Cancer or Capricorn to the brass meridian (according as the place is on the north or south side of the equator), and set the index of the hour circle to twelve; turn the globe westward on its axis till the index of the hour circle has passed over as many hours as are equal to half the length of the day; elevate or depress the pole till the sun's place (viz. Cancer or Capricorn) comes

comes to the horizon ; then the elevation of the pole will shew the latitude.

**NOTE.** This problem will answer for any day in the year, as well as the longest day, by bringing the sun's place to the brass meridian, and proceeding as above.

**OR.** Bring the middle of the analemma to the brass meridian, and set the index of the hour circle to 12 ; turn the globe westward on its axis till the index has passed over as many hours as are equal to half the length of the day ; elevate or depress the pole till the day of the month coincides with the horizon, then the elevation of the pole will shew the latitude.

**EXAMPLES.** 1. In what degree of north latitude, and at what places is the length of the longest day  $16\frac{1}{2}$  hours ?

*Answer.* In latitude  $52^{\circ}$ , and all places situated on, or near that parallel of latitude, have the same length of the day.

2. In what degree of south latitude, and at what places, is the longest day 14 hours ?

3. In what degree of north latitude is the length of the longest day three times the length of the shortest night ?

4. There is a town in Norway where the longest day is five times the length of the shortest night ; pray what is the name of the town ?

5. In what latitude north does the sun set at seven o'clock on the 5th of April ?

6. In what latitude south does the sun rise at five o'clock on the 25th of November ?

7. In what latitude north is the 20th of May 16 hours long ?

8. In what latitude north is the night of the 15th of August 10 hours long ?

#### PROBLEM XLIX.

*The latitude of a place, and the day of the month being given, to find how much the sun's declination must increase or decrease towards the elevated pole, to make the day an hour longer or shorter than the given day.*

**RULE.** Find the sun's declination for the given day, and elevate the pole to that declination ; bring the given place to the brass meridian, and set the index of the hour circle to twelve ; turn the globe eastward on its axis till the  
given

given place comes to the horizon, and observe the hours passed over by the index : then, if the days be increasing, continue the motion of the globe eastward till the index has passed over another half hour, and raise the pole till the place comes again into the horizon, the elevation of the pole will shew the sun's declination when the day is an hour longer than the given day : but, if the days be decreasing, turn the globe westward till the index has passed over half an hour, and depress the pole till the place comes a second time into the horizon, the last elevation of the pole will shew the sun's declination when the day is an hour shorter than the given day.

OR,

Elevate the pole to the latitude of the place, find the sun's place in the ecliptic, bring it to the brass meridian, and set the index of the hour circle to twelve ; turn the globe westward on its axis till the sun's place comes to the horizon, and observe the hours passed over by the index ; then, if the days be increasing, continue the motion of the globe westward till the index has passed over another half hour, and observe what point of the ecliptic is cut by the horizon ; that point will shew the sun's place when the day is an hour longer than the given day, whence the declination is readily found : but, if the days be decreasing, turn the globe eastward till the index has passed over half an hour, and observe what point of the ecliptic is cut by the horizon ; that point will shew the sun's place when the day is an hour shorter than the given day.

OR, BY THE ANALEMMA.

Proceed exactly the same as above, only, instead of bringing the sun's place to the brass meridian, bring the analemma there, and, instead of the sun's place, use the day of the month on the analemma.

EXAMPLES. I. How much must the sun's declination vary that the day at London may be increased one hour from the 24th of February ?

*Answer.*

*Answer.* On the 24th of February the sun's declination is  $9^{\circ} 38'$  south, and the sun sets at a quarter past five : when the sun sets at three quarters past five, his declination will be found to be about  $4\frac{1}{2}^{\circ}$  south, answering to the 10th of March : hence the declination has decreased  $5^{\circ} 23'$ , and the days have increased 1 hour in 14 days.

2 How much must the sun's declination vary that the day at London may decrease *one* hour in length from the 26th of July ?

*Answer.* The sun's declination on the 26th of July is  $19^{\circ} 38'$  north, and the sun sets at 49 min. past seven ; when the sun sets at 19 min. past seven, his declination will be found to be  $14^{\circ} 43'$  north, answering to the 13th of August : hence the declination has decreased  $5^{\circ} 55'$ , and the days have decreased *one* hour in 18 days.

3. How much must the sun's declination vary, from the 5th of April, that the day at Petersburg may increase *one* hour ?

4. How much must the sun's declination vary, from the 4th of October, that the day at Stockholm may decrease *one* hour ?

#### PROBLEM L.

*To find the sun's right ascension, oblique ascension, oblique descension, ascensional difference, and time of rising and setting at any place.*

**RULE.** Find the sun's place in the ecliptic, and bring it to that part of the brass meridian which is numbered from the equator towards the poles \* ; the degree on the equator cut by the graduated edge of the brass meridian, reckoning from the point Aries eastward, will be the sun's right ascension.

Elevate the pole so many degrees above the horizon as are equal to the latitude of the place, bring the sun's place in the ecliptic to the eastern part of the horizon †, and the degree on the equator cut by the horizon, reckoning from

---

\* The degree on the meridian above the sun's place is the sun's declination. See Prob. XX.

† The rising amplitude may be seen at the same time. See Problem XLIII.

the point Aries eastward, will be the sun's oblique ascension. Bring the sun's place in the ecliptic to the western part of the horizon \*, and the degree on the equator cut by the horizon, reckoning from the point Aries eastward, will be the sun's oblique descension.

Find the difference between the sun's right and oblique ascension; or, which is the same thing, the difference between the right ascension and oblique descension, and turn this difference into time by multiplying by 4 †; then, if the sun's declination and the latitude of the place be both of the same name, viz. both north or both south, the sun rises before six, and sets after six, by a space of time equal to the ascensional difference; but, if the sun's declination and the latitude be of contrary names, viz. the one north and the other south, the sun rises after six, and sets before six.

EXAMPLES. 1. Required the sun's right ascension, oblique ascension, oblique descension, ascensional difference, and time of rising and setting at London, on the 15th of April?

*Answer.* The right ascension is  $23^{\circ} 30'$ , the oblique ascension is  $9^{\circ} 45'$ , the ascensional difference ( $23^{\circ} 30' - 9^{\circ} 45' =$ )  $13^{\circ} 45'$  or 55 minutes of time; consequently the sun rises 55 minutes before 6, or 5 min. past 5, and sets 55 min. past 6. The oblique descension is  $37^{\circ} 15'$ ; consequently, the descensional difference is ( $37^{\circ} 15' - 23^{\circ} 30' =$ )  $13^{\circ} 45'$ , the same as the ascensional difference.

2. What are the sun's right ascension, oblique ascension, and oblique descension, on the 27th of September at London; what is the ascensional difference, and at what time does the sun rise and set?

3. What are the sun's right ascension, declination, oblique ascension, rising amplitude, oblique descension, and setting amplitude, at London, on the 1st of May; what is the ascensional difference, and at what time does the sun rise and set?

4. What are the sun's right ascension, declination, oblique ascension, rising amplitude, oblique descension, and setting

\* The setting amplitude may here be seen. Vide Prob. XLIII.

† See Problem XVIII.

the sun's declination, and a fine pencil in the other foot, describe an arc; take the complement of the second altitude in a similar manner from the equator, and, with one foot of the compasses fixed in the second point of the sun's declination, cross the former arc: the point of intersection brought to that part of the brass meridian which is numbered from the equator towards the poles, will stand under the degree of latitude sought.

**EXAMPLES.** 1. On the 4th of June 1808, in north latitude, the sun's altitude, at 29 minutes past 10 in the forenoon, was  $65^{\circ} 24'$ , and at 31 minutes past 12, the altitude was  $74^{\circ} 8'$ ; required the latitude?

*Answer.* The sun's declination was  $22^{\circ} 27'$  north, the elapsed time was two hours two min., answering to  $30^{\circ} 30'$ ; the complement of the first altitude was  $24^{\circ} 36'$ , the complement of the second altitude  $15^{\circ} 52'$ , and the latitude sought  $36^{\circ} 57'$  north.

2. Given the sun's declination  $19^{\circ} 39'$  north, his altitude in the forenoon  $38^{\circ} 19'$ , and, at the end of one hour and a half, the same morning, the altitude was  $50^{\circ} 25'$ ; required the latitude of the place, supposing it to be north?

*Answer.*  $51^{\circ} 32'$  north\*.

3. When the sun's declination was  $22^{\circ} 40'$  north, his altitude at 10 h. 54 m. in the forenoon was  $53^{\circ} 29'$ , and at 1 h. 17 m. in the afternoon it was  $52^{\circ} 48'$ ; required the latitude of the place of observation, supposing it to be north?

*Answer.*  $57^{\circ} 8'$  north.

4. In north latitude, when the sun's declination was  $22^{\circ} 23'$  south, being on the 5th of December, the sun's altitude in the afternoon was observed to be  $14^{\circ} 46'$ , and, after 1 h. and 22 m. had elapsed, his altitude was  $8^{\circ} 27'$ ; required the latitude?

*Answer.*  $50^{\circ} 34'$  north.

---

\* A great variety of examples, accurately calculated by a general rule, without an assumed latitude, may be seen in *Keith's Trigonometry*, page 289, &c.

## PROBLEM LIII.

*The day and hour being given when a solar eclipse will happen, to find where it will be visible.*

**RULE.** Find the sun's declination, and elevate the pole agreeably to that declination; bring the place, at which the hour is given, to that part of the brass meridian which is numbered from the equator towards the poles, and set the index of the hour circle to twelve; then, if the given time be before noon, turn the globe westward till the index has passed over as many hours as the given time wants of noon; if the time be past noon, turn the globe eastward as many hours as it is past noon, and exactly under the degree of the sun's declination on the brass meridian you will find the place on the globe where the sun will be vertically eclipsed: at all places within 70 degrees of this place, the eclipse *may* \* be visible, especially if it be a total eclipse.

**EXAMPLE.** On the 11th of February 1804, at 27 min. past ten o'clock in the morning at London, there was an eclipse of the sun; where was it visible, supposing the moon's penumbral shadow to extend northward 70 degrees from the place where the sun was vertically eclipsed?

*Answer.* London, &c. For more examples consult the Table of Eclipses, following the next problem.

## PROBLEM LIV.

*The day and hour being given when a lunar eclipse will happen, to find where it will be visible.*

**RULE.** Find the sun's declination for the given day, and note whether it be north or south; if it be north, ele-

---

\* When the moon is exactly in the node, and when the axes of the moon's shadow and penumbra pass through the centre of the earth, the breadth of the earth's surface under the penumbral shadow is  $70^{\circ} 20'$ ; but the breadth of this shadow is variable; and, if it be not accurately determined by calculation, it is impossible to tell by the globe to what extent an eclipse of the sun will be visible.

vate the *south* pole so many degrees above the horizon as are equal to the declination ; if it be south, elevate the *north* pole in a similar manner ; bring the place at which the hour is given to that part of the brass meridian which is numbered from the equator towards the poles, and set the index of the hour circle to twelve ; then, if the given time be before noon, turn the globe westward as many hours as it wants of noon ; if after noon, turn the globe eastward as many hours as it is past noon ; the place exactly under the degree of the sun's declination will be the antipodes of the place where the moon is vertically eclipsed. Set the index of the hour circle again to twelve, and turn the globe on its axis till the index has passed over twelve hours ; then to all places above the horizon the eclipse will be visible ; to those places along the western edge of the horizon the moon will rise eclipsed ; to those along the eastern edge she will set eclipsed ; and to that place immediately under the sun's declination the moon will be vertically eclipsed.

EXAMPLE. On the 26th of January 1804, at 58 min. past seven in the afternoon, at London, there was an eclipse of the moon ; where was it visible ?

Answer. It was visible to the whole of Europe, Africa, and the continent of Asia. For more examples, see the following Table of Eclipses.

NOTE. The substance of the following Table of Eclipses was extracted from *Dr. Hutton's* translation of *Montucla's* edition of *Ozanam's Mathematical and Physical Recreations*, published by Mr. Kearsley in Fleetstreet. These eclipses were originally calculated by M. Pringré, a member of the academy of sciences, and published in *L'Art des vérifier les Dates*. In classing these tables, the arrangement of Mr. Ferguson has been followed ; see page 267 of his *Astronomy*, where a catalogue of the visible eclipses is given from 1700 to 1800, taken from *L'Art de vérifier les Dates*. It may be necessary to inform the learner, that the times of these eclipses, as calculated by M. Pringré, are not perfectly accurate, and were only designed to shew nearly the time when an eclipse may be expected to happen. The limits where these eclipses are visible are generally from the tropic of Cancer in Africa, to the northern extremity of Lapland, and from the 5th degree of north latitude in Asia, to the north polar circle ; though some few of them are visible beyond the pole. In longitude, the limits are the 5th and 155th meridians, supposing the 20th to pass through Paris ; hence it appears that they are calculated for the meridian of Ferro ; which will make their limits from London to be from  $12^{\circ} 46'$  west long. to  $137^{\circ} 14'$  east. M. Pringré says, than an eclipse of the sun is visible from

32° to 64° north, and as far south of the place where it is central. In the following table the moon is represented by ☾, the sun by ☉, T stands for total, P for partial, M for morning, and A for afternoon; the rest is obvious.

Years.		Months and Days.	Time.	Years.		Months and Days.	Time.
1805	☾ T	Jan. 15	9 M	1816	☾ P	Dec. 4	9 A
	☉	June 26	11 A	1817	☉	May 16	7 M
	☾ T	July 11	9 A		☾ P	May 3	3½ A
1806	☾ P	Jan. 5	0 M		☉	Nov. 9	2½ M
	☉	June 16	4 A	1818	☾ P	April 21	0½ M
	☾ P	June 30	10 A		☉	May 5	7½ M
	☉	Dec. 10	2½ M		☾ P	Octob. 14	6 M
1807	☾ P	May 21	5½ A	1819	☾ T	April 10	1½ A
	☉	June 6	5½ M		☉	April 24	Merid.
	☾ P	Nov. 15	8½ M		☉	Sept. 19	1 A
	☉	Nov. 29	Merid.		☾ T	Octob. 3	3½ A
1808	☾ T	May 10	8 M	1820	☾ P	March 29	7 A
	☾ T	Nov. 3	9 M		☉	Sept. 7	2 A
	☉	Nov. 18	3 M		☾ P	Sept. 22	7 M
1809	☾ P	April 30	1 M	1821	☉	March 4	6 M
	☾ P	Octob. 23	9½ M	1822	☾ P	Feb. 6	5½ M
1810	☉	April 4	2 M		☾ P	Aug. 3	0½ M
1811	☾ P	March 10	6½ M	1823	☾ T	Jan. 26	5½ A
	☾ P	Sept. 2	11 A		☉	Feb. 11	3 M
1812	☾ T	Feb. 27	6 M		☉	July 8	6½ M
	☾ T	August 22	3 A		☾ T	July 23	3½ M
1813	☉	Feb. 1	9 M	1824	☾ P	Jan. 16	9 M
	☾ P	Feb. 15	9 M		☉	June 26	11½ A
	☾ P	Aug. 12	3¼ M		☾ P	July 11	4½ M
1814	☉	Jan. 21	2½ A		☉	Dec. 20	11 M
	☉	July 17	7 M	1825	☾ P	June 1	0½ M
	☾ P	Dec. 26	11½ A		☉	June 16	0½ A
1815	☾ T	June 21	6½ A		☾ P	Nov. 25	4½ A
	☉	July 7	0 M	1826	☾ T	May 21	3½ A
	☾ P	Dec. 16	1¼ A		☾ T	Nov. 14	4½ A
1816	☾ T	June 10	1½ M		☉	Nov. 29	11½ M
	☉	Nov. 19	10½ M	1827	☉	April 2	3½ M

Years		Months and Days.	Time.	Years.		Months and Days.	Time.
1827	(P	May 11	8 $\frac{1}{4}$ M	1841	☉	Feb. 21	11 M
	(P	Nov. 3	5 A		☉	July 18	2 A
1828	☉	April 14	9 $\frac{1}{2}$ M		D T	Aug. 2	10 M
	☉	Octob. 9	0 $\frac{1}{2}$ M	1842	D P	Jan. 26	6 A
1829	D P	March 20	2 A		☉	July 8	7 M
	D P	Sept. 13	7 M		D P	July 22	11 M
	☉	Sept. 28	2 $\frac{1}{2}$ M	1843	D P	June 12	8 M
1830	☉	Feb. 23	5 M		D P	Dec. 7	0 $\frac{1}{2}$ M
	D T	March 9	2 A		☉	Dec. 21	5 $\frac{1}{2}$ M
	D T	Sept. 2	11 A	1844	D T	May 31	11 $\frac{1}{4}$ A
1831	D P	Feb. 26	5 A		D T	Nov. 25	0 $\frac{1}{4}$ M
	D P	Aug. 23	10 $\frac{1}{2}$ M	1845	☉	May 6	10 $\frac{1}{2}$ M
1832	☉	July 27	2 $\frac{1}{2}$ A		D T	May 21	4 $\frac{1}{2}$ A
1833	D P	Jan. 6	8 M		D P	Nov. 14	1 M
	D P	July 2	1 M	1846	☉	April 25	5 $\frac{1}{2}$ A
	☉	July 17	7 M		☉	Octob. 20	8 $\frac{1}{2}$ M
	D T	Dec. 26	10 A	1847	D P	March 31	9 $\frac{1}{2}$ A
1834	D T	June 21	8 $\frac{1}{2}$ M		☉	Sept. 24	3 A
	D P	Dec. 16	5 $\frac{1}{4}$ M		☉	Octob. 9	9 $\frac{1}{2}$ M
1835	☉	May 27	1 $\frac{1}{2}$ A	1848	D T	March 19	9 $\frac{1}{2}$ A
	D P	June 10	11 A		D T	Sept. 13	6 $\frac{1}{2}$ M
	☉	Nov. 20	11 M		☉	Sept. 27	10 M
1836	D P	May 1	8 $\frac{1}{2}$ M	1849	☉	Feb. 23	1 $\frac{1}{2}$ M
	☉	May 15	2 $\frac{1}{2}$ A		D P	March 9	1 M
	D P	Octob. 24	1 $\frac{3}{4}$ A		D P	Sept. 2	5 $\frac{1}{2}$ A
1837	D T	April 20	9 A	1850	☉	Feb. 12	6 $\frac{1}{2}$ M
	☉	May 4	7 $\frac{1}{2}$ A		☉	Aug. 7	10 A
	D T	Octob. 13	11 $\frac{1}{2}$ A	1851	D P	Jan. 17	5 A
1838	D P	April 10	2 $\frac{1}{2}$ M		D P	July 13	7 $\frac{1}{2}$ M
	D P	Octob. 3	3 A		☉	July 28	2 $\frac{1}{2}$ A
1839	☉	March 15	2 $\frac{1}{2}$ A	1852	D T	Jan. 7	6 $\frac{1}{2}$ M
	☉	Sept. 7	10 $\frac{1}{2}$ A		D T	July 1	3 $\frac{3}{4}$ A
1840	D P	Feb. 17	2 A		☉	Dec. 11	4 M
	☉	March 4	4 M		D P	Dec. 26	1 A
	D P	Aug. 13	7 $\frac{1}{2}$ M	1853	D P	June 21	6 M
1841	D T	Feb. 6	2 $\frac{1}{2}$ M	1854	D P	May 12	4 A

Years.		Months and Days.	Time.	Years		Months and Days.	Time
1854	☽ P	Nov. 4	9 <sup>1</sup> / <sub>2</sub> A	1867	☽ P	March 20	9 M
1855	☽ T	May 2	4 <sup>1</sup> / <sub>2</sub> M	—	☽ P	Sept. 14	1 M
—	☉	May 16	2 <sup>1</sup> / <sub>2</sub> M	1868	☉	Feb. 23	2 <sup>1</sup> / <sub>2</sub> A
—	☽ T	Octob. 25	8 M	—	☉	Aug. 18	5 <sup>1</sup> / <sub>2</sub> M
1856	☽ P	April 20	9 <sup>1</sup> / <sub>2</sub> M	1869	☽ P	Jan. 28	1 <sup>3</sup> / <sub>4</sub> M
—	☉	Sept. 29	4 M	—	☽ P	July 23	2 A
—	☽ P	Octob. 13	11 <sup>1</sup> / <sub>2</sub> A	—	☉	Aug. 7	10 A
1857	☉	Sept. 18	6 M	1870	☽ T	Jan. 17	3 A
1858	☽ P	Feb. 27	10 <sup>1</sup> / <sub>4</sub> A	—	☽ T	July 12	11 A
—	☉	March 15	0 <sup>1</sup> / <sub>2</sub> A	—	☉	Dec. 22	0 <sup>3</sup> / <sub>4</sub> A
—	☽ P	Aug. 24	2 <sup>1</sup> / <sub>2</sub> A	1871	☽ P	Jan. 6	9 <sup>1</sup> / <sub>2</sub> A
1859	☽ T	Feb. 17	11 M	—	☉	June 18	2 <sup>1</sup> / <sub>2</sub> M
—	☉	July 29	9 <sup>1</sup> / <sub>2</sub> A	—	☽ P	July 2	1 <sup>1</sup> / <sub>2</sub> A
—	☽ T	Aug. 13	4 <sup>1</sup> / <sub>2</sub> A	—	☉	Dec. 12	4 <sup>1</sup> / <sub>2</sub> M
1860	☽ P	Feb. 7	2 <sup>1</sup> / <sub>2</sub> M	1872	☽ P	May 22	11 <sup>1</sup> / <sub>2</sub> A
—	☉	July 18	2 A	—	☉	June 6	3 <sup>1</sup> / <sub>2</sub> M
—	☽ P	Aug. 1	5 <sup>1</sup> / <sub>2</sub> A	—	☽ P	Nov. 15	5 <sup>3</sup> / <sub>4</sub> M
1861	☉	Jan. 11	3 <sup>1</sup> / <sub>2</sub> M	1873	☽ T	May 12	11 <sup>1</sup> / <sub>2</sub> M
—	☉	July 8	2 M	—	☉	May 26	9 <sup>1</sup> / <sub>2</sub> M
—	☽ P	Dec. 17	8 <sup>1</sup> / <sub>2</sub> M	—	☽ T	Nov. 4	4 <sup>1</sup> / <sub>2</sub> A
—	☉	Dec 31	2 <sup>1</sup> / <sub>2</sub> A	1874	☽ P	May 1	4 <sup>1</sup> / <sub>2</sub> A
1862	☽ T	June 12	6 <sup>3</sup> / <sub>2</sub> M	—	☉	Oct. 10	11 <sup>1</sup> / <sub>2</sub> M
—	☽ T	Dec. 6	8 M	—	☽ P	Oct. 25	8 M
—	☉	Dec. 21	5 <sup>1</sup> / <sub>2</sub> M	1875	☉	April 6	7 M
1863	☉	May 17	5 A	—	☉	Sept. 29	1 <sup>1</sup> / <sub>2</sub> A
—	☽ T	June 2	0 M	1876	☽ P	March 10	6 <sup>1</sup> / <sub>2</sub> M
—	☽ P	Nov. 25	9 M	—	☽ P	Sept. 3	9 <sup>1</sup> / <sub>2</sub> A
1864	☉	May 6	0 <sup>3</sup> / <sub>4</sub> M	1877	☽ T	Feb. 27	7 <sup>1</sup> / <sub>2</sub> A
1865	☽ P	April 11	5 M	—	☉	March 15	3 M
—	☽ P	Octob. 4	11 A	—	☉	Aug. 9	5 M
—	☉	Octob. 19	5 A	—	☽ T	Aug. 23	11 <sup>1</sup> / <sub>2</sub> A
1866	☉	March 16	10 A	1878	☽ P	Feb. 17	11 <sup>1</sup> / <sub>2</sub> M
—	☽ T	March 31	5 M	—	☉	July 29	9 <sup>1</sup> / <sub>2</sub> A
—	☽ T	Sept. 24	2 <sup>1</sup> / <sub>2</sub> A	—	☽ P	Aug. 13	0 <sup>1</sup> / <sub>2</sub> M
—	☉	Octob. 8	5 <sup>1</sup> / <sub>4</sub> A	1879	☉	Jan. 22.	Merid.
1867	☉	March 6	10 M	—	☉	July 19	9 M

Years.		Months and Days.	Time.	Years.		Months and Days.	Time.
1879	☾	P Dec. 28	4½ A	1890	☾	P Nov. 26	2 A
1880	☉	Jan. 11	11 A	1891	☾	T May 23	7 A
—	☾	T June 22	2 A	—	☉	June 6	4½ A
—	☾	T Dec. 16	4 A	—	☾	T Nov. 16	0¾ M
—	☉	Dec. 31	2 A	1892	☾	P May 11	11½ A
1881	☾	May 28	0 M	—	☾	T Nov. 4	4½ A
—	☾	T June 12	7¼ M	1893	☉	April 16	3 A
—	☾	P Dec. 5	5½ A	1894	☾	P March 21	2½ A
1882	☉	May 17	8 M	—	☉	April 6	4½ M
—	☉	Nov. 11	0 M	—	☾	P Sept. 15	4¾ M
1883	☾	P April 22	Merid.	—	☉	Sept. 29	5¾ M
—	☾	P Oct. 16	7½ M	1895	☾	T March 11	4 M
—	☉	Oct. 31	0½ M	—	☉	March 26	10 M
1884	☉	March 27	6 M	—	☉	Aug. 20	0½ A
—	☾	T April 10	Merid.	—	☾	T Sept. 4	6 M
—	☾	T Oct. 4	10½ A	1896	☾	P Feb. 28	8 A
—	☉	Oct. 19	1 M	—	☉	Aug. 9	4½ M
1885	☾	P March 30	5 A	—	☾	P Aug. 23	7 M
—	☾	P Sept. 24	8½ M	1897	No visible Eclipse.		
1886	☉	Aug. 29	1½ A	1898	☾	P Jan. 8	0½ M
1887	☾	P Feb. 8	10½ M	—	☉	Jan. 22	8 M
—	☾	P Aug. 3	9 A	—	☾	P July 3	9½ A
—	☉	Aug. 19	6 M	—	☾	T Dec. 27	12 A
1888	☾	T Jan. 28	11½ A	1899	☉	Jan. 11	11 A
—	☾	T July 23	6 M	—	☉	June 8	7 M
1889	☾	P Jan. 17	5½ M	—	☾	T June 23	2½ A
—	☾	P July 12	9 A	—	☾	P Dec. 17	1½ M
—	☉	Dec. 22	1 A	1900	☉	May 28	3¼ A
1890	☾	P June 23	6 M	—	☾	P June 13	4 M
—	☉	June 17	10 M	—	☉	Nov. 22	8 M

**A TABLE.**  
FOR FINDING THE MOON'S AGE.  
Add the number taken from this table to the day of the month; the sum (rejecting 30, if it exceeds 30,) is the moon's age

Year	Moon's Age												High Water		
	Janu:ry	February	March	April	May	June	July	August	September	October	November	December	Days	H.	M.
													0	0	0
													1	0	36
													2	1	11
1805	0	2	1	2	3	4	5	6	8	8	10	10	3	1	46
													4	2	21
1806	11	13	12	13	14	15	16	17	19	19	21	21	5	3	1
													6	3	44
1807	22	24	23	24	25	26	27	28	0	0	2	2	7	4	37
													8	5	40
1808	3	5	4	5	6	7	8	9	11	11	13	13	9	6	58
													10	8	14
1809	14	16	15	16	17	18	19	20	22	22	24	24	11	9	17
													12	10	9
1810	25	27	26	27	28	29	0	1	3	3	5	5	13	10	53
													14	11	33
1811	6	8	7	8	9	10	11	12	14	14	16	16	15	12	8
1812	17	19	18	19	20	21	22	23	25	25	27	27	16	12	45
													17	13	19
1813	28	0	29	0	1	2	3	4	6	6	8	8	18	13	54
													19	14	30
1814	9	11	10	11	12	13	14	15	17	17	19	19	20	15	11
													21	15	56
1815	20	22	21	22	23	24	25	26	28	28	0	0	22	16	51
													23	18	0
1816	1	3	2	3	4	5	6	7	9	9	11	11	24	19	18
													25	20	31
1817	12	14	13	14	15	16	17	18	20	20	22	22	26	21	31
													27	22	21
1818	23	25	24	25	26	27	28	29	1	1	3	3	28	23	3
													29	23	42
1819	4	6	5	6	7	8	9	10	12	12	14	14	29 <sup>1</sup> / <sub>2</sub>	24	0
1820	15	17	16	17	18	19	20	21	23	23	25	25			
1821	26	28	27	28	29	0	1	2	4	4	6	6			
1822	7	9	8	9	10	11	12	13	15	15	17	17			
1823	18	20	19	20	21	22	23	24	26	26	28	28			

Though the preceding table be calculated only for nineteen years, it will answer for a century to come, by changing the years at the expiration of nineteen; thus, instead of 1805, write 1824, and so on in a gradual succession to 1842, without any alteration in the figures under the months; and, when these years are elapsed, begin again with 1843, &c. *The time of new moon* may be had by subtracting the number in the table opposite the given year, and under the given month, from 30; thus the time of new moon in March 1820 is on the 14th ( $\equiv 30 - 16$ ); in December the same year, new moon happens on the 5th ( $\equiv 30 - 25$ ); and so on for any other year and month.

*To find the time of full moon*, subtract the number in the table, opposite the given year and under the given month, from 30; if the remainder be 15, full moon happens on the 30th day of the month; if the remainder exceed 15, the excess above 15 is the day of the month on which full moon happens; if the remainder fall short of 15, add 15 to it, and the sum will shew the day of the month on which full moon will happen. Thus, full moon happens on January 30, 1820, ( $30 - 15 = 15$ ). In November 1818, full moon happens on the 12th ( $30 - 3 = 27$ , and  $27 - 15 = 12$ ). In January 1818, full moon happens on the 22d ( $30 - 23 = 7$ , and  $7 + 15 = 22$ ). At the time of conjunction, or new moon, the sun and moon are in the same sign and degree, and the moon's motion is  $12^{\circ} 11' 6''$  swifter than the apparent motion of the sun (see the note page 76); if this difference, therefore, be multiplied by the moon's age, the product will give the number of degrees which the moon's place is before the sun's; and, as the sun's place is readily found by the globe, the moon's place will be easily obtained. Likewise, if the place of the moon's node \* be given for any particular year, its place for any other year may be calculated, the mean annual variation being about  $19^{\circ} 19' 44''$  (see page 135.) Hence the following problem may be solved, though not very accurately, without an ephemeris.

---

\* In a central eclipse of the moon, the moon's place at the middle of the eclipse is directly opposite to the sun, and the moon is then in one of her nodes. If the sun's place in the ecliptic be determined at that time by observation, the opposite point will be the true place of the moon's node.

## PROBLEM LV.

To find the time of the year when the sun or moon will be liable to be eclipsed.

RULE. 1. Find the place of the moon's nodes, the time of *new moon*, and the sun's longitude at that time, by an ephemeris \*; then, if the sun be within 17 degrees of the moon's node, there will be an eclipse of the sun.

2. Find the place of the moon's nodes, the time of full moon, and the sun's longitude at that time, by an ephemeris; then, if the sun's longitude be within 12 degrees of the moon's node, there will be an eclipse of the moon.

EXAMPLES. 1. On the 15th of January 1805, there was a full moon, at which time the place of the moon's node was  $\Upsilon 25^{\circ} 54'$ , and the sun's longitude  $\Upsilon 25^{\circ}$  did an eclipse of the moon happen at that time?

*Answer.* Here the sun was nearly in the moon's node, therefore a total eclipse of the moon took place; for, when the sun is in one of the moon's nodes at the time of full moon, the moon is in the other node, and the earth is directly between them; the moon's place was consequently about  $25^{\circ}$  in Cancer.

2. It appears, by the foregoing table, that there was a new moon on the 30th of January 1805, at which time the place of the moon's node was  $\Upsilon 25^{\circ} 16'$ , and the sun's longitude or place was  $\approx 10^{\circ}$ ; was there an eclipse of the sun at that time?

3. By the foregoing table, or by an ephemeris, there will be a new moon on the 19th of October 1808, at which time the place of the moon's node will be  $\eta 13^{\circ} 6'$  and the sun's longitude  $\approx 25^{\circ} 56'$ ; will there be an eclipse of the sun at that time?

4. On the 3rd of November 1808, there will be a full moon, at which time the place of the moon's node will be  $\eta 12^{\circ} 18'$  and the sun's longitude  $\eta 10^{\circ} 55'$ ; will there be an eclipse of the moon at that time?

---

\* White's Ephemeris, or the Nautical Almanac.

5. On the 4th of April 1810, there will be a new moon, at which time the place of the moon's node will be  $\simeq 14^{\circ} 57'$  and the sun's longitude  $\simeq 14^{\circ} 4'$ ; will there be an eclipse of the sun at that time?

6. On the 28th of September 1810 there will be a new moon, at which time the place of the moon's node will be  $\simeq 5^{\circ} 32'$ : and the sun's longitude  $\simeq 4^{\circ} 40'$ ; will there be an eclipse of the sun at that time?

### PROBLEM LVI.

*To explain the phenomenon of the harvest moon.*

DEFINITION 1. The harvest moon, in north latitude, is the full moon which happens at, or near, the time of the autumnal equinox; for to the inhabitants of north latitude, whenever the moon is in Pisces or Aries (and she is in these signs twelve times in a year), there is very little difference between her times of rising for several nights together, because her orbit is at these times nearly parallel to the horizon. This peculiar rising of the moon passes unobserved at all other times of the year except in September and October; for there can never be a full moon except the sun be directly opposite to the moon; and as this particular rising of the moon can only happen when the moon is in  $\text{♋}$  Pisces or  $\text{♈}$  Aries, the sun must necessarily be either in  $\text{♍}$  Virgo or  $\text{♎}$  Libra at that time, and these signs answer to the months of September and October.

DEFINITION 2. The harvest moon, in south latitude, is the full moon which happens at, or near, the time of the vernal equinox; for, to the inhabitants of south latitude, whenever the moon is in  $\text{♍}$  Virgo or  $\text{♎}$  Libra (and she is in these signs twelve times in a year) her orbit is nearly parallel to the horizon; but, when the full moon happens in  $\text{♍}$  Virgo or  $\text{♎}$  Libra, the sun must be either in  $\text{♋}$  Pisces or  $\text{♈}$  Aries. Hence it appears that the harvest moons are just as regular in south latitude as they are in north latitude, only they happen at contrary times of the year.

RULE

**RULE FOR PERFORMING THE PROBLEM.—I.** *For north latitude.* Elevate the north pole to the latitude of the place, put a patch or make a mark in the ecliptic on the point Aries, and upon every twelve \* degrees preceding and following that point, till there be ten or eleven marks; bring that mark which is the nearest to Pisces to the eastern edge of the horizon, and set the index to 12; turn the globe westward till the other marks successively come to the horizon, and observe the hours passed over by the index; the intervals of time between the marks coming to the horizon will shew the diurnal difference of time between the moon's rising. If these marks be brought to the western edge of the horizon in the same manner, you will see the diurnal difference of time between the moon's setting; for, when there is the smallest difference between the times of the moon's rising †, there will be the greatest difference between the times of her setting; and, on the contrary, when there is the greatest difference between the times of the moon's rising, there will be the least difference between the times of her setting.

**NOTE.** As the moon's nodes vary their position and form a complete revolution in about nineteen years, there will be a regular period of all the varieties which can happen in the rising and setting of the moon during that time. The following table (extracted from Ferguson's Astronomy) shews in what years the harvest moons are the least and the most beneficial, with regard to the times of their rising, from 1805 to 1860. The columns of years under the letter L are those in which the harvest moons are least beneficial, because they fall about the descending node; and those under M are the most beneficial, because they fall about the ascending node.

\* The reason why you mark every 12 degrees is, that the moon gains  $12^{\circ} 11'$  of the sun in the ecliptic every day (see the 2d note, page 76).

† At London when the moon rises in the point Aries, the ecliptic at that point makes an angle of only 15 degrees with the horizon; but, when she sets in the point Aries, it makes an angle of 62 degrees: and, when the moon rises in the point Libra, the ecliptic, at that point, makes an angle of 62 degrees with the horizon; but, when she sets in the point **Libra**, it only makes an angle of 15 degrees with the horizon.

L	L	L	L	M	M	M	M
1807	1814	1831	1847	1805	1822	1838	1854
1808	1815	1832	1848	1806	1823	1839	1855
1809	1820	1833	1849	1816	1824	1840	1856
1810	1827	1834	1850	1817	1825	1841	1857
1811	1828	1844	1851	1818	1835	1842	1858
1812	1829	1845	1852	1819	1836	1843	1859
1813	1830	1846		1820	1837	1853	1800
				1821			

2. *For south latitude.* Elevate the south pole to the latitude of the place, put a patch or make a mark on the ecliptic on the point Libra, and upon every twelve degrees preceding and following that point, till there be ten or eleven marks; bring that mark which is the nearest to Virgo, to the eastern edge of the horizon, and set the index to 12; turn the globe westward till the other marks successively come to the horizon, and observe the hours passed over by the index; the intervals of time between the marks coming to the horizon, will be the diurnal difference of time between the moon's rising, &c. as in the foregoing part of the problem\*.

### PROBLEM LVII.

*The day and hour of an eclipse of any one of the satellites of Jupiter being given to find upon the globe all those places where it will be visible.*

**RULE.** Find the sun's declination for the given day, and elevate the pole to that declination; bring the place at which the hour is given to the brass meridian, and set the index of the hour circle to 12; then, if the given time be before noon, turn the globe westward as many hours as it wants of noon; if after noon, turn the globe eastward as

\* This solution is on a supposition that the moon keeps constantly in the ecliptic, which is sufficiently accurate for illustrating the problem. Otherwise the latitude and longitude of the moon, or her right ascension and declination, may be taken from the Ephemeris, at the time of full moon, and a few days preceding and following it; her place will then be truly marked on the globe.

many hours as it is past noon ; fix the globe in this position :  
 THEN,

1. *If Jupiter rise after the sun \**, that is, if he be an evening star, draw a line along the *eastern edge of the horizon* with a black lead pencil, this line will pass over all places on the earth where the sun is setting at the given hour ; turn the globe westward on its axis till as many degrees of the equator have passed under the brass meridian as are equal to the difference between the sun's and Jupiter's right ascension ; keep the globe from revolving on its axis, and elevate the pole as many degrees above the horizon as are equal to Jupiter's declination, then draw another line with a pencil along the eastern edge of the horizon : the eclipse will be visible to every place between these lines, viz. from the time of the sun's setting to the time of Jupiter's setting.

2. *If Jupiter rise before the sun †*, that is, if he be a morning star, draw a line along the *western edge of the horizon* with a black lead pencil, this line will pass over all places of the earth where the sun is rising at the given hour ; turn the globe eastward on its axis till as many degrees of the equator have passed under the brass meridian as are equal to the difference between the sun's and Jupiter's right ascension ; keep the globe from revolving on its axis, and elevate the pole as many degrees above the horizon as are equal to Jupiter's declination, then draw another line with a pencil along the western edge of the horizon : the eclipse will be visible to every place between these lines, viz. from the time of Jupiter's rising to the time of the sun's rising.

EXAMPLES. 1. On the 13th of January 1805 there was an emersion of the first satellite of Jupiter at 9 m. 3 sec. past five o'clock in the morning, at Greenwich ; where was it visible ?

*Answer.* In this example the longitude of the sun exceeds the longitude of Jupiter, therefore Jupiter was a morning star, his declination being  $19^{\circ} 16'$  S. and his longitude 7 signs  $29^{\circ} 46'$ , by the Nautical Almanac : his right ascension and the sun's right ascension may be found by the

\* Jupiter rises after the sun, when his longitude is greater than the sun's longitude.

† Jupiter rises before the sun when his longitude is less than the sun's longitude.

globe; for, if Jupiter's longitude in the ecliptic be brought to the brass meridian, his place will stand under the degree of his declination \*; and his right ascension will be found on the equator, reckoning from Aries. This eclipse was visible at Greenwich, the greater part of Europe, the west of Africa, Cape Verd Islands, &c.

2. On the 13th of February 1810, at 9 m. 54 sec. past seven o'clock in the evening, at Greenwich, there will be an emerfion of the second fatellite of Jupiter; where will the eclipse be visible? Jupiter's longitude at that time being 0 signs  $21^{\circ} 28'$ ; and his declination  $1^{\circ} 7'$  south.

3. On the 17th of March 1810, at 50 m. 34 sec. past six o'clock in the evening, at Greenwich, there will be an emerfion of the second fatellite of Jupiter; where will the eclipse be visible? Jupiter's longitude at that time being 0 signs  $27^{\circ} 18'$ ; and his declination  $1^{\circ} 1'$  south.

4. On the 30th of August 1810, at 16 min. 42 sec. past one o'clock in the morning, at Greenwich, there will be an emerfion of the first fatellite of Jupiter; where will the eclipse be visible? Jupiter's longitude at that time being 2 signs  $0^{\circ} 17'$  and his declination  $1^{\circ} 2'$  south.

5. On the 19th of August 1810, there will be an emerfion of the third fatellite of Jupiter at 26 min. 53 sec. past three o'clock in the morning, at Greenwich; where will the eclipse be visible? Jupiter's longitude at that time being 1 sign 29 deg. 44 min. and his declination 1 deg. 2 min. south.

6. On the 5th of November 1810 there will be an emerfion of the third fatellite of Jupiter at 29 min. 24 sec. past eleven o'clock in the evening, at Greenwich; where will the eclipse be visible? the longitude of Jupiter being 1 sign 29 deg. 6 min. and his declination 1 deg. 7 min. south.

---

\* This is on supposition that Jupiter moves on the ecliptic, and, as he deviates but little therefrom, the solution by this method will be sufficiently accurate. To know if an eclipse of any one of the fatellites of Jupiter will be visible at any place; we are directed by the Nautical Almanac, to "find whether Jupiter be  $8^{\circ}$  above the horizon of the place, and the sun "as much below it."

## PROBLEM LVIII.

*To place the terrestrial globe in the SUN-SHINE, so that it may represent the NATURAL POSITION of the earth.*

RULE. If you have a meridian line \* drawn upon a horizontal plane, set the north and south points of the wooden horizon of the globe directly over this line; or, place the globe directly north and south by the mariner's compass, taking care to allow for the variation; bring the place in which you are situated to the brass meridian, and elevate the pole to its latitude; then the globe will correspond in every respect with the situation of the earth itself. The poles, meridians, parallel circles, tropics, and all the circles on the globe, will correspond with the same imaginary circles in the heavens; and each point, kingdom, and state, will be turned towards the real one, which it represents.

While the sun shines on the globe, one hemisphere will be enlightened, and the other will be in the shade: thus, at one view, may be seen all places on the earth which have day, and those which have night †.

If a needle be placed perpendicularly in the middle of the enlightened hemisphere (which must of course be upon the parallel of the sun's declination for the given day), it will cast no shadow, which shews that the sun is vertical at that point; and if a line be drawn through this point from pole to pole, it will be the meridian of the place where the sun is vertical, and every place upon this line will have noon at that time; all places to the west of this line will have morning, and all places to the east of it afternoon. Those inhabitants who are situated on the circle which is the bound-

---

\* As a meridian line is useful for fixing a horizontal dial, and for placing a globe directly north and south, &c. the different methods of drawing a line of this kind will precede the problems on dialling.

† For this part of the problem it would be more convenient if the globe could be properly supported without the frame of it, because the shadow of its stand, and that of its horizon, will darken several parts of the surface of the globe, which would otherwise be enlightened.

dary between light and shade, to the westward of the meridian where the sun is vertical, will see the sun rising; those in the same circle to the eastward of this meridian will see the sun setting. Those inhabitants towards the north of the circle which is the boundary between light and shade, will perceive the sun to the southward of them, in the horizon; and those who are in the same circle towards the south, will see the sun in a similar manner to the north of them.

If the sun shine beyond the north pole at the given time, his declination is as many degrees north as he shines over the pole; and all places at that distance from the pole will have constant day, till the sun's declination decreases, and those at the same distance from the south pole will have constant night.

If the sun do not shine so far as the north pole at the given time, his declination is as many degrees south as the enlightened part is distant from the pole; and all places within the shade, near the pole will have constant night, till the sun's declination increases northward. While the globe remains steady in the position it was first placed, when the sun is westward of the meridian, you may perceive on the east side of it, in what manner the sun gradually departs from place to place as the night approaches; and, when the sun is eastward of the meridian, you may perceive on the western side of it, in what manner the sun advances from place to place as the day approaches.

### PROBLEM LIX.

*The latitude of a place being given, to find the hour of the day at any time when the SUN SHINES.*

**RULE I.** Place the north and south points of the horizon of the globe directly north and south upon a horizontal plane, by a meridian line, or by a mariner's compass, allowing for the variation, and elevate the pole to the latitude of the place; then, if the place be in north latitude, and the sun's declination be north, the sun will shine over the north pole; and if a long pin be fixed perpendicularly in the

thee

the direction of the axis of the earth, and in the centre of the hour circle, its shadow will fall upon the hour of the day, the figure XII of the hour circle being first set to the brass meridian. If the place be in north latitude, and the sun's declination be above ten degrees south, the sun will not shine upon the hour circle at the north pole.

RULE 2. Place the globe due north and south upon a horizontal plane, as before, and elevate the pole to the latitude of the place; find the sun's place in the ecliptic, bring it to the brass meridian, and set the index of the hour circle to XII; stick a needle perpendicularly in the sun's place in the ecliptic, and turn the globe on its axis till the needle casts no shadow; fix the globe in this position, and the index will shew the hour before 12 in the morning, or after 12 in the afternoon.

RULE 3. Divide the equator into 24 equal parts from the point Aries, on which place the number VI; and proceed westward VII, VIII, IX, X, XI, XII, I, II, III, IV, V, VI, which will fall upon the point Libra, VII, VIII, IX, X, XI, XII, I, II, III, IV, V\*; elevate the pole to the latitude, place the globe due north and south, upon a horizontal plane, by a meridian line, or a good mariner's compass, allowing for the variation, and bring the point Aries to the brass meridian; then observe the circle which is the boundary between light and darkness westward of the brass meridian, and it will intersect the equator in the given hour in the morning; but, if the same circle be eastward of the brass meridian, it will intersect the equator in the given hour in the afternoon.

OR, Having placed the globe upon a true horizontal plane, set it due north and south by a meridian line; elevate the pole to the latitude, and bring the point Aries to the brass meridian, as before; then tie a small string, with a noose, round the elevated pole, stretch its other end beyond the globe, and move it so that the shadow of the string

---

\* On Adams' globes the antarctic circle is thus divided, by which the problem may be solved.

may fall upon the depressed axis ; at that instant its shadow upon the equator will give the hour \*.

#### PROBLEM LX.

*To find the sun's altitude, by placing the globe in the SUN-SHINE.*

**RULE.** Place the globe upon a truly horizontal plane, stick a needle perpendicularly over the north pole †, in the direction of the axis of the globe, and turn the pole towards the sun, so that the shadow of the needle may fall upon the middle of the brass meridian ; then elevate or depress the pole till the needle casts no shadow ; for then it will point directly to the sun ; the elevation of the pole above the horizon will be the sun's altitude.

#### PROBLEM LXI.

*To find the sun's declination his place in the ecliptic, and his azimuth, by placing the globe in the SUN-SHINE.*

**RULE.** Place the globe upon a truly horizontal plane, in a north and south direction by a meridian line, and elevate the pole to the latitude of the place ; then, if the sun shine beyond the north pole, his declination is as many degrees north as he shines over the pole ; if the sun do not shine so far as the north pole, his declination is as many degrees south as the enlightened part is distant from the pole. The sun's declination being found, his place may be determined by Prob. XX.

---

\* The learner must remember that the time shewn in this problem is solar time, as shewn by a sun-dial ; and, therefore, to agree with a good clock or watch, it must be corrected by a table of equation of time. See a table of this kind among the succeeding problems.

† It would be an improvement on the globes were our instrument-makers to drill a very small hole in the brass meridian over the north pole.

Stick a needle in the parallel of the sun's declination for the given day \*, and turn the globe on its axis till the needle casts no shadow; fix the globe in this position, and screw the quadrant of altitude over the latitude; bring the graduated edge of the quadrant to coincide with the sun's place, or the point where the needle is fixed, and the degree on the horizon will shew the azimuth.

### PROBLEM LXII.

*To draw a meridian line upon a horizontal plane, and to determine the four cardinal points of the horizon.*

**RULE 1.** Describe several circles from the centre of the horizontal plane, in which centre fix a straight wire perpendicular to the plane; mark in the morning where the end of the shadow touches one of the circles; in the afternoon mark where the end of the shadow touches the same circle; divide the arch of the circle contained between these two points into two equal parts; a line drawn from the point of division to the centre of the plane will be a true meridian, or north and south line; and, if this line be bisected by a perpendicular, that perpendicular will be an east and west line: thus you will have the four cardinal points; but, to be very exact, the plane must be truly horizontal, the wire must be exactly perpendicular to the plane, and the extremity of its shadow must be compared not only upon one of the circles, as above described, but upon several of them.

**RULE 2.** Fix a strong straight wire sharp pointed at the top in the centre of your plane, nearly perpendicular; place one end of a wooden ruler on the top of the wire, and with a sharp pointed iron pin, or wire, in the other end of the ruler, describe an arch of a circle: take off the ruler from the top of the wire, and observe, at two different times of

---

\* On Adams' globes the torrid zone is divided into degrees by dotted lines, so that the parallel of the sun's declination is instantly found: in using other globes, observe the declination on the brass meridian, and stick a needle perpendicularly in the globe under that degree.

the day, when the shadow of the top of the wire falls upon the arch of the circle described by the ruler; mark the two points, and divide the arch between them into two equal parts, and draw a line from the point of bisection to the centre of your plane: this will be a meridian line.

RULE 3. Hang up a plumb-line in the sun-shine, so that it may cast a shadow, of a considerable length, upon the horizontal plane, on which you intend to draw your meridian line; draw a line along this shadow upon the plane, while at the same time a person takes the altitude of the sun correctly with a quadrant, or some other instrument answering the same purpose; then, by knowing the latitude of the place, the day of the month, and of course the sun's declination, together with his altitude; find the azimuth, from the north, by spherical trigonometry, and subtract it from  $180^\circ$ ; make an angle, at any point of the line which was drawn, upon your plane, equal to the number of degrees in the remainder, and that will point out the true meridian. See Keith's Spherical Trigonometry, page 274.

### PROBLEM LXIII.

*To make a horizontal dial for any latitude.*

DEFINITIONS AND OBSERVATIONS.—Dialling, or the art of constructing dials, is founded entirely on astronomy; and, as the art of measuring time is of the greatest importance, so the art of dialling was formerly held in the highest esteem, and the study of it was cultivated by all persons who had any pretensions to science. Since the invention of clocks and watches, dialling has not been so much attended to, though it will never be entirely neglected; for, as clocks and watches are liable to stop and go wrong, that unerring instrument, a true sun-dial, is used to correct and to regulate them.

Suppose the globe of the earth to be transparent (as represented by Fig. 4 in Plate II), with the hour circles, or meridians, &c. drawn upon it, and that it revolves round a real axis NS, which is opaque and casts a shadow; it is evident that, whenever the edge of the plane of any hour circle

circle or meridian points exactly to the sun, the shadow of the axis will fall upon the opposite hour circle or meridian. Now, if we imagine any opaque plane to pass through the centre of this transparent globe, the shadow of half the axis NE will always fall upon one side or other of this intersecting plane.

Let BCD represent the plane of the horizon of London, BN the elevation of the pole or latitude of the place; so long as the sun is above the horizon, the shadow of the upper half NE of the axis will fall somewhere upon the upper side of the plane BCD. When the edge of the plane of any hour circle, as F, G, H, I, K, L, M, O, points directly to the sun, the shadow of the axis, which axis is coincident with this plane, marks the respective hour line upon the plane of the horizon BCD; the hour line upon the horizontal plane is, therefore, a line drawn from the centre of it, to that point where this plane intersects the meridian opposite to that on which the sun shines. Thus, when the sun is upon F, the meridian of London, the shadow of NE the axis will fall upon E, XII. By the same method, the rest of the hour lines are found, by drawing, for every hour a line from the centre of the horizontal plane to that meridian, which is diametrically opposite to the meridian pointing exactly to the sun. If, when the hour circles are thus found, all the lines be taken away except the semi-axis NE, what remains will be a horizontal dial for the given place. From what has been premised, the following observations naturally arise:

1. The gnomon of every sun-dial must always be parallel to the axis of the earth, and must point directly to the two poles of the world.

2. As the whole earth is but a point when compared with the heavens, therefore, if a small sphere of glass be placed on any part of the earth's surface, so that its axis be parallel to the axis of the earth, and the sphere have such lines upon it, and such a plane within it as above described; it will shew the hour of the day as truly as if it were placed at the centre of the earth, and the body of the earth were as transparent as glass.

3. In

3. In every horizontal dial the angle which the style, or gnomon, makes with the horizontal plane, must always be equal to the latitude of the place for which the dial is made.

**RULE FOR PERFORMING THE PROBLEM.**—Elevate the pole so many degrees above the horizon as are equal to the latitude of the place; bring the point Aries to the brass meridian; then, as globes in general\* have meridians drawn through every 15 degrees of longitude, eastward and westward from the point Aries, observe where these meridians intersect the horizon, and note the number of degrees between each of them; the arches between the respective hours will be equal to these degrees. The dial must be numbered XII at the brass meridian, thence XI, X, IX, VIII, VII, VI, V, IV, &c. towards the west, for morning hours; and I, II, III, IV, V, VI, VII, VIII, &c. for evening hours. No more hour-lines need be drawn than what will answer to the sun's continuance above the horizon on the longest day at the given place. The style or gnomon of the dial must be fixed in the centre of the dial-plate, and make an angle therewith equal to the latitude of the place. The face of the dial may be of any shape, as round, elliptical, square, oblong, &c. &c.

**EXAMPLE.** To make a horizontal dial for the latitude of London.

Having elevated the pole  $51\frac{1}{2}$  deg. above the horizon, and brought the point Aries to the brass meridian, you will find the meridians on the eastern part of the horizon, reckoning from 12, to be  $11^{\circ} 50'$ ,  $24^{\circ} 20'$ ,  $38^{\circ} 3'$ ,  $53^{\circ} 35'$ ,  $71^{\circ} 6'$ , and  $90^{\circ}$ , for the hours I, II, III, IV, V, and VI; or, if you count from the east towards the south, they will be  $0^{\circ}$ ,  $18^{\circ} 54'$ ,  $36^{\circ} 25'$ ,  $51^{\circ} 57'$ ,  $65^{\circ} 40'$ , and  $78^{\circ} 10'$ , for the hours VI, V, IV, III, II, I, reckoning from VI o'clock backward to XII. There is no occasion to give the distances farther than VI, because the distances from XII to VI in the forenoon are exactly the same as from XII to VI in the afternoon; and hour-lines continued through the centre of the dial are the hours on the opposite parts thereof.

The following Table, calculated by spherical trigonometry, contains not only the hour arches, but the halves and quarters from XII to VI.

---

\* On Cary's globes, the meridians are drawn through every *ten* degrees, an alteration which answers no useful purpose whatever, and is in many cases very inconvenient. To solve this problem, by his globes, meridians must be drawn through every *fifteen* degrees with a pencil.

Hours.	Hour Angles.	Hour Arches.	Hours.	Hour Angles.	Hour Arches.
XII	0° 0'	0° 0'	3 $\frac{1}{4}$	48° 45'	41° 45'
12 $\frac{1}{4}$	3 45	2 56	3 $\frac{1}{2}$	52 30	45 34
12 $\frac{1}{2}$	7 30	5 52	3 $\frac{3}{4}$	56 15	49 30
12 $\frac{3}{4}$	11 15	8 51	IV	60 0	53 35
I	15 0	11 50	4 $\frac{1}{4}$	63 45	57 47
1 $\frac{1}{4}$	18 45	14 52	4 $\frac{1}{2}$	67 30	62 6
1 $\frac{1}{2}$	22 30	17 57	4 $\frac{3}{4}$	71 15	66 33
1 $\frac{3}{4}$	26 15	21 6	V	75 0	71 6
II	30 0	24 20	5 $\frac{1}{4}$	78 45	75 45
2 $\frac{1}{4}$	33 45	27 36	5 $\frac{1}{2}$	82 30	80 25
2 $\frac{1}{2}$	37 30	31 0	5 $\frac{3}{4}$	86 15	85 13
2 $\frac{3}{4}$	41 15	34 28	VI	90 0	90 0
III	45 0	38 3			

The calculation of the hour arches by spherical trigonometry is extremely easy; for while the globe remains in the position above described, it will be seen that a right angled spherical triangle is formed, the perpendicular of which is the latitude, its base the hour arch, and its vertical angle the hour angle. Hence,

As, radius, sine of 90°

Is to sine of the latitude;

So is the tangent of the hour angle,

To the tangent of the hour arch on the horizon.

It may be observed here, that if a horizontal dial, which shews the hour by the top of the perpendicular gnomon, be made for a place in the torrid zone, whenever the sun's declination exceeds the latitude of the place, the shadow of the gnomon will go back twice in the day, once in the forenoon and once in the afternoon; and the greater the difference between the latitude and the sun's declination is, the farther the shadow will go back. In the 38th chapter of Isaiah, *Hezekiah* is promised that his life shall be prolonged 15 years, and, as a sign of this, he is also promised that the shadow of the sun-dial of *Abaz* shall go back ten degrees. This was truly, as it was then considered, a miracle; for as *Jerusalem*, the place where the dial of *Abaz* was erected, was out of the torrid zone, the shadow could not possibly go back from any natural cause.

## PROBLEM LXIV.

*To make a vertical dial, facing the south, in north latitude.*

DEFINITIONS AND OBSERVATIONS.—The horizontal dial, as described in the preceding problem, was supposed to be placed upon a pedestal, and as the sun always shines upon such a dial when he is above the horizon, provided no objects intervene, it is the most complete of all kinds of dials. The next in utility is the vertical dial facing the south in north latitudes; that is, a dial standing against the wall of a building which exactly faces the south.

Suppose the globe to be transparent, as in the foregoing problem (see Figure 5, Plate II), with the hour circles or meridians F, G, H, I, K, L, M, O, &c. drawn upon it; ADCB an opaque vertical plane perpendicular to the horizon, and passing through the centre of the globe. While the globe revolves round its axis NS, it is evident that, if the semi-axis ES be opaque and cast a shadow, this shadow will always fall upon the plane ABC, and mark out the hours as in the preceding problem. By comparing Fig. 5. with Fig. 4, in Plate II, it will appear that the plane surface of every dial whatever, is parallel to the horizon of some place or other upon the earth, and that the elevation of the style or gnomon above the dial's surface, when it faces the south, is always equal to the latitude of the place whose horizon is parallel to that surface. Thus it appears that SP, which is the co-latitude of London, is the latitude of the place whose horizon is represented by the plane ADCB: for, let the south pole of the globe be elevated  $38\frac{1}{2}$  degrees above the southern point of the horizon, and the point Aries be brought to the brass meridian; then, if the globe be placed upon a table, so as to rest on the south point of the wooden horizon, it will have exactly the appearance of Fig. 5. Plate II.; the wooden horizon will represent the opaque plane ADCB, the south point will be at B, and the north point at D under London, the east point at C, and the west point at A. Hence we have the following

RULE

**RULE FOR PERFORMING THE PROBLEM.**—If the place be in north latitude, elevate the south pole to the complement of that latitude; bring the point Aries to the brass meridian; then, supposing meridians to be drawn through every  $15^\circ$  of longitude, eastward and westward from the point Aries (as is generally the case); observe where these meridians intersect the horizon, and note the number of degrees between each of them; the arches between the respective hours will be equal to these degrees. The dial must be numbered XII at the brass meridian, thence XI, X, IX, VIII, VII, VI, towards the west, for morning hours; and I, II, III, IV, V, VI, towards the east, for evening hours. As the sun cannot shine longer upon such a dial as this than from VI in the morning to VI in the evening, the hour-lines need not be extended any farther.

**EXAMPLE.** To make a vertical dial for the latitude of London.

Elevate the south pole  $38\frac{1}{2}$  degrees above the horizon, and bring the point Aries to the brass meridian; then the meridians will intersect the horizon, reckoning from the south towards the east, in the following degrees;  $9^\circ 28'$ ,  $19^\circ 45'$ ,  $31^\circ 54'$ ,  $47^\circ 9'$ ,  $66^\circ 42'$ , and  $90^\circ$ , for the hours I, II, III, IV, V, VI; or, if you count from the east towards the south, they will be  $0^\circ$ ,  $23^\circ 18'$ ,  $42^\circ 51'$ ,  $58^\circ 6'$ ,  $70^\circ 15'$ ,  $80^\circ 32'$ , for the hours VI, V, IV, III, II, I. The distances from XII to VI in the forenoon are exactly the same as the distances from XII to VI in the afternoon. The following table, calculated by spherical trigonometry, contains not only the hour arches, but the halves and quarters from XII to VI.

Hours.	Hour Angles.	Hour Arches.	Hours.	Hour Angles.	Hour Arches.
XII	0° 0'	0° 0'	3 $\frac{1}{4}$	48° 45'	35° 22'
12 $\frac{1}{4}$	3 45	2 20	3 $\frac{1}{2}$	52 30	39 3
12 $\frac{1}{2}$	7 30	4 41	3 $\frac{3}{4}$	56 15	42 58
12 $\frac{3}{4}$	11 15	7 3	IV	60 0	47 9
I	15 0	9 28	4 $\frac{1}{2}$	63 45	51 36
1 $\frac{1}{4}$	18 45	11 56	4 $\frac{1}{2}$	67 30	56 20
1 $\frac{1}{2}$	22 30	14 27	4 $\frac{3}{4}$	71 15	61 23
1 $\frac{3}{4}$	26 15	17 4	V	75 0	66 43
II	30 0	19 45	5 $\frac{1}{4}$	78 45	72 17
2 $\frac{1}{4}$	33 45	22 35	5 $\frac{1}{2}$	82 30	78 3
2 $\frac{1}{2}$	37 30	25 32	5 $\frac{3}{4}$	86 15	84 0
2 $\frac{3}{4}$	41 15	28 38	VI	90 0	90 0
III	45 0	31 54			

The above table is calculated exactly in the same manner as that in the preceding problem, using the complement of the latitude instead of the latitude.

The student will recollect that the time shewn by a sun-dial is not the exact time of the day, as shewn by a watch or clock (see Definitions 55, 56, and 57, page 13). A good clock measures time equally, but a sun-dial (though used for regulating clocks and watches) measures time unequally. The following table will shew to the nearest minute how much a clock should be faster or slower than a sun-dial; such a table should be put upon every horizontal sun-dial.

Days and Months.	Minutes.	Days and Months.	Minutes.	Days and Months.	Minutes.	Days and Months.	Minutes.
Jan. 1	4	April 1	4	Aug. 9	5	27	16
3	5	4	3	15	4	Nov. 15	15
5	6	7	2	20	3	20	14
7	7	11	1	24	2	24	13
9	8	15	0	28	1	27	12
12	9	*		31	0	30	11
15	10	19	1	*		Dec. 2	10
18	11	24	2	Sept. 3	1	5	9
21	12	30	3	6	2	7	8
25	13	May 13	4	9	3	9	7
31	14	29	3	12	4	11	6
Feb. 10	15	June 5	2	15	5	13	5
21	14	10	1	18	6	16	4
27	13	15	0	21	7	18	3
Mar. 4	12	*		24	8	20	2
8	11	20	1	27	9	22	1
12	10	25	2	30	10	24	0
15	9	29	3	Oct. 3	11	*	
19	8	July 5	4	6	12	26	1
22	7	11	5	10	13	28	2
25	6	28	6	14	14	30	3
28	5			19	15		

Dials may be constructed on all kinds of planes, whether horizontal or inclined: a vertical dial may be made to face the south, or any point of the compass; but the two dials already described are the most useful. To acquire a complete knowledge of dialling, the gnomonical projection of the sphere, and the principles of spherical trigonometry, must be thoroughly understood; these preliminary branches may be learned from Emerson's Gnomonical Projection, and Keith's Trigonometry. The writers on dialling are very numerous; the last and best treatise on the subject is Emerson's.

## CHAPTER II.

*Problems performed by the Celestial Globe.*

## PROBLEM LXV.

*To find the right ascension and declination of the sun \*, or a star.*

**RULE.** Bring the sun or star to that part of the brass meridian which is numbered from the equator towards the poles; the degree on the brass meridian is the declination, and the number of degrees on the equinoctial, between the brass meridian and the point Aries, is the right ascension.

**OR,** Place both the poles of the globe in the horizon, bring the sun or star to the eastern part of the horizon; then the number of degrees which the sun or star is northward or southward of the east, will be the declination north or south; and the degrees on the equinoctial, from Aries to the horizon, will be the right ascension.

**EXAMPLES.** 1. Required the right ascension and declination of  $\alpha$  *Dubhe*, in the back of the Great Bear?

*Answer.* Right Ascension  $162^{\circ} 49'$ , declination  $62^{\circ} 48'$  N.

2. Required the right ascensions and declinations of the following stars?

$\gamma$ , *Algenib*, in Pegafus.

$\alpha$ , *Scheder*, in Cassiopeia.

$\beta$ , *Mirach*, in Andromeda.

$\alpha$ , *Achernar*, in Eridanus.

$\alpha$ , *Menkar*, in Cetus.

$\beta$ , *Algol*, in Perseus.

$\alpha$ , *Aldebaran*, in Taurus.

$\alpha$ , *Capella*, in Auriga.

$\beta$ , *Rigel*, in Orion.

$\gamma$ , *Bellatrix*, in Orion.

$\alpha$ , *Betelguese*, in Orion.

$\alpha$ , *Canopus*, in Argo Navis.

$\alpha$ , *Procyon*, in the Little Dog.

$\gamma$ , *Algorab*, in the Crow.

$\alpha$ , *Arcturus*, in Boötes.

$\epsilon$ , *Vendemiatrix*, in Virgo.

---

\* The right ascensions and declinations of the moon and the planets, must be found from an ephemeris; because, by their continual change of situation, they cannot be placed on the celestial globe, as the stars are placed.

## PROBLEM LXVI.

To find the latitude and longitude of a star\*.

RULE. Place the upper end of the quadrant of altitude on the north or south pole of the ecliptic, according as the star is on the north or south side of the ecliptic, and move the other end till the star comes to the graduated edge of the quadrant; the number of degrees between the ecliptic and the star is the latitude; and the number of degrees on the ecliptic, reckoned eastward from the point Aries to the quadrant, is the longitude.

OR, Elevate the north or south pole  $66\frac{1}{2}^{\circ}$  above the horizon, according as the given star is on the north or south side of the ecliptic; bring the pole of the ecliptic to that part of the brass meridian which is numbered from the equinoctial towards the pole; then the equinoctial will coincide with the horizon; screw the quadrant of altitude upon the brass meridian over the pole of the ecliptic; keep the globe from revolving on its axis, and move the quadrant till its graduated edge comes over the given star: the degree on the quadrant cut by the star is its latitude; and the sign and degree on the ecliptic cut by the quadrant shew its longitude.

EXAMPLES. 1. Required the latitude and longitude of  $\alpha$  Aldebaran in Taurus?

Answer. Latitude  $5^{\circ} 28'$  S. longitude 2 signs  $6^{\circ} 53'$ ; or  $6^{\circ} 53'$  in Gemini.

2. Required the latitudes and longitudes of the following stars?

$\alpha$ , Markab, in Pegafus.		$\alpha$ , Vega, in Libra.
$\beta$ , Scheat, in Pegafus.		$\gamma$ , Rastaben, in Draco.
$\alpha$ , Fomalhaut, in the S. Fish.		$\alpha$ , Antares, in the Scorpion.
$\alpha$ , Deneb, in Cygnus.		$\alpha$ , Arcturus, in Boötes.
$\alpha$ , Altair, in the Eagle.		$\beta$ , Pollux, in Gemini.
$\beta$ , Albirco, in Cygnus.		$\beta$ , Rigel, in Orion.

\* The latitudes and longitudes of the planets must be found from an ephemeris.

A TABLE of the right Ascensions, Declinations, Latitudes, and Longitudes of some of the principal Fixed-Stars, for the year 1800\*.

Names of the Stars.	Rt. Ascen.	Declinat.	Latitude.	Longitude.
Regulus, Lion's Heart.	149° 25'	12° 56' N.	0° 28' N.	4° 26' 57'
β Lion's Tail, - -	174 42	15 44 N.	12 17 N.	5 18 44
Aldebaran in Taurus, -	66 6	16 5 N.	5 29 S.	2 6 53
Rigel, Orion's Foot, -	76 9	8 27 S.	31 8 S.	2 13 56
Capella, Auriga's Shoulder,	75 29	45 47 N.	22 52 N.	2 18 58
Betelgeuse, Orion's Shoulder,	86 5	7 21 N.	16 3 S.	2 25 52
Sirius, Canis Major. -	99 5	16 26 S.	39 33 S.	3 11 14
Castor, - - -	110 27	32 19 N.	10 4 N.	3 17 22
Procyon, Canis Minor, -	112 12	5 44 N.	15 58 S.	3 22 56
Spica Virginis, - - -	198 40	10 7 S.	2 3 S.	6 20 57
β Virginis, - - -	175 4	2 54 N.	0 42 N.	5 24 14
Arcturus, Boötes, - -	211 38	20 15 N.	30 52 N.	6 21 21
α Alphacca, N. Crown, -	231 31	27 25 N.	44 21 N.	7 9 22
Antares, Scorpion's Heart,	244 17	25 58 S.	4 33 S.	8 6 52
Vega, in the Harp, - -	277 32	38 36 N.	61 44 N.	9 12 24
Altair, in the Eagle, -	295 15	8 21 N.	29 18 N.	9 28 51
β Aquilæ, - - -	296 22	5 55 N.	26 43 N.	9 29 33
Fomalhaut, S. Fish, - -	341 38	30 41 S.	21 6 S.	11 0 57
Deneb, the Swan, - - -	308 39	44 34 N.	59 55 N.	11 2 29
γ Pegasi, - - -	0 39	14 4 N.	12 35 N.	0 6 16
α Head of Andromeda, -	359 32	27 59 N.	25 41 N.	0 11 25

### PROBLEM LXVII.

*The right ascension and declination of a star, the moon, a planet, or of a comet, being given, to find its place on the globe.*

**RULE.** Bring the given degrees of right ascension to that part of the brass meridian which is numbered from the equinoctial towards the poles; then, under the given declination on the brass meridian, you will find the star, or place of the planet.

**EXAMPLES.** I. What star has  $261^{\circ} 29'$  of right ascension, and  $52^{\circ} 27'$  north declination?

*Answer.* β in Draco.

\* The places of the stars on our newest globes are calculated for the year 1800.

2. On the 20th of August 1805, the moon's right ascension was  $91^{\circ} 3'$ , and her declination  $24^{\circ} 48'$ ; find her place on the globe at that time?

*Answer.* In the milky way, a little above the left foot of Castor.

3. What stars have the following right ascensions and declinations?

Right Ascensions.	Declinations.	Right Ascensions.	Declinations.
$7^{\circ} 19'$	$55^{\circ} 26' N.$	$83^{\circ} 6'$	$34^{\circ} 11' S.$
11 11	59 38 N.	86 13	44 55 N.
25 54	19 50 N.	99 5	16 26 S.
46 32	9 34 S.	110 27	32 19 N.
53 54	23 29 N.	113 16	28 30 N.
76 14	8 27 S.	129 2	7 8 N.

4. On the first of December 1810, the moon's right ascension will be  $320^{\circ} 28'$ , and her declination  $11^{\circ} 45' S.$ ; find her place on the globe?

5. On the first of May 1805, the declination of Venus was  $11^{\circ} 41' N.$ , and her right ascension  $31^{\circ} 30'$ ; find her place on the globe?

6. On the 19th of January 1805 the declination of Jupiter was  $19^{\circ} 29'$  south, and his right ascension  $238^{\circ}$ ; find his place on the globe?

PROBLEM LXVIII.

*The latitude and longitude of the moon, a star, or a planet given, to find its place on the globe.*

**RULE.** Place the division of the quadrant of altitude marked o, on the given longitude in the ecliptic, and the upper end on the pole of the ecliptic; then under the given latitude, on the graduated edge of the quadrant, you will find the star, or place of the moon, or planet.

**EXAMPLES.** 1. What star has o signs  $6^{\circ} 16'$  of longitude, and  $12^{\circ} 36' N.$  latitude?

*Answer.*  $\gamma$  in Pegasus.

2. On the 5th of June 1810 at midnight, the moon's longitude will be  $3s. 26^{\circ} 32'$ , and her latitude  $4^{\circ} 55' S.$ ; find her place on the globe?

N 5

3. What

3. What stars have the following latitudes and longitudes?

Latitudes.	Longitudes.	Latitudes.	Longitudes.
12° 35' S.	1 <sup>s</sup> 11° 25'	39° 33' S.	3 <sup>s</sup> 11° 13'
5 29 N.	2 6 53	10 4 N.	3 17 21
31 8 S.	2 13 56	0 27 N.	4 26 57
22 52 N.	2 18 57	44 20 N.	7 9 22
16 3 S.	2 25 51	21 6 S.	11 0 56

4. On the first of June 1810, the longitudes and latitudes of the planets will be as follow; required their places on the globe?

	Longitudes.	Latitudes.		Longitudes.	Latitudes.
♃	3° 1' 55'	0° 58' N.	♃	1° 15' 47'	0° 56' S.
♄	3 0 27	1 5 N.	♄	8 12 20	1 47 N.
♅	2 14 7	0 32 N.	♅	7 11 6	0 24 N.

#### PROBLEM LXIX.

*The day and hour, and the latitude of a place being given, to find what stars are rising, setting, culminating, &c.*

**RULE.** Elevate the pole to the latitude of the place find the sun's place in the ecliptic, bring it to the brass meridian, and set the index of the hour circle to 12; then, if the time be before noon, turn the globe eastward on its axis till the index has passed over as many hours as the time wants of noon; but, if the time be past noon, turn the globe westward till the index has passed over as many hours as the time is past noon: then all the stars on the eastern semi-circle of the horizon will be rising, those on the western semi-circle will be setting, those under the brass meridian above the horizon will be culminating, those above the horizon will be visible at the given time and place, those below will be invisible. If the globe be turned on its axis from east to west, those stars which do not go below the horizon never set at the given place; and those which do not come above the horizon never rise; or, if the given latitude

tude be subtracted from 90 degrees, and circles be described on the globe, parallel to the equinoctial, at a distance from it equal to the degrees in the remainder, they will be the circles of perpetual apparition and occultation.

EXAMPLES. 1. On the 9th of February, when it is nine o'clock in the evening at London, what stars are rising, what stars are setting, and what stars are on the meridian?

*Answer.* Alphacca in the northern Crown is rising; Arcturus and Mirach in Boötes just above the horizon; Sirius on the meridian; Proctyon and Castor and Pollux a little east of the meridian. The constellations Orion, Taurus, and Auriga, a little west of the meridian; Markab; in Pegasus, just below the western edge of the horizon, &c.

2. On the 20th of January, at two o'clock in the morning at London, what stars are rising, what stars are setting, and what stars are on the meridian?

*Answer.* Vega in Lyra, the head of the Serpent, Spica Virginis, &c. are rising; the head of the great Bear, the claws of Cancer, &c. on the meridian; the head of Andromeda, the neck of Cetus, and the body of Columba Noachi, &c. are setting.

3. At ten o'clock in the evening at Edinburgh, on the 15th of November, what stars are rising, what stars are setting, and what stars are on the meridian?

4. What stars do not set in the latitude of London, and at what distance from the equinoctial is the circle of perpetual apparition?

5. What stars do not rise to the inhabitants of Edinburgh, and at what distance from the equinoctial is the circle of perpetual occultation?

6. What stars never rise at Otaheite, and what stars never set at Jamaica?

7. How far must a person travel southward from London to lose sight of the Great Bear?

8. What stars are continually above the horizon at the north pole, and what stars are constantly below the horizon thereof?

## PROBLEM LXX.

*The latitude of a place, day of the month, and hour being given, to place the globe in such a manner as to represent the heavens at that time; in order to find out the relative situations and names of the constellations and remarkable stars.*

RULE. Take the globe out into the open air, on a clear star-light night, where the surrounding horizon is uninterrupted by different objects; elevate the pole to the latitude of the place, and set the globe due north and south by a meridian line, or by a mariner's compass, taking care to make a proper allowance for the variation; find the sun's place in the ecliptic, bring it to the brass meridian, and set the index of the hour circle to 12; then, if the time be after noon, turn the globe westward on its axis till the index has passed over as many hours as the time is past noon; but, if the time be before noon, turn the globe eastward till the index has passed over as many hours as the time wants of noon: fix the globe in this position, then the flat end of a pencil being placed on any star on the globe, so as to point towards the centre, the other end will point to that particular star in the heavens.

## PROBLEM LXXI.

*To find when any star, or planet, will rise, come to the meridian, and set at any given place.*

RULE. Elevate the pole so many degrees above the horizon as are equal to the latitude of the place; find the sun's place in the ecliptic, bring it to the brass meridian, and set the index of the hour circle to 12; bring the star (or the planet's place \*) to the eastern part of the horizon, and the hours between the sun's place and the brass meri-

---

\* The latitude and longitude (or the right ascension and declination) of the planet, must be taken from an ephemeris, and its place on the globe must be determined by Prob. LXVIII (or LXVII).

dian will be the time from noon when the star or planet rises. If the sun's place be to the east of the brass meridian, the star or planet will rise before noon; if the sun's place be to the west of the brass meridian, the star or planet will rise after noon. In a similar manner, by bringing the star or planet to the meridian, and western part of the horizon, you will have the times of its culminating and setting.

EXAMPLES. 1. At what time will Arcturus rise, come to the meridian, and set at London, on the 7th of September?

*Answer.* It will rise at seven o'clock in the morning, come to the meridian at three in the afternoon, and set at eleven o'clock at night.

2. On the first of August 1805 the longitude of Jupiter was 7 signs 26 deg. 34 min., and his latitude 45 min. N.; at what time did he rise, culminate, and set, at Greenwich, and whether was he a morning or an evening star?

*Answer.* Jupiter rose at half past two in the afternoon, came to the meridian at about ten minutes to seven, and set at a quarter past eleven in the evening. Here Jupiter was an evening star, because he set after the sun.

3. At what time does Sirius rise, set, and come to the meridian of London, on the 31st of January?

4. On the 1st of January 1810, the longitude of Venus will be 8 signs 22 deg. 54 min. and her latitude 0 deg. 26 min. N.; at what time will she rise, culminate, and set at Greenwich, and whether will she be a morning or an evening star?

5. At what time does Aldebaran rise, come to the meridian, and set at Dublin, on the 25th of November?

6. On the first of February 1810, the longitude of Mars will be 11 signs 16 deg. 9 min., and latitude 0 deg. 46 min. S. at what time will he rise, set, and come to the meridian of Greenwich?

## PROBLEM LXXII.

*To find the amplitude of any star, its oblique ascension and descension, and its diurnal arch, for any given day.*

**RULE.** Elevate the pole to the latitude of the place, and bring the given star to the eastern part of the horizon; then the number of degrees between the star and the eastern point of the horizon will be its rising amplitude; and the degree of the equinoctial cut by the horizon will be the oblique ascension: set the index of the hour circle to 12, and turn the globe westward till the given star comes to the western edge of the horizon; the hours passed over by the index will be the star's diurnal arch, or continuance above the horizon. The setting amplitude will be the number of degrees between the star and the western point of the horizon, and the oblique descension will be represented by that degree of the equinoctial which is intersected by the horizon, reckoning from the point Aries.

**EXAMPLES.** 1. Required the rising and setting amplitude of Sirius, its oblique ascension, oblique descension, and diurnal arch, at London?

*Answer.* The rising amplitude is 27 deg to the south of the east; setting amplitude 27 deg. south of the west; oblique ascension 120 deg.; oblique descension 77 deg.; and diurnal arch 9 hours 6 minutes.

2. Required the rising and setting amplitude of Aldebaran, its oblique ascension, oblique descension, and diurnal arch, at London?

3. Required the rising and setting amplitude of Arcturus, its oblique ascension, oblique descension, and diurnal arch, at London?

4. Required the rising and setting amplitude of  $\gamma$  Bellatrix, its oblique ascension, oblique descension, and diurnal arch, at London?

## PROBLEM LXXIII.

*The latitude of a place given, to find the time of the year at which any known star rises or sets ACHRONICALLY, that is when it rises or sets at sun setting.*

**RULE.** Elevate the pole to the latitude of the place, bring the given star to the eastern edge of the horizon, and observe what degree of the ecliptic is intersected by the western edge of the horizon, the day of the month answering to that degree will shew the time when the star rises at sun-set, and consequently when it begins to be *visible in the evening*. Turn the globe westward on its axis till the star comes to the western edge of the horizon, and observe what degree of the ecliptic is intersected by the horizon, as before; the day of the month answering to that degree will shew the time when the star sets with the sun, or when it *ceases to appear in the evening*.

**EXAMPLES.** I. At what time does Arcturus rise achronically at Ascra \* in Bœotia, the birth place of Hesiod; the latitude of Ascra, according to Ptolemy, being 37 deg. 45 min. N. ?

*Answer.* When Arcturus is at the eastern part of the horizon, the eleventh degree of Aries will be at the western part answering to the first of April †, the time when Arcturus rises achronically: and it will set achronically on the 30th of November.

\* See page 15.

† Hence Arcturus now rises achronically in latitude 37° 45' N. about 100 days after the winter solstice. Hesiod, in his *Opera & Dies*, lib. ii. versè 185, says:

When from the solstice sixty wintry days  
Their turns have finished, mark, with glitt'ring rays,  
From Ocean's sacred flood, *Arcturus* rise,  
Then first to gild the dusky evening skies.

Here is a difference of 40 days in the achronical rising of this star (supposing Hesiod to be correct) between the time of Hesiod and the present time; and as a day answers to about 59' of the ecliptic (see the note page 14), 40 days will answer to 39 deg.; consequently, the winter solstice in the time of Hesiod was in the 9th deg. of Aquarius. Now, the recession of the equinoxes is about  $50\frac{1}{4}''$  in a year; hence

2. At what time of the year does Aldebaran rise achronically at Athens, in 38 deg. N. latitude; and at what time of the year does it set achronically?

3. On what day of the year does  $\gamma$  in the extremity of the wing of Pegafus rise achronically at London; and on what day of the year does it set achronically?

4. On what day of the year does  $\epsilon$  in the right foot of Lepus rise achronically at London; and on what day of the year does it set achronically?

#### PROBLEM LXXIV.

*The latitude of a place given, to find the time of the year at which any known star rises or sets COSMICALLY, that is when it rises or sets at sun-rising.*

RULE. Elevate the pole to the latitude of the place, bring the given star to the eastern edge of the horizon, and observe what sign and degree of the ecliptic are intersected by the horizon; the month and day of the month, answering to that sign and degree, will shew the time when the star rises with the sun. Turn the globe westward on its axis till the star comes to the western edge of the horizon, and observe what sign and degree of the ecliptic are intersected by the eastern edge, as before; these will point out on the horizon, the time when the star sets at sun-rising.

EXAMPLES. I. At what time of the year do the Pleiades set cosmically at Miletus in Ionia, the birth-place of Thales; and at what time of the year do they rise cosmically; the latitude of Miletus, according to Ptolemy, being 37 deg. N.?

*Answer.* The Pleiades rise with the sun on the 10th of May, and they set at the time of sun-rising on the 22d of November\*.

2. At

---

$50\frac{1}{4}'' : 1 \text{ year} :: 39^\circ : 2794 \text{ years}$  since the time of Hesiod; so that he lived 990 years before Christ, by this mode of reckoning. Lempriere, in his Classical Dictionary, says Hesiod lived 907 years before Christ.

\* Pliny says (Nat. Hist. lib. xviii. cap. 25.) that Thales determined the cosmical setting of the Pleiades to be twenty-five days after the autumnal equinox. Supposing this observation to be made at Miletus, there will

2. At what time of the year does Sirius rise with the sun at London; and at what time of the year will Sirius set when the sun rises?

3. At what time of the year does Menkar, in the jaw of Cetus, rise with the sun, and at what time does it set at sun-rising, at London?

4. At what time of the year does Procyon, in the Little Dog's stomach, set when the sun rises at London, and at what time of the year does it rise with the sun?

### PROBLEM LXXV.

*To find the time of the year when any given star rises or sets HELIACALLY \**

**RULE.** The heliacal rising and setting of the stars will vary according to their different degrees of magnitude and brilliancy; for it is evident that, the brighter a star is when above the horizon, the less the sun will be depressed below the horizon when that star first becomes visible. According to Ptolemy, stars of the *first* magnitude are seen rising and setting when the sun is twelve degrees below the horizon; stars of the *second* magnitude require the sun's depression to be thirteen degrees; stars of the *third* magnitude fourteen degrees, and so on, reckoning one degree for each magnitude. This being premised:

---

will be a difference of thirty-five days in the cosmical setting of this star since the time of Thales; and, as a day answers to about  $59'$  of the ecliptic, these days will make about  $34^{\circ} 25'$ ; consequently, in the time of Thales, the autumnal equinoctial colure passed through  $4^{\circ} 35'$  of Scorpio; and, as before,  $50\frac{1}{4}'' : 1 \text{ year} :: 34^{\circ} 25' : 2465 \text{ years}$  since the time of Thales, so that Thales lived ( $2465 - 1804$ ), 661 years before the birth of Christ. According to Sir I. Newton's Chronology, Thales flourished 596 before Christ. Thales was well skilled in geometry, astronomy, and philosophy; he measured the height and extent of the Pyramids of Egypt, was the first who calculated with accuracy, a solar eclipse: he discovered the solstices and equinoxes, divided the heavens into five zones, and recommended the division of the year into 365 days. Miletus was situated in Asia Minor, south of Ephesus, and south east of the island of Samos.

\* See Definition 89, page 23.

**TO SOLVE THE PROBLEM.** Elevate the pole so many degrees above the horizon as are equal to the latitude of the place, and screw the quadrant of altitude on the brass meridian over that latitude; bring the given star to the eastern edge of the horizon, and move the quadrant of altitude till it intersects the ecliptic twelve degrees below the horizon, if the star be of the first magnitude; thirteen degrees, if the star be of the second magnitude; fourteen degrees if it be of the third magnitude &c.: the point of the ecliptic, cut by the quadrant, will shew the day of the month, on the horizon, when the star rises heliacally. Bring the given star to the western edge of the horizon, and move the quadrant of altitude till it intersects the ecliptic below the western edge of the horizon, in a similar manner as before; the point of the ecliptic, cut by the quadrant will shew the day of the month, on the horizon, when the star sets heliacally.

**EXAMPLES.** 1. At what time does  $\beta$  Tauri, or the bright star in the Bull's Horn, of the second magnitude, rise and set heliacally at Rome?

*Answer.* The quadrant will intersect the 3d of Cancer 13 deg. below the eastern horizon, answering to the 24th of June; and the 7th of Gemini. 13 deg. below the western horizon, answering to the 28th of May.

2. At what time of the year does Sirius, or the Dog Star, rise heliacally at Alexandria in Egypt; and at what time does it set heliacally at the same place?

*Answer.* The latitude of Alexandria is 31 deg. 13 min. north; the quadrant will intersect the 12th of Leo, 12 deg. below the eastern horizon, answering to the 4th of August\*; and the 2d of Gemini, 12 deg. below the western horizon, answering to the 23d of May.

3. At

---

\* The ancients reckoned the beginning of the *Dog Days* from the heliacal rising of Sirius, and their continuance to be about 40 days. Hesiod informs us that the hottest season of the year (*Dog Days*) ended about 50 days after the summer solstice. We have determined in the note of Example 1. Prob. LXXI. (though perhaps not very accurately), that the winter solstice, in the time of Hesiod, was in the 9th degree of Aquarius; consequently, the summer solstice was in the 9th degree of Leo: now, it appears from above, that Sirius rises heliacally at Alexandria when the sun is in the 12th degree of Leo; and, as a degree nearly answers to a day, Sirius rose heliacally, in the time of Hesiod, about four days after the summer solstice; and, if the *Dog Days* continued forty days, they ended

3. At what time of the year does Arcturus rise heliacally at Jerufalem, and at what time does it fet heliacally ?

4. At what time of the year does Cor Hydræ rise and fet heliacally at London ?

5. At what time of the year does Procyon rise and fet heliacally at London ?

6. If the precession of the equinoxes be  $50\frac{1}{4}$  feconds in a year, how many years will elapfe, from 1808, before Sirius, the Dog Star, will rise heliacally at Christmas, at Cairo in Egypt ? When this period happens, Sirius will perhaps no longer be accused of bringing fultry weather.

### PROBLEM LXXVI.

*The latitude of a place and day of the month being given, to find all thofe ftars that rife and fet ACHRONICALLY, COSMICALLY, and HELIACALLY\*.*

RULE. Elevate the pole fo many degrees above the horizon as are equal to the latitude of the given place. Then,

1. For

---

<sup>e</sup>nded about forty-four days after the fummer folftice. The Dog Days, in our almanacs, begin on the third of July, which is twelve days after the fummer folftice, and end on the eleventh of Auguft, which is fifty-one days after the fummer folftice ; and their continuance is thirty-nine days. Hence it is plain, that the Dog Days of the moderns have no reference whatever to the riling of Sirius, for this ftar riles heliacally at London on the twenty-fifth of Auguft, and, as well as the reft of the ftars, varies in its riling and fetting according to the variation of the latitudes of places, and therefore it could have no influence whatever on the temperature of the atmofphere ; yet, as the Dog Star rofe heliacally at the commencement of the hotteft feafon in Egypt, Greece, &c. in the earlier ages of the world, it was very natural for the ancients to imagine that the heat, &c. was the effect of this ftar. A few years ago, the Dog Days in our almanacs began at the *cofmical* riling of Procyon, viz. on the 30th of July, and continued to the 7th of September ; but they are now, very properly, altered, and made not to depend on the variable riling of any particular ftar, but on the fummer folftice.

\* This problem is the reverse of the three preceding problems. Their principal ufe is to illustrate feveral paffages in the ancient writers, fuch as Hefiod, Virgil, Columella, Ovid, Pliny, &c. See Definition 64, page 15.

1. *For the achronical rising and setting*, find the sun's place in the ecliptic, and bring it to the *western* edge of the horizon, and all the stars along the eastern edge of the horizon will rise achronically, while those along the western edge will set achronically.

2. *For the cosmical rising and setting*, bring the sun's place to the *eastern* edge of the horizon, and all the stars along that edge of the horizon will rise cosmically, while those along the western edge will set cosmically.

3. *For the heliacal rising and setting*, screw the quadrant of altitude over the latitude, turn the globe eastward on its axis till the sun's place cuts the quadrant twelve degrees below the horizon; then all stars of the first magnitude, along the eastern edge of the horizon, will rise heliacally; and, by continuing the motion of the globe eastward till the sun's place intersects the quadrant in 13, 14, 15, &c. degrees below the horizon, you will find all the stars of the *second, third, fourth, &c.* magnitudes, which rise heliacally on that day. By turning the globe westward on its axis, in a similar manner, and bringing the quadrant to the western edge of the horizon, you will find all the stars that set heliacally.

EXAMPLES. 1. What stars rise and set cosmically at Edinburgh, on the 11th of June?

*Answer.* The bright star in Castor, Aldebaran in Taurus, Fomalhaut in the Southern Fish, &c. rise cosmically; those stars in the body of Leo Minor, the arm of Virgo, the right foot of Boötes, part of the Centaur, &c. set cosmically.

---

The knowledge of these poetical risings and settings of the stars was held in great esteem among the ancients, and was very useful to them in adjusting the times set apart for their religious and civil duties, and for marking the seasons proper for the several parts of husbandry; for the knowledge which the ancients had of the motions of the heavenly bodies was not sufficient to adjust the true length of the year; and, as the returns of the seasons depend upon the approach of the sun to the tropical and equinoctial points, so they made use of these risings and settings to determine the commencement of the different seasons, the time of the overflowing of the Nile, &c. The knowledge which the moderns have acquired of the motions of the heavenly bodies renders such observations as the ancients attended to in a great measure useless, and, instead of watching the rising and setting of particular stars for any remarkable season, they can sit by the fire-side and consult an almanac.

2. What

2. What stars rise and set achronically at Drontheim in Norway, latitude  $63^{\circ} 26'$  N. on the 18th of May?

*Answer.* Altair in the Eagle, the head of the Dolphin, &c. rise achronically; and Aldebaran in Taurus, Betelgeuse in Orion, &c. set achronically.

3. What star of the first magnitude rises heliacally at London, on the 7th of October?

*Answer.* Arcturus in Boötes.

4. What star of the first magnitude sets heliacally at London, on the 5th of May?

*Answer.* Sirius the Dog Star.

5. What stars rise and set achronically at London, on the 26th of September?

6. What stars rise and set cosmically at London, on the 23d of March?

### PROBLEM LXXVII.

*To illustrate the precession of the equinoxes.*

**OBSERVATIONS.** All the stars in the different constellations continually increase in longitude; consequently either the whole starry heavens has a slow motion from west to east, or the equinoctial points have a slow motion from east to west. In the time of Meton\*, the first star in the constellation Aries, now marked  $\beta$ , passed through the vernal equinox, whereas it is now upwards of  $30^{\circ}$  † degrees to the eastward of it.

**ILLUSTRATION.** Elevate the north pole 90 degrees above the horizon, then will the equinoctial coincide with

\* Meton was a famous mathematician of Athens, who flourished about 430 years before Christ. In a book called *Enneadecaterides*, or cycle of 19 years he endeavoured to adjust the course of the sun and of the moon; and attempted to shew that the solar and lunar years could regularly begin from the same point in the heavens,

† If the precession of the equinoxes be  $50\frac{1}{4}''$  in a year, and if the equinoctial colure passed through  $\beta$  Arietis, 430 years before Christ, the longitude of this star ought now (1804) to be  $31^{\circ} 10' 58''$ , for 1 year:  $50\frac{1}{4}''$  :: 2234 years ( $= 430 \times 1804$ ):  $31^{\circ} 10' 58'$ , and this longitude is not far from the truth.

the horizon; bring the pole\* of the ecliptic to that part of the brass meridian which is numbered from the north pole towards the equinoctial, and make a mark upon the brass meridian above it; let this mark be considered as the pole of the world, let the equinoctial represent the ecliptic, and let the ecliptic be considered as the equinoctial; then count  $38\frac{1}{2}$  degrees, the complement of the latitude of London, from this pole upwards, and mark where the reckoning ends, which will be at 75 degrees, on the brass meridian, from the southern point of the horizon; this mark will stand over the latitude of London.

Now turn the globe gently on its axis from east to west, and the equinoctial points will move the same way, while at the same time, the pole of the world † will describe a circle round the pole of the ecliptic ‡ of  $46^{\circ} 56'$  in diameter; this circle will be completed in a Platonic || year, consisting of 25,791 years, at the rate of  $50\frac{1}{4}$  seconds in a year, and the pole of the heavens will vary its situation a small matter every year. When  $12,895\frac{1}{2}$  years, being half the Platonic year, are completed (which may be known by turning the globe half round, or till the point Aries coincides with the eastern point of the horizon), that point of the heavens which is now  $8\frac{1}{2}$  degrees south of the zenith of London will be the north pole, as may be seen by referring to the mark which was made over 75 degrees on the meridian.

\* The pole of the ecliptic is that point on the globe where the circular lines meet.

† Let it be remembered that the pole of the ecliptic on the globe here represents the pole of the world.

‡ Take notice, that the extremity of the globe's axis here represents the pole of the ecliptic.

|| A Platonic year is a period of time determined by the revolution of the equinoxes: this period being once completed, the ancients were of opinion that the world was to begin anew, and the same series of things to return over again. See the 64th Definition, page 15.

## PROBLEM LXXVIII.

*To find the distances of the stars from each other in degrees.*

**RULE.** Lay the quadrant of altitude over any two stars, so that the division marked 0 may be on one of the stars; the degrees between them will shew their distance, or the angle which these stars subtend, as seen by a spectator on the earth.

**EXAMPLES.** 1. What is the distance between Vega in Lyra, and Altair in the Eagle?

*Answer.* 34 degrees.

2. Required the distance between  $\beta$  in the Bull's Horn, and  $\gamma$  Bellatrix in Orion's shoulder?

3. What is the distance between  $\beta$  in Pollux, and  $\alpha$  in Procyon?

4. What is the difference between  $\eta$ , the brightest of the Pleiades, and  $\beta$  in the Great Dog's Foot?

5. What is the distance between  $\delta$  in Orion's girdle, and  $\delta$  in Cetus?

6. What is the distance between Arcturus in Bootes, and  $\beta$  in the right shoulder of Serpentarius?

## PROBLEM LXXIX.

*To find what stars lie in or near the moon's path, or what stars the moon can eclipse, or make a near approach to.*

**RULE.** Find the moon's longitude and latitude, or her right ascension and declination, in an ephemeris, for several days, and mark the moon's places on the globe (as directed in Problems LXVIII or LXVII); then by laying a thread over the quadrant of altitude, over these places, you will see nearly the moon's path\*, and, consequently, what stars lie in her way.

**EXAM.**

---

\* The situation of the moon's orbit for any particular day may be found thus: find the place of the moon's ascending node in the Ephemeris, mark that place and its antipodes (being the descending node) on the globe;

EXAMPLES. 1. What stars were in, or near, the moon's path, on the 10th, 11th, 13th, and 16th of December 1805.

10th,	☾'s longitude	♈	20°	12'	latitude	3°	34'	S.
11th,	-	-	♌	4	22	-	-	4 25 S.
13th,	-	-	♍	1	39	-	-	5 15 S.
16th,	-	-	♎	10	11	-	-	4 26 S.

*Answer.* The stars will be found to be Cor Leonis or Regulus, Spic<sup>a</sup> Virginis,  $\alpha$  in Libra, &c. See page 47 White's Ephemeris.

2. On the 16th, 17th, 18th, and 19th of May 1810, what stars will lie near the moon's way?

16th,	☾'s right ascension,	206°	47'	declination	9°	42'	S.
17th,	-	-	-	220	43	-	13 14 S.
18th,	-	-	-	235	22	-	16 3 S.
19th,	-	-	-	250	38	-	17 53 S.

#### PROBLEM LXXX.

*Given the latitude of the place and the day of the month, to find what planets will be above the horizon after sun setting.*

RULE. Elevate the pole so many degrees above the horizon as are equal to the latitude of the place; find the sun's place in the ecliptic, and bring it to the western part of the horizon, or to ten or twelve degrees below; then look in the Ephemeris for that day and month, and you will find what planets are above the horizon, such planets will be fit for observation on that night.

EXAMPLES. 1. Were any of the planets visible after the sun had descended ten degrees\* below the horizon of

---

globe; half the way between these points make marks 5° 20' on the north and south side of the ecliptic. viz. let the northern mark between the ascending and descending node, and the southern between the descending and ascending node; a thread tied round these four points will shew the position of the moon's orbit.

\* The planets are not visible till the sun is a certain number of degrees below the horizon, and these degrees are variable according to the brightness of the planets. Mercury becomes visible when the sun is about 10 deg. below the horizon; Venus when the sun's depression is 5 deg.; Mars 11° 30'; Jupiter 10°; Saturn 11°; and the Georgian 17° 30'.

London, on the 1st of December 1805? Their longitudes being as follow:

♃	8° 22' 30"	♄	8° 15' 27"	♃	♃'s longitude at
♀	9 23 40	♅	6 24 50		midnight 0° 9'
♁	8 25 21	♁	6 24 5		

*Answer.* Venus and the moon were visible.

2. What planets will be above the horizon of London when the sun has descended ten degrees below, on the 25th of January 1810? Their longitudes being as follow?

♃	10° 29' 20"	♄	0° 18' 24"	♃	♃'s longitude at
♀	9 23 0	♅	8 12 35		midnight 6° 5' 26"
♁	11 10 43	♁	7 14 0		

PROBLEM LXXXI.

*Given the latitude of the place, day of the month, and hour of the night or morning, to find what planets will be visible at that hour.*

**RULE.** Elevate the pole so many degrees above the horizon as are equal to the latitude of the place; find the sun's place in the ecliptic, bring it to the brass meridian, and set the index of the hour circle to 12; then, if the given time be before noon, turn the globe eastward till the index has passed over as many hours as the time wants of noon; but, if the given time be past noon, turn the globe westward on its axis till the index has passed over as many hours as the time is past noon; let the globe rest in this position, and look in the Ephemeris for the longitudes of the planets and, if any of them be in the signs which are above the horizon, such planets will be visible.

**EXAMPLES.** I. On the first of December 1805 the longitudes \* of the planets, by an ephemeris, were as follow

\* It is not necessary to give the latitudes of the planets in this problem; for, if the signs and degrees of the ecliptic in which their longitudes are situated be above the horizon, the planets will likewise be above the horizon.

and Venus and the moon were

were any of them visible at London at five o'clock in the morning?

♄	8° 22' 30"	♃	8° 15' 27"	♃	♃'s longitude at
♀	9 23 40	♅	6 24 50	♃	midnight 0 9 15'.
♂	8 25 21	♁	6 24 5		

*Answer.* Saturn and the Georgium Sidus were visible, and both nearly in the same point of the heavens, near the eastern horizon; Saturn was a little to the north of the Georgian.

2. On the first of October 1810, the longitudes of the planets in the fourth page of the Nautical Almanac are as follow: will any of them be visible at London at ten o'clock in the evening?

♄	7° 1° 26'	♃	2° 1° 13'	♃	♃'s longitude at mid-
♀	7 23 37	♅	8 10 34	♃	night 7° 17° 51'.
♂	5 3 33	♁	7 12 23		

### PROBLEM LXXXII.

*The latitude of the place and day of the month given, to find how long Venus rises before the sun when she is a morning star, and how long she sets after the sun when she is an evening star.*

**RULE.** Elevate the pole so many degrees above the horizon as are equal to the latitude of the place; find the latitude and longitude of Venus in an ephemeris, and mark her place on the globe; find the sun's place in the ecliptic, bring it to the brass meridian, and set the index of the hour circle to 12; then, if the place of Venus be to the right hand of the meridian, she is an evening star; if to the left hand, she is a morning star.

*When Venus is an evening star.* Turn the globe westward till the sun comes to the western edge of the horizon; the hours passed over by the index will be the time from noon when the sun sets; continue the motion of the globe westward till Venus comes to the western edge of the horizon, and the hours passed over by the index will be the time from noon when Venus sets: the difference between these times will shew how long Venus sets after the sun.

*When Venus is a morning star.* Turn the globe eastward on its axis till the sun comes to the eastern edge of the horizon; the hours passed over by the index will be the time which the sun rises before noon: continue the motion of the globe eastward till Venus comes to the eastern edge of the horizon, and the hours passed over by the index will be the time which Venus rises before noon: the difference between these times will shew how long Venus rises before the sun.

NOTE. *The same rule will serve for Jupiter, by marking his place instead of that of Venus.*

EXAMPLES. 1. On the first of March 1805, the longitude of Venus was 10 signs 18 deg. 14 min., or 18 deg. 14 min. in Aquarius, latitude 0 deg. 52 min. south; was she a morning or an evening star? If a morning star, how long did she rise before the sun at London; if an evening star, how long did she shine after the sun set?

*Answer.* Venus was a morning star; the sun rose  $5\frac{1}{2}$  hours before noon, or at half past 6; and Venus rose about  $6\frac{1}{4}$  hours before noon, or at three quarters past five; consequently, Venus rose three quarters of an hour before the sun.

2. On the 25th of October 1805, the longitude of Jupiter was 8 signs 7 deg. 26 min., or 7 deg. 26 min. in Sagittarius, latitude 0 deg. 29 min. north; whether was he a morning or an evening star? If a morning star how long did he rise before the sun at London; if an evening star, how long did he shine after the sun set?

*Answer.* Jupiter was an evening star; the sun set at 5 o'clock, and Jupiter set about 20 minutes after six; consequently, he set 1 hour and 20 minutes after the sun.

3. On the first of November 1810, the longitude of Venus will be 8 signs 24 deg. 30 min., latitude 4 deg. 7 min. south; will she be a morning or an evening star? If she be a morning star, how long will she rise before the sun at London; if an evening star, how long will she shine after the sun sets?

4. On the seventh of January 1810, the longitude of Jupiter will be 0 signs 15 deg. 48 min., latitude 1 deg. 18 min. south will he be a morning or an evening star? If he be a

morning star, how long will he rise before the sun; if an evening star, how long will he shine after the sun sets?

PROBLEM LXXXIII.

*The latitude of a place and day of the month\* being given, to find the meridian altitude of any star or planet.*

**RULE.** Elevate the pole so many degrees above the horizon as are equal to the latitude of the given place; then,

*For a star.* Bring the given star to that part of the brass meridian which is numbered from the equator towards the poles; the degrees on the meridian contained between the star and the horizon will be the altitude required.

*For the moon or a planet.* Look in an ephemeris for the planet's latitude and longitude, or for its right ascension and declination, for the given month and day, and mark its place on the globe (as in Prob. LXVIII or LXVII); bring the planet's place to the brass meridian; and the number of degrees between that place and the horizon will be the altitude.

**EXAMPLES.** 1. What is the meridian altitude of Aldebaran in Taurus, at London?

*Answer.*  $54^{\circ} 36'$ .

2. What is the meridian altitude of Arcturus in Böotes, at London?

3. On the first of September 1810, the longitude of Mars will be 4 signs 14 deg. 41 min., and latitude 1 deg. 9 min. north; what will his meridian altitude be at London?

4. On the first of April 1810, the longitude of Saturn will be 8 signs 15 deg. 17 min., and latitude 1 deg. 45 min. north, what will his meridian altitude be at London?

5. On the eleventh of April 1805, at the time of the moon's passage over the meridian of Greenwich, her right

---

\* The meridian altitudes of the stars on the globe, in the same latitude, are invariable; therefore, when the meridian altitude of a star is sought the day of the month need not be attended to.

ascension was 208 deg. 7 min. \*, and declination 16 deg. 48 min. south; required her meridian altitude at Greenwich †?

Answer. 21° 42'.

PROBLEM LXXXIV.

To find all those places on the earth to which the moon will be nearly vertical on any given day.

RULE: Look in an ephemeris for the moon's latitude and longitude for the given day, and mark her place on the globe (as in Prob. LXVIII); bring this place to that part of the brass meridian which is numbered from the equator towards the poles, and observe the degree above it; for all places on the earth having that latitude will have the moon vertical (or nearly so) when she comes to their respective meridians

OR: Take the moon's declination from page VI. of the Nautical Almanac, and mark whether it be north or south;

\* By the Nautical Almanac, the moon passed over the meridian at 40 minutes past ten o'clock in the evening, on the 11th of April 1805.

208° 48' D's right ascension at midnight.—Declination 17° 3' S.

202 47 do. at - - - - - noon - - ditto - - 14 56 S.

<p>6 1 increase in 12 hours from noon - - - - - 2 7</p> <p>12 h. : 6° 1' : : 10 h 40' : 5° 20' ;</p> <p>hence 202° 47' + 5° 20' = 208° 7'</p> <p>the moon's right ascension at 40 minutes past 10.</p>	<p>12 h. : 2° 7' : : 10 h. 40' : 1° 52' ;</p> <p>hence 14° 56' + 1° 52' = 16° 48'</p> <p>the moon's declination at 40 min. past 10.</p>
--	---

The places of the planets may be taken out of the Ephemeris for noon without sensible error, because their declinations vary less than that of the moon.

† The moon will have the greatest and least meridian altitude to all the inhabitants north of the equator, when her ascending node is in Aries; for her orbit making an angle of 5½° with the ecliptic, her greatest altitude will be 5½° more than the greatest meridional altitude of the sun, and her least meridional altitude 5½° less than that of the sun. The greatest altitude of the sun at London is 62°; the moon's greatest altitude is therefore 67° 20'. The least meridional altitude of the sun at London is 15°; the least meridional altitude of the moon is therefore 9° 40'.

then, by the terrestrial globe; or by a map, find all places having the same number of degrees of latitude as are contained in the moon's declination, and those will be the places to which the moon will be successively vertical on the given day. If the moon's declination be north, the places will be in north latitude; if the moon's declination be south, they will be in south latitude.

EXAMPLES. 1. On the 15th of October 1805, the moon's longitude at midnight was 3 signs 29 deg. 14 min., and her latitude 1 deg. 35 min. south; over what places did she pass nearly vertical?

*Answer.* From the moon's latitude and longitude being given, her declination may be found by the globe to be about  $19^{\circ}$  north. The moon was vertical at Porto Rico, St Domingo, the north of Jamaica, O'why-hoe, &c.

2. On the 20th of December 1810, the moon's longitude at midnight will be 6 signs 20 deg., and her latitude 1 deg. 5 min. north; over what places on the earth will she pass nearly vertical?

3. What is the greatest north declination which the moon can possibly have, and to what places will she be then vertical?

4. What is the greatest south declination which the moon can possibly have, and to what places will she be then vertical?

### PROBLEM LXXXV.

*Given the latitude of a place, day of the month, and the altitude of a star, to find the hour of the night, and the star's azimuth.*

RULE. Elevate the pole so many degrees above the horizon as are equal to the latitude of the place, and screw the quadrant of altitude upon the brass meridian over that latitude; find the sun's place in the ecliptic, bring it to the brass meridian, and set the index of the hour circle to 12; bring the lower end of the quadrant of altitude to that side  
of

of the meridian\* on which the star was situated when observed; turn the globe *westward* till the centre of the star cuts the given altitude on the quadrant; count the hours which the index has passed over, and they will shew the time from noon when the star has the given altitude: the quadrant will intersect the horizon in the required azimuth.

EXAMPLES. 1. At London, on the 28th of December, the star Deneb in the Lion's tail, marked  $\beta$ , was observed to be 40 deg. above the horizon, and east of the meridian, what hour was it, and what was the star's azimuth?

*Answer.* By bringing the sun's place to the meridian, and turning the globe westward on its axis till the star cuts 40 deg. of the quadrant, *east of the meridian*, the index will have passed over 14 hours; consequently, the star has 40 deg. of altitude east of the meridian, 14 hours from noon or at two o'clock in the morning. Its azimuth will be  $62\frac{1}{2}$  deg. from the south towards the east.

2. At London, on the 28th of December, the star  $\beta$  in the Lion's tail was observed to be westward of the meridian, and to have 40 deg. of altitude; what hour was it and what was the star's azimuth?

*Answer.* By turning the globe westward on its axis till the star cuts 40 deg. of the quadrant, *west of the meridian*, the index will have passed over 20 hours; consequently, the star has 40 deg. of altitude west of the meridian, 20 hours from noon, or eight o'clock in the morning. Its azimuth will be  $62\frac{1}{2}$  deg. from the south towards the west.

3. At London, on the 1st of September, the altitude of Benetnach in Urfa Major, marked  $\gamma$ , was observed to be 36 deg. above the horizon, and west of the meridian; what hour was it, and what was the star's azimuth?

4. On the 21st of December the altitude of Sirius, when west of the meridian at London, was observed to be 8 deg. above the horizon; what hour was it, and what was the star's azimuth?

5. On the 12th of August, Menkar in the Whale's jaw, marked  $\alpha$ , was observed to be 37 deg. above the horizon

---

\* It is necessary to know on which side of the meridian the star is at the time of observation, because it will have the same altitude on both sides of it. Any star may be taken at pleasure, but it is best to take one not too near the meridian, because for some time before the star comes to the meridian, and after it has passed it, the altitude varies very little.

of London, and eastward of the meridian ; what hour was it, and what was the star's azimuth ?

PROBLEM LXXXVI.

*Given the latitude of a place, day of the month, and hour of the day, to find the altitude of any star, and its azimuth.*

**RULE.** Elevate the pole so many degrees above the horizon as are equal to the latitude of the place, and screw the quadrant of altitude upon the brass meridian over that latitude ; find the sun's place in the ecliptic, bring it to the brass meridian, and set the index of the hour circle to 12 ; then, if the given time be before noon, turn the globe eastward on its axis till the index has passed over as many hours as the time wants of noon ; if the time be past noon, turn the globe westward till the index has passed over as many hours as the time is past noon : let the globe rest in this position, and move the quadrant of altitude till its graduated edge coincides with the centre of the given star ; the degrees on the quadrant, from the horizon to the star, will be the altitude ; and the distance from the north or south part of the brass meridian to the quadrant, counted on the horizon, will be the azimuth from the north or south.

**EXAMPLES.** 1. What are the altitude and azimuth of Capella, at Rome, when it is five o'clock in the morning on the second of December ?

*Answer.* The altitude is 41 deg. 58 min. and the azimuth 60 deg. 50 min. from the north towards the west.

2. Required the altitude and azimuth of Altair in Aquila on the 6th of October, at nine o'clock in the evening, at London ?

3. On what point of the compass does the star Aldebaran bear at the Cape of Good Hope, on the fifth of March, at a quarter past eight o'clock in the evening ; and what is its altitude ?

*Answer.* The azimuth is 49 deg. 52 min. from the north, and its altitude is 22 deg. 30 min.

4. Re-

4. Required the altitude and azimuth of Acyone in the Pleiades, marked  $\eta$ , on the 21st of December, at four o'clock in the morning at London?

### PROBLEM LXXXVII.

*Given the latitude of a place, day of the month, and azimuth of a star, to find the hour of the night and the star's altitude.*

**RULE.** Elevate the pole so many degrees above the horizon as are equal to the latitude of the place, and screw the quadrant of altitude upon the brass meridian over that latitude; find the sun's place in the ecliptic, bring it to the brass meridian, and set the index of the hour circle to 12; bring the lower end of the quadrant of altitude to coincide with the given azimuth on the horizon, and hold it in that position; turn the globe westward till the given star comes to the graduated edge of the quadrant, and the hours passed over by the index will be the time from noon; the degrees on the quadrant, reckoning from the horizon to the star, will be the altitude.

**EXAMPLES.** 1. At London, on the 28th of December, the azimuth of Deneb in the Lion's tail, marked  $\beta$ , was  $62\frac{1}{2}$  deg. from the south towards the west; what hour was it, and what was the star's altitude?

*Answer.* By turning the globe westward on its axis the index will pass over 20 hours before the star intersects the quadrant; therefore the time will be 20 hours from noon, or eight o'clock in the morning; and the star's altitude will be 40 deg.

2. At London, on the 5th of May, the azimuth of Cor Leonis, or Regulus, marked  $\alpha$ , was 74 deg. from the south towards the west; required the star's altitude, and the hour of the night?

3. On the 8th of October, the azimuth of the star marked  $\beta$ , in the shoulder of Auriga, was 50 deg. from the north towards the east; required its altitude at London, and the hour of the night?

4. On the 10th of September, the azimuth of the star marked  $\epsilon$  in the Dolphin, was 20 deg. from the south to-

wards

wards the east ; required its altitude at London, and the hour of the night.

### PROBLEM LXXXVIII.

*Two stars being given, the one on the meridian, and the other on the east or west part of the horizon, to find the latitude of the place.*

**RULE.** Bring the star which was observed to be on the meridian, to the brass meridian ; keep the globe from turning on its axis, and elevate or depress the pole till the other star comes to the eastern or western part of the horizon ; then the degrees from the elevated pole to the horizon will be the latitude.

**EXAMPLES.** 1. When the two pointers of the Great Bear, marked  $\alpha$  and  $\beta$ , or Dubhe and  $\beta$ , were on the meridian, I observed Vega in Lyra to be rising ; required the latitude ?

*Answer.* 27 deg. north.

2. When Arcturus in Böotes was on the meridian, Altair in the Eagle was rising ; required the latitude ?

3. When the star marked  $\beta$  in Gemini was in the meridian,  $\epsilon$  in the shoulder of Andromeda was setting ; required the latitude ?

4. In what latitude are  $\alpha$  and  $\beta$ , or Sirius and  $\beta$ , in Canis Major rising, when Algenib, or  $\alpha$ , in Perseus, is on the meridian ?

### PROBLEM LXXXIX.

*The latitude of the place, the day of the month, and two stars that have the same azimuth \*, being given, to find the hour of the night.*

**RULE.** Elevate the pole so many degrees above the horizon as are equal to the latitude of the place, and screw the

---

\* To find what stars have the same azimuth.—Let a smooth board of about a foot in breadth, and three feet high (or of any height you please),  
be

the quadrant of altitude upon the brass meridian over that latitude ; find the sun's place in the ecliptic, bring it to the brass meridian, and set the index of the hour circle to 12 ; turn the globe on its axis from east to west till the two given stars coincide with the graduated edge of the quadrant of altitude ; the hours passed over by the index will shew the time from noon ; and the common azimuth of the two stars will be found on the horizon.

EXAMPLES. 1. At what hour, at London, on the first of May, will Altair in the Eagle, and Vega in the Harp, have the same azimuth, and what will that azimuth be ?

*Answer.* By bringing the sun's place to the meridian, &c. and turning the globe westward, the index will pass over 15 hours before the stars coincide with the quadrant : hence they will have the same azimuth at 15 hours from noon, or at three o'clock in the morning ; and the azimuth will be  $42\frac{1}{2}$  deg. from the south towards the east.

2. On the 10th of September, what is the hour at London when Deneb in Cygnus, and Markab in Pegasus, have the same azimuth, and what is the azimuth ?

3. At what hour on the 15th of April will Arcturus and Spica Virginis have the same azimuth at London, and what will that azimuth be ?

4. On the 20th of February, what is the hour at Edinburgh when Capella and the Pleiades have the same azimuth, and what is the azimuth ?

5. On the 21st of December, what is the hour at Dublin when  $\alpha$ , or Algenib in Perseus, and  $\beta$  in the Bull's Horn, have the same azimuth, and what is the azimuth ?

be fixed perpendicularly upon a stand, draw a straight line through the middle of the board, parallel to the sides ; fix a pin in the upper part of this line, and make a hole in the board at the lower part of the line ; hang a thread with a plummet fixed to it, upon the pin, and let the ball of the plummet move freely in the hole made in the lower part of the board : set this board upon a table in a window, or in the open air, and wait till the plummet ceases to vibrate ; then look along the face of the board, and those stars which are partly hid from your view by the thread will have the same azimuth.

## PROBLEM XC.

*The latitude of the place, the day of the month, and two stars, that have the same altitude, being given, to find the hour of the night.*

**RULE.** Elevate the pole so many degrees above the horizon as are equal to the latitude of the place, and screw the quadrant of altitude upon the brass meridian over that latitude; find the sun's place in the ecliptic, bring it to the brass meridian, and set the index of the hour circle to 12; turn the globe on its axis from east to west till the two given stars coincide with the given altitude on the graduated edge of the quadrant; the hours passed over by the index will be the time from noon when the two stars have that altitude.

**EXAMPLES.** 1. At what hour at London, on the second of September, will Markab in Pegafus, and  $\alpha$  in the head of Andromeda, have each 30 deg. of altitude?

*Answer.* At a quarter past eight in the evening.

2. At what hour at London, on the fifth of January, will  $\alpha$ , Menkar in the Whale's jaw, and  $\alpha$ , Aldebaran in Taurus, have each 35 deg. of altitude?

3. At what hour at Edinburgh, on the tenth of November, will  $\alpha$ , Altair in the body of the Eagle, and  $\zeta$ , in the tail of the Eagle, have each 35 deg. of altitude?

4. At what hour at Dublin, on the fifteenth of May, will  $\alpha$ , Benetnach in the Great Bear's tail, and  $\gamma$ , in the shoulder of Böotes, have each 56 deg. of altitude?

## PROBLEM XCI.

*The altitudes of two stars having the same azimuth, and that azimuth being given, to find the latitude of the place.*

**RULE.** Place the graduated edge of the quadrant of altitude over the two stars, so that each star may be exactly under its given altitude on the quadrant; hold the quadrant in this position, and elevate or depress the pole till the division

vision marked  $\circ$ , on the lower end of the quadrant, coincides with the given azimuth on the horizon; when this is effected, the elevation of the pole will be the latitude.

EXAMPLES. 1. The altitude of Arcturus was observed to be 40 deg., and that of Cor Caroli 63 deg; their common azimuth at the same time was 71 deg. from the south towards the east; required the latitude?

*Answer.*  $51\frac{1}{2}$  deg. north.

2. The altitude of  $\epsilon$  in Castor was observed to be 30 deg, and that of  $\beta$  in Procyon 20 deg; their common azimuth at the same time was  $73\frac{1}{2}$  deg. from the south towards the east; required the latitude?

3. The altitude of  $\alpha$ , Dubhe, was observed to be 40 deg., and that of  $\gamma$  in the back of the Great Bear  $29\frac{1}{2}$  deg.; their common azimuth at the same time was 30 deg. from the north towards the east; required the latitude?

4. The altitude of Vega, or  $\alpha$ , in Lyra was observed to be 70 deg., and that of  $\alpha$  in the head of Hercules  $39\frac{1}{2}$  deg.; their common azimuth at the same time was 60 deg. from the south towards the west; required the latitude?

### PROBLEM XCII.

*The day of the month being given, and the hour when any known star rises or sets, to find the latitude of the place.*

RULE. Find the sun's place in the ecliptic, bring it to the brass meridian, and set the index of the hour circle to 12; then, if the given time be before noon, turn the globe eastward till the index has passed over as many hours as the time wants of noon; but, if the given time be past noon, turn the globe westward till the index has passed over as many hours as the time is past noon; elevate or depress the pole till the centre of the given star coincides with the horizon; then the elevation of the pole will shew the latitude?

EXAMPLES. 1. In what latitude does  $\epsilon$ , Mirach, in Boötes rise at half past twelve o'clock at night, on the tenth of December?

*Answer.*  $51\frac{1}{2}$  deg. north.

2. In what latitude does Cor Leonis, or Regulus, rise at ten o'clock at night, on the twenty-first of January?
3. In what latitude does  $\beta$ , Rigel in Orion set at four o'clock in the morning, on the twenty-first of December?
4. In what latitude does  $\beta$ , Capricornus, set at eleven o'clock at night on the tenth of October?

PROBLEM XCIII.

*To find on what day of the year any given star passes the meridian at any given hour.*

**RULE.** Bring the given star to the brass meridian, and set the index to 12; then, if the given time be before noon \*, turn the globe westward till the index has passed over as many hours as the time wants of noon; but, if the given time be past noon, turn the globe eastward till the index has passed over as many hours as the time is past noon; observe that degree of the ecliptic which is intersected by the graduated edge of the brass meridian, and the day of the month answering thereto, on the horizon, will be the day required.

**EXAMPLES.** 1. On what day of the month does Procyon come to the meridian of London at three o'clock in the morning?

*Answer.* Here the time is nine hours before noon; the globe must therefore be turned nine hours towards the west, the point of the ecliptic intersected by the brass meridian will then be the 9th of  $\uparrow$ , answering nearly to the first of December.

2. On what day of the month, and in what month, does  $\alpha$ , Alderamin, in Cepheus, come to the meridian of Edinburgh at ten o'clock at night?

*Answer.* Here the time is ten hours after noon; the globe must therefore be turned ten hours towards the east, the point of the ecliptic intersected by the brass meridian will then be the 17th of  $\uparrow$ , answering to the ninth of September.

---

\* If the given star comes to the meridian at noon, the sun's place will be found under the brass meridian, without turning the globe; if the given star comes to the meridian at midnight, the globe may be turned either eastward or westward till the index has passed over twelve hours.

3. On what day of the month, and in what month, does  $\beta$ , Deneb in the Lion's tail, come to the meridian of Dublin at nine o'clock at night?

4. On what day of the month, and in what month, does Arcturus in Boötes come to the meridian of London at noon?

5. On what day of the month, and in what month, does  $\delta$  in the Great Bear come to the meridian of London at midnight?

6. On what day of the month, and in what month, does Aldebaran come to the meridian of Philadelphia at five o'clock in the morning at London?

#### PROBLEM XCIV.

*The day of the month being given, to find at what hour any given star comes to the meridian\*.*

**RULE.** Find the sun's place in the ecliptic, bring it to the brass meridian, and set the index of the hour circle to 12; turn the globe westward on its axis till the given star comes to the brass meridian, and the hours passed over by the index will be the time from noon when the star culminates.

**EXAMPLES.** 1. At what hour does Cor Leonis, or Regulus come to the meridian of London on the twenty-third of September?

*Answer.* The index will pass over  $21\frac{3}{4}$  hours; hence this star culminates or comes to the meridian  $21\frac{3}{4}$  hours after noon, or at three quarters past nine o'clock in the morning.

2. At what hour does Arcturus come to the meridian of London on the ninth of February?

*Answer.* The index will pass over  $16\frac{1}{2}$  hours; hence Arcturus culminates  $16\frac{1}{2}$  hours after noon, or at half past four o'clock in the morning.

3. Required the hours at which the following stars come to the meridian of London on the respective days annexed?

---

\* This problem is comprehended in Problem LXXI.

Bellatrix, January 9th	$\beta$ Mirach, October 5th.
Menkar, May 18th.	Aldebaran, February 12th.
$\epsilon$ Draco, Sept. 22d.	$\beta$ Aries, November 5th.
$\alpha$ Dubhe, Dec. 20th.	$\gamma$ Taurus, January 24th ?

## PROBLEM XCV.

*Given the azimuth of a known star, the latitude, and the hour to find the star's altitude and the day of the month.*

**RULE.** Elevate the pole so many degrees above the horizon as are equal to the latitude of the given place, screw the quadrant of altitude upon the brass meridian over that latitude, bring the division marked  $\circ$  on the lower end of the quadrant to the given azimuth on the horizon, turn the globe till the star coincides with the graduated edge of the quadrant, and set the index of the hour circle to 12 ; then, if the given time be before noon, turn the globe westward till the index has passed over as many hours as the time wants of noon ; if the given time be past noon, turn the globe eastward till the index has passed over as many hours as the time is past noon ; observe that degree of the ecliptic which is intersected by the graduated edge of the brass meridian, and the day of the month answering thereto, on the horizon, will be the day required.

**EXAMPLES.** 1. At London, at ten o'clock at night, the azimuth of Spica Virginis was observed to be 40 deg. from the south towards the west ; required its altitude, and the day of the month ?

*Answer.* The star's altitude is 20 deg. and the day is the 18th of June, The time being ten hours past noon, the globe must be turned ten hours towards the east.

2. At London, at four o'clock in the morning, the azimuth of Arcturus was 70 deg. from the south towards the west ; required its altitude, and the day of the month ?

*Answer.* Here the time wants eight hours of noon, therefore the globe must be turned eight hours westward ; the altitude of the star will be found to be 40 deg., and the day the 12th of April.

3. At Edinburgh, at eleven o'clock at night, the azimuth of  $\alpha$ , Serpentarius, or Ras Alhagus, was 60 deg. from the south towards the east; required its altitude, and the day of the month?

4. At Dublin, at two o'clock in the morning, the azimuth of  $\beta$  Pegafus, or Scheat, was 70 deg. from the north towards the east; required its altitude, and the day of the month?

### PROBLEM XCVI.

*The altitudes of two stars being given, to find the latitude of the place.*

**RULE.** Subtract each star's altitude from 90 deg.; take successively the extent of the number of degrees, contained in each of the remainders, from the equinoctial with a pair of compasses; with the compasses thus extended, place one foot successively in the centre of each star, and describe arches on the globe with a black lead pencil; these arches will cross each other in the zenith; bring the point of intersection to that part of the brass meridian which is numbered from the equinoctial towards the poles, and the degree above it will be the latitude.

**EXAMPLES.** 1. At sea, in north latitude, I observed the altitude of Capella to be 30 deg., and that of Aldebaran 35 deg.; what latitude was I in?

*Answer.* With an extent of 60 deg. ( $= 90^\circ - 30^\circ$ ) taken from the equinoctial, and one foot of the compasses in the centre of Capella, describe an arch towards the north; then with 55 deg. ( $= 90^\circ - 35^\circ$ ), taken in a similar manner, and one foot of the compasses in the centre of Aldebaran, describe another arch, crossing the former; the point of intersection brought to the brass meridian will shew the latitude to be  $20\frac{1}{2}$  deg. north.

2. The altitude of Markab in Pegafus was 30 deg, and that of Altair in the Eagle at the same time, was 65 deg.; what was the latitude, supposing it to be north?

*Answer.* 29 deg. north.

3. In

3. In north latitude the altitude of Arcturus was observed to be 60 deg., and that of  $\beta$  or Deneb, in the Lion's tail, at the same time, was 70 deg. ; what was the latitude ?

4. In north latitude, the altitude of Procyon was observed to be 50 deg., and that of Betelguese in Orion, at the same time, was 58 deg. ; required the latitude of the place of observation ?

### PROBLEM XCVII.

*The meridian altitude of a known star being given at any place, to find the latitude.*

**RULE.** Bring the given star to that part of the brass meridian which is numbered from the equinoctial towards the poles ; count the number of degrees in the given altitude, on the brass meridian, from the star towards the south part of the horizon, and mark where the reckoning ends ; elevate or depress the pole till this mark coincides with the south point of the horizon, and the elevation of the north pole above the north point of the horizon will shew the latitude.

**EXAMPLES.** 1. In what degree of north latitude is the meridian altitude of Aldebaran  $52\frac{1}{2}$  deg. ?

*Answer.* 53 deg. 36 min. north.

2. In what degree of north latitude is the meridian altitude of  $\beta$ , one of the pointers in Ursa Major, 90 deg. ?

3. In what degree of north latitude is  $\gamma$ , in the head of Draco, vertical when it culminates ?

4. In what degree of north latitude is the meridian altitude of  $\epsilon$  or Mirach in Böotes, 68 deg. ?

## PROBLEM XCVIII.

*The latitude of a place, day of the month, and hour of the day being given, to find the NONAGESIMAL DEGREE \* of the ecliptic, its altitude and azimuth, and the MEDIUM CÆLI.*

**RULE.** Elevate the north pole to the latitude of the given place, and screw the quadrant of altitude upon the brass meridian over that latitude; find the sun's place in the ecliptic, bring it to the brass meridian, and set the index of the hour circle to 12; then, if the given time be before noon, turn the globe eastward till the index has passed over as many hours as the time wants of noon; but, if the given time be past noon, turn the globe westward till the index has passed over as many hours as the time is past noon, and fix the globe in this position; count 90 deg. upon the ecliptic from the horizon (either eastward or westward), and mark where the reckoning ends, for that point of the ecliptic will be the nonagesimal degree, and the degree of the ecliptic cut by the brass meridian will be the medium cæli: bring the graduated edge of the quadrant of altitude to coincide with the nonagesimal degree of the ecliptic thus found, and the number of degrees on the quadrant, counted from the horizon, will be the altitude of the nonagesimal degree: the azimuth will be seen on the horizon.

**NOTE.** From the 21st of December to the 21st of June the nonagesimal degree of the ecliptic is east of the meridian; and, from the 21st of June to the 21st of December, it is west of the meridian.

**EXAMPLES.** I. On the 21st of June, at forty-five minutes past three o'clock in the afternoon at London re-

---

\* The nonagesimal degree of the ecliptic is that point which is the most elevated above the horizon, and is measured by the angle which the ecliptic makes with the horizon at any elevation of the pole; or, it is the distance between the zenith of the place and the pole of the ecliptic. This angle is frequently used in the calculation of solar eclipses. The medium cæli, or midheaven, is that point of the ecliptic which is upon the meridian.

quired the point of the ecliptic which is the nonagesimal degree, its altitude and azimuth, the longitude of the medium cœli, and its altitude, &c.

*Answer.* The nonagesimal degree is 10 deg. in Leo, its altitude is 54 deg., and its azimuth 22 deg. from the south towards the west, or nearly S. S. W. The mid-heaven, or point of the ecliptic under the brass meridian, is 24 deg. in Leo. and its altitude above the horizon is 52 deg. The degree of the equinoctial cut by the brass meridian, reckoning from the point Aries, is the right ascension of the mid-heaven, which in this example is 146 deg. The rising point of the ecliptic will be found to be 10 deg. in Scorpio, and the setting point 10 deg. in Taurus. If the graduated edge of the quadrant be brought to coincide with the sun's place, the sun's altitude will be found to be 39 deg., and his azimuth  $78\frac{1}{2}$  deg. from the south towards the west, or nearly W. by S.

2. At London on the 24th of April, at nine o'clock in the morning, required the point of the ecliptic which is the nonagesimal degree, its altitude and azimuth, the point of the ecliptic which is the mid-heaven, &c. &c. ?

3. At Limerick, in 52 deg. 22 min. north latitude, on the 15th of October, at five o'clock in the afternoon, required the point of the ecliptic which is the nonagesimal degree, its altitude and azimuth, the point of the ecliptic which is the mid-heaven, &c. &c. ?

4. At Dublin, in latitude 53 deg. 21 min. north, on the 15th of January, at two o'clock in the afternoon, required the longitude, altitude, and azimuth, of the nonagesimal degree; and the longitude and altitude of the medium cœli, &c. &c. ?

#### PROBLEM XCIX.

*The latitude of a place, day of the month and the hour, together with the altitude and azimuth of a star, being given, to find the star.*

**RULE.** Elevate the pole so many degrees above the horizon as are equal to the latitude of the place and screw the quadrant of altitude on the brass meridian over that latitude; find the sun's place in the ecliptic, bring it to the brass meridian, and set the index of the hour circle to 12; then, if the given time be before noon, turn the globe eastward

ward till the index has passed over as many hours as the time wants of noon; but, if the time be past noon, turn the globe westward till the index has passed over as many hours as the time is past noon; let the globe rest in this position, and bring the division marked 0 on the quadrant to the given azimuth on the horizon; then, immediately under the given altitude on the graduated edge of the quadrant, you will find the star.

EXAMPLES. 1. At London, on the 21st of December, at four o'clock in the morning, the altitude of a star was 50 deg., and its azimuth was 37 deg. from the south towards the east; required the name of the star?

*Answer.* Deneb, or  $\beta$  in the Lion's tail.

2. The altitude of a star was 27 deg., its azimuth  $76\frac{1}{2}$  deg. from the south towards the west, at eleven o'clock in the evening at London, on the 11th of May; what star was it?

3. At London, on the 21st of December, at four o'clock in the morning, the altitude of a star was 8 deg., and its azimuth 51 deg. from the south towards the west; required the name of the star?

4. At London, on the 1st of September, at nine o'clock in the evening, the altitude of a star was 47 deg., and its azimuth 73 deg. from the south towards the east; required the name of the star?

### PROBLEM C.

*To find the time of the moon's southing, or coming to the meridian of any place, on any given day of the month.*

RULE. Elevate the pole so many degrees above the horizon as are equal to the latitude of the given place; find the moon's latitude and longitude, or her right ascension and declination, from an ephemeris, and mark her place on the globe; bring the sun's place to the brass meridian, and set the index of the hour circle to 12; turn the globe westward till the moon's place comes to the meridian, and the  
hours

hours passed over by the index will shew the time from noon when the moon will be upon the meridian.

OR, WITHOUT THE GLOBE.

Find the moon's age by the table, at page 249, which multiply by 81 \*, and cut off two figures from the right hand of the product, the left hand figures will be the hours; the right hand figures must be multiplied by 60, for minutes.

OR, CORRECTLY, THUS :

Take the difference between the sun's and moon's right ascension in 24 hours; then, as 24 hours diminished by this difference is to 24 hours, so is the moon's right ascension at noon, diminished by the sun's, to the time of the moon's transit.

EXAMPLES. 1. At what hour, on the 12th of March 1805, did the moon pass over the meridian of Greenwich? The moon's right ascension being 136 deg. 48 min., and her declination 14 deg. 40 min. north.

*Answer. By the globe.*—The moon came to the meridian at three quarters past nine in the evening †.

*By the Table Page 249.*—The moon's age is 13; this multiplied by 81 produces 1053, that is, 10 hours and 53 over; this 53, multiplied by 60, produces 3180, which by rejecting the two right hand figures, leaves 31 minutes; so that, by this method, the moon comes to the meridian at 31 minutes past 10 o'clock in the evening.

*By using the Nautical Almanac.*

Sun's right ascension at noon 12th March	=	23 h. 28' 50"
Ditto - - - - - 13th March	=	23 32 30
Increase of motion in 24 hours	-	0 3 40

\* For the synodic revolution of the moon being about  $29\frac{1}{2}$  days, we have, by the rule of three, as  $29\frac{1}{2}$  d. : 24 h. : : 1 d. : 81 h.

† The time of the moon's rising and setting may be found as for a star or planet, see Problem LXXI; but, on account of the moon's swift and irregular motion, the solution will differ materially from the truth.

Moon's right ascension at noon 12th March = 136° 48'

Ditto - - - 13th March = 149 47

Increase in 24 hours - - - 12 59 equal

to 51' 56"; hence 51' 56" diminished by 3' 40", leaves 48' 16" the moon's motion exceeds the sun's in 24 hours.

Moon's right ascension 136° 48' × 4 = \* 9<sup>h</sup> 7' 12"

Sun's right ascension - - - = 23 23 59

9 38 22

24<sup>h</sup>—(48' 16") : 24<sup>h</sup> : : 9<sup>h</sup> 38' 22" : 9<sup>h</sup> 58' the true time of the moon's passage over the meridian in the evening, agreeing exactly with the Nautical Almanac.

2. At what hour, on the 15th of April 1805, did the moon pass over the meridian at Greenwich? The moon's right ascension being 218 deg. 26 min., and declination 20 deg. south.

3. At what hour, on the 5th of February 1810, will the moon pass over the meridian of Greenwich? The moon's right ascension being 161 deg. 9 min., and declination 4 deg. 48 min. north?

4. At what hour, on the 17th of October 1810, will the moon pass over the meridian of Greenwich? The moon's right ascension being 87 deg. 31 min., and declination 18 deg. 14 min. north.

PROBLEM CI.

*The day of the month, latitude of the place, and time of high water at the full and change of the moon being given, to find the time of high water on the given day.*

RULE. Find the time at which the moon comes to the meridian of the given place by the preceding problem, to which add the time of high water at the given place at the full and change of the moon (taken from the following

\* When the sun's right ascension is greater than the moon's, as in this example, 24 hours must be added to the moon's right ascension before you subtract.

Table), and the sum will shew the time of high water in the afternoon. If the sum exceed 12 hours, subtract 12 hours and 24 minutes from it, and the remainder will shew the time of high water in the morning; but if the sum exceed 24 hours, subtract 24 hours and 48 minutes from it, and the remainder will shew the time of high water in the afternoon.

OR, BY THE TABLE, PAGE 249.

Find the moon's age by the Table, at page 249, and take out of the time from the right hand column thereof, answering to the moon's age; to which add the time of high water at the full and change of the moon (taken from the following Table), and the sum will shew the time of high water in the afternoon. If the sum exceed 12 hours, subtract 12 hours and 24 minutes from it, and the remainder will shew the time of high water in the morning; but, if the sum exceed 24 hours, subtract 24 hours and 48 minutes from it, and the remainder will shew the time of high water in the afternoon.

OR THUS:

Find the time of the moon's coming to the meridian of Greenwich on the given day, at page VI. of the Nautical Almanac; take out the correction (from the following Table) to correspond to this time, and apply it as the Table directs; to the result add the time of high water at the full and change of the moon (taken from the following Table), and the sum will shew the time of high water in the afternoon. If the sum exceed 12 or 24 hours, proceed as above.

EXAMPLES. 1. Required the time of high water at London Bridge on the 12th of March 1805? The moon's right ascension at that time being 136 deg. 48 min., and her declination 14 deg. 40 min. north.

Answer.

*Answer. By the Globe.*—The moon came to the meridian at 9<sup>h</sup> 45'  
Time of high water at the full and change at London

	Sum	12 45
	Subtract from it	12 24

Time of high water in the morning

*By the Table page 249.* The moon's age was 13, the time answering to which, in the same Table, is

Time of high water at the full and change

	Sum	13 53
	Subtract from it	12 24

Time of high water in the morning

*By the Nautical Almanac.*—The moon came to the meridian at 9<sup>h</sup> 58'  
the time from the right hand Table following, answering to 9<sup>h</sup> 58',  
or rather 10 hours, is

	Sum	10 22
	Time of high water at London at the full and change	3 0

Time of high water at London at the full and change

	Sum	13 22
	Subtract from it	12 24

Time of high water in the morning \*

2. Required the time of high water at Hull on the 18th of May 1810? the moon's right ascension being 235 deg. 22 min. and her declination 16 deg. 3 min. south.

3. Required the time of high water at Liverpool on the 15th of June 1810? The moon's right ascension being 224 deg. 2 min., and her declination 17 deg. 13 min. south.

\* Here are three methods of performing the same problem, and the results all differ from each other: the last is the most correct: however, any one of the methods is as correct as those which are given in books on pilotage and navigation.

4. Required the time of high water at Limerick on the 12th of August 1810? The moon's right ascension being 262 deg. 18 min., and her declination 18 deg. 17 min. south.

5. Required the time of high water at Bristol on the first of September 1810? The moon's right ascension being 191 deg. 25 min., and her declination 4 deg. 16 min. south.

6. Required the time of high water at Dublin on the 5th of December 1810? The moon's right ascension being 13 deg. 44 min., and her declination 4 deg. 48 min. north.

A TABLE Of the Time of High Water at NEW and FULL MOON at the principal Places in the British Islands.				Time of the moon's passing the meridian.	Correction to be sub- tracted, or added	
					Hours.	H.M.
Aberdeen	-	0 <sup>h</sup> 45'	Fifenefs	-	2 <sup>h</sup> 0'	
Ayr	-	10 30	Flamborough Head		3 40	
Aldborough	-	9 40	N. and S. Foreland		10 20	
St. Andrew's	-	2 0	Fortroie	-	11 40	
Arran Island	-	11 0	Foulness	-	6 45	
Bamborough	-	3 30	Fowey	-	5 40	
Banff	-	0 0	Galway	-	3 0	
Beachy Head	-	10 0	Fort George	-	11 40	
St. Bees Head	-	10 45	Fort Glasgow	-	11 30	
Belfast	-	10 0	Gravesend	-	1 30	
Bembridge Point	-	10 15	Greenock	-	11 30	0 0 0
Berwick	-	2 30	Hartland Point		4 30	1 0 1
North Berwick	-	2 0	Hartlepool	-	3 0	2 0 34
St. Bride's Bay	-	6 0	Harwich	-	11 10	3 0 50
Bridlington Bay	-	3 50	Holyhead	-	9 45	4 1 3
Bridport	-	6 45	Hull	-	6 0	5 1 9
Brighton	-	9 50	Kinfale	-	5 15	6 1 3
Bristol	-	6 40	Leith	-	2 20	7 0 35
Caithness Point	-	9 0	Limerick	-	4 30	
Cantire, Mull,	-	10 30	Liverpool	-	11 15	Add
Cape Clear	-	4 30	London	-	3 0	8 0 2
Cork	-	6 30	Milford	-	5 15	9 0 23
Cowes	-	10 30	Newcastle	-	3 15	10 0 24
Cromartie	-	11 40	Orfordness	-	9 45	11 0 14
Cromer	-	7 0	Plymouth	-	6 0	12 0 0
Cullen	-	0 0	Portland	-	7 30	
Dartmouth	-	6 30	Ramsgate	-	10 30	Sub.
Dingle Bay	-	3 30	Rocheſter	-	0 45	13 0 17
Dover	-	11 30	Sandwich	-	11 30	14 0 34
Dublin	-	9 15	Scarborough	-	3 45	15 0 50
Dunbar	-	2 50	Sligo	-	5 30	16 1 3
Dunbarton	-	11 15	Southampton		0 0	17 1 9
Dundee	-	2 10	Stockton	-	3 30	18 1 3
Dungarvon	-	4 30	Swanſea	-	6 0	19 0 35
Dungeness	-	9 45	Tynemouth	-	3 0	
Eddyſtone	-	5 30	Torbay	-	6 15	Add.
Edinburgh	-	2 20	Weymouth	-	7 20	20 0 2
Exeter	-	10 30	Whitby	-	3 20	21 0 23
Exmouth Bar	-	6 20	Whitehaven	-	11 15	22 0 24
Falmouth	-	5 30	Yarmouth	-	9 0	23 0 14
Fern Island	-	3 30				24 0 0

## PROBLEM CII.

*To describe the apparent path of any planet, or of a comet, amongst the fixed stars, &c.*

Draw a straight line O, O, to represent the ecliptic, and divide it into any convenient number of equal parts. Set off eight of those equal parts northward and southward of the ecliptic, at each end thereof; and draw lines as in the figure Plate V, these will represent the zodiac. Find the planet's geocentric latitude and longitude in an ephemeris, or in the nautical almanac, and mark its place for every month, or for several days in each month, beginning at the right hand of the ecliptic line, and proceeding towards the left\*:

Find the latitudes and longitudes † of the principal stars in the several constellations near which the planet passes, and set them off in a similar manner from the right hand towards the left; you will thus have a complete picture of any part of the heavens with the positions of the several stars, &c. as they appear to a spectator on the earth.

EXAMPLE. Delineate the path of the planet Jupiter for the year 1811; the latitudes and longitudes being as follow.

\* The young Student will recollect, that the stars appear in a contrary order in the heavens to what they do on the surface of a globe. In the heavens we see the concave part, on the globe the convex. This manner of delineating the stars will be found extremely useful, and will enable the student to know their names and places sooner than by the globe.

† The places of the stars may likewise be laid down by their right ascensions and declinations, by drawing a portion of the equinoctial instead of the ecliptic.

Longitudes. Latitudes.		Longitudes. Latitudes.	
Jan. 1st	1° 21' 45" 0° 57' S.	July 25th	2° 25' 1" 0° 2' 4" S.
Feb. 7th	1 22 11 0 47 S.	Aug. 7th	2 27 36 0 23 S.
— 25th	1 23 58 0 43 S.	— 19th	2 29 48 0 22 S.
March 1st	1 24 29 0 42 S.	— 25th	3 0 48 0 22 S.
— 25th	1 28 16 0 37 S.	Sept. 7th	3 2 45 0 21 S.
April 1st	1 29 35 0 36 S.	— 25th	3 4 50 0 21 S.
— 25th	2 4 30 0 32 S.	Oct. 7th	3 5 44 0 20 S.
May 1st	2 5 49 0 31 S.	— 25th	3 6 15 0 19 S.
— 13th	2 8 31 0 30 S.	Nov. 1st	3 6 10 0 18 S.
— 25th	2 11 17 0 29 S.	— 19th	3 5 12 0 17 S.
June 1st	2 12 54 0 28 S.	— 25th	3 4 40 0 16 S.
— 25th	2 18 27 0 26 S.	Dec. 13th	3 2 34 0 14 S.
July 7th	2 21 49 0 25 S.	— 25th	3 0 57 0 12 S.

Jupiter's path, when delineated, will appear south of the ecliptic in the order A, B, C, D, E, F, G, H. The planet will be at G on the 25th of August, and will appear a little to the right hand of the star marked  $\eta$  in Gemini; when it arrives at H, which will happen on the 25th of October, it will apparently return again to G, a small matter above its former path, where it will be situated on the 25th of December.

In the same manner the places and situations of the stars may be delineated, thus Aldebaran, the principal star in the Hyades, will be found by the Globe, (or a proper table) to be situated in  $7^\circ$  of  $\Pi$  and in  $5\frac{3}{4}^\circ$  of south latitude; Betelgeux in Orion's right shoulder, in about  $26^\circ$  of  $\Pi$  and in  $16^\circ$  of south latitude, and its place may be laid down on a map by extending the line of its longitude, as from L, till it meets a straight line passing through 16, 16, on the sides of the map. In the same manner any other star's situation, may be described, thus the Hyades will appear at Q, the Pleiades at P &c. and Bellatrix, &c. as in the figure.

## PART IV.

CONTAINING

1. *A promiscuous Collection of Examples exercising the Problems on the globes.*—2. *A collection of Questions, with References to the Pages where the Answers will be found; designed as an Assistant to the Tutor in the Examination of the Scholar.*—3. *A Table of the Latitudes and Longitudes of the Principal Places in the World.*

## CHAPTER I.

*A promiscuous Collection of Examples exercising the Problems on the Globes.*

1. **W**HAT day of the year is of the same length as the 14th of August?
2. How many miles make a degree of longitude in the latitude of Lisbon?
3. At what hour is the sun due east at London on the 5th of May?
4. There is a place in the parallel of 31 deg. of north latitude, which is 31 deg. distant from London; what place is it?
5. If the sun's meridian altitude at London be 30 deg., what day of the month, and what month is it?
6. On what month and day is the sun's meridian altitude at Paris equal to the latitude of Paris?
7. When  $\gamma$  Draconis is vertical to the inhabitants of London at ten o'clock at night, what day of the month, and what month is it?
8. What is the equation of time dependant on the obliquity of the ecliptic on the 14th of July?

9. I observed the pointers in the Great Bear, on the meridian of London, at eleven o'clock at night; in what month and on what night did this happen?

10. On what day of the month, and in what month, will the shadow of a cane placed perpendicular to the horizon of London, at ten o'clock in the morning, be exactly equal in length to the cane?

11. The earth goes round the sun in 365 days 6 hours nearly; how many degrees does it move in one day, at a medium? Or, what is the daily apparent mean motion of the sun?

12. The moon goes once round her orbit, from the first point of the sign Aries to the same again, in 27 days 7 hours 43 minutes 5 seconds; what is her mean motion in one day?

13. The moon turns round her axis, from the sun to the sun again, in 29 days 12 hours 44 minutes 3 seconds, which is exactly the time that she takes to go round her orbit from new moon to new moon; at what rate *per* hour are the inhabitants (if any) of her equatorial parts carried *per* hour by this rotation? The moon's diameter being 2144 miles.

14. How many degrees does the motion of the moon exceed the apparent motion of the sun in 24 hours?

15. The day of the month being given, it is required to find the moon's longitude when she is eight days old?

16. Travelling in an unknown latitude I found, by chance an old horizontal dial; the hour-lines of which were so defaced by time that I could only discover those of IV and V, and found their distance to be exactly 21 deg.; pray what latitude was the dial made for?

17. Required the duration of twilight at the south pole?

18. How far must an inhabitant of London travel southward to lose sight of Aldebaran?

19. What is the elevation of the north polar star above the horizon of Calcutta?

20. Lord Nelson beat the French fleet near latitude 31 deg. 11 min. north, longitude 30 deg. 22 min. east; point out the place on the globe?

21. What is the sun's altitude at three o'clock in the afternoon at Philadelphia on the 7th of May?
22. What is the length of the day at London on the 26th of July, and how many degrees must the sun's declination be diminished to make the day an hour shorter?
23. At what hour does the sun first make his appearance at Petersburg on the 4th of June?
24. At what rate *per* hour are the inhabitants of Botany Bay carried from west to east by the rotation of the earth on its axis?
25. When Arcturus is 30 deg. above the horizon of London, and eastward of the meridian, on the 5th of November, what o'clock is it?
26. Describe an horizontal dial for the latitude of Washington?
27. Describe a vertical dial facing the south, for the latitude of Edinburgh?
28. What is the moon's greatest altitude to the inhabitants of Dublin?
29. What is the sun's greatest meridian altitude at the southern extremity of Patagonia?
30. At what hour at London, on the 15th of August, will the Pleiades be on the meridian of Philadelphia?
31. If a comet, whose longitude was 4 signs 5 deg., and latitude 44 deg. north, appeared in Ursa Major, in what part of the constellation was it?
32. On what point of the compass does the sun set at Madrid, when constant twilight begins at London?
33. What is the difference between the duration of twilight at Petersburg and Calcutta, on the first of February?
34. How much longer is the 10th of December at Madras than at Archangel?
35. How much longer is the 5th of May at Archangel than at Madras?
36. When it is two o'clock in the afternoon at London, on the 15th of February, to what places is the sun rising and setting, and where is it noon?
37. Whether does the sun shine over the north or south pole on the 17th of April, and how far?

38. At

38. At what hour on the 18th of April will the sun's altitude and azimuth, from the east towards the south, be 40 deg. at London?
39. Which way must a ship steer from Rio Janeiro to the Cape of Good Hope?
40. Are the clocks at Philadelphia faster or slower than those at London, and how much?
41. Are the clocks at Calcutta faster or slower than the clocks at London, and how much?
42. What is the difference of latitude between Copenhagen and Venice?
43. There is a place in latitude 31 deg. 11 min. north, situated, by an angle of position, south east by east  $\frac{1}{2}$  east from London; what place is that, and how far is it from London in English miles?
44. On the 13th of February 1810, the longitude of Venus will be 10 signs 16 deg. 49 min., latitude 1 deg. 9 min. south; will Venus rise before or after the sun, and how much?
45. On the 7th of December 1810, the longitude of Venus will be 9 signs 14 deg. 32 min., latitude 1 deg. 42 min. south; will Venus rise before or after the sun, and how much?
46. On the 19th of October 1810, the longitude of the planet Jupiter will be 2 signs 0 deg. 3 min., latitude 1 deg. 7 min. south; at what hour will he rise, come to the meridian, and set at London?
47. On the 7th of January 1810, the moon's longitude at midnight will be 10 signs 20 deg. 13 min., latitude 4 deg. 18 min. north; required her rising amplitude at London, and the hour and azimuth, when she is 30 deg. above the horizon?
48. The moon's longitude on the 5th of November 1810, at midnight will be 11 signs 6 deg. 24 min., latitude 2 deg. 30 min. north; required the time of her rising, coming to the meridian, and setting at London, and the time of high water at London Bridge?
49. To what places of the earth will the moon be vertical on the 1st of January 1810, her longitude being 7 signs 19 deg. 47 min., and latitude 1 deg. 54 min. north?
50. On the 1st of March 1810, the moon's ascending

node will be 6 signs 16 deg. 42 min. ; where will the descending node be ?

51. The moon's declination on the 5th of November 1811 will be 17 deg. 50 min, north ; to what places of the earth will she be vertical ?

52. What stars are constantly above the horizon of Copenhagen ?

53. I observed the altitude of Betelguese to be 19 deg. and that of Aldebaran 40 deg. ; they both appeared in the same azimuth, viz. exactly east ; what latitude was I in ?

54. In what latitude is Aldebaran on the meridian when  $\beta$  in the Lion's tail is rising ?

55. In what latitude is Rigel setting when Regulus is on the meridian ?

56. In what latitude are the pointers in the Great Bear on the meridian when Vega is rising ?

57. In latitude 79 deg. north, on the 1st of February, at what hour will Procyon and Regulus have the same altitude ?

58. At what hour on the 10th of February will Capella and Procyon have the same azimuth at London ?

59. On the 10th of November at eight o'clock in the evening, Bellatrix in the left shoulder of Orion was rising ; what was the latitude of the place ?

60. On the 16th of February, Arcturus rose at eight o'clock in the evening ; what was the latitude ?

61. At what hour of the night, on the 16th of February, will the altitude of Regulus be 28 deg. at London ?

62. Required the altitude and azimuth of Markab in Pegasus, at London, on the 21st of September, at nine o'clock in the evening ?

63. On what day of the month, and in what month, will the pointers of the Great Bear be on the meridian of London at midnight ?

64. What inhabitants of the earth have the greatest portion of moon light ?

65. On what day of the year will Altair, in the Eagle, come to the meridian of London with the sun ?

66. In what latitude north is the length of the longest day eleven times that of the shortest ?

67. In what latitude south is the longest day eighteen hours ?

68. At

68. At what time does the morning twilight begin, and at what time does the evening twilight end at Philadelphia, on the 15th of January?

69. When it is four o'clock in the afternoon at London, on the 4th of June, where is it twilight?

70. Required the antipodes of Cape Horn?

71. Required the peræci of Philadelphia?

72. Required the antæci of the Sandwich Islands?

73. What is the angle of position between London and Jerufalem?

74. Required the distance between London and Alexandria, in English and in geographical miles?

75. In what latitude north does the sun begin to shine constantly on the 10th of April?

76. How long does the sun shine without setting at the north pole, and what is the duration of dark night?

77. Where is the sun vertical when it is midnight at Dublin on the 15th of July?

78. When it is five o'clock in the evening at Philadelphia, where is it midnight, and where is it noon?

79. What places have the same hours of the day as Edinburgh?

80. What places have opposite hours to the respective capitals of Europe?

81. At what hour at London is the sun due east at the time of the equinoxes?

82. At what hour at London is the sun due east at the time of the soltices?

83. In what climates are the following places situated, viz. Philadelphia, Madrid, Drontheim, Trincomalé, Calcutta, and Astracan?

84. On what day of the year does Regulus rise heliacally at London?

85. On what day of the year does Betelguese set heliacally at London?

86. What stars set achronically at London on the 24th of December?

87. What stars rise achronically at London on the 12th of December?

88. In what latitude north do the bright stars in the head of the Dolphin, and Altair in the Eagle, rise at the same hour?
89. In what latitude north do Capella and Castor set at the same hour, and what is the difference of time between their coming to the meridian?
90. What stars rise cosmically at London on the 7th of December?
91. What stars set cosmically at London on the 10th of December?
92. What degrees of the ecliptic and equinoctial rise with Aldebaran at London?
93. On what day of the year does Arcturus come to the meridian of London, at two o'clock in the morning?
94. On what day of the year does Regulus come to the meridian of London, at nine o'clock in the evening?
95. At what time does Vega in Lyra, come to the meridian of London, on the 18th of August?
96. Trace out the Galaxy or milky-way on the celestial globe?
97. If the meridian altitude of the sun on the 7th of June be 50 deg., what is the latitude of the place?
98. Required the sun's right and oblique ascension at London at the equinoxes?
99. Required the sun's right ascension, oblique ascension, ascensional difference, and time of rising and setting at London, on the 5th of May?
100. If the sun's rising amplitude on the 7th of June be 24 deg. to the northward of the east, what is the latitude of the place?
101. What stars have the following degrees of right ascensions and declinations?
- |             |              |               |              |
|-------------|--------------|---------------|--------------|
| 7° 10' R.A. | 29° 45' D.N. | 162° 49' R.A. | 62° 50' D.N. |
| 14 38 R.A.  | 34 33 D.N.   | 244 17 R.A.   | 25 58 D.S.   |
| 135 59 R.A. | 3 10 D.N.    | 238 27 R.A.   | 19 15 D.S.   |
102. Describe an horizontal sun-dial for the latitude of Edinburgh?
103. What is the length of the day on February 14 at London, and how much must the sun's declination increase to make the day an hour longer?

104. What

104. What hour is it at London when it is 17 minutes past in the evening at Jerufalem?

105. On the 21st of June, the sun's altitude was observed to be 46 deg. 25 min., and his azimuth 112 deg. 59 min. from the north towards the east, at London; what was the hour of the day?

106. Given the sun's declination 17 deg. 6 min. north, and increasing; to find the sun's longitude, right ascension, and the angle formed between the ecliptic and the meridian passing through the sun?

107. Given the sun's right ascension 134 deg. 54 min. to find his longitude, declination, and the angle formed between the ecliptic and the meridian passing through the sun?

108. Given the sun's longitude 17 deg. 34 min. in 8; to find his declination, right ascension, and the angle formed between the ecliptic and the meridian passing through the sun?

109. Given the sun's amplitude 39 deg. 50 min. from the east towards the north, and his declination  $23\frac{1}{2}$  deg. north; to find the latitude of the place, the time of the sun's rising and setting, and the length of the day and night?

110. At what time, on the first of April, will Arcturus appear upon the 6 o'clock hour-line at London, and what will his altitude and azimuth be at that time?

111. Required the altitude of the sun, and the hour he will appear due east at London, on the 20th of May?

112. At what hours will Arcturus appear due east and west at London, on the 2d of April, and what will its altitude be?

113. At London, the sun's altitude was observed to be 25 deg. 30 min. when on the prime vertical; required his declination and the hour of the day?

114. On the 2d of April 1811, the moon's right ascension at midnight will be 128 deg. 2 min., and her declination 14 deg. 43 min. north; required her distance from Regulus, Procyon, and Betelguese, at that time?

115. The

115. The distance of a comet from Sirius was observed to be 66 deg, and from Procyon 51 deg. 6 min. ; the comet was westward of Sirius ; required its latitude and longitude ?

116. On the 29th of January, in latitude 53 deg 24 min. north, and longitude 25 deg. 18 min. west, at 14 hours 58 min. by a watch well regulated ; the altitude of Procyon was 19 deg. 54 min., and that of Alphacca was 42 deg. 9 min., as observed by two separate persons ; Alphacca was on the east, and Procyon on the west of the meridian ; was the watch too fast or too slow ?

117. The declination of  $\gamma$  in the head of Draco is 51 deg. 31 min. north ; to what places will it be vertical when it comes to their respective meridians ?

118. When it is four o'clock in the evening at London on the 4th of May, to what places is the sun rising and setting, where is it noon and midnight, and to what place is the sun vertical ?

119. At what time does the sun rise and set at the North Cape, on the north of Lapland, on the 5th of April, and what is the length of the day and night ?

120. At what time does the sun rise at the Shetland Islands when it sets at four o'clock in the afternoon at Cape Horn ?

121. Walking in Kensington Gardens on the 17th of May, it was twelve o'clock by the sun-dial and wanted eight minutes to twelve by my watch ; was my watch right ?

122. If the sun set at nine o'clock, at what time does it rise, and what is the length of the day and night ?

123. Where is the sun vertical when it is five o'clock in the morning at London on the 15th of May ?

124. At what hour does day break at London on the 5th of April ?

125. If the moon be five days old on the first of June, at what time does she rise, culminate, and set at London ?

126. On what day of the month, and in what month, does the sun rise 24 deg. to the north of the east at London ?

127. When the sun is rising to the inhabitants of London on the 8th of May, where is it setting ?

128. When

128. When the sun is setting to the inhabitants of Calcutta on the 18th of March, where is it midnight?

129. What is the difference between the circumference of the earth at the equator and at Petersburg, in English miles?

130. At what hour does the sun rise at Barbadoes when constant twilight begins at Dublin?

131. When the sun is rising at O'why'hee on the 18th of May, where is it noon?

132. At what hour does the sun rise at London when it sets at seven o'clock at Petersburg?

133. How high is the north polar star above the horizon of Quebec?

134. How many English miles must an inhabitant of London travel southward, that the meridian altitude of the north polar star may be diminished 25 deg.?

135. How many English miles must I travel westward from London that my watch may be seven hours too fast?

136. What place of the earth has the sun in the zenith, when it is seven o'clock in the morning at London, on the 25th of April?

137. On what day of the month, and in what month, is the sun's amplitude at London equal to one-third of the latitude?

138. On what month and day is the sun's amplitude at London equal to the latitude of Kingston in Jamaica?

139. If the moon be three days old on the 17th of February, what is her longitude?

140. If the highest point of Mont Blanc be 5101 yards above the level of the sea, what would be its altitude on a globe of 18 inches in diameter?

141. If the polar diameter of the earth be to the equatorial diameter as 220 is to 230, what would the polar diameter of a three inch globe be, if constructed on this principle?

142. What inhabitants of the earth, in the course of 12 hours, will be in the same situation as their antipodes?

143. On what day of the year at London is the twilight eight hours long?

144. At

144. At what time does the sun rise and set at London, when the inhabitants at the north pole begin to have dark night?

145. At what hour does the sun set at the Cape of Good Hope when total darkness ends at the north pole?

146. What is the moon's longitude when full moon happens on the 5th of April?

147. Does the sun ever rise and set at the north pole?

148. At what hour of the day, on the 15th of April, will a person at London have his shadow the shortest possible?

149. If the precession of the equinoxes be  $50\frac{1}{4}$  seconds in a year, how many years will elapse before the constellation Aries will coincide with the solstitial colure?

150. If the obliquity of the ecliptic be continually diminishing at the rate of 56 seconds in a century, as stated by several authors, how many years will elapse from the first of January 1805, when the obliquity of the ecliptic was 23 deg. 27 min. 52. 8 sec., before the ecliptic will coincide with the equator?

151. Required the duration of dark night at the south of Nova Zembla?

152. When constant twilight ends at Petersburg, where is the day 18 hours long?

153. At what hour does the sun set at Constantinople when it rises 12 deg. to the north of the east?

154. What is the difference between a solar and a siderial year, and what does that difference arise from?

155. What is the difference between the length of a natural or astronomical day and a siderial day, and how does the difference arise?

156. Required the difference between the length of the longest day at Cape Horn and at Edinburgh?

157. If one man were to travel eight miles a day westward round the earth at the equator, and another two miles a day westward round it in the latitude of 80 deg. north; in how many days would each of them return to the place whence he set out?

158. If a pole of 18 feet in length be placed perpendicular to the horizon of London on the 15th of July, and another exactly

exactly of the same length be placed in a similar manner at Edinburgh, which will cast the longer shadow at noon?

159. If the moon be in 29 deg. of Leo at the time of new moon, what sign and degree will she be in when she is five days old?

160. What is the duration of constant day or twilight at the north of Spitzbergen?

---

## CHAPTER II.

*A Collection of Questions, with References to the Pages where the Answers will be found; designed as an Assistant to the Tutor \* in the Examination of the Student.*

### I. GREAT CIRCLES ON THE TERRESTRIAL GLOBE.

1. **W**HAT IS A GREAT CIRCLE, and how many are there drawn on the terrestrial globe? (*Definition 6, page 3.*)

2. What is the equator, and what is its use? (*Def. 9, page 3.*)

3. What are the meridians, and how many are drawn on the terrestrial globe? (*Def. 8, page 3.*)

4. What is the first meridian? (*Def. 10, page 3.*)

5. What is the ecliptic, and where is it situated? (*Def. 11, page 3.*)

6. What are the colures, and into how many parts do they divide the ecliptic? (*Def. 42, page 11.*)

---

\* Though a reference be given to the pages where the answers to each question may be found; yet, perhaps, it would be better for the student not to learn the answers by heart, verbatim from the book; but to frame an answer himself, from an attentive perusal of his lesson: by which means the understanding will be called into exercise as well as the memory.

7. What

7. What are the hour circles and how are they drawn on the globe? (*Def. 50, page 12.*)
8. What hour-circle is called the six o'clock hour line? (*Def. 51, page 12.*)
9. What are the azimuth or vertical circles, and what is their use? (*Def. 43, page 11.*)
10. What is the prime vertical? (*Def. 44, page 11.*)

## II. SMALL CIRCLES ON THE TERRESTRIAL GLOBE.

1. What is a SMALL CIRCLE, and how many are generally drawn on the terrestrial globe? (*Def. 7, page 3.*)
2. What are the tropics, and how far do they extend from the equator, &c.? (*Def. 15, page 6.*)
3. What are the polar circles, and where are they situated? (*Def. 16, page 6.*)
4. What are the parallels of latitude, and how many are generally drawn, on the terrestrial globe? (*Def. 17, page 6.*)
5. What circles are called Almacantars? (*Def. 39, page 10.*)

## III. GREAT CIRCLES ON THE CELESTIAL GLOBE.

1. How many GREAT CIRCLES are drawn on the celestial globe?
2. The lines of terrestrial longitude are perpendicular to the equator, on the terrestrial globe, and all meet in the poles of the world; to which great circle on the globe are the lines of celestial longitude perpendicular, and on what points of the globe do they all meet?
3. What are the colures, and into how many parts do they divide the ecliptic? (*Def. 42, page 11.*)
4. What is the equinoctial, and what is its use? (*Def. 9, page 3.*)
5. What is the ecliptic, and where is it situated? (*Def. 11, page 3.*)
6. What is the zodiac, and into how many parts is it divided? (*Def. 12, page 3.*)

7. What

7. What are the signs of the zodiac, and how are they marked? (*Def.* 13, page 4.)

8. Which are the spring, summer, autumnal, and winter signs; and on what days does the sun enter them? (*Def.* 13, page 4.)

9. Which are the ascending and descending signs? (*Def.* 13, page 4.)

#### IV. SMALL CIRCLES ON THE CELESTIAL GLOBE.

1. How many SMALL CIRCLES are drawn on the celestial globe?

2. What are the tropics, and how far do they extend from the equinoctial? (*Def.* 15, page 6.)

3. What are the polar circles, and where are they situated? (*Def.* 16, page 6.)

4. What are the parallels of celestial latitude? (*Def.* 40, page 10.)

5. What are the parallels of declination? (*Def.* 41, page 11.)

#### V. THE BRASS MERIDIAN, AND OTHER APPENDAGES TO THE GLOBES.

1. What is the brazen meridian, and how is it divided and numbered? (*Def.* 5, page 2.)

2. What is the axis of the earth, and how is it represented by the artificial globes? (*Def.* 4, page 2.)

3. What are the poles of the world? (*Def.* 4, page 2.)

4. What are the hour circles, and how are they divided? (*Def.* 18, page 6.)

5. What is the horizon, and what is the distinction between the rational and sensible horizon? (*Def.* 19, 20, and 21, page 7.)

6. What is the wooden horizon, and how is it divided? (*Def.* 22, page 7.)

7. What is the mariner's compass, how is it divided, and what is the use of it on the globe? (*Def.* 32, 33, and note, page 9.)

8. What

8. What is the quadrant of altitude, how is it divided, and what is its use? (*Def.* 36, page 10.)

#### VI. POINTS ON, AND BELONGING TO, THE GLOBES.

1. What is the pole of a circle? (*Def.* 28, page 8.)
2. What is the zenith, and of what circle is it the pole? (*Def.* 26, page 8.)
3. What is the nadir, and of what circle is it the pole? (*Def.* 27, page 8.)
4. What are the cardinal points of the horizon? (*Def.* 23, page 8.)
5. What are the cardinal points in the heavens? (*Def.* 24, page 8.)
6. What are the cardinal points of the ecliptic? (*Def.* 25, page 8.)
7. What are the equinoctial points? (*Def.* 29, page 8.)
8. What are the solstitial points? (*Def.* 30, page 8.)
9. What is the culminating point of a star, or of a planet? (*Def.* 52, page 12.)
10. What are the poles of the ecliptic, and how far are they from the poles of the world?

#### VII. LATITUDE AND LONGITUDE ON THE TERRESTRIAL GLOBE, THE DIVISION OF THE GLOBE INTO ZONES AND CLIMATES, THE POSITIONS OF THE SPHERE, THE SHADOWS, AND POSITIONS OF THE INHABITANTS WITH RESPECT TO EACH OTHER, &c.

1. What is the latitude of a place on the terrestrial globe? (*Def.* 34, page 9.)
2. What is the longitude of a place on the terrestrial globe? (*Def.* 37, page 10.)
3. What is a zone, and how many are there on the terrestrial globe? (*Def.* 70, page 19.)
4. What is the situation, and what is the extent of the torrid zone? (*Def.* 71, page 19.)
5. Where are the two temperate zones situated, and what is the extent of each? (*Def.* 72, page 19.)

8. Where

6. Where are the two frigid zones situated, and what is the extent of each? (*Def.* 73, page 19.)

7. What is a climate, and how many are there on the globe? (*Def.* 69, page 16.)

8. Have all places in the same climate the same atmospheric temperature? (*Note*, page 17.)

9. How many different positions of the sphere are there? (*Def.* 65, page 16.)

10. What is a right sphere, and what inhabitants of the globe have this position? (*Def.* 66, page 16; see likewise *Prob.* XXII. page 195.)

11. What is a parallel sphere, and what inhabitants of the globe have this position? (*Def.* 67, page 16; and *Prob.* XXII, page 195, &c.)

12. What is an oblique sphere, and what inhabitants of the globe have this position? (*Def.* 68, page 16; and *Prob.* XXII. page 195, &c.)

13. What parts of the globe do the AMPHISCII inhabit, and why are they so called? (*Def.* 74, page 19.)

14. When do the AMPHISCII obtain the name of ASCII?

15. What parts of the globe do the HETEROSCII inhabit, and why are they so called? (*Def.* 75, page 20.)

16. What parts of the globe do the PERISCII inhabit, and why are they so called? (*Def.* 76, page 20.)

17. What inhabitants are called ANTOECI to each other, and what do you observe with respect to their latitudes, longitudes, hours, &c. (*Def.* 77, page 20.)

18. What inhabitants are called PERIOECI to each other, and what is observed with respect to their latitudes, longitudes, hours, seasons, &c.? (*Def.* 78, page 20.)

19. What are the ANTIPODES, and what is observed with respect to their seasons of the year, &c.? (*Def.* 79, page 20.)

VIII. LATITUDES AND LONGITUDES OF THE STARS AND PLANETS ON THE CELESTIAL GLOBE, &c. TOGETHER WITH THE POETICAL RISING AND SETTING OF THE STARS, &c.

1. What is the latitude of a star or planet? (*Def.* 35, page 10.)
2. What is the longitude of a star or planet? (*Def.* 38, page 10.)
3. What are the fixed stars, and why are they so called? (*Def.* 88, page 23.)
4. What is a constellation, and how many are there on the celestial globe? (*Def.* 90, page 23; see the tables, page 24, 25, 26, and 27.)
5. What is meant by the poetical rising and setting of the stars? (*Def.* 89, page 23.)
6. When is a star said to rise and set cosmically?
7. When is a star said to rise and set achronically?
8. When is a star said to rise and set heliacally?
9. What is the Via Lactea, and through what constellations does it pass? (*Def.* 91, page 34.)
10. What kind of stars are termed Nebulous? (*Def.* 92, page 34.)
11. How are the stars, which have not particular names, distinguished on the celestial globe? (*Def.* 93, page 35.)

IX. DEFINITIONS AND TERMS COMMON TO BOTH THE GLOBES.

1. What is the declination of the sun, a star, or planet? (*Def.* 14, page 5.)
2. What is an hemisphere? (*Def.* 31, page 9.)
3. What is the altitude of any object in the heavens? (*Def.* 45, page 11.)
4. What is the meridian altitude of the sun, a star, or planet?
5. What is the zenith distance of a celestial object? (*Def.* 46, page 11.)
6. What

6. What is the polar distance of a celestial object? (*Def.* 47, page 11.)
7. What is the amplitude of a celestial object? (*Def.* 48, page 12.)
8. What is the azimuth of a celestial object? (*Def.* 49, page 12.)
9. What is the right ascension of the sun, or of a star, &c.? (*Def.* 80, page 20.)
10. What is the oblique ascension of the sun, or of a star, &c.? (*Def.* 81, page 20.)
11. What is the oblique descension of the sun, or of a star, &c.? (*Def.* 82, page 21.)
12. What is the ascensional or descensional difference? (*Def.* 83, page 21.)

#### X. TIME; YEARS, DAYS, &c.

1. What is a solar or tropical year, and what is the length of it? (*Def.* 62, page 15.)
2. What is a sidereal year, and what is its duration? (*Def.* 63, page 15.)
3. What is an astronomical day? (*Def.* 58, page 13.)
4. What is a mean solar day? (*Def.* 57, page 13.)
5. What is a true solar day? (*Def.* 56, page 13.)
6. What is an artificial day? (*Def.* 59, page 14.)
7. What is a civil day? (*Def.* 60, page 14.)
8. What is a sidereal day? (*Def.* 61, page 14.)
9. What is meant by apparent noon, or apparent time? (*Def.* 53, page 12.)
10. What is true or mean noon? (*Def.* 54, page 13.)
11. What is the equation of time at noon? (*Def.* 55, page 13.)

#### XI. ASTRONOMICAL AND MISCELLANEOUS DEFINITIONS, &c.

1. What do you understand by the precession of the equinoxes, and in what time do they make an entire revolution round the equinoctial? (*Def.* 64, page 15.)
2. What

2. What is the crepusculum or twilight, and what is the cause of it? (*Def.* 84, page 21.)
3. What is refraction, and whence does it arise? (*Def.* 85, page 21.)
4. What is an angle of position, and in what does it differ from a bearing by the mariner's compass? (*Def.* 86, page 22, and note page 181.)
5. What are rhumbs and rhumb-lines? (*Def.* 87, page 22.)
6. What are the planets, and how many belong to the solar system? (*Def.* 94 and 95, page 36.)
7. What is the distinction between primary and secondary planets, and how many secondary planets belong to the solar system? (*Def.* 96, page 36.)
8. What is the orbit of a planet, (*Def.* 97, page 36,) of what figure are the orbits of the planets, and in what part of the figure is the sun placed? (page 131.)
9. What are the nodes of a planet? (*Def.* 98, page 36.)
10. What are the different aspects of the planets, and how many are there? (*Def.* 99, page 37.)
11. What are the syzygies and quadratures of the moon?
12. When is a planet's motion said to be direct, stationary, or retrograde? (*Def.* 100, 101, and 102, page 37.)
13. What is a digit? (*Def.* 103, page 37.)
14. What is the disc of the sun or moon? (*Def.* 104, page 37.)
15. What are the geocentric and heliocentric latitudes and longitudes of the planets? (*Def.* 105 and 106 page 37.)
16. When is a planet said to be in apogee? (*Def.* 107, page 37.)
17. When is a planet said to be in perigee? (*Def.* 108, page 37.)
18. What is the aphelion or higher apsis of a planet's orbit? (*Def.* 109, page 37.)
19. What is the perihelion or lower apsis of a planet's orbit? (*Def.* 110, page 38.)
20. What is the line of the apsides? (*Def.* 111, page 38.)
21. What is the eccentricity of the orbit of a planet? (*Def.* 112, page 38.)
22. What is the elongation of a planet? (*Def.* 117, page 38.)
23. What

23. What are the occultation and tranfit of a planet ?  
(Def. 113 and 114, page 38.)
24. What is the cause of an eclipse of the fun ? (Def. 115, page 38.)
25. What is the cause of an eclipse of the moon ? (Def. 116, page 38.)
26. What are the nocturnal and diurnal arches described by the heavenly bodies ? (Def. 119 and 118, page 38.)
27. What is the aberration of a ftar ? (Def. 120, page 39.)
28. What are the centripetal and centrifugal forces ? (Def. 121, and 122, page 39.)
29. What is gravity ? (Def. 8, page 44.)
30. What is the vis inertix of a body ? (Def. 9, page 44.)
31. What are the general properties of matter ? (page 43.)
32. Can matter be divided *ad infinitum* ? (page 43 and 44.)
33. What is motion, and what is the diftinction between *absolute* and *relative* motion ? (page 45.)
34. What are Sir I. Newton's three laws of motion ? (pages 45 and 46.)
35. What is compound motion ? (page 47.)

## XII. THE SOLAR SYSTEM AND THE SUN.

1. What is the solar fyftem and why is it fo called ?  
(page 126.)
2. What part of the solar fyftem is called the centre of the world ? (page 127.)
3. Does not the fun revolve on its axis, and what other motion has it ?
4. Of what fhape is the fun, how far is it from the earth, and what are its diameter and magnitude ?
5. What is the comparative magnitude between the fun and the earth ? (page 128.)

## XIII. OF MERCURY.

1. What is the length of Mercury's year ? (page 129.)
2. What is the greateft elongation of Mercury ?
3. What is the diftance of Mercury from the fun ?

4. What

4. What is the diameter of Mercury? (page 130.)
5. What is the comparative magnitude between Mercury and the earth?
6. What is the comparison between the light and heat which Mercury receives from the sun, and the light and heat which the earth receives?
7. At what rate per hour are the inhabitants of Mercury (if any) carried round the sun? (page 131)

## XIV. OF VENUS.

1. When is Venus an evening star, and in what situation is she a morning star? (page 131.)
2. How long is Venus a morning star? (page 132.)
3. In how many days does Venus revolve round the sun?
4. The last transit of Venus over the sun's disc happened in 1769, when will the next transit happen?
5. What is the opinion of Dr Herschel respecting the mountains in Venus?
6. What is the opinion of M. Schroeter on the same subject? (page 141 in the note.)
7. What is the greatest elongation of Venus? (page 132.)
8. What is the diameter of Venus? (page 133.)
9. What is the magnitude of Venus?
10. What is the distance of Venus from the sun?
11. What is the comparison between the light and heat which Venus receives from the sun, and the light and heat which the earth receives?
12. At what rate per hour does Venus move round the sun?

## XV. OF THE EARTH.

1. What is the figure of the earth? (page 52.)
2. Why is the earth represented by a globe? (page 58.)
3. What proofs have we that the earth is globular? (page 53 and 54.)
4. What would be the elevation of Chimborazo, the highest of the Andes mountains, on an artificial globe of 18 inches diameter? (page 54, note.)
5. What is a spheroid, and how is it generated?
6. What

6. What is the difference between the polar and equatorial diameters of the earth? (page 56.)

7. What is the length of a degree?

8. What is the use of finding the length of a degree, and how can the magnitude of the earth be determined thereby? (page 57.)

9. Who was the first person who measured the length of a degree tolerably accurate?

10. What is the length of a degree according to the French admeasurement? (note, page 57 and 58.)

11. In what time does the earth revolve on its axis from West to East? (page 59.)

12. What is the diameter of the earth; what is its circumference, and how are they determined? (page 57, and note.)

13. What proofs can you give of the diurnal motion of the earth? (page 59 and 60.)

14. How do you explain the phenomena of the apparent diurnal motion of the sun? (page 60 and 61.)

15. What proofs can you give of the annual motion of the earth? (page 62.)

16. What is the distance of the earth from the sun, and how is it calculated? (page 62, and note page 63.)

17. At what rate per hour does the earth travel round the sun?

18. At what rate per hour are the inhabitants of the equator carried from west to east by the revolution of the earth on its axis? (page 64.)

19. How do you explain the motion of the earth round the sun? (page 65.)

20. How do you illustrate the phenomena of the different seasons of the year? (page 66 and 67.)

#### XVI. OF THE MOON.

1. How many kinds of lunar months are there? (page 134.)

2. What is a periodical month?

3. What is a synodical month?

4. When is the eccentricity of the moon's elliptical orbit the greatest? (page 135.)

5. When is the eccentricity of the moon's elliptical orbit the least? (page 135.)
6. Whether does the motion of the moon's nodes follow, or recede from the order of the signs?
7. In how many years do the moon's nodes form a complete revolution round the ecliptic?
8. In what space of time does the moon turn on her axis?
9. What is the libration of the moon? (page 136.)
10. Is the path of the moon convex, or concave towards the sun?
11. Please to explain the different phases of the moon? (pages 136, 137, and 138.)
12. What point on the earth has a fortnight's moon light and a fortnight's darkness, alternately? (page 138, and 139.)
13. What is the moon's mean horizontal parallax, and at what distance is she from the earth? (page 139.)
14. What is the magnitude of the moon when compared with that of the earth?
15. How many miles is the moon in diameter?
16. In how many days does the moon perform her revolution round the earth, and at what rate does she travel per hour?
17. In what manner have astronomers described the different spots on the moon's surface? (page 140.)
18. Have not astronomers discovered volcanoes, mountains, &c. in the moon? (page 140 and 141.)

## XVII. OF MARS.

1. What is the general appearance of Mars? (page 142.)
2. In what time does Mars revolve on his axis?
3. In what time does Mars perform his revolution round the sun, and at what rate does he travel per hour? (page 143.)
4. How far is Mars distant from the sun?
5. How many miles is Mars in diameter?
6. What is the comparative magnitude between Mars and the earth?

## XVIII. OF

## XVIII. OF CERES, PALLAS, JUNO, AND VESTA,

1. When and by whom was the planet or Asteroid Ceres discovered? (page 144.)
2. How many miles is Ceres in diameter?
3. What is the distance of Ceres from the sun, and what is the length of her year?
4. When and by whom was Pallas discovered?
5. What is the diameter of Pallas in English miles?
6. Who discovered the Asteroid Juno?
7. By whom was Vesta discovered?

## XIX. OF JUPITER, &amp;c.

1. In what situation is Jupiter a morning star, and in what situation is he an evening star? (page 145.)
2. In what time does Jupiter revolve on his axis?
3. What are Jupiter's belts?
4. In what time does Jupiter perform his revolution round the sun, and at what rate per hour does he travel? (page 146.)
5. What is the distance of Jupiter from the sun?
6. What is the diameter of Jupiter in English miles?
7. What is the comparative magnitude between Jupiter and the earth?
8. What is the comparison between the light and heat which Jupiter receives from the sun, and the light and heat which the earth receives?
9. How many satellites is Jupiter attended by? (page 147.)
10. By whom were the satellites of Jupiter discovered?
11. In what time do the respective satellites perform their revolutions round Jupiter? (page 147.)
12. In what manner are the longitudes of places determined by the satellites of Jupiter? (page 148.)
13. Please to explain the configuration of the satellites of Jupiter as given in the 12th page of the nautical almanac? (page 148 and 149)
14. How was the progressive motion of light discovered? (page 150.)

## XX. OF SATURN, &amp;c.

1. What is the appearance of Saturn when viewed through a telescope? (page 150.)

2. In what time does Saturn perform his revolution round the sun, and at what rate does he travel per hour?
3. What is the distance of Saturn from the sun?
4. How many English miles is Saturn in diameter, and what is his magnitude compared with that of the earth? (page 151.)
5. What is the comparison between the light and heat which Saturn receives from the sun, and the light and heat which the earth receives?
6. In what time does Saturn revolve on his axis?
7. How many moons is Saturn attended by, and by whom were they discovered?
8. Pray is not the 7th satellite the nearest to Saturn, and, if so, why was it not called the first satellite? (page 152.)
9. What is the ring of Saturn, and how may it be represented by the globe? (page 153.)
10. By whom was the ring of Saturn discovered?
11. In what time does the ring of Saturn revolve round the axis of Saturn?

#### XXI. OF THE GEORGIAN PLANET, &c.

1. When and by whom, was the Georgian planet discovered? (page 153.)
2. What is the appearance of the Georgian when viewed through a telescope? (page 154.)
3. In what time does the Georgian planet revolve round the sun, and at what rate per hour does it travel? (page 154.)
4. What is the comparative magnitude between the Georgian planet and the Earth?
5. How many satellites belong to the Georgian?
6. By whom were the satellites of the Georgian discovered, and in what order do they perform their revolutions round the planet? (page 155.)

*N.B.* The tutor may extend these questions to Chap. V, VI, VII, IX and X. Part I. and to Chap. II. Part II; also to the manner of solving the different problems, &c.

CHAPTER III.

A TABLE of the LATITUDES and LONGITUDES of some of the PRINCIPAL PLACES in the WORLD, with the Countries in which they are situated.—N.B. The Longitudes are reckoned from GREENWICH OBSERVATORY.

A.

Names of Places. Country or Sea. Latitudes. Longitudes.

Names of Places.	Country or Sea.	Latitudes.	Longitudes.
Abbeville	France	50 7 N.	1 49 E.
Aberdeen	Scotland	57 9 N.	2 28 W.
Abo	Sweden	60 27 N.	22 13 E.
Acapulco	Mexico	17 10 N.	101 45 W.
Achen	Sumatra I.	5 22 N.	95 40 E.
Adrianople	Turkey	41 10 N.	26 30 E.
Adventure Bay	New Holland	43 23 S.	147 30 E.
Agra	Hindooftan	26 43 N.	76 44 E.
Air	Scotland	54 25 N.	4 26 W.
Aix	France	43 32 N.	5 26 E.
Akerman	Turkey	46 25 N.	30 0 E.
Alderney I.	English Chan.	49 48 N.	2 15 W.
Aleppo	Syria	35 45 N.	37 20 E.
Alexandretta	Syria	36 35 N.	36 14 E.
Alexandria	Egypt	31 13 N.	29 55 E.
Algiers	Africa	36 49 N.	2 13 E.
Alicant	Spain	38 21 N.	0 30 W.
Amboyna I.	Moluccas	4 25 N.	127 20 E.
Amiens	France	49 53 N.	2 18 E.
Amsterdam	Holland	52 22 N.	4 51 E.
Amsterdam I.	Pacific Ocean	21 9 S.	174 46 W.
Ancona	Italy	43 38 N.	13 30 E.
St. Andrew's	Scotland	56 21 N.	2 49 W.
Angers	France	47 28 N.	0 33 W.
Angoulême	France	45 39 N.	0 9 E.
Angra	{ Tercera, A- zore I. }	38 39 N.	27 12 W.
Annapolis	Nova Scotia	44 52 N.	64 5 W.
Antibes	France	43 35 N.	7 7 E.

<i>Names of Places.</i>	<i>Country or Sea.</i>	<i>Latitudes.</i>	<i>Longitudes.</i>
Antwerp	Netherlands	51 13 N.	4 23 E.
Archangel	Russia	64 34 N.	38 58 E.
Arran I.	Scotland	55 39 N.	5 12 W.
Ascension I.	S. Atlantic	7 56 S.	14 21 W.
Astracan	Russia	46 21 N.	48 8 E.
Athens	Turkey Eur.	38 5 N.	23 52 E.
St. Augustine	Madagascar I.	23 35 S.	43 8 E.
St. Augustine	East Florida	30 10 N.	81 34 W.
Cape St. Augustine	Brazil	8 48 S.	35 5 W.
Ava	Asia	21 30 N.	96 0 E.
Cape Ava	Japan	34 45 N.	140 55 E.
Avignon	France	43 57 N.	4 48 E.
Avranches	France	48 41 N.	1 22 W.

## B.

Babelmandel Straits	Red Sea	12 50 N.	43 45 E.
Babylon (Ancient)	Syria	33 0 N.	42 46 E.
Bagdad	Syria	33 20 N.	44 24 E.
Balafore	Hindoostan	21 20 N.	86 0 E.
Baltimore	Ireland	51 16 N.	9 30 W.
Banca I. (South End)	Indian Ocean	3 15 S.	107 10 E.
Banda I.	Indian Ocean	4 30 N.	127 25 E.
Banff	Scotland	57 41 N.	2 31 W.
Bantry Bay	Ireland	51 26 N.	10 10 W.
Barbadoes I. (Bridgetown)	Caribb. Sea	13 0 N.	59 50 W.
Barcelona	Spain	41 23 N.	2 11 E.
Basil	Switzerland	47 35 N.	7 29 E.
Basse Terre	Guadaloupe	15 59 N.	61 54 W.
Bastia	Corfica	42 42 N.	9 25 E.
Batavia	Java I.	6 11 S.	106 52 E.
Bayonne	France	43 29 N.	1 30 W.
Buffora or Bassora	Turkey	30 45 N.	47 0 E.
Beachy Head	Suffex	50 44 N.	0 20 E.
Belfast	Ireland	54 43 N.	5 57 W.
Belgrade	Turkey	45 0 N.	21 20 E.

Names

<i>Names of Places.</i>	<i>Country or Sea.</i>	<i>Latitudes.</i>	<i>Longitudes.</i>
Bencoolen	Sumatra I.	3 49 S.	102 10 E.
Bergen	Norway	60 24 N.	5 20 E.
Berwick	Upon Tweed	55 47 N.	2 5 W.
Befançon	France	47 14 N.	6 3 E.
Bilboa	Spain	43 26 N.	3 23 W.
Blanco (Cape)	Africa	20 55 N.	17 10 W.
Blois	France	47 35 N.	1 20 E.
Bologna	Italy	44 29 N.	11 21 E.
Bombay I.	India	18 57 N.	72 38 E.
Boston	America	42 25 N.	70 37 W.
Botany Bay	New Holland	34 0 S.	151 23 E.
Boulogne	France	50 43 N.	1 37 E.
Bourbon I.	Indian Ocean	20 52 S.	55 30 E.
Bourdeaux	France	44 50 N.	0 35 W.
Bremen.	Germany	53 5 N.	8 49 E.
Breslaw	Silesia	51 3 N.	17 9 E.
Brest	France	48 23 N.	4 29 W.
Bridlington	Yorkshire	54 7 N.	0 2 W.
Brightelmstone	Suffex	50 50 N.	0 5 W.
Bristol	England	51 28 N.	2 35 W.
Brunswick	Germany	52 30 N.	10 24 E.
Brussels	Netherlands	50 51 N.	4 22 E.
Buccaresti	Turkey	44 27 N.	26 8 E.
Buda	Hungary	47 40 N.	19 20 E.
Buenos Ayres	S. America	34 35 S.	58 31 W.
Burgos	Spain	42 20 N.	3 30 W.

## C.

Cadiz or Cales	Spain	36 31 N.	6 12 W.
Caen	France	49 11 N.	0 22 W.
Cagliari	Sardinia I.	39 25 N.	9 38 E.
Cairo	Egypt	30 3 N.	31 21 E.
Calais	France	50 57 N.	1 51 E.
Calcutta	Bengal	22 35 N.	88 29 E.
Calmar	Sweden	56 40 N.	16 22 E.
Cambray	Netherlands	50 10 N.	3 13 E.
Cambridge	England	52 12 N.	0 4 E.

<i>Names of Places.</i>	<i>Country or Sea.</i>	<i>Latitudes.</i>	<i>Longitudes.</i>
Canary I. (N.E. } point)	Atlantic	28 13 N.	15 39 W.
Candia	Candy I.	35 19 N.	25 18 E.
Canterbury	England	51 18 N.	1 5 E.
Canton	China	23 8 N.	113 2 E.
Carlsrona	Sweden	56 20 N.	15 26 E.
Carthagera	Spain	37 37 N.	1 8 W.
Carthagera	Terra Firma	10 27 N.	75 27 W.
Cassel	Germany	51 19 N.	9 35 E.
Cavan	Ireland	54 52 N.	7 23 W.
Cayenne	I. of Cayenne	4 56 N.	3 41 E.
Chandernagore	Hindooftan	22 51 N.	88 29 E.
Chartres	France	48 27 N.	1 29 E.
Cherbourg	France	49 38 N.	1 37 W.
Christiana	Norway	59 55 N.	10 48 E.
Christmas Sound	{ Terra del } Fuego	55 22 S.	70 3 W.
St. Christopher's I.	Caribb. Sea	17 15 N.	62 43 W.
Civita Vecchia	Italy	42 5 N.	11 44 E.
Clermont	France	45 47 N.	3 5 E.
Cochin	India	9 33 N.	75 35 E.
Colmar	France	48 5 N.	7 22 E.
Cologne	Germany	50 55 N.	6 55 E.
Comorin (Cape)	India	7 56 N.	78 5 E.
Constantinople	Turkey	41 1 N.	28 54 E.
Copenhagen	Denmark	55 41 N.	12 35 E.
Cork	Ireland	51 54 N.	8 28 W.
Corvo	Azores	39 42 N.	31 6 W.
Coutances	France	49 1 N.	1 27 W.
Cracow	Poland	49 59 N.	19 50 E.
Cromartie	Scotland	57 43 N.	4 9 W.
St. Cruz I.	Atlantic Oc.	17 49 N.	64 53 W.
Cusco	Peru	12 25 S.	73 35 W.

## D.

Dantzic	Poland	54 22 N.	18 34 E.
Dardanelles' Straits	Turkey	40 10 N.	26 26 E.

Names

<i>Names of Places.</i>	<i>Country or Sea.</i>	<i>Latitudes.</i>	<i>Longitudes.</i>
Dartmouth	England	50° 21' N.	3° 42' W.
Delhi	Hindooſtan	28° 37' N.	77° 40' E.
Deſeada I.	Caribb. Sea	16° 36' N.	61° 10' W.
S. Dennis	Iſle Bourbon	20° 52' S.	55° 30' E.
Dieppe	France	49° 55' N.	1° 4' E.
Dingle Bay	Ireland	51° 55' N.	10° 40' W.
St. Domingo	Caribb. Sea	18° 20' N.	69° 46' W.
Dort	United Prov.	51° 47' N.	4° 35' E.
Douglas	Iſle of Man	54° 7' N.	4° 38' W.
Dover	England	51° 8' N.	1° 18' E.
Drontheim	Norway	63° 26' N.	10° 22' E.
Dublin	Ireland	53° 21' N.	6° 6' W.
Dunbar	Scotland	56° 1' N.	2° 33' W.
Dundee	Scotland	56° 28' N.	2° 58' W.
Dungarvon	Ireland	52° 0' N.	7° 50' W.
Dungenefs	England	50° 52' N.	0° 59' E.
Dunkirk	France	51° 2' N.	2° 22' E.
Durham	England	54° 44' N.	1° 15' W.
Durazzo	Turkey	41° 58' N.	25° 0' E.

## E.

East Cape	New Zealand	37° 42' S.	174° 30' W.
Eddyſtone light	England	50° 8' N.	4° 24' W.
Edinburgh	Scotland	55° 58' N.	3° 12' W.
Elbing	Poland	54° 12' N.	20° 35' E.
Elfinore	Denmark	56° 2' N.	12° 37' E.
Embden	Germany	53° 12' N.	7° 16' E.
Embrun	France	44° 34' N.	6° 29' E.
Ephesus	Turkey in Aſia	38° 0' N.	27° 53' E.
Erzerum	Turkey in Aſia	39° 56' N.	48° 35' E.
Euſtatia	Caribb. Sea	17° 30' N.	63° 14' W.
Evreux	France	49° 1' N.	1° 9' E.
Exeter	England	50° 44' N.	3° 34' W.

## F.

Fair Iſland	Orkney Iſlands	59° 30' N.	1° 46' W.
Falmouth	England	50° 8' N.	5° 2' W.

*Names of Places. Country or Sea. Latitudes. Longitudes.*

False Bay	{ Cape of Good Hope	34 10 S.	18 33 E.
Farewell (Cape)	Greenland	59 30 N.	42 42 W.
Fayal Town	Azore Islands	38 32 N.	28 41 W.
Fern Island	England	55 38 N.	1 44 W.
Ferrara	Italy	44 50 N.	11 36 E.
Ferro Island (Town)	Canary Isles	27 47 N.	17 46 W.
Ferrol	Spain	43 29 N.	8 15 W.
Finisterre (Cape)	Spain	42 52 N.	9 17 W.
Flamborough Head	England	54 11 N.	0 19 E.
Florence	Italy	43 46 N.	11 2 E.
Flores	Azore Islands	39 34 N.	31 0 W.
Florida (Cape)	S. America	25 47 N.	80 35 W.
Flushing	United Prov.	51 27 N.	3 33 E.
N. Foreland	England	51 25 N.	1 28 E.
Fortaventura (W. point)	{ Canary Isles	28 4 N.	14 31 W.
Fortrose	Scotland	57 40 N.	4 7 W.
Foulness	England	52 57 N.	0 53 E.
France (Isle of)	Indian Ocean	20 27 S.	57 16 E.
François (Cape)	St. Domingo	19 46 N.	72 18 W.
Francfort (on the Main)	{ Germany	49 55 N.	8 35 E.
Funchal	I. of Madeira	32 38 N.	17 6 W.
Furneaux Island	Society Isles	17 11 S.	143 7 W.

## G.

Gap	France	44 33 N.	6 5 E.
Galway	Ireland	53 10 N.	10 1 W.
Geneva	Switzerland	46 12 N.	6 0 E.
Genoa	Italy	44 25 N.	8 36 E.
St. George (Town)	Bermudas I.	32 22 N.	64 33 W.
Fort St. George	Or Madras	13 5 N.	80 29 E.
Ghent	Netherlands	51 3 N.	3 44 E.
Gibraltar	Spain	36 5 N.	5 22 W.
Glasgow	Scotland	55 52 N.	4 15 W.
Goa I.	Malabar Coast	15 31 N.	73 45 E.

<i>Names of Places.</i>	<i>Country or Sea.</i>	<i>Latitudes.</i>	<i>Longitudes.</i>
Gomera I.	Canary Isles	28° 6' N.	17° 8' W.
Good Hope (Cape)	Africa	34 29 S.	18 23 E.
Goree I.	Africa	14 10 N.	17 25 W.
Gottenburg	Sweden	57 42 N.	11 39 E.
Gottingen (Obfer.)	Germany	51 32 N.	9 53 E.
Granville	France	48 50 N.	1 37 W.
Graciosa	Azore Islands	39 2 N.	27 58 W.
Gravelines	France	50 59 N.	2 7 E.
Gratz	Germany	47 4 N.	15 26 E.
Gravefend	England	51 28 N.	0 20 E.
Greenwich (Obf.)	England	51 29 N.	0 0
Guadaloupe	Caribb. I.	15 59 N.	61 59 W.
Guernfey	English Chan.	49 30 N.	2 52 W.

## H.

Haerlem	United Prov.	52 22 N.	4 36 E.
Hague	United Prov.	52 4 N.	4 17 E.
Halifax	Nova Scotia	44 46 N.	63 27 W.
Hamburg	Germany	53 34 N.	9 55 E.
Hanover	Germany	52 22 N.	9 48 E.
Harwich	England	52 11 N.	1 13 E.
Hatteras (Cape)	N. America	35 12 N.	76 5 W.
Havre de Grace	France	49 29 N.	0 6 E.
Havannah	Isle of Cuba	23 12 N.	82 18 W.
St. Helena (James Town)	Atlantic	15 55 S.	5 49 W.
Hervey's I.	Society Isles	19 17 S.	158 48 W.
La Hogue (Cape)	France	49 45 N.	1 57 W.
Holyhead	Wales	53 23 N.	4 45 W.
Horn (Cape)	S. America	55 58 S.	67 26 W.
Hull	England	53 48 N.	0 33 W.

## J and I

Jackfon (Port)	New Holland	33 52 S.	151 19 E.
Jaffa	Syria	32 5 N.	35 10 E.
Jackutskoi	Siberia	62 1 N.	129 48 E.
Janeiro (Rio)	Brazil	22 54 S.	42 44 W.

Names

<i>Names of Places.</i>	<i>Country or Sea.</i>	<i>Latitudes.</i>	<i>Longitudes.</i>
Jaffy	Turkey	47° 8' N.	27° 30' E.
Java Head	I. of Java	6° 49' S.	105° 14' E.
Jeddo	Isle of Japan	36° 0' N.	139° 40' E.
Jerusalem	Syria	31° 46' N.	35° 20' E.
Jersey Isle (St. Aubins)	Eng. Chan.	49° 13' N.	2° 12' W.
Ingolstadt	Germany	48° 46' N.	11° 22' E.
Inverness	Scotland	57° 36' N.	4° 15' W.
Joannah	Comora Isles	12° 5' S.	45° 40' E.
St. John's	Newfoundland	47° 32' N.	52° 26' W.
St. Joseph's	California	23° 4' N.	109° 42' W.
Islamabad	Hindooftan	22° 20' N.	91° 45' E.
Ispahan	Persia	32° 25' N.	52° 50' E.
Jodda, or Gidda	Arabia	21° 29' N.	39° 22' E.
St. Julian (Port)	Patagonia	49° 10' S.	68° 44' W.
Juan Fernández	Pacific Ocean	33° 45' S.	78° 37' W.

## K.

Kamtschatka	Siberia	56° 20' N.	163° 0' E.
St. Kilda	Hebrides	57° 47' N.	8° 40' W.
Kinfale	Ireland	51° 32' N.	8° 50' W.
Kiow	Russia	50° 27' N.	30° 27' E.
Kola	Lapland	68° 52' N.	33° 1' E.
Koningberg	Prussia	54° 43' N.	21° 35' E.

## L.

Ladrone I. (Guam)	Pacific Ocean	13° 10' N.	143° 15' E.
Landau	France	49° 11' N.	8° 7' E.
Lassa	Thibet	30° 12' N.	91° 20' E.
Landscroon	Sweden	55° 52' N.	12° 50' E.
Land's End	England	50° 6' N.	5° 54' W.
Laufanne	Switzerland	46° 31' N.	6° 45' E.
Leeds	England	53° 48' N.	1° 34' W.
Leghorn	Italy	43° 33' N.	10° 16' E.
Leith	Scotland	56° 0' N.	3° 11' E.
Leipfic	Germany	51° 19' N.	12° 20' E.
Leyden	United Prov.	52° 8' N.	4° 28' E.

Names

*Names of Places. Country or Sea. Latitudes. Longitudes.*

Lerwick, or Leer- wick	} Shetland Isles	60° 13' N.	0° 55' W.
Liege		Netherlands	50 37 N.
Lima	Peru	12 1 S.	76 49 W.
Limerick	Ireland	52 22 N.	9 53 W.
Limoges	France	45 50 N.	1 16 E.
Lintz	Germany	48 16 N.	13 57 E.
Lisle	Netherlands	50 38 N.	3 4 E.
Lisbon	Portugal	38 40 N.	9 10 W.
Liverpool	England	53 24 N.	3 12 W.
Lizard	England	49 57 N.	5 21 W.
London (St. Paul's)	England	51 31 N.	0 6 W.
Louisbourg	} I. of Cape Breton }	45 54 N.	59 54 W.
Louvain		Netherlands	50 53 N.
St. Lucia	Caribb. Sea	13 24 N.	60 51 W.
Lunden	Sweden	55 42 N.	13 2 E.
Luneville	France	48 35 N.	6 30 E.
Luxembourg	Netherlands	49 37 N.	6 12 E.
Lynn	England	52 45 N.	0 23 E.
Lyons	France	45 46 N.	4 49 E.

M.

Macao	China	22 13 N.	113 46 E.
Macassar	I. of Celebes	5 9 S.	119 49 E.
Madeira I. (Fun- chal)	} Atlantic	32 38 N.	17 6 W.
Madras		India	13 5 N.
Madrid	Spain	40 25 N.	3 12 W.
Mahon (Port)	Minorca	39 51 N.	3 48 E.
Majorca I.	Mediterra.	39 35 N.	2 30 E.
Malacca	India	2 12 N.	102 5 E.
Malines, or Mech- lin	} Netherlands	51 2 N.	4 29 E.
St. Malo		France	48 39 N.
Malta	Mediterra.	35 54 N.	14 28 E.
Manilla	Philippine Is.	14 36 N.	120 53 E.

*Names*

<i>Names of Places.</i>	<i>Country or Sea.</i>	<i>Latitudes.</i>	<i>Longitudes.</i>
Marigalante I.	Caribb. Sea	15° 55' N.	61° 11' W.
Marfeilles	France	43 18 N.	5 22 E.
Martinico	Caribb. Sea	14 44 N.	61 21 W.
Mayence or Mentz	Germany	49 54 N.	8 20 E.
Mayo I.	Cape Verd Is.	15 10 N.	23 5 W.
Mecca	Arabia	21 40 N.	41 0 E.
Mexico	America	19 26 N.	100 6 W.
Milan	Italy	45 28 N.	9 12 E.
Minorca	Medditerran.	39 51 N.	3 54 E.
Mocha	Arabia	13 44 N.	44 4 E.
Modena	Italy	44 34 N.	11 12 E.
Montpellier	France	43 37 N.	3 53 E.
Montreal	Canada	45 50 N.	73 11 W.
Moscow	Ruffia	55 46 N.	37 33 E.
Munich	Germany	48 10 N.	11 30 E.

## N.

Namur	Netherlands	50 28 N.	4 46 E.
Nancy	France	48 42 N.	6 10 E.
Nankin	China	32 5 N.	118 46 E.
Nantes	France	47 13 N.	1 34 W.
Naples	Italy	40 50 N.	14 17 E.
Narbonne	France	43 11 N.	3 0 E.
Naze	Norway	57 58 N.	7 3 E.
Newcastle-upon-Tyne	} England	55 3 N.	1 30 W.
Niagara	Canada	43 4 N.	79 8 W.
Nice	France	43 42 N.	7 17 E.
Nieuport	Flanders	51 8 N.	2 45 E.
Nifmes	France	43 50 N.	4 19 E.
Norfolk I.	N. Holland	29 2 S.	168 10 E.
North Cape	Lapland	71 30 N.	25 57 E.
Nuremberg	Germany	49 27 N.	11 4 E.

## O.

Ockzakow	Ruffia	45 12 N.	34 40 E.
Oeland I. (S. end)	Sweden	56 15 N.	18 35 E.

Names

<i>Names of Places.</i>	<i>Country or Sea.</i>	<i>Latitudes.</i>	<i>Longitudes.</i>
Oleron I.	France	46 3 N	1 25 W.
St. Omer	Netherlands	50 45 N.	2 15 E.
Oporto	Portugal	41 10 N.	8 27 W.
Orbitello	Italy	42 32 N.	12 7 E.
Orleans (New)	Louifiana	29 58 N.	89 59 W.
Ortegal (Cape)	Spain	43 46 N.	7 39 W.
Osnaburg I.	Society Is.	17 52 S.	148 6 W.
Ostend	Netherlands	51 14 N.	2 56 E.
O'why'hee (N.end.)	Sandwich Is.	18 54 N.	155 45 W.
Oxford (observ.)	England	51 45 N.	1 15 W.

P.

Padua	Italy	45 14 N.	11 52 E.
Palermo	Sicily	38 10 N.	13 43 E.
Palma I.	Canary Islands	28 37 N.	17 50 W.
Panama	Mexico	8 48 N.	80 21 W.
Paris (Obfer.)	France	48 50 N.	2 20 E.
Pegu	India	17 0 N.	96 58 E.
Pekin	China	39 54 N.	116 27 E.
Perigueux	France	45 11 N.	0 43 E.
Perpignan	France	42 42 N.	2 54 E.
Peterhead	Scotland	57 32 N.	1 46 W.
Petersburg	Ruffia	59 56 N.	30 19 E.
Philadelphia	America	39 57 N.	75 13 W.
Pico I.	Azore Is.	38 29 N.	28 26 W.
Pifa	Italy	43 43 N.	10 23 E.
Plymouth	England	50 22 N.	4 16 W.
Poitiers	France	46 35 N.	0 21 E.
Pondicherry	India	11 42 N.	79 53 E.
Port Glasgou	Scotland	55 56 N.	4 38 W.
Portland (light-house)	England	50 31 N.	2 27 W.
Porto Bello	America	9 33 N.	79 50 W.
Port Royal	Jamaica	18 0 N.	76 45 W.
Portsmouth	England	50 47 N.	1 6 W.
Prague	Bohemia	50 5 N.	14 24 E.

*Names*

*Names of Places. Country or Sea. Latitudes. Longitudes.*

Presburg	Hungary	48° 8' N.	17° 33' E.
Providence	America	41° 51' N.	71° 26' W.

## Q.

Quebec	Canada	46° 55' N.	69° 53' W.
Queda	Malacca	6° 15' N.	100° 12' E.
Quimper	France	47° 58' N.	4° 7' W.
St. Quintin	France	49° 51' N.	3° 17' E.
Quiros (Cape)	New Hebrides	14° 56' S.	167° 20' E.
Quito	Peru	0° 13' S.	77° 55' W.

## R.

Ramhead	Cornwall	50° 19' N.	4° 20' W.
Ramsby	Isle of Man	54° 17' N.	4° 26' W.
Ramsgate	England	51° 20' N.	1° 24' E.
Ravenna	Italy	44° 25' N.	12° 10' E.
Rennes	France	48° 7' N.	1° 42' W.
Rheims	France	49° 15' N.	4° 2' E.
Rhodes (I. of)	Archipelago	35° 27' N.	28° 45' E.
Rhode Island	America	41° 28' N.	71° 30' W.
Riga	Russia	57° 5' N.	25° 5' E.
Rochelle	France	46° 9' N.	1° 10' W.
Rochester	England	51° 26' N.	0° 30' E.
Rome	Italy	41° 54' N.	12° 29' E.
Rothfay	Isle of Bute	55° 50' N.	5° 17' W.
Rotterdam	United Prov.	51° 56' N.	4° 28' E.
Rouen	France	49° 27' N.	1° 5' W.
Rugen I.	Baltic	54° 32' N.	14° 30' E.
Rye	England	50° 55' N.	0° 44' E.

## S.

Salerno	Italy	40° 39' N.	14° 48' E.
Salisbury	England	51° 4' N.	1° 47' W.
Sall I.	Cape Verd Is.	16° 38' N.	22° 56' W.
Salle	Morocco	24° 10' N.	6° 43' W.
Samana	St. Domingo	19° 15' N.	69° 16' W.

*Names*

*Names of Places. Country or Sea. Latitudes. Longitudes.*

		°	'	N.	°	'	E.
Samarcand	W. Tartary	39	45	N.	63	20	E.
Samos I.	Archipelago	37	46	N.	27	13	E.
Sancta Cruz	Teneriffe	28	27	N.	16	16	W.
Sandwich	England	51	19	N.	1	15	E.
Saratov	Russia	51	30	N.	46	0	E.
Savannah	N. America	32	3	N.	81	24	W.
Scanderoon	Syria	36	35	N.	36	14	E.
Scarborough	England	54	21	N.	0	18	W.
Scaw Light	Denmark	57	44	N.	10	37	E.
Schelling I.	United Prov.	53	17	N.	5	7	E.
Schirauz	Cap. of Persia.	29	40	N.	54	30	E.
Scilly Isles	English Chan.	49	56	N.	6	46	W.
Sedan	France	49	42	N.	4	57	E.
Senegal	Africa	15	53	N.	16	21	W.
Siam	India	14	18	N.	100	50	E.
Smyrna	Natolia	38	28	N.	27	20	E.
Southampton	England	50	55	N.	1	5	W.
Start Point	England	50	9	N.	3	51	W.
Stockholm	Sweden	59	21	N.	18	4	E.
Stockton	England	54	41	N.	1	9	W.
Strafburg	France	48	5	N.	7	45	E.
Stralsund	Germany	54	23	N.	14	10	E.
Suez	Africa	29	50	N.	33	27	E.
Surat	India	21	10	N.	72	22	E.
Surinam	S. America	6	30	N.	55	30	W.
Swansea	Wales	51	40	N.	4	30	W.
Syracuse	Isle of Sicily	37	4	N.	15	31	E.

## T.

Tamarin Town	Isle of Socotra	12	30	N.	53	9	E.
Tangier	Coast of Barbary	35	55	N.	5	45	W.
Tarento	Italy	40	43	N.	17	3	E.
Tenedos I.	Archipelago	39	57	N.	26	14	E.
Teneriffe (Peak)	Canary Islands	28	13	N.	16	29	W.
Tercera I.	Azore Islands	38	45	N.	27	6	W.
Texel I.	United Prov.	53	10	N.	4	59	E.
Thionville	France	49	21	N.	6	10	E.

*Names*

*Names of Places. Country or Sea. Latitudes. Longitudes.*

Tobolsk	Siberia	58° 12' N.	68° 25' E.
Tobago I.	Caribb. Sea	11 15 N.	60 27 W.
Toledo	Spain	39 50 N.	3 20 W.
Tomsk	Siberia	56 30 N.	84 59 E.
Torbay	English Chan.	50 33 N.	3 42 W.
Tornea	Lapland	65 51 N.	24 12 E.
Toulouse	France	43 36 N.	1 26 E.
Trieste	Adriatic Sea	45 51 N.	14 3 E.
Trincomalé	Isle of Ceylon	8 32 N.	81 11 E.
Tripoly	Barbary	32 54 N.	13 5 E.
Troyes	France	48 18 N.	4 5 E.
Turin	Piedmont	45 4 N.	7 40 E.

## U &amp; V.

Uliateah	Society Islands	16 45 S.	151 31 W.
Upfal	Sweden	59 52 N.	17 42 E.
Uraniburgh	Denmark	55 54 N.	12 52 E.
Ushant I.	Coast of France	48 28 N.	5 4 W.
Valenciennes	France	50 21 N.	3 32 E.
Valencia	Spain	39 30 N.	0 40 W.
Vannes	France	47 39 N.	2 46 W.
Venice	Italy	45 26 N.	12 4 E.
Vera Cruz	Mexico	19 12 N.	97 30 W.
Verd (Cape)	Africa	14 45 N.	17 33 W.
Verdun	France	49 9 N.	5 23 E.
Verona	Italy	45 26 N.	11 18 E.
Verfailles	France	48 48 N.	2 7 E.
Vienna (Obser.)	Austria	48 12 N.	16 16 E.
Vigo	Spain	42 14 N.	8 28 W.
Vincent (Cape)	Spain	37 3 N.	8 59 W.
Vintimiglia	Italy	43 53 N.	7 37 E.
Virgin Gorda	West Indies	18 18 N.	64 0 W.

## W.

Wakefield	England	53 41 N.	1 33 W.
Wardhuys	Lapland	70 23 N.	31 7 E.

*Names*

*Names of Places. Country or Sea. Latitudes. Longitudes.*

<i>Names of Places.</i>	<i>Country or Sea.</i>	<i>Latitudes.</i>	<i>Longitudes.</i>
Warsaw	Poland	52 14 N.	21 0 E.
Washington	N. America	38 53 N.	77 43 W.
Wexford	Ireland	52 22 N.	6 30 W.
Weymouth	England	52 40 N.	2 34 W.
Whitehaven	England	54 25 N.	3 23 W.
Wilna	Poland	54 41 N.	25 27 E.
Wittenburg	Germany	51 53 N.	12 44 E.
Worcester	England	52 9 N.	2 0 W.
Wurtzburg	Germany	49 46 N.	10 14 E.
Wyburg	Russia	60 55 N.	30 20 E.

Y.

Yarmouth	England	52 55 N.	1 40 E.
York	England	53 59 N.	1 7 W.
York (New)	N. America	40 43 N.	74 10 W.
Youghall	Ireland	51 48 N.	8 6 W.

AN ALPHABETICAL LIST of the CONSTELLATIONS with the RIGHT ASCENSION (R) and DECLINATION (D) of the MIDDLE OF EACH, for the ready finding them on the Globe.

N.B. The Roman characters in the left hand columns refer to tables I, II, III, IV, V, VI, and VII, at pages 24, 25, 26, and 27, where the English names of the constellations are given, together with the number of stars in each, and the names of the principal stars: The letter N or S, immediately following the name of the constellation, shews whether it be north or south of the zodiac; if the constellation be situated in the zodiac it has the letter Z annexed to it. N and S in the column marked D, point out whether the middle of the constellation has north or south declination

				R.	D.
III.	Andromeda.	N.	-	14	34 N.
II.	Antinous.	N.	-	292	0
VII.	Apus, vel Avis Indica	S.	-	252	75 S.
I.	Aquarius.	Z.	-	335	4 S.
II.	Aquila.	N.	-	295	8 N.
VII.	Ara.	S.	-	255	55 S.
I.	Aries.	Z.	-	30	22 N.
VII.	Argo Navis.	S.	-	115	50 S.
III.	Asterion et Chæra.	N.	-	200	40 N.
IV.	Auriga.	N.	-	75	45 N.
III.	Böotes.	N.	-	212	20 N.
VI.	Brandenburgium Sceptrum.	S.	-	67	15 S.
IV.	Cameleopardalus.	N.	-	68	70 N.
I.	Cancer.	Z.	-	128	20 N.
VI.	Canis Major.	S.	-	105	20 S.
V.	Canis Minor.	S.	-	110	5 N.
I.	Capricornus.	Z.	-	310	20 S.
IV.	Caput Medusæ.	-	-	44	40 N.
IV.	Cassiopeia.	N.	-	12	60 N.
VII.	Centaurus.	S.	-	200	50 S.
IV.	Cepheus.	N.	-	338	65 N.
V.	Cetus.	S.	-	25	12 S.
III.	Cerberus.	N.	-	271	22 N.
VII.	Chamæleon.	S.	-	175	78 S.
VII.	Circinus.	S.	-	222	64 S.
VI.	Columba Noachi.	S.	-	85	35 S.
III.	Coma Berenices.	N.	-	185	26 N.
IV.	Cor Caroli.	N.	-	191	39 N.
VII.	Corona Australis.	S.	-	278	40 S.
III.	Corona Borealis.	N.	-	235	30 N.
VI.	Corvus.	S.	-	185	15 S.
VI.	Crater.	S.	-	168	15 S.
VII.	Crux.	S.	-	183	60 S.
IV.	Cygnus.	N.	-	308	42 N.
III.	Delphinus.	N.	-	308	15 N.
VII.	Dorado or Xiphias.	S.	-	75	62 S.
IV.	Draco.	N.	-	270	66 N.

		R.	D.
II.	Equulus. N.	316	5 N.
VII.	Equuleus Pictorius. S.	84	55 S.
V.	Eridanus. S.	60	10 S.
VI.	Fornax Chemica. S.	42	30 S.
I.	Gemini. Z.	111	32 N.
VII.	Grus. S.	330	45 S.
III.	Hercules. N.	255	22 N.
VII.	Horologium. S.	40	60 S.
V.	Hydra. S.	139	8 S.
VII.	Hydrus. S.	28	68 S.
VII.	Indus. S.	315	55 S.
IV.	Lacerta. N.	336	43 N.
I.	{ Leo, or { Leo Major. Z. }	150	15 N.
III.	Leo Minor. N.	150	35 N.
VI.	Lepus. S.	80	18 S.
I.	Libra. Z.	226	8 S.
VII.	Lupus. S.	230	45 S.
IV.	Lynx. N.	111	50 N.
III.	Lyra. N.	283	38 N.
VI.	Machina Pneumatica. S.	150	32 S.
VI.	Microscopium. S.	315	35 S.
V.	Monoceros. S.	110	0
II.	Mons Mænalus. N.	225	5 N.
VII.	Mons Mensæ. S.	76	72 S.
III.	Musca. N.	40	27 N.
VII.	Musca Australis, vel Apis. S.	185	68 S.
VIII.	Norma, vel quadra Euclidis. S.	242	45 S.
VII.	Octans Hadleianus. S.	310	80 S.
VI.	Officina Sculptoria. S.	3	38 S.
V.	Orion. S.	80	0
VII.	Pavo. S.	302	68 S.
III.	Pegasus. N.	340	14 N.
IV.	Perseus. N.	46	49 N.
VII.	Phœnix. S.	10	50 S.
I.	Pisces. Z.	5	10 N.
VI.	Piscis notius, vel Australis. S.	335	30 S.
VII.	Pisces volans. S.	127	68 S.
VII.	Praxiteles, vel cela Sculptoria. S.	68	40 S.
VI.	Pyxis Nautica. S.	130	30 S.
VII.	Reticulus Rhomboidalis. S.	62	62 S.
VII.	Robur Caroli. S.	159	50 S.
I.	Sagittarius. Z.	285	35 S.
III.	Sagitta. N.	295	18 N.
V.	Sextans. S.	5	0
I.	Scorpio. Z.	244	26 S.

					R.	D.
II.	Scutum Sobieski.	N.	-	-	275	10 S.
II.	Serpens.	N.	-	-	235	10 N.
II.	Serpentarius.	N.	-	-	260	13 N.
I.	Taurus.	Z.	-	-	65	16 N.
II.	Taurus Poniatowski.	N.	-	-	275	7 N.
VII.	Telescopium.	S.	-	-	278	50 S.
VII.	Touchan.	S.	-	-	359	66 S.
III.	Triangulum.	N.	-	-	27	32 N.
III.	Triangulum Australes.	S.	-	-	238	65 S.
VII.	Triangulum Minus.	N.	-	-	32	28 N.
IV.	Urfa Major.	N.	-	-	153	60 N.
IV.	Urfa Minor.	N.	-	-	235	75 N.
I.	Virgo.	Z.	-	-	195	5 N.
III.	Vulpecula et Anfer.	N.	-	-	300	25 N.
VII.	Xiphias.	S. <sup>9</sup>	-	-	75	62 S.

FINIS.

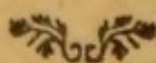
*In the press, and speedily will be published.*

THE ELEMENTS OF PLANE GEOMETRY, comprehending the first SIX BOOKS OF EUCLID, from the text of Dr. SIMSON, with notes critical and explanatory. To which will be added BOOK VII. containing several important propositions, not to be found in EUCLID, and BOOK VIII. consisting of PRACTICAL GEOMETRY.

The whole explained in an easy and familiar manner, for the instruction of youth.

*L'Arithmétique et la Géométrie sont les deux ailes des Mathématiques.*

LAGRANGE.



Strahan and Preston,  
Printers-Street, London.



Fig. III.

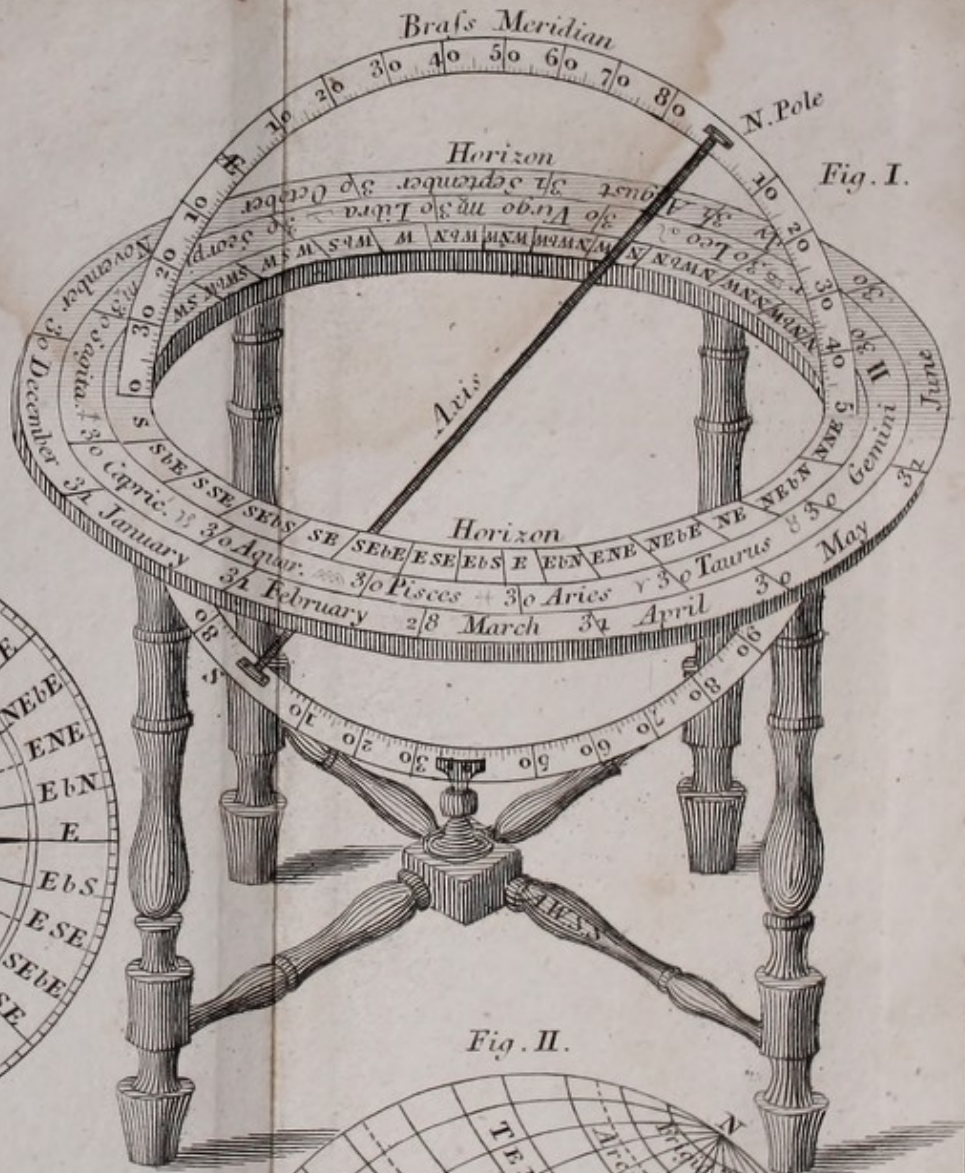


Fig. I.

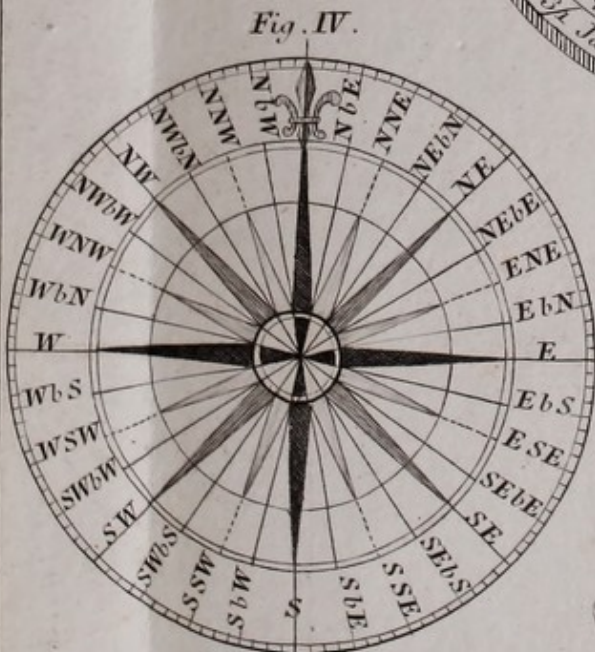


Fig. IV.

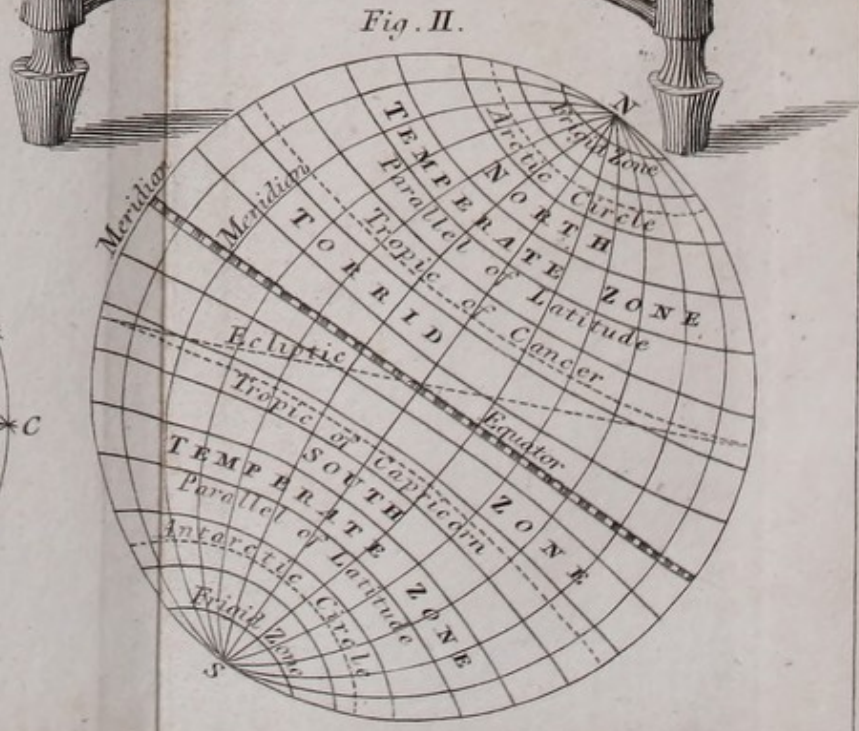


Fig. II.

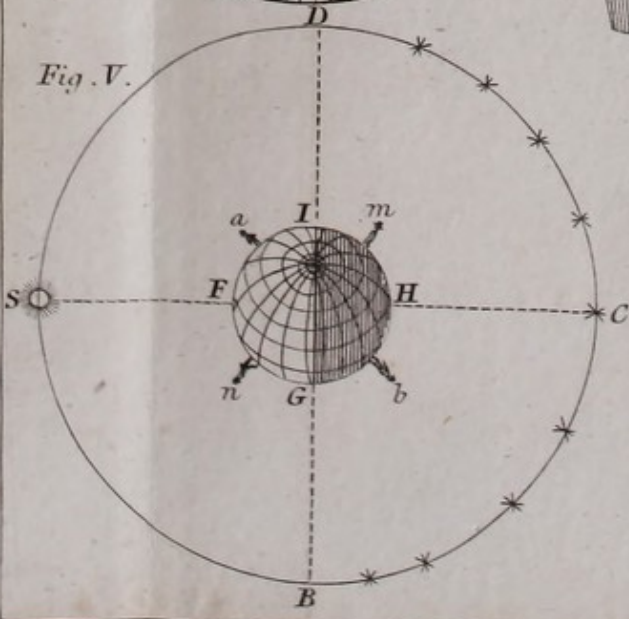
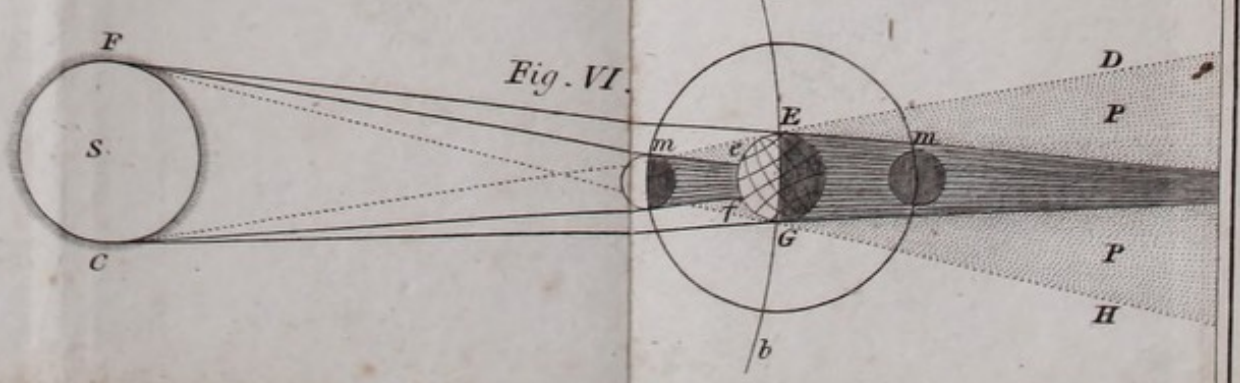
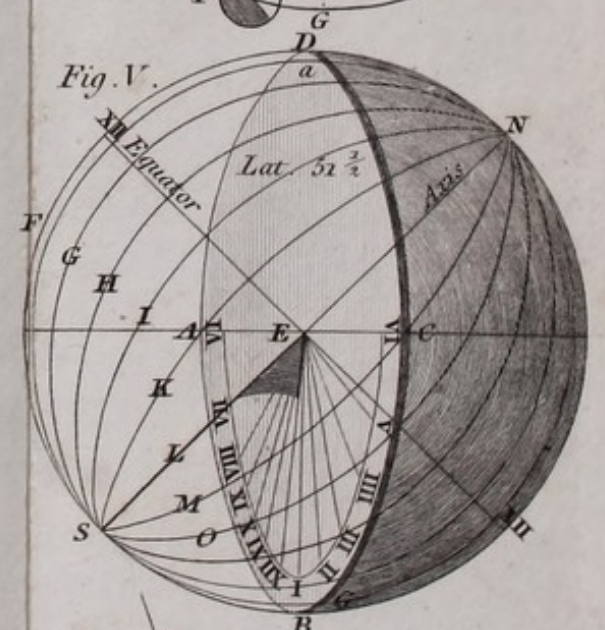
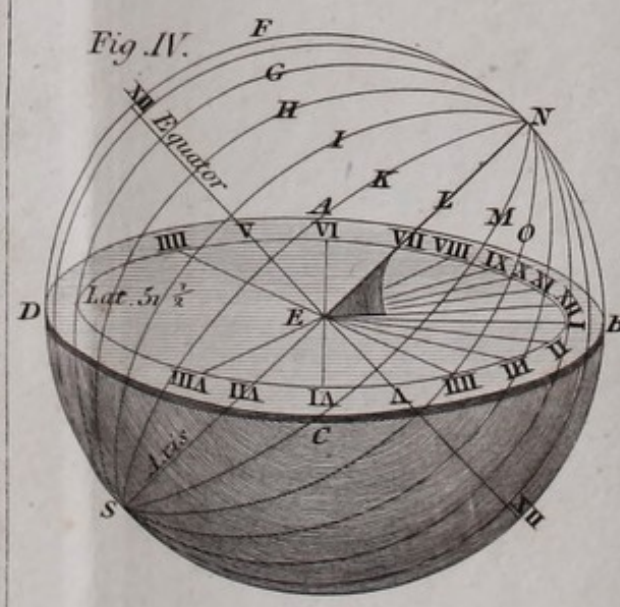
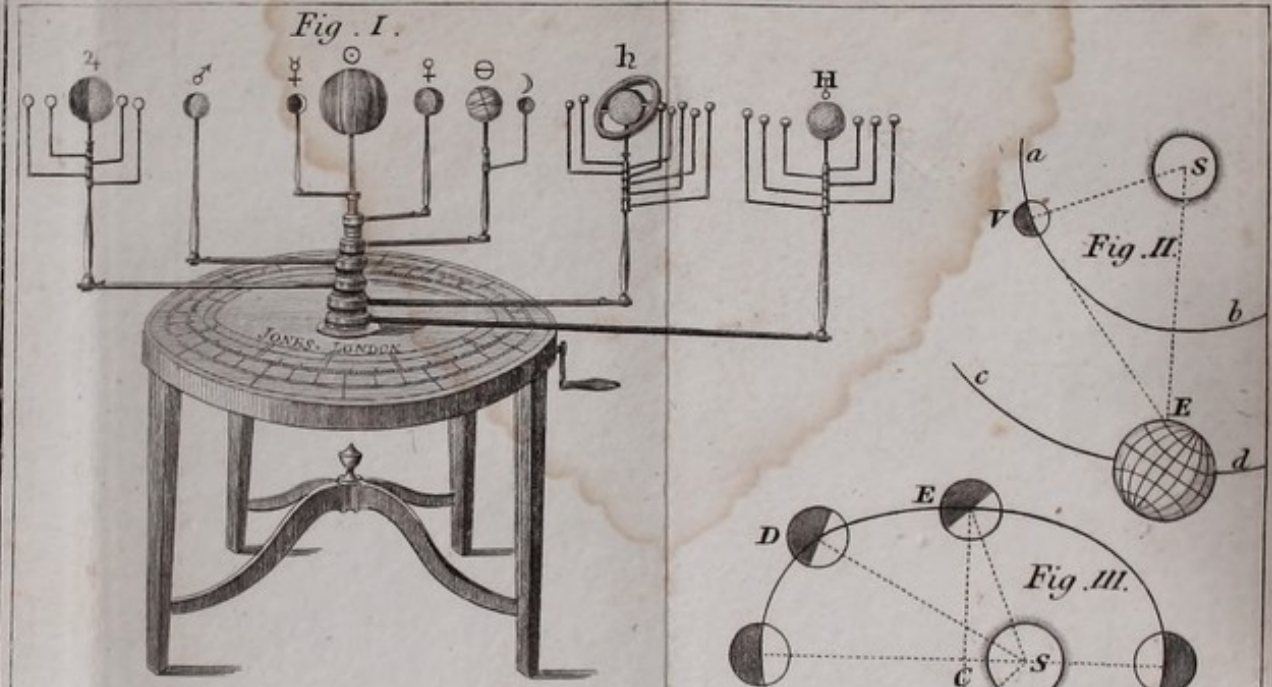


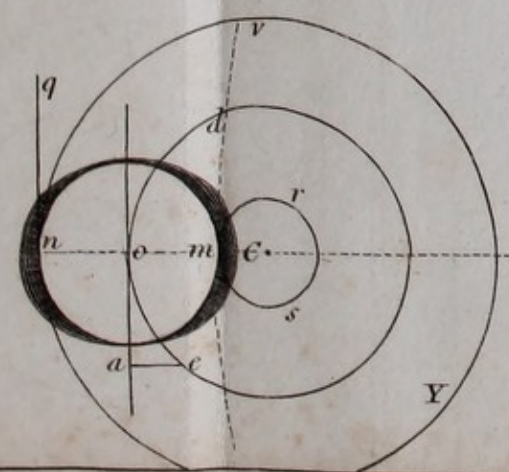
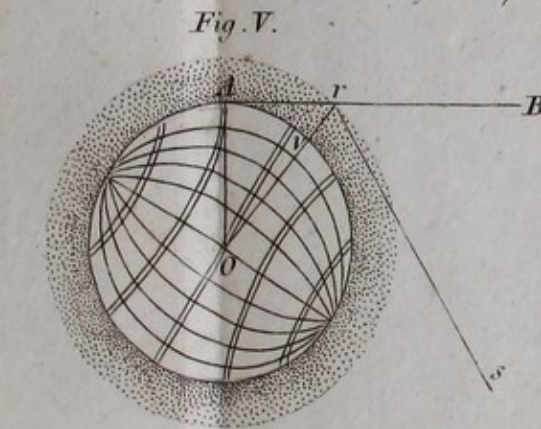
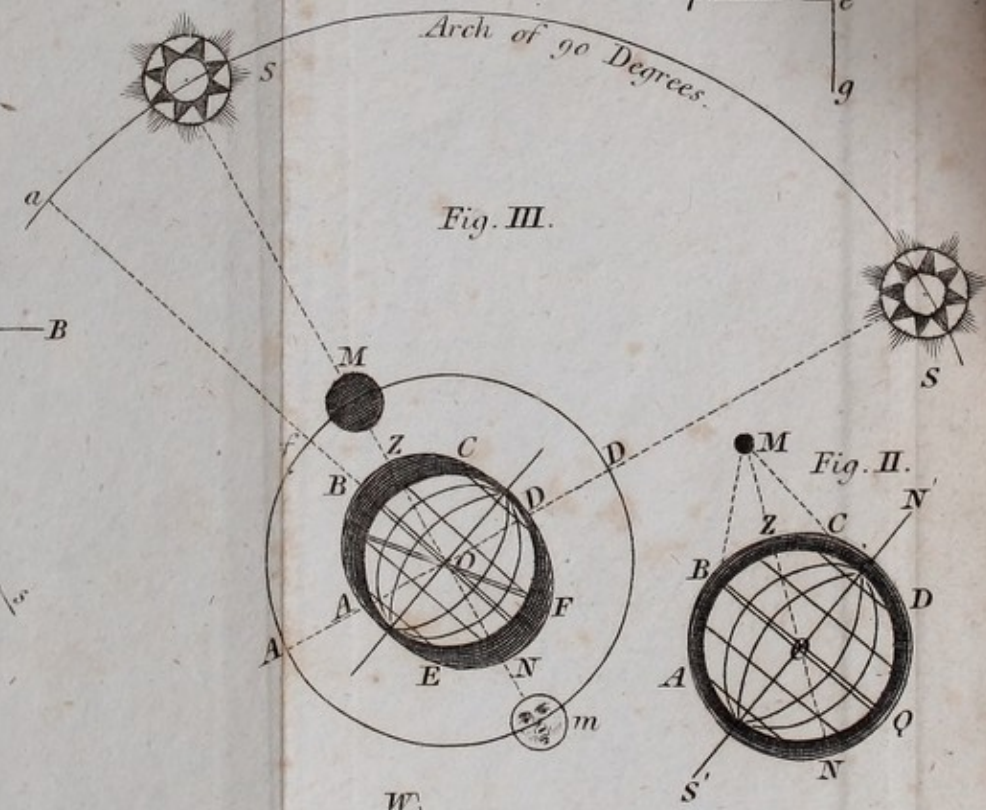
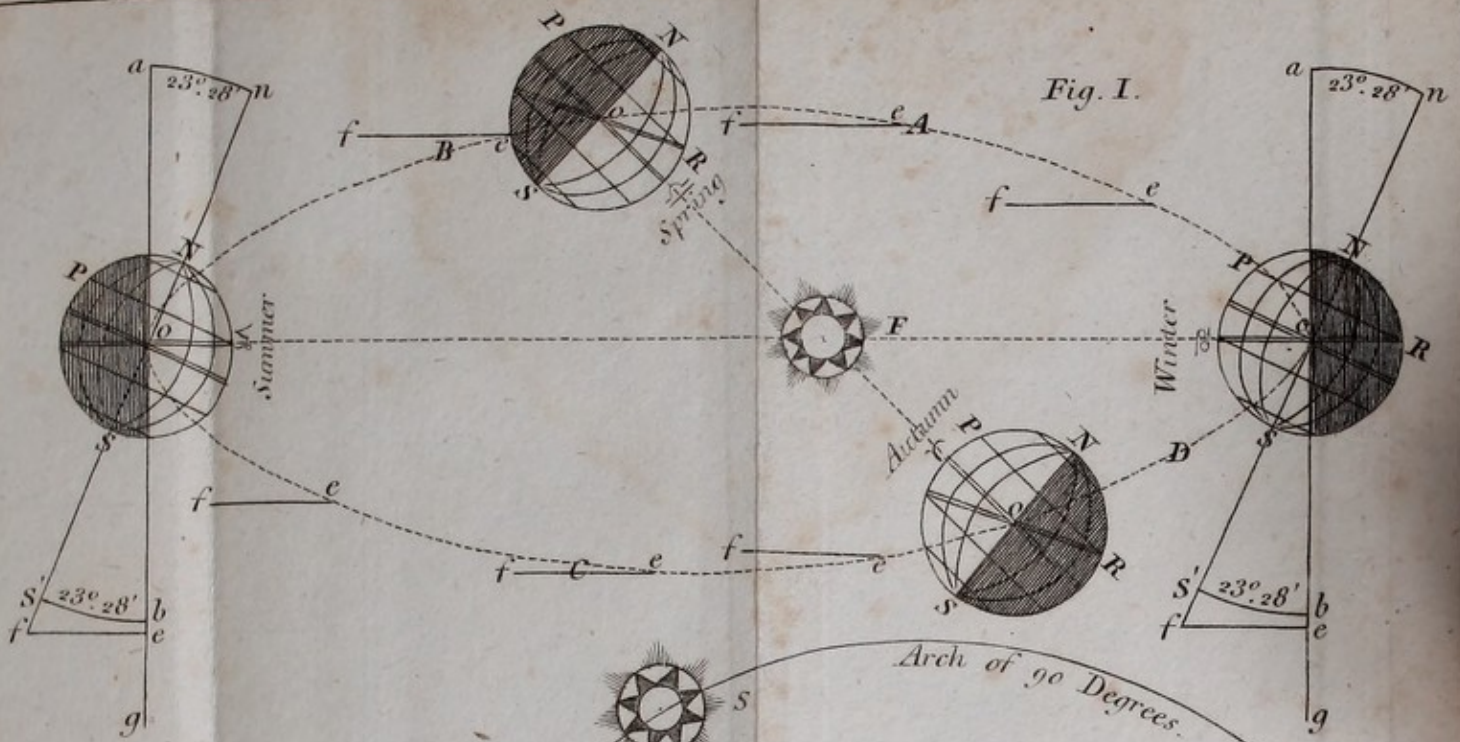



Fig. V.

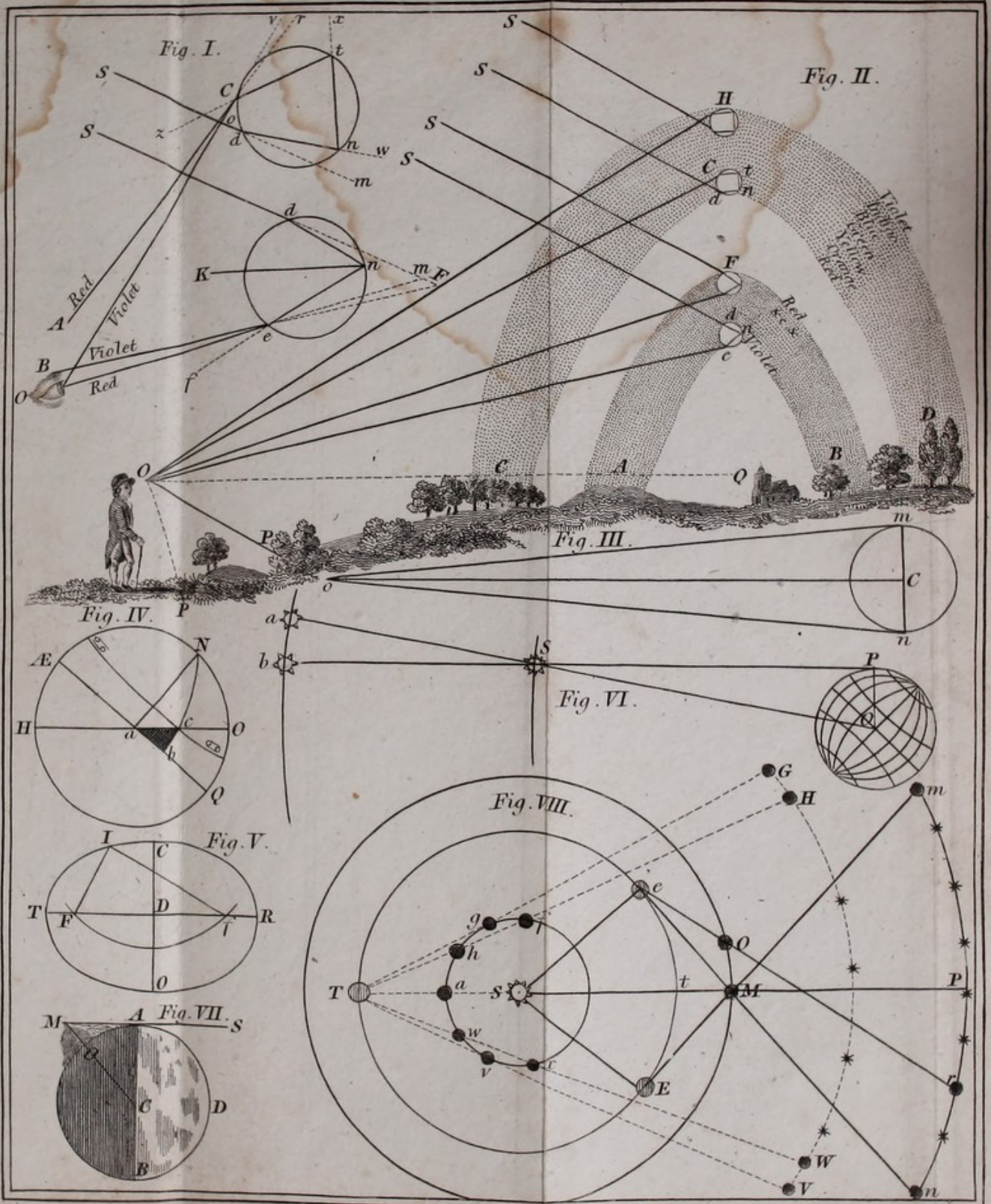






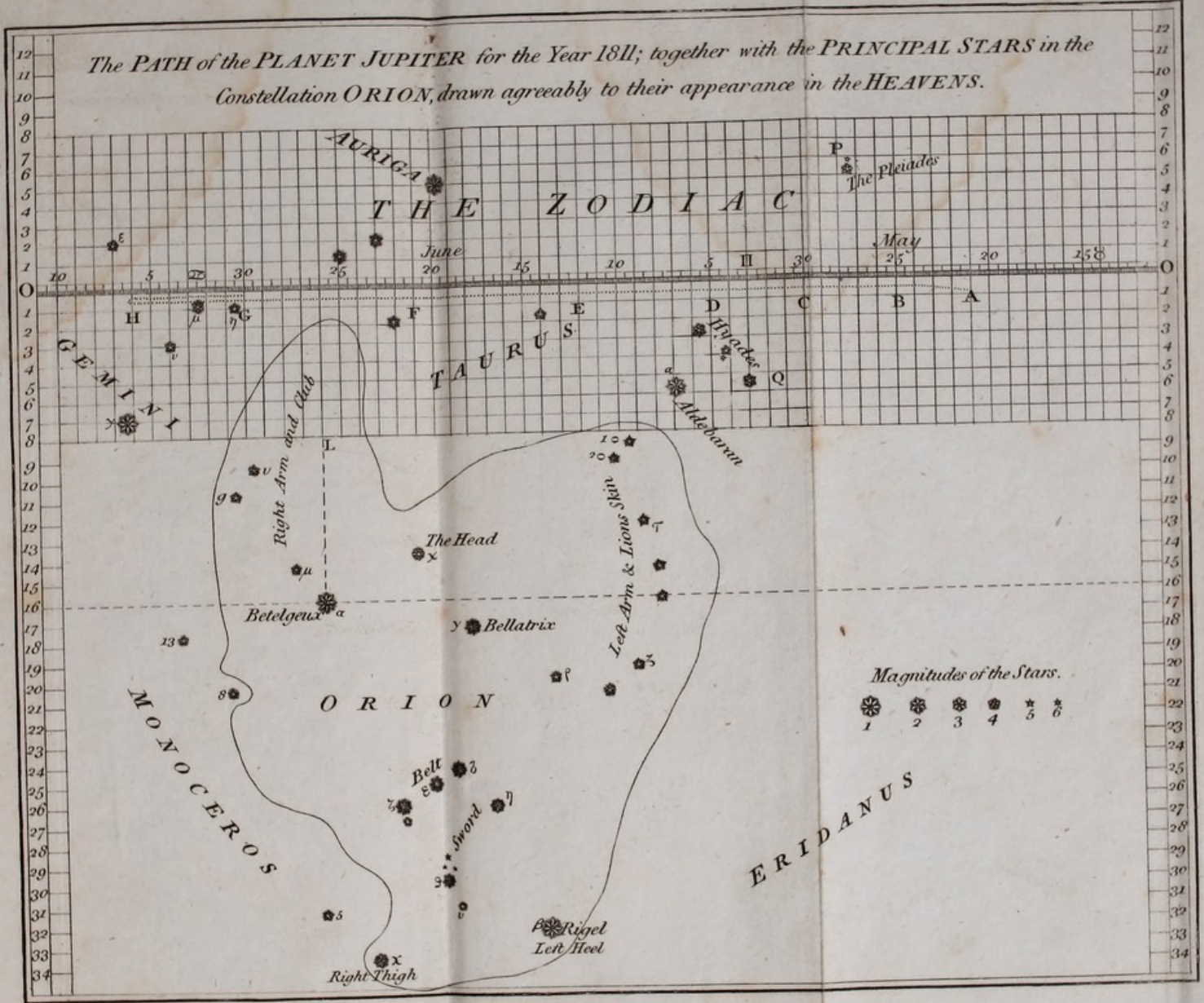










The PATH of the PLANET JUPITER for the Year 1811; together with the PRINCIPAL STARS in the Constellation ORION, drawn agreeably to their appearance in the HEAVENS.



Magnitudes of the Stars.

- 1
- 2
- 3
- 4
- 5
- 6





Office of the Treasurer

240 Thousand miles

4000 some

3985 real

7970 interest

95000000 sum

James D. Taylor

elongation

